
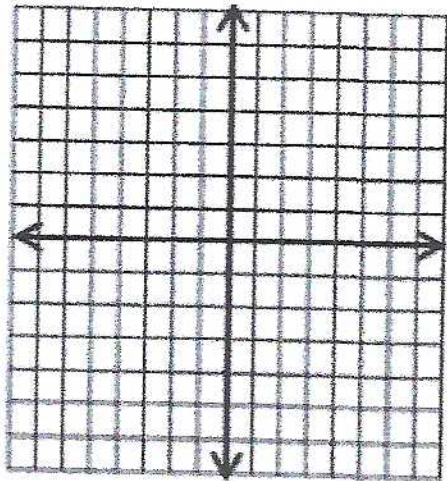


Chapter 3: Quadratic Function

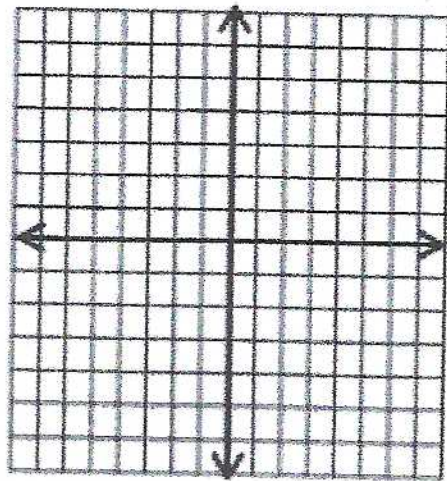
Axis of Symmetry of Quadratic Functions

 Graph the following quadratic equation, then find the axis of symmetry of the quadratic function.

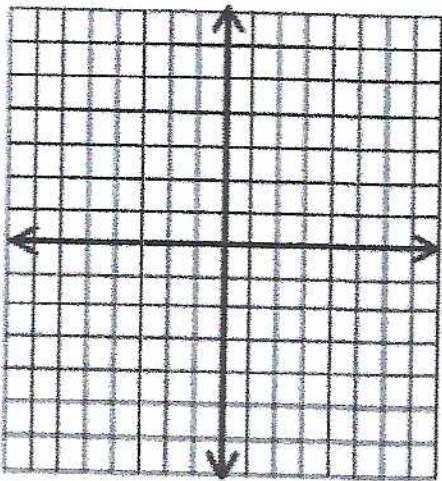
1) $y = x^2 - 4x + 6$



2) $y = x^2 + 8x + 12$



3) $y = x^2 + 6x + 12$



4) $y = x^2 + 4x - 32$

