

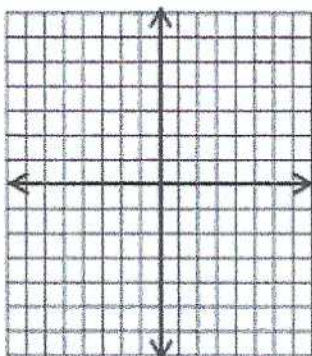


Chapter 7: Functions Operations

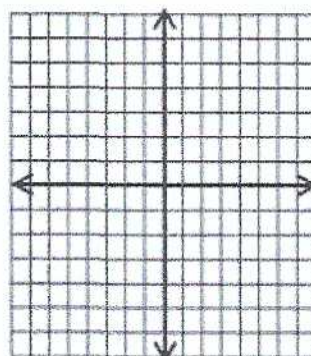
Graphing Functions

 Graph the following functions.

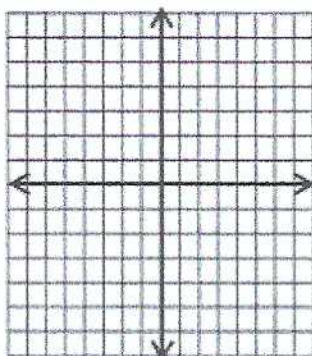
1) $y = 2x - 5$



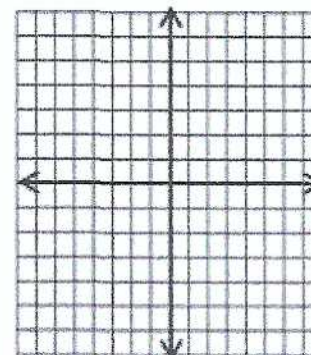
2) $y = 4x + 3$



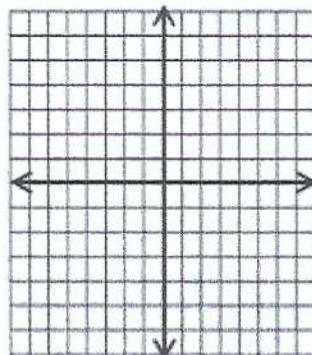
3) $y = 3x - 6$



4) $y = 4x + 8$



5) $y = 5x + 7$



6) $y = -6x + 9$

