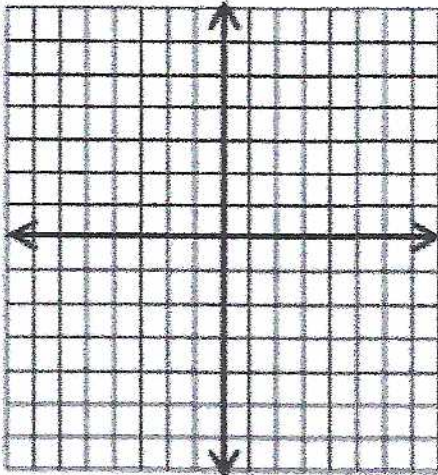


Chapter 3: Quadratic Function

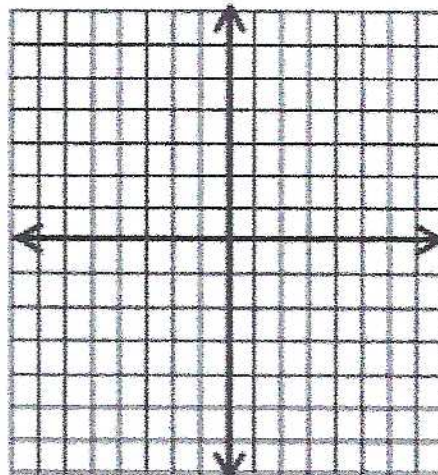
Graphing Quadratic Inequalities

Sketch the graph of each quadratic inequality.

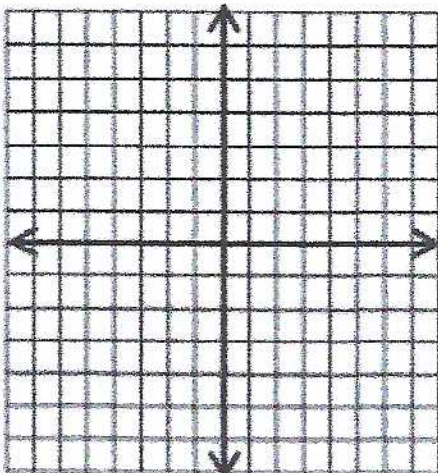
1) $y > -2x^2$



2) $y < 3x^2$



3) $y \geq -3x^2$



4) $y < x^2 + 4$

