

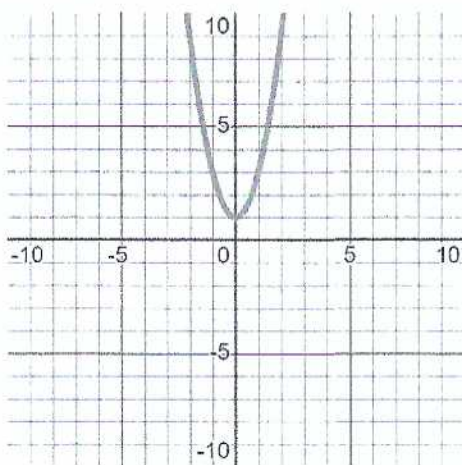
Chapter 7: Functions Operations

Positive, Negative, Increasing, and Decreasing Functions on Intervals

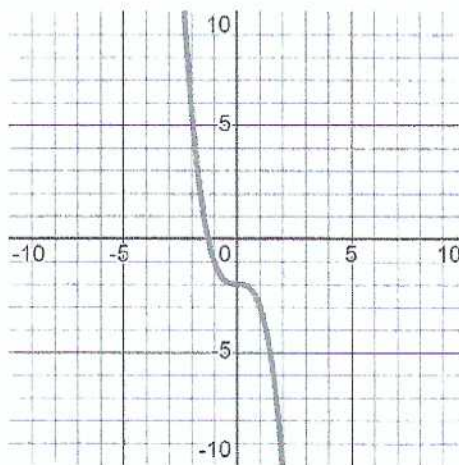
 Determine the intervals where the function is increasing and decreasing.

Submit your solution in interval notation.

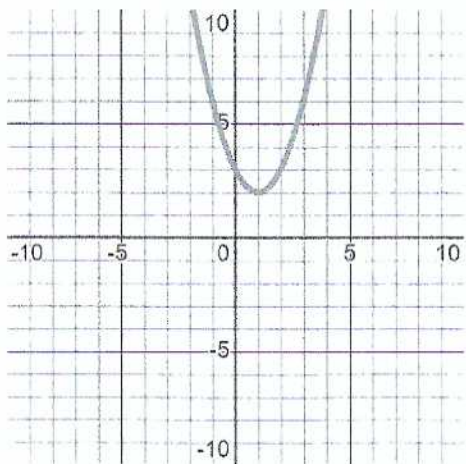
1) $2x^2 + 1$



2) $-x^3 - 2$



3) $(x - 1)^2 + 2$



4) $x^3 - 2x^2 - 5$

