

Find more at

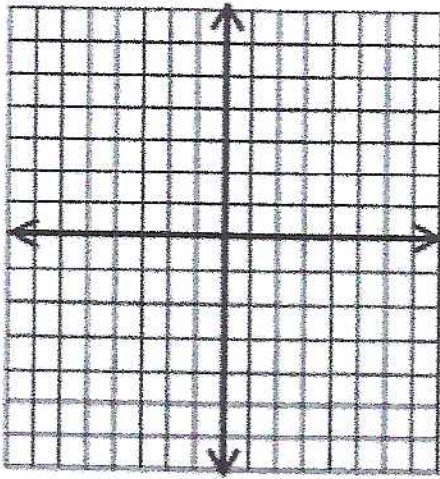


### Chapter 3: Quadratic Function

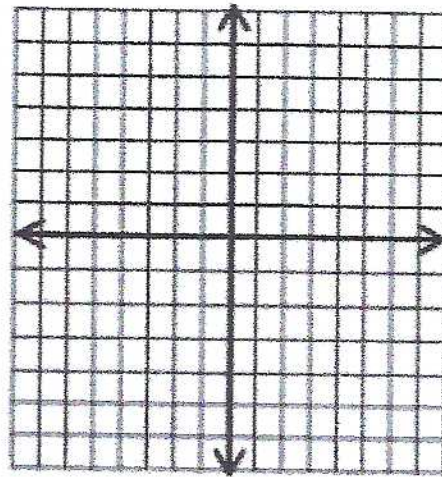
## Solve a Quadratic Equation by Graphing

 Solve the following quadratic equation using graphing.

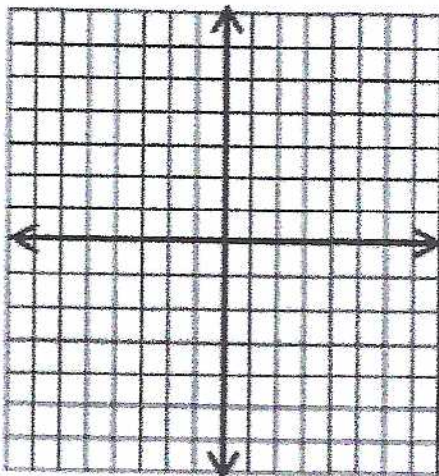
1)  $x^2 + 4x - 5 = 0$



2)  $x^2 - 8x + 15 = 0$



3)  $x^2 + 3x - 28 = 0$



4)  $x^2 - 3x - 18 = 0$

