

Please check the examination details below before entering your candidate information

Candidate surname					Other names				
Centre Number				Candidate Number					
<input type="text"/>	<input type="text"/>	<input type="text"/>	<input type="text"/>	<input type="text"/>	<input type="text"/>	<input type="text"/>	<input type="text"/>	<input type="text"/>	<input type="text"/>

Pearson Edexcel Level 1/Level 2 GCSE (9–1)

Time 1 hour 45 minutes

Paper reference **1CH0/2F**

Chemistry

PAPER 2:

Foundation Tier

You must have:
Calculator, ruler

Total Marks

Instructions

- Use **black** ink or ball-point pen.
- **Fill in the boxes** at the top of this page with your name, centre number and candidate number.
- Answer **all** questions.
- Answer the questions in the spaces provided
– *there may be more space than you need.*
- Calculators may be used.
- Any diagrams may NOT be accurately drawn, unless otherwise indicated.
- You must **show all your working out** with **your answer clearly identified** at the **end of your solution**.

Information

- The total mark for this paper is 100.
- The marks for **each** question are shown in brackets
– *use this as a guide as to how much time to spend on each question.*
- In questions marked with an **asterisk** (*), marks will be awarded for your ability to structure your answer logically, showing how the points that you make are related or follow on from each other where appropriate.
- There is a periodic table on the back cover of the paper.

Advice

- Read each question carefully before you start to answer it.
- Try to answer every question.
- Check your answers if you have time at the end.

Turn over ►

P69486A

©2022 Pearson Education Ltd.

Q:1/1/1/1/1/




Pearson

Answer ALL questions. Write your answers in the spaces provided.

Some questions must be answered with a cross . If you change your mind about an answer, put a line through the box and then mark your new answer with a cross .

- 1 Figure 1 shows toothbrushes in a container.




Figure 1

- (a) The toothbrush handles are made of plastic (polymer).

(i) Give a reason why plastic is a suitable material to make a toothbrush handle.

(1)

.....

.....

(ii) Some toothbrush handles are made of wood, not plastic.

Explain a disadvantage of using plastics.

(2)

.....

.....



(b) The container is made of a ceramic material.

Which is a property of the ceramic that makes it suitable for the container?

(1)

- A** it will break if dropped
- B** it does not react with water
- C** it melts at over 2 000 °C
- D** it is a good conductor of heat

(c) In some countries, toothpastes contain nanoparticles of silver.

Which statement describes the size of a nanoparticle?

(1)

- A** the size of an electron
- B** the size of an atom
- C** the size of a few hundred atoms
- D** the size of 1 million molecules

DO NOT WRITE IN THIS AREA

DO NOT WRITE IN THIS AREA

DO NOT WRITE IN THIS AREA



(d) Toothpastes contain abrasives and other substances to make them effective.

Figure 2 is a pie chart of the percentage composition by volume of one toothpaste.

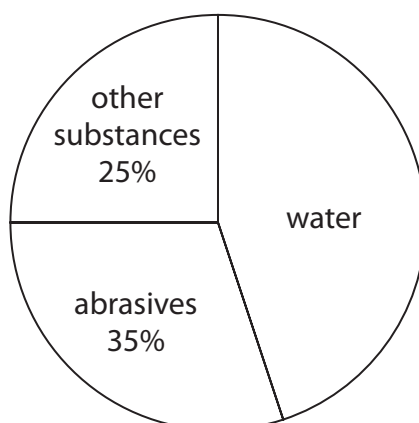


Figure 2

Calculate the volume of water in 150 cm^3 of this toothpaste.

(2)

.....
.....
volume of water = cm^3

(Total for Question 1 = 7 marks)



2 This question is about elements in group 1 of the periodic table.

(a) Figure 3 shows the symbols of the first three elements in group 1 of the periodic table and their melting points.

symbol	melting point in °C
Li	181
Na	98
K	64

Figure 3

Use the periodic table to answer these questions.

(i) Give the symbol of **another** element in group 1.

(1)

.....

(ii) Give the atomic number of lithium.

(1)

.....

(iii) Describe the trend in the melting points of the elements in Figure 3.

(2)

.....

.....

DO NOT WRITE IN THIS AREA

DO NOT WRITE IN THIS AREA

DO NOT WRITE IN THIS AREA



(b) The elements in group 1 react very vigorously with water.

A student suggests this method to see what happens when sodium reacts with water.

- step 1** put on safety glasses and a laboratory coat
- step 2** cut a $2\text{ cm} \times 2\text{ cm} \times 2\text{ cm}$ cube of sodium
- step 3** put a few drops of water in the container shown in Figure 4
- step 4** add the sodium to the water in the container and observe the reaction

(i) Figure 4 shows a diagram of the container the student suggested for step 3.



Figure 4

Give the name of the container shown in Figure 4.

(1)

.....



(ii) A teacher says that the method is not safe because the reaction is too vigorous.

Explain changes that could be made to step 2 and to step 3 that would make the method safer.

(3)

step 2: change and explanation

.....

.....

.....

step 3: change and explanation

.....

.....

.....

(Total for Question 2 = 8 marks)

DO NOT WRITE IN THIS AREA

DO NOT WRITE IN THIS AREA

DO NOT WRITE IN THIS AREA



3 Compounds are tested to see if they contain chloride, bromide or iodide ions.

Figure 5 shows a flow chart of this test.

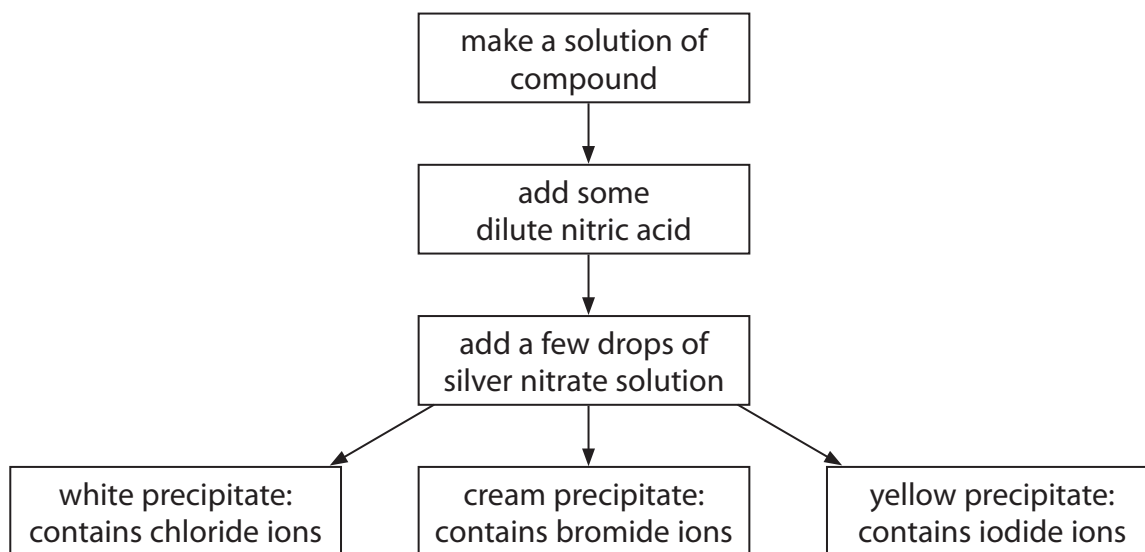


Figure 5

(a) (i) Describe how to make a solution from a solid in a test tube.

(2)

(ii) Give the name of the apparatus that should be used to add a few drops of silver nitrate solution to the test tube.

(1)

(iii) When an equation is written for this reaction, which state symbol is used for the silver nitrate solution?

(1)

- A** aq
- B** g
- C** l
- D** s



- (b) (i) When one compound is tested, a precipitate is seen.

State what you **see** when a precipitate forms.

(1)

- (ii) Using Figure 5, name the ion in the compound that causes a cream precipitate.

(1)

ion

- (c) A compound of potassium is tested.
It forms a white precipitate.

- (i) Using Figure 5, name the compound.

(1)

- (ii) 10.0 g of the solution of the compound of potassium are tested.
1.0 g of dilute nitric acid is added.
4 drops of silver nitrate solution are added, each with a mass of 0.2 g.

Calculate the mass of the mixture at the end of the test.

(2)

mass = g

(Total for Question 3 = 9 marks)

DO NOT WRITE IN THIS AREA

DO NOT WRITE IN THIS AREA

DO NOT WRITE IN THIS AREA



P 6 9 4 8 6 A 0 9 3 2

4 Some reactions are exothermic and some reactions are endothermic.

(a) What does an exothermic reaction always give out?

(1)

- A heat energy
- B light
- C a gas
- D sound

(b) In an experiment, a solid is mixed with a liquid.
The temperature change of the mixture is measured.

Figure 6 shows the apparatus that is used.

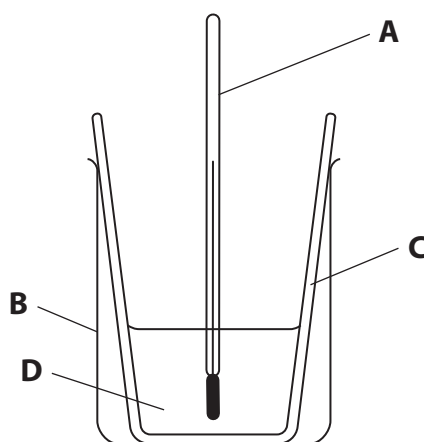


Figure 6

(i) Give the letter of the piece of apparatus, **A**, **B**, **C** or **D**, in Figure 6 that is used to measure the temperature.

(1)

(ii) Give the name of the piece of apparatus **B** shown in Figure 6.

(1)

(iii) The piece of apparatus labelled **C** is made from polystyrene.

State why polystyrene is a better material than glass for this piece of apparatus.

(1)

DO NOT WRITE IN THIS AREA

DO NOT WRITE IN THIS AREA

DO NOT WRITE IN THIS AREA



(iv) The results of the experiment are given in Figure 7.

temperature of liquid at start in °C	18.6
temperature of products at end in °C	16.1

Figure 7

Calculate the change in temperature.

Give a sign and a unit in your answer.

(3)

temperature change =

(v) The solid used in this experiment contained only NH_4^+ ions and NO_3^- ions.

Give the formula and the name of the solid.

(2)

formula

name

(Total for Question 4 = 9 marks)

DO NOT WRITE IN THIS AREA

DO NOT WRITE IN THIS AREA

DO NOT WRITE IN THIS AREA



P 6 9 4 8 6 A 0 1 1 3 2

5 (a) Figure 8 shows one molecule of a compound obtained from crude oil.

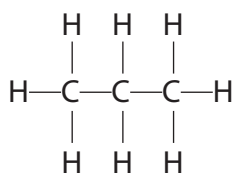


Figure 8

(i) Give the names of the **two** elements in this molecule.

(2)

.....
.....

(ii) What is the molecule in Figure 8?

(1)

- A** an oxide
- B** a chain molecule
- C** a fullerene
- D** a ring molecule

(iii) What is the relative formula mass of the compound in Figure 8?

(relative atomic masses: H = 1.0, C = 12)

(1)

- A** 13
- B** 42
- C** 44
- D** 96

DO NOT WRITE IN THIS AREA

DO NOT WRITE IN THIS AREA

DO NOT WRITE IN THIS AREA



(b) Crude oil can be separated into different fractions.

Draw **one** straight line from each fraction to a use of that fraction.

(3)

fraction

use

petrol ●

kerosene ●

bitumen ●

● fuel for aircraft

● fuel for ships

● fuel for cars

● making plastic

● extracting iron

● making road surfaces

(c) Hydrogen chloride gas and sulfur dioxide gas are dissolved in separate test tubes of water.

Blue litmus paper is dipped into each test tube.

State and explain the colour change you would observe in each test tube.

(3)

.....

.....

.....

.....

.....

(Total for Question 5 = 10 marks)

DO NOT WRITE IN THIS AREA

DO NOT WRITE IN THIS AREA

DO NOT WRITE IN THIS AREA



P 6 9 4 8 6 A 0 1 3 3 2

6 This question is about elements in group 7, the halogens.

(a) Which halogen is a green gas at room temperature and pressure?

(1)

- A bromine
- B chlorine
- C fluorine
- D iodine

(b) Bromine, chlorine and iodine all react with heated iron wool.

Figure 9 shows the speed of these reactions.

halogen	description of reaction with heated iron wool
bromine	reacts quickly
chlorine	reacts very quickly
iodine	reacts slowly

Figure 9

(i) When iron wool is heated with chlorine, iron chloride is formed.

Write the word equation for this reaction.

(2)

.....

.....

(ii) Give the name of the halogen in Figure 9 that is the most reactive with iron.

(1)

.....

DO NOT WRITE IN THIS AREA

DO NOT WRITE IN THIS AREA

DO NOT WRITE IN THIS AREA



(iii) 34.4% of the mass of iron chloride is iron.

Calculate the mass of iron and the mass of chlorine in 125 g of iron chloride.

(3)

mass of iron = g mass of chlorine = g

(c) Alkenes react with halogens.

When iron chloride is added to the reaction mixture, the reaction is much faster but the products are the same.

Use words from the box to complete the sentences.

an acid a catalyst higher lower a reactant unchanged

(2)

The iron chloride speeds up the reaction because it is

After the reaction, the mass of iron chloride is

(Total for Question 6 = 9 marks)

DO NOT WRITE IN THIS AREA

DO NOT WRITE IN THIS AREA

DO NOT WRITE IN THIS AREA



P 6 9 4 8 6 A 0 1 5 3 2

7 The structure of one molecule of a compound is shown in Figure 10.

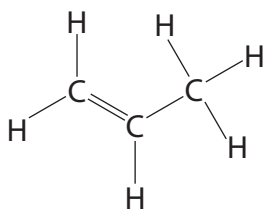


Figure 10

(a) What is the molecular formula of the compound in Figure 10?

(1)

- A CH
- B CH₂
- C 3C6H
- D C₃H₆

(b) The compound in Figure 10 is an unsaturated hydrocarbon.

State why the compound is described as an **unsaturated hydrocarbon**.

(3)

unsaturated

.....

.....

hydrocarbon

.....

.....



- (c) Many molecules of the compound in Figure 10 combine to form substance Y.
Figure 11 shows part of a molecule of substance Y.

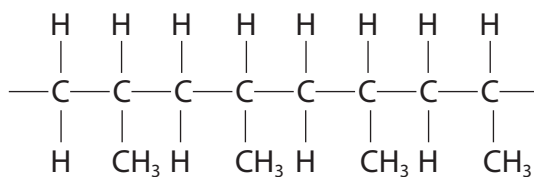


Figure 11

- (i) What type of substance is Y?

(1)

- A** a composite
- B** a nanoparticle
- C** a polymer
- D** a protein

- (ii) One molecule of the compound in Figure 10 has a mass of 6.98×10^{-23} g.

64 800 of these molecules combine to form one molecule of Y.

Calculate the mass of this molecule of Y in g.

(2)

.....

.....

mass of one molecule of Y = g

DO NOT WRITE IN THIS AREA

DO NOT WRITE IN THIS AREA

DO NOT WRITE IN THIS AREA



P 6 9 4 8 6 A 0 1 7 3 2

- * (d) Alkanes can be burned in air.
Different products can be formed as the combustion of alkanes can be complete or incomplete.

An investigation was carried out to compare the energy released when the first four alkanes in the homologous series were burned.

Equal amounts of these alkanes were burned to heat 100 cm^3 of water.

The temperature change for each alkane is shown in Figure 12.

alkane	temperature change in $^{\circ}\text{C}$
methane	9
ethane	16
propane	22
butane	29

Figure 12

Discuss the complete and incomplete combustion of these alkanes and the trend in the energy changes they produced.

You should give word equations in your answer.

(6)

.....

.....

.....

.....

.....

.....

.....

.....

.....

.....

.....

.....

.....

.....

.....

.....

.....

.....

.....

.....

.....

.....

DO NOT WRITE IN THIS AREA

DO NOT WRITE IN THIS AREA

DO NOT WRITE IN THIS AREA



DO NOT WRITE IN THIS AREA

DO NOT WRITE IN THIS AREA

DO NOT WRITE IN THIS AREA

Large area with horizontal dotted lines for writing.

(Total for Question 7 = 13 marks)



- 8 A student used the apparatus in Figure 13 to investigate the rate of the reaction between a metal and dilute hydrochloric acid.

Pieces of the metal were placed in dilute hydrochloric acid in the flask, and the total volume of gas produced was measured every minute.

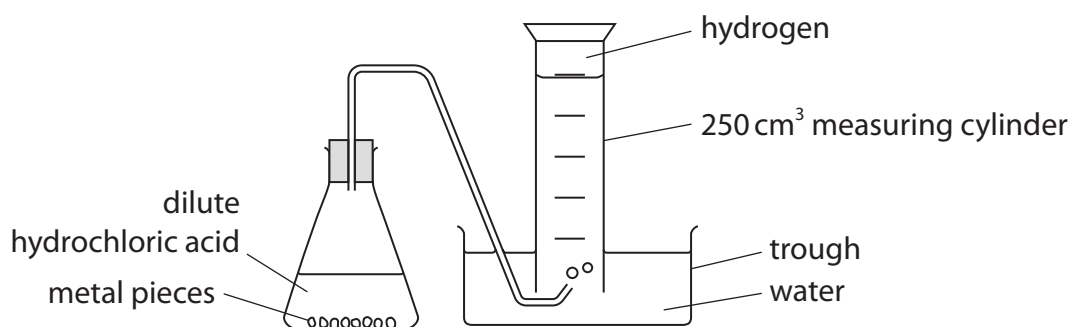


Figure 13

- (a) Figure 14 shows a graph of the student's results.

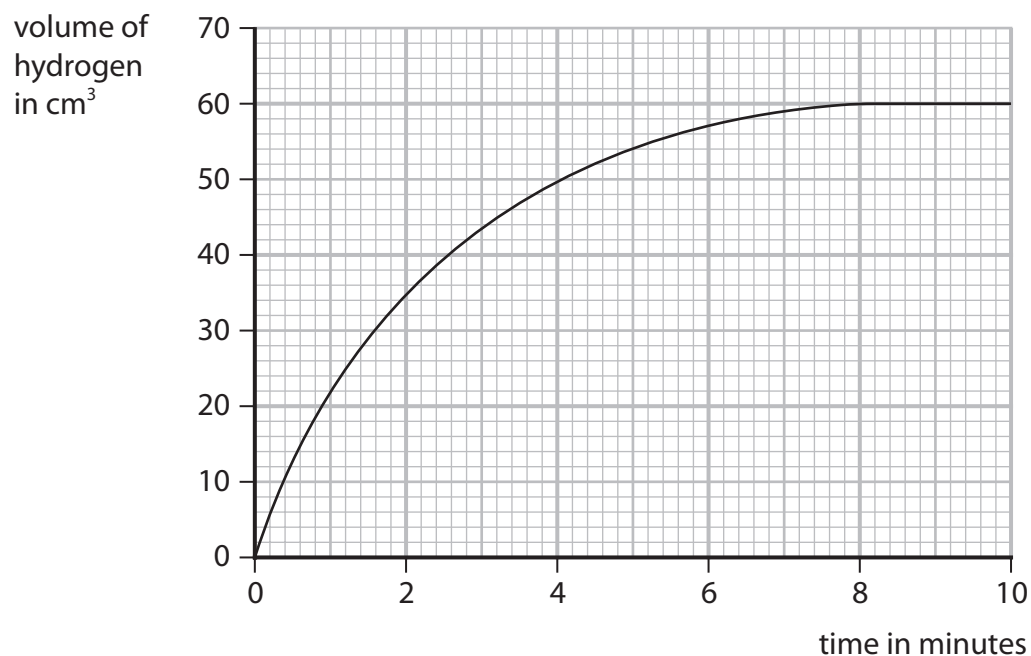


Figure 14

DO NOT WRITE IN THIS AREA

DO NOT WRITE IN THIS AREA

DO NOT WRITE IN THIS AREA



- (i) Name a piece of apparatus that would be better to measure the volume of gas produced, instead of the 250 cm³ measuring cylinder.

Give a reason for your answer.

(2)

name of apparatus

reason

- (ii) Calculate the mean rate of production of hydrogen over the first 90 seconds, in cm³ per second.

(3)

rate = cm³ per second

- (iii) The student measured the volume of gas for 10 minutes.

State why the measurements could have been stopped at 9 minutes.

(1)

- (b) The experiment was repeated, but with acid of a higher concentration.

The rate of reaction was faster.

- (i) Explain why the rate of reaction increases when the concentration of acid is increased.

(2)

DO NOT WRITE IN THIS AREA

DO NOT WRITE IN THIS AREA

DO NOT WRITE IN THIS AREA



P 6 9 4 8 6 A 0 2 1 3 2

(ii) Another student suggests four other ways of increasing the rate of this reaction.

Which one is correct?

(1)

- A** use the same acid but at a lower temperature
- B** use a larger trough
- C** use a smaller flask
- D** use the same metal but in a powdered form

(c) The apparatus in Figure 13 can be used to measure the rate of the reaction between marble chips and hydrochloric acid.

The student needs different sized marble chips.

Describe how the student can make small and medium sized marble chips from large chips.

(2)

.....

.....

.....

(Total for Question 8 = 11 marks)

DO NOT WRITE IN THIS AREA

DO NOT WRITE IN THIS AREA

DO NOT WRITE IN THIS AREA



DO NOT WRITE IN THIS AREA

DO NOT WRITE IN THIS AREA

DO NOT WRITE IN THIS AREA

BLANK PAGE



9 This question is about gases.

(a) When sodium is added to water, hydrogen gas is produced.

Which observation shows that a gas has been produced?

(1)

- A a white precipitate forms
- B effervescence is seen
- C the sodium sinks in the water
- D the water changes to a pink colour

(b) Some damp litmus paper is placed in a gas.
The litmus paper is bleached.

Which gas bleaches damp litmus paper?

(1)

- A carbon dioxide
- B chlorine
- C hydrogen
- D oxygen

(c) When calcium carbonate is heated it decomposes.



When 5.000 g of calcium carbonate is heated, the mass of solid remaining is 2.800 g.

Calculate the mass of carbon dioxide that has been released.

Give your answer to three significant figures.

(2)

.....
.....
mass of carbon dioxide = g

DO NOT WRITE IN THIS AREA

DO NOT WRITE IN THIS AREA

DO NOT WRITE IN THIS AREA



(d) A diagram of an atom of helium is shown in Figure 15.

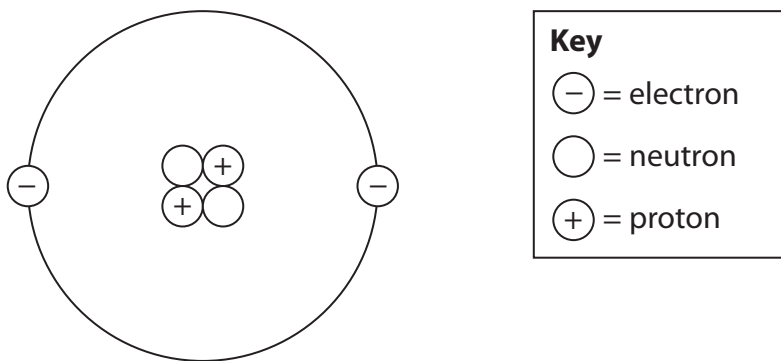


Figure 15

(i) Explain, using Figure 15, why helium is inert.

(2)

(ii) Helium is used to fill balloons.

State one property of helium, apart from it being inert, that makes it suitable for filling balloons.

(1)

DO NOT WRITE IN THIS AREA

DO NOT WRITE IN THIS AREA

DO NOT WRITE IN THIS AREA



P 6 9 4 8 6 A 0 2 5 3 2

DO NOT WRITE IN THIS AREA

DO NOT WRITE IN THIS AREA

DO NOT WRITE IN THIS AREA

Large area with horizontal dotted lines for writing.

(Total for Question 9 = 13 marks)



10 (a) Some acids are used in tests for ions.

A bottle of one acid is shown in Figure 17.

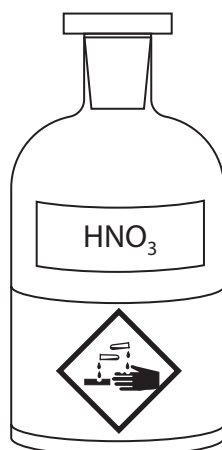


Figure 17

(i) The acid in Figure 17 can be used in the test for carbonate ions.

Explain, giving the name of the hazard symbol shown, what safety precautions should be taken when using this acid.

(2)

.....

.....

.....

.....

(ii) Give the name of the acid shown in Figure 17.

(1)

.....

(iii) State a property of glass that makes it a suitable material to make the container for an acid.

(1)

.....

.....

DO NOT WRITE IN THIS AREA

DO NOT WRITE IN THIS AREA

DO NOT WRITE IN THIS AREA



(b) A teacher conducts a flame test to identify the metal ions in some unknown solids.

- step 1** dip a flame test wire into hydrochloric acid
step 2 dip the flame test wire into the unknown solid
step 3 hold the flame test wire above a Bunsen burner flame

(i) This method did not work well.

Explain an improvement that needs to be made to **step 3** to enable a bright flame colour to be produced.

(2)

(ii) Figure 18 shows the results of the flame tests on three compounds, **P**, **Q** and **R**.

compound	flame colour
P	red
Q	lilac
R	blue-green

Figure 18

Use Figure 18 to identify the metal ions in compounds **P**, **Q** and **R**.

(3)

P

Q

R

DO NOT WRITE IN THIS AREA

DO NOT WRITE IN THIS AREA

DO NOT WRITE IN THIS AREA



P 6 9 4 8 6 A 0 2 9 3 2

(c) A flame photometer was used to analyse samples of a solution of metal ions.

Each sample was treated with 5.00 cm^3 of dilute hydrochloric acid.

1.00 dm^3 of the acid contained 219 g of hydrogen chloride.

Calculate the mass of hydrogen chloride in the acid used to test 20 samples.

(2)

mass = g

(Total for Question 10 = 11 marks)

TOTAL FOR PAPER = 100 MARKS

DO NOT WRITE IN THIS AREA

DO NOT WRITE IN THIS AREA

DO NOT WRITE IN THIS AREA



DO NOT WRITE IN THIS AREA

DO NOT WRITE IN THIS AREA

DO NOT WRITE IN THIS AREA

BLANK PAGE



