

Name _____ Date _____

ST. PATRICK'S DAY GRAPH

Find and graph the items listed. Then answer the questions below.



10				
9				
8				
7				
6				
5				
4				
3				
2				
1				



How many of each?

<input type="text"/>		<input type="text"/>	
<input type="text"/>		<input type="text"/>	

Which item did you find the most of?

Which item did you find the least of?

Name _____ Date _____

ST. PATRICK'S DAY GRAPH





Find and graph the items listed. Then answer the questions below.



10				
9				
8				
7				
6				
5				
4				
3				
2				
1				



How many of each?

<input type="text"/>		<input type="text"/>	
<input type="text"/>		<input type="text"/>	


Which item did you find the most of?

Which item did you find the least of?

Name _____ Date _____

ST. PATRICK'S DAY GRAPH


Find and graph the items listed. Then answer the questions below.



10				
9				
8				
7				
6				
5				
4				
3				
2				
1				



How many of each?



Which item did you find the most of?

Which item did you find the least of?