

Teacher Masters

Kinder

Addition &

Subtraction

You may copy the following pages for your students to use with their Pathway Activity Cards.

Name: _____

Pathway A

Student Page: Task Add #1

Draw here!

#1

#2

#3

#4

Name: _____

Pathway B

Student Page: Task Add #1

$$2 + 3$$

$$1 + 4$$

$$5 + 0$$

Name: _____

Pathway C

Student Page: Task Add #1

Draw here!	Number Sentence
#1	
#2	
#3	
#4	

Name: _____

Pathway A

Student Page: Task Add #2

Draw here!

#1

#2

#3

#4

Name: _____

Pathway B

Student Page: Task Add #2

$4 + 6$	$5 + 5$
$2 + 8$	$7 + 3$

Name: _____

Pathway C







Student Page: Task Add #2

Draw here!	Number Sentence
#1	
#2	
#3	
#4	

Name: _____

Pathway A


Student Page: Task Add #3


	
	
	


Name: _____

Pathway B

Student Page: Task Add #3

Inside	Outside	Total Bears
		

Inside	Outside	Total Bears
		

Inside	Outside	Total Bears
		

Name: _____

Pathway C

Student Page: Task Add #3

$$\begin{array}{ccc} \square & + & \square = 5 \\ \text{inside} & & \text{outside} \end{array}$$

$$\begin{array}{ccc} \square & + & \square = 5 \\ \text{inside} & & \text{outside} \end{array}$$

$$\begin{array}{ccc} \square & + & \square = 5 \\ \text{inside} & & \text{outside} \end{array}$$

$$\begin{array}{ccc} \square & + & \square = 5 \\ \text{inside} & & \text{outside} \end{array}$$







$$\begin{array}{ccc} \square & + & \square = 5 \\ \text{inside} & & \text{outside} \end{array}$$

$$\begin{array}{ccc} \square & + & \square = 5 \\ \text{inside} & & \text{outside} \end{array}$$

Name: _____

Pathway A





Student Page: Task Add #4

Name: _____

Pathway B

Student Page: Task Add #4

Inside	Outside	Total Bears
		
Inside	Outside	Total Bears
		
Inside	Outside	Total Bears
		
Inside	Outside	Total Bears
		

Name: _____

Pathway C

Student Page: Task Add #4

$$\begin{array}{ccc} \square & + & \square = 10 \\ \text{inside} & & \text{outside} \end{array}$$

$$\begin{array}{ccc} \square & + & \square = 10 \\ \text{inside} & & \text{outside} \end{array}$$

$$\begin{array}{ccc} \square & + & \square = 10 \\ \text{inside} & & \text{outside} \end{array}$$

$$\begin{array}{ccc} \square & + & \square = 10 \\ \text{inside} & & \text{outside} \end{array}$$

$$\begin{array}{ccc} \square & + & \square = 10 \\ \text{inside} & & \text{outside} \end{array}$$


$$\begin{array}{ccc} \square & + & \square = 10 \\ \text{inside} & & \text{outside} \end{array}$$

Name: _____

Pathway A, B and C

Student Page: Task Add #5 and Add #6

DRAW!



Name: _____

Pathway A, B and C

Student Page: Task Subtract #1 and Subtract #2

DRAW!

