



**ANGEL'S PUBLIC  
SCHOOL WISHES  
YOU**  
*A*  
**HAPPY NEW YEAR 2024**

*Happy  
Holidays*



# HOLIDAY HOMEWORK

## **Dear Parents,**

The vacations are back again. It is the time to bond and spend quality time with your family and stay warm in this winter season. While you do so, also make it a point to share your childhood stories with them and keep those beautiful eyes away from electronic gadgets as much as possible. Along with creating memories do take out time for these fun holiday activities to keep them mentally active and curious.

## **Instructions:**

1. Parents are requested to encourage their ward to do the homework independently. Original drawings/ illustrations and creative use of material, wherever required, will be appreciated.
2. The Holiday Homework has been designed not to burden the children with too many assignments and encourage practical learning and creative exhibition of their skills; thus providing ample time to students for leisure activities as well.
3. Worksheets should be done neatly.
4. Devote a fixed amount of time to your homework every day, so that it does not pile up.
5. All homework must be submitted by **Monday, January 8, 2024** to the respective teachers. All assignments are to be done in the school assignment file or as instructed.
6. The project assignment must be completed independently by the students; parents may provide assistance only wherever necessary.



# ANGEL'S PUBLIC SCHOOL

CLASS – III HOLIDAY HOMEWORK FOR WINTER VACATIONS SESSION 2023 – 24


| SUBJECTS | SYLLABUS                                                                                                                                                                                       |
|----------|------------------------------------------------------------------------------------------------------------------------------------------------------------------------------------------------|
| English  | <p>(1) Complete the attached worksheet. [ATTACHMENT-I]</p> <p>(2) What new year resolution did you make this year? Write in 50-100 words. Complete the attached worksheet. [ATTACHMENT-II]</p> |
| Hindi    | कार्यपत्रक को पूरा कीजिए । [ATTACHMENT-III,IV]                                                                                                                                                 |
| Maths    | Solve the given worksheet. [ATTACHMENT-V,VI,VII]                                                                                                                                               |
| EVS      | <p>(1) Complete the attached worksheet. [ATTACHMENT-VIII]</p> <p>(2) Prepare a 3D Model on any one type of Pollution. The reference picture is attached below.</p>                             |



# [ ATTACHMENT - I ]

## Prepositions Garfield

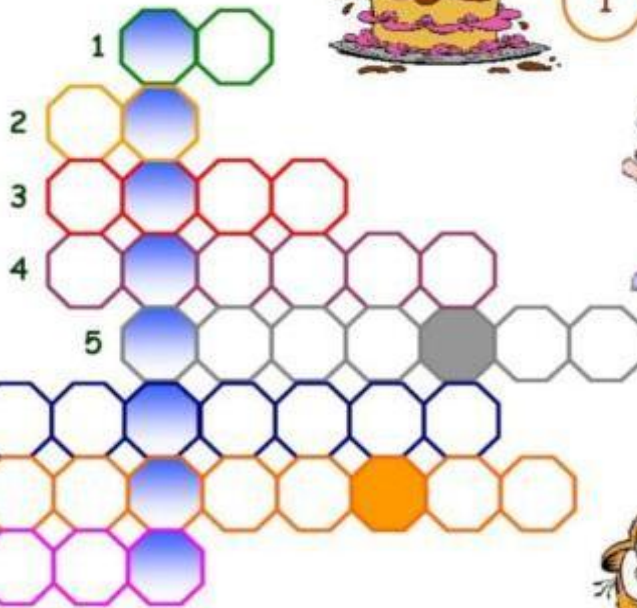
Match the prepositions with the pictures. When you finish write the secret word.



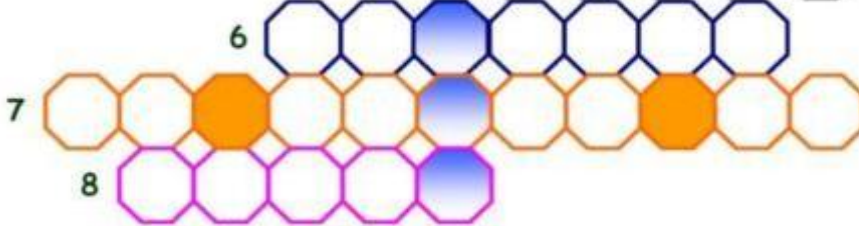
4



1



6



5



8



7



3



2

in front of

in

under

next to

behind

between


over

on

Find the secret word:

Garfield is a good \_\_\_\_\_

[ ATTACHMENT – II ]



**My New Year's resolution is**

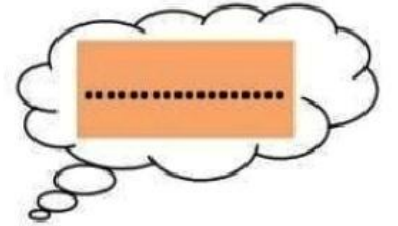
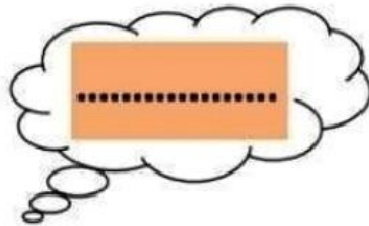
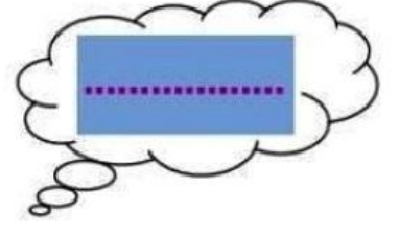
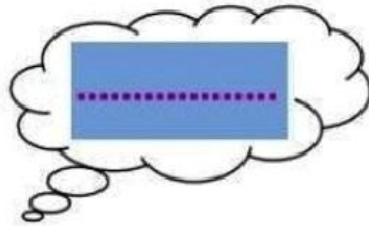



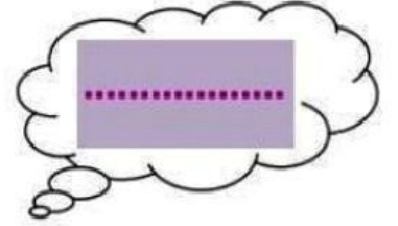
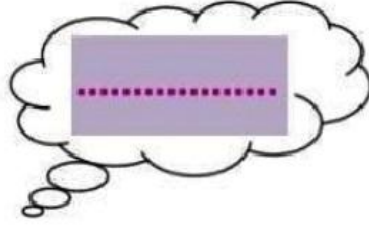
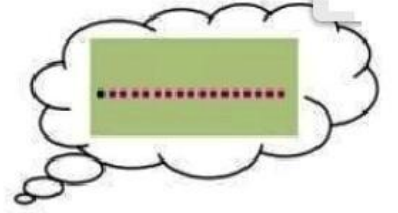
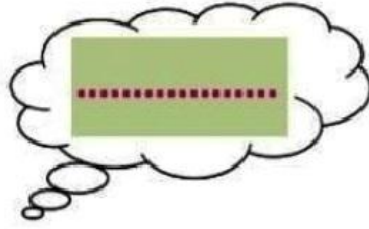
---

---

---

# [ ATTACHMENT - III ]

चित्र पहचानकर उनके दो-दो पर्यायवाची लिखिए -



## [ ATTACHMENT - IV ]

निम्नलिखित अंग्रेजी अंकों को हिंदी अंकों व शब्दों में लिखिए—


### गिनती

अंग्रेजी अंक



हिंदी अंक

शब्दों में


49




39



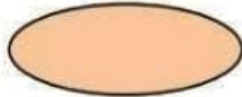
53




46




45




29



36



35



[ ATTACHMENT - V ]


SOLVE THE RUNAWAY



|   |   |   |   |   |   |   |   |  |
|---|---|---|---|---|---|---|---|--|
|   |   |   | 5 |   |   |   |   |  |
|   |   | 2 | x |   | = | 1 | 6 |  |
|   | 8 |   | 9 |   |   |   | x |  |
| 3 | x |   | = | 1 | 2 |   | 0 |  |
|   |   |   | 4 |   |   |   | = |  |
|   | = |   | 5 |   |   |   | 0 |  |
|   | 8 |   |   |   |   |   |   |  |

[ ATTACHMENT - VI ]

SOLVE THE RUNAWAY

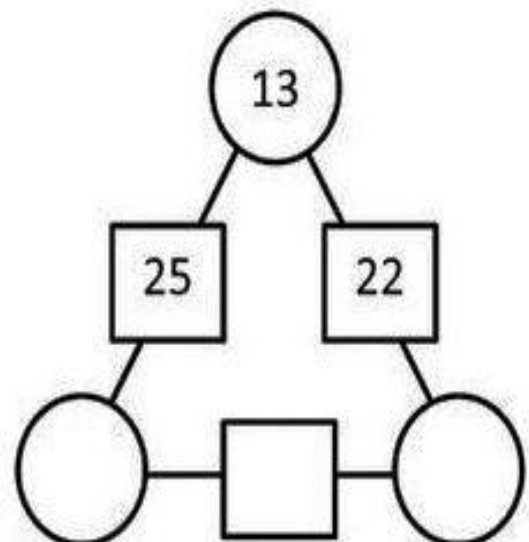
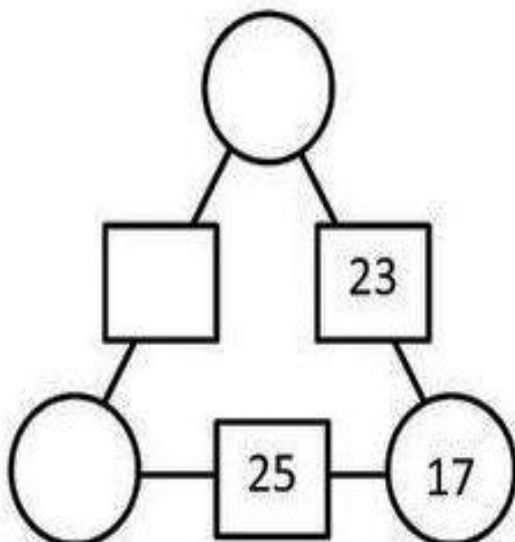
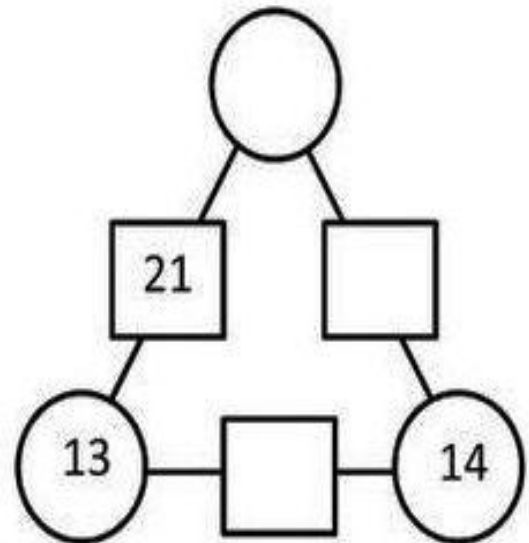
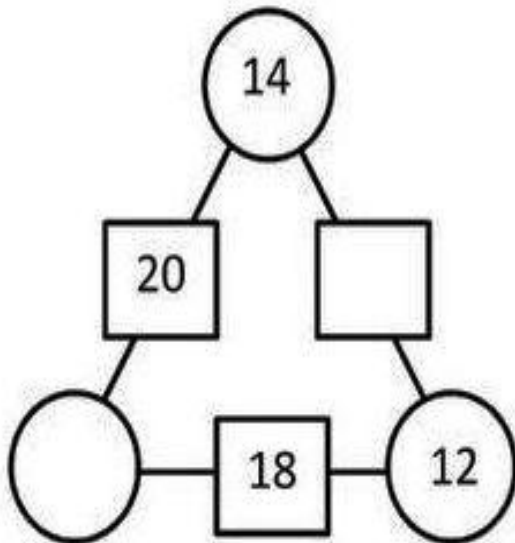
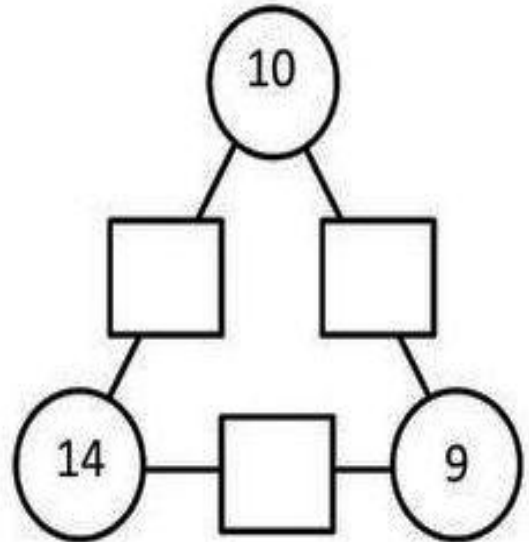
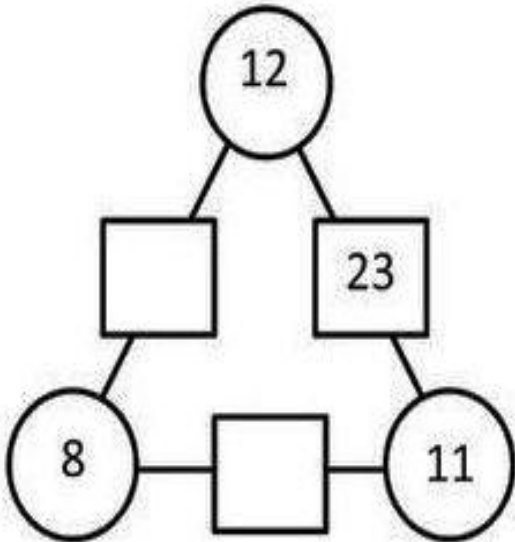


|   |   |   |   |   |   |   |   |   |
|---|---|---|---|---|---|---|---|---|
| 1 | x | 9 | = | 9 |   |   |   |   |
|   |   |   |   | x |   |   |   |   |
|   |   | 6 | x | 8 | = |   |   |   |
|   |   |   |   | = |   |   | x |   |
| 9 |   |   |   | 7 | 3 |   | 7 |   |
| x |   |   |   | 2 | x | 1 | = | 2 |
| 5 |   |   |   |   |   |   | 5 |   |
| = |   |   |   | = |   |   | 6 |   |
|   | x | 8 | = | 3 | 2 |   |   |   |
| 5 |   |   |   |   |   |   |   |   |



## [ ATTACHMENT – VII ]

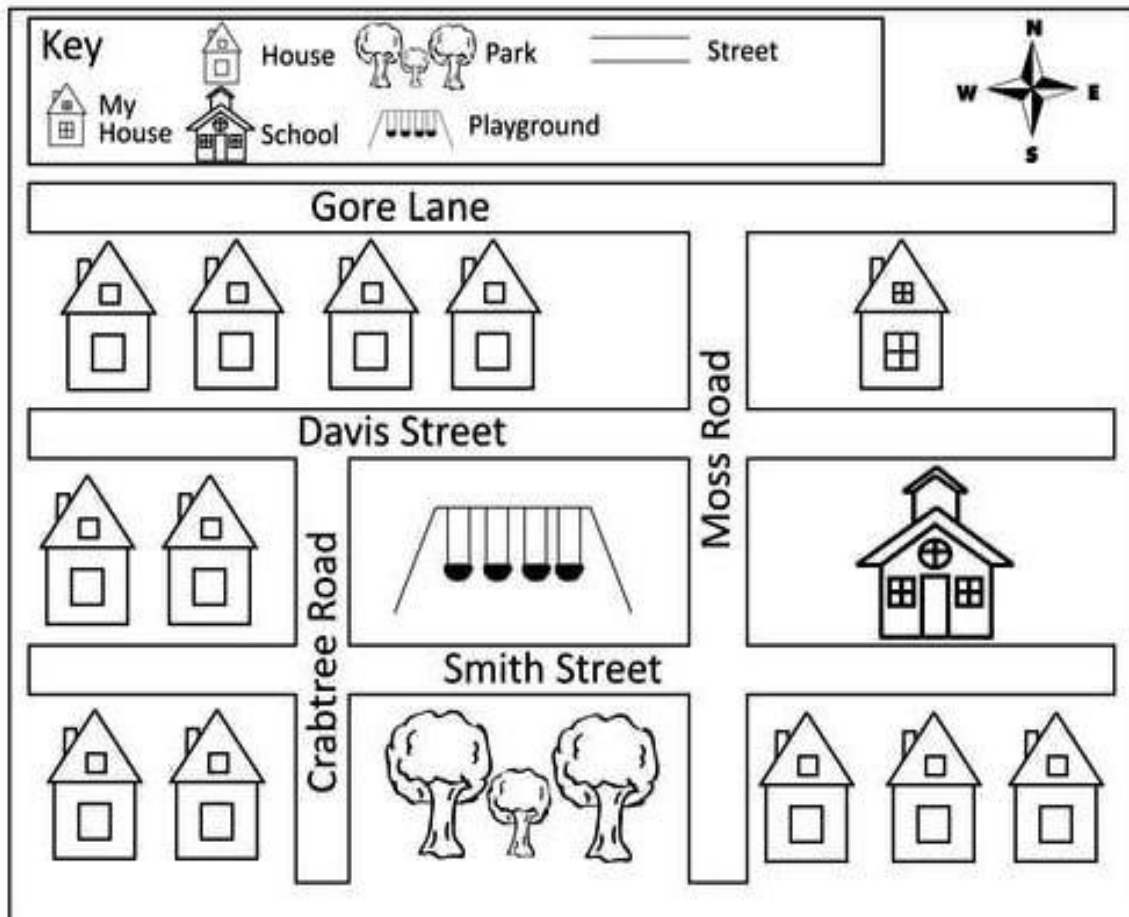
The numbers in the circles added together makes the number in the linking rectangle. Find the missing numbers in this puzzle.



## [ ATTACHMENT – VIII ]

# My Neighborhood

Use the map of the neighborhood below to answer the questions at the bottom of the page.



1. My house is \_\_\_\_\_ of the school. (North, South, East, or West)
2. The \_\_\_\_\_ is south of the playground.
3. To get from my house to the school, you must cross \_\_\_\_\_ Street.
4. The school is \_\_\_\_\_ of the playground. (North, South, East, or West)
5. How many houses are West of Crabtree Road? \_\_\_\_\_
6. How many house are South of Smith Street? \_\_\_\_\_
7. The playground is \_\_\_\_\_ and \_\_\_\_\_ of my house. (North, South, East, or West)
8. The school is \_\_\_\_\_ and \_\_\_\_\_ of the park. (North, South, East, or West)