



**ANGEL'S PUBLIC
SCHOOL WISHES
YOU
A
HAPPY NEW YEAR 2024**

*Happy
Holidays*



HOLIDAY HOMEWORK

Dear Parents,

The vacations are back again. It is the time to bond and spend quality time with your family and stay warm in this winter season. While you do so, also make it a point to share your childhood stories with them and keep those beautiful eyes away from electronic gadgets as much as possible. Along with creating memories do take out time for these fun holiday activities to keep them mentally active and curious.

Instructions:

1. Parents are requested to encourage their ward to do the homework independently. Original drawings/ illustrations and creative use of material, wherever required, will be appreciated.
2. The Holiday Homework has been designed not to burden the children with too many assignments and encourage practical learning and creative exhibition of their skills; thus providing ample time to students for leisure activities as well.
3. Worksheets should be done neatly.
4. Devote a fixed amount of time to your homework every day, so that it does not pile up.
5. All homework must be submitted by **Monday, January 8, 2024** to the respective teachers. All assignments are to be done in the school assignment file or as instructed.
6. The project assignment must be completed independently by the students; parents may provide assistance only wherever necessary.

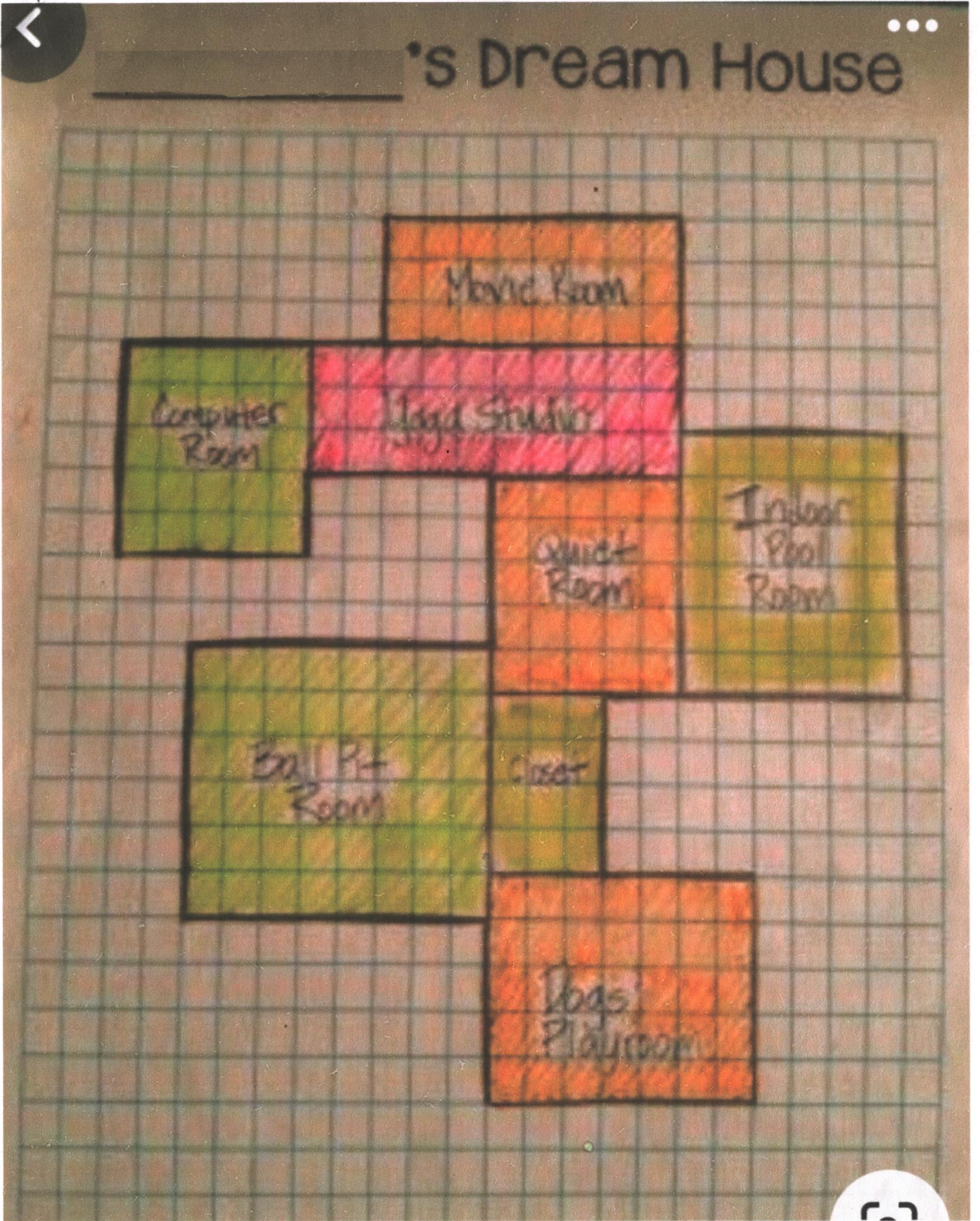


ANGEL'S PUBLIC SCHOOL

CLASS – VI HOLIDAY HOMEWORK FOR WINTER VACATIONS SESSION 2023 – 24


SUBJECTS	SYLLABUS
English	<p>(1) You and your friends visited another planet and befriended an alien named Goloky. Make a poster illustrating Golkey's home and describe it in 50-100 words.</p> <p>(2) Take illustration of page no. 134 of your English Reader book as Reference.</p>
Hindi	<p>नव वर्ष या क्रिसमस किसी एक विषय पर गातिविधि चित्र सहित तैयार करें। (जैसे – कविता, कहानी, अनुच्छेद, कार्ड आदि) ।</p>
Maths	<p>(1) Draw your dream house on a graph paper and calculate the area of that house. Given that each small square is of side 1 Unit. Use the given picture as reference. [ATTACHMENT–I]</p> <p>(2) Worksheet Attached. [ATTACHMENT–II]</p>
Science	<p>(1) Write a short for your School Magazine about that it might be like in 2035 if the city runs out of room for garbage? How would you feel? Follow the guidelines given below to write a story:</p> <p>(a) Identify a short story idea.</p> <p>(b) Understand the structure and goal of your story.</p> <p>(c) Write a story beginning.</p> <p>(d) End the story with a bang.</p> <p>(2) Worksheet Attached. [ATTACHMENT–III]</p>
Social Science	<p>Choose any one state from India. Make a project on it as per the given criteria: (1) Physical features (2) Climate (3) Flora and fauna (4) Occupation.</p>
Art & Craft	<p>Make a butterfly using Card Board.</p>

[ATTACHMENT - I]



[ATTACHMENT – II]

Find the Perimeter enclosed (in black). Give that each small square is of side 1 Unit.

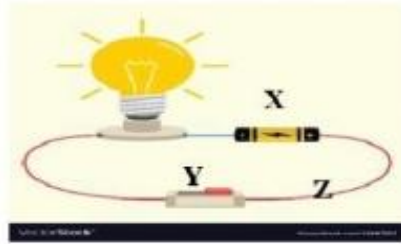


[ATTACHMENT – III]

A. Very short answer questions.

1. Name two succulent plants?
2. Give two examples of periodic motion.
3. What is meant by rectilinear propagation of light?
4. Which device is used to find directions?
5. Why does a fused bulb not glow?
6. Name the two major components of air.
7. What is the sure test for magnetism?
8. What are the soft iron pieces used to store a magnet called?
9. Name one metal that is good conductor of electricity.
10. Give two uses of water.

The diagram shows a simple circuit.



1. Name the parts of the circuit labelled X, Y and Z.
X _____
Y _____
Z _____
2. Write the letter of the path that best matches each statement.
 - i. Provides the power source _____
 - ii. Path for electrons to flow _____
 - iii. Opens or closes the circuit _____
3. Explain what happens to the light bulb when the switch is closed. (1)

4. What is the name given to an object that does not allow electrons to flow through it easily?

5. Which object is the best conductor of electricity?
 - a. Plastic
 - b. Glass
 - c. Cooper
6. Mr. Smith works at an electrical plant. He wears rubber gloves to work every day. Explain why Mr. Smith uses these gloves daily. (1)