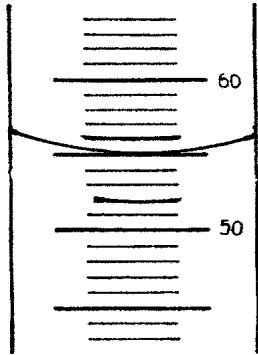


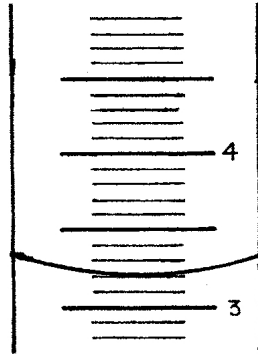
# Science Skills 7

## Reading a Graduated Cylinder

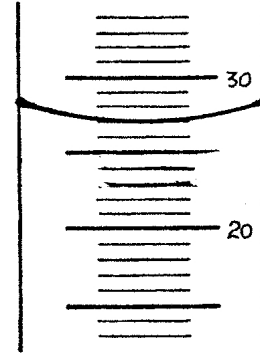
What volume is indicated on each of these graduated cylinders? The unit of volume of is mL.



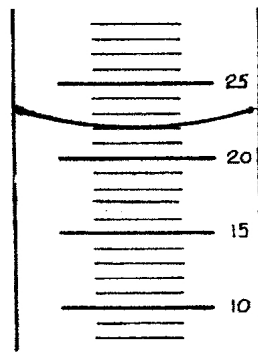
a) \_\_\_\_\_



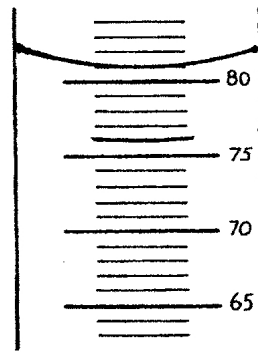
b) \_\_\_\_\_



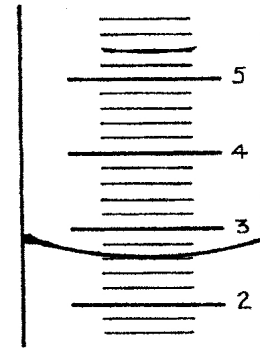
c) \_\_\_\_\_



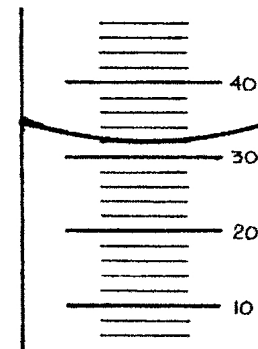
d) \_\_\_\_\_



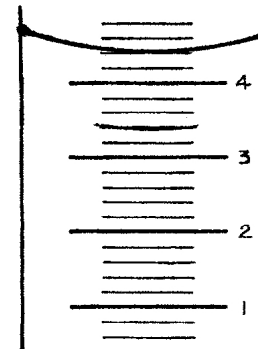
e) \_\_\_\_\_



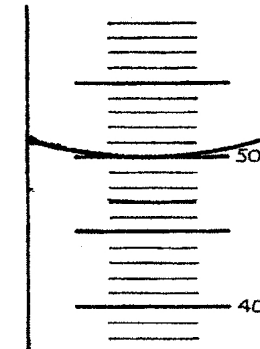
f) \_\_\_\_\_



g) \_\_\_\_\_

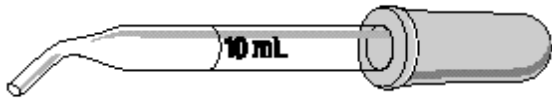


h) \_\_\_\_\_

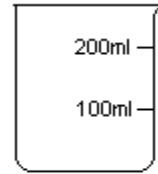


i) \_\_\_\_\_

Look at the pictures below and determine which piece of equipment would be best for measuring each of them. Place your answer in the blank.



Medicine Dropper

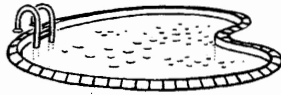


Beaker



Graduated  
Cylinder

1.



2.



3.



4.



5.



6.



7. a small can of soup

8. a raindrop

1. \_\_\_\_\_

2. \_\_\_\_\_

3. \_\_\_\_\_

4. \_\_\_\_\_

5. \_\_\_\_\_

6. \_\_\_\_\_

7. \_\_\_\_\_

8. \_\_\_\_\_