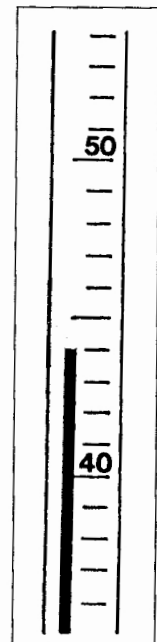
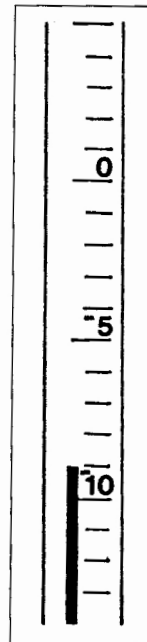
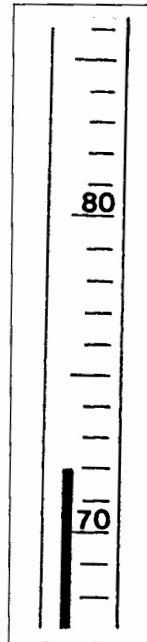
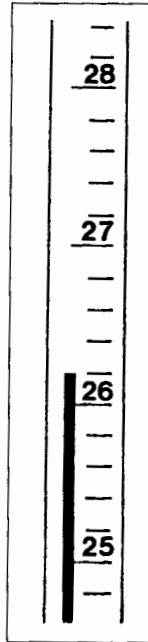
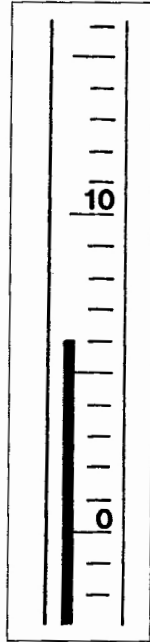
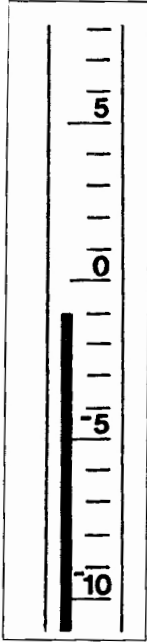


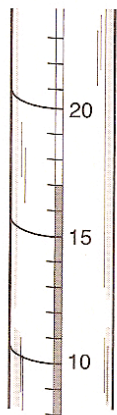
Science Skills 8

Reading a Thermometer

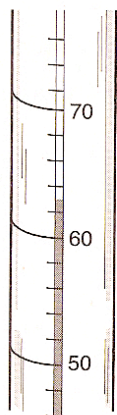
Write the temperature shown on each celsius thermometer in the space provided.




1. _____ 2. _____ 3. _____ 4. _____ 5. _____ 6. _____




A



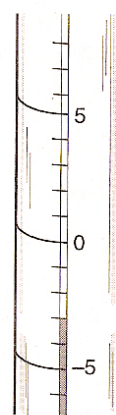
B



C



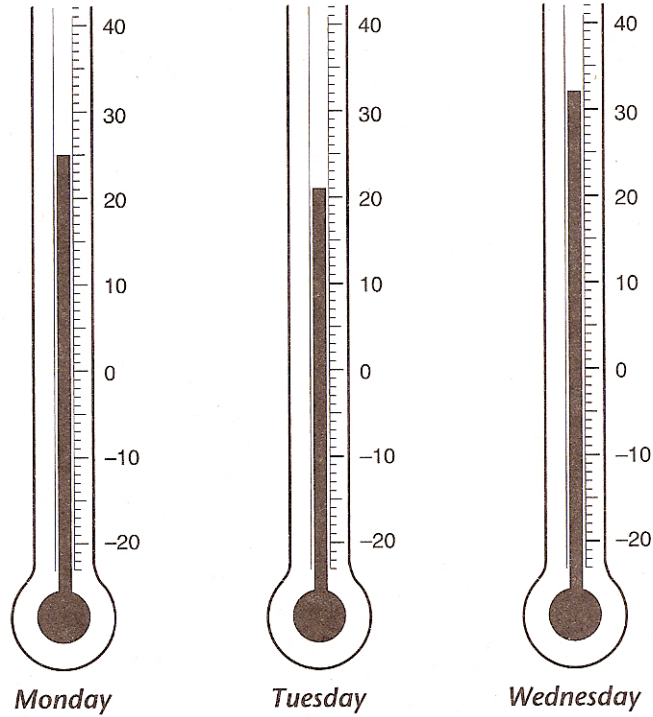
D



E

- _____ 7. What is the temperature on thermometer A?
 _____ 8. What is the temperature on thermometer B?
 _____ 9. What is the temperature on thermometer C?
 _____ 10. What is the temperature on thermometer D?
 _____ 11. What is the temperature on thermometer E?

Below are the high temperatures in Celsius for three different days. Answer the questions below the diagram using the thermometers.



- _____ 12. What was the high temperature on Monday?
- _____ 13. What was the high temperature on Tuesday?
- _____ 14. What was the high temperature on Wednesday?
- _____ 15. What was decrease in temperature from Monday to Tuesday?
- _____ 16. What was the increase in temperature from Tuesday to Wednesday?
- _____ 17. What was the average high temperature for the three days?