

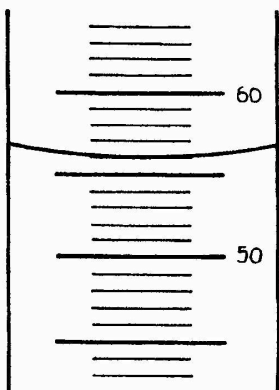
Name _____

period _____

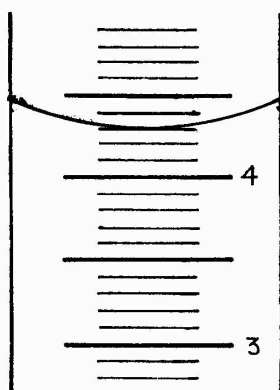
Science Skills 8

Measuring Liquids Grading Answers

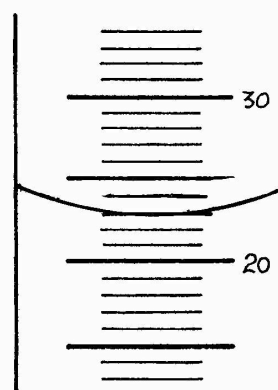
What volume is indicated on each of these graduated cylinders? The unit of volume of is mL.



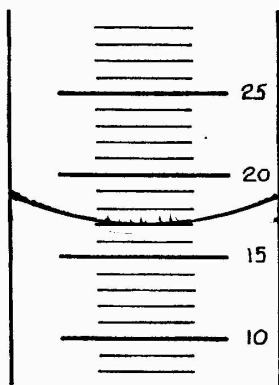
a) _____



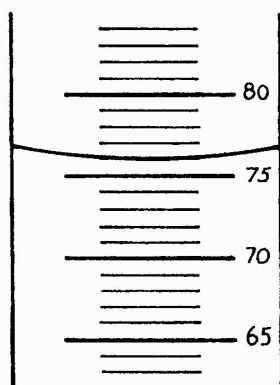
b) _____



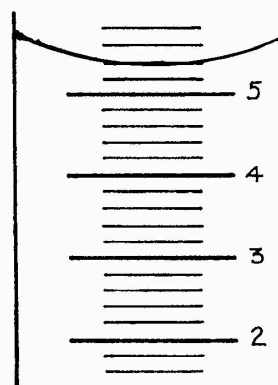
c) _____



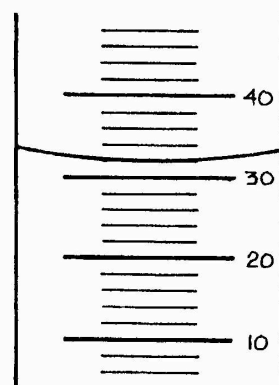
d) _____



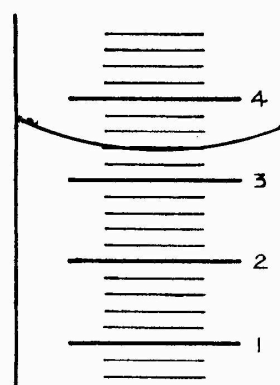
e) _____



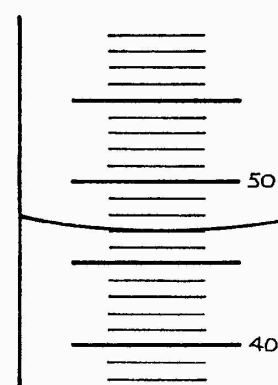
f) _____



g) _____



h) _____



i) _____

**Don't forget to measure at the bottom of the meniscus (or curve).
Record and bubble your answers in the grids on the back of this paper.**

1.

Grid									
				.					
0	0	0	0			0	0		
1	1	1	1			1	1		
2	2	2	2			2	2		
3	3	3	3			3	3		
4	4	4	4			4	4		
5	5	5	5			5	5		
6	6	6	6			6	6		
7	7	7	7			7	7		
8	8	8	8			8	8		
9	9	9	9			9	9		

2.

Grid									
				.					
0	0	0	0			0	0		
1	1	1	1			1	1		
2	2	2	2			2	2		
3	3	3	3			3	3		
4	4	4	4			4	4		
5	5	5	5			5	5		
6	6	6	6			6	6		
7	7	7	7			7	7		
8	8	8	8			8	8		
9	9	9	9			9	9		

3.

Grid									
				.					
0	0	0	0			0	0		
1	1	1	1			1	1		
2	2	2	2			2	2		
3	3	3	3			3	3		
4	4	4	4			4	4		
5	5	5	5			5	5		
6	6	6	6			6	6		
7	7	7	7			7	7		
8	8	8	8			8	8		
9	9	9	9			9	9		

4.

Grid									
				.					
0	0	0	0			0	0		
1	1	1	1			1	1		
2	2	2	2			2	2		
3	3	3	3			3	3		
4	4	4	4			4	4		
5	5	5	5			5	5		
6	6	6	6			6	6		
7	7	7	7			7	7		
8	8	8	8			8	8		
9	9	9	9			9	9		

5.

Grid									
				.					
0	0	0	0			0	0		
1	1	1	1			1	1		
2	2	2	2			2	2		
3	3	3	3			3	3		
4	4	4	4			4	4		
5	5	5	5			5	5		
6	6	6	6			6	6		
7	7	7	7			7	7		
8	8	8	8			8	8		
9	9	9	9			9	9		

6.

Grid									
				.					
0	0	0	0			0	0		
1	1	1	1			1	1		
2	2	2	2			2	2		
3	3	3	3			3	3		
4	4	4	4			4	4		
5	5	5	5			5	5		
6	6	6	6			6	6		
7	7	7	7			7	7		
8	8	8	8			8	8		
9	9	9	9			9	9		

7.

Grid									
				.					
0	0	0	0			0	0		
1	1	1	1			1	1		
2	2	2	2			2	2		
3	3	3	3			3	3		
4	4	4	4			4	4		
5	5	5	5			5	5		
6	6	6	6			6	6		
7	7	7	7			7	7		
8	8	8	8			8	8		
9	9	9	9			9	9		

8.

Grid									
				.					
0	0	0	0			0	0		
1	1	1	1			1	1		
2	2	2	2			2	2		
3	3	3	3			3	3		
4	4	4	4			4	4		
5	5	5	5			5	5		
6	6	6	6			6	6		
7	7	7	7			7	7		
8	8	8	8			8	8		
9	9	9	9			9	9		

9.

Grid									
				.					
0	0	0	0			0	0		
1	1	1	1			1	1		
2	2	2	2			2	2		
3	3	3	3			3	3		
4	4	4	4			4	4		
5	5	5	5			5	5		
6	6	6	6			6	6		
7	7	7	7			7	7		
8	8	8	8			8	8		
9	9	9	9			9	9		