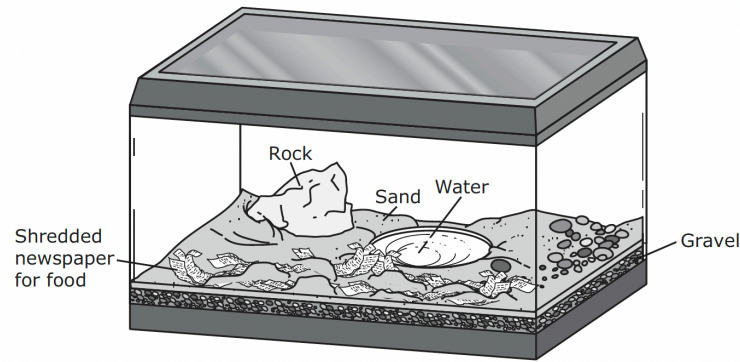


Ecosystem Organization

Engage

Observe the picture of the terrarium below.



Questions:

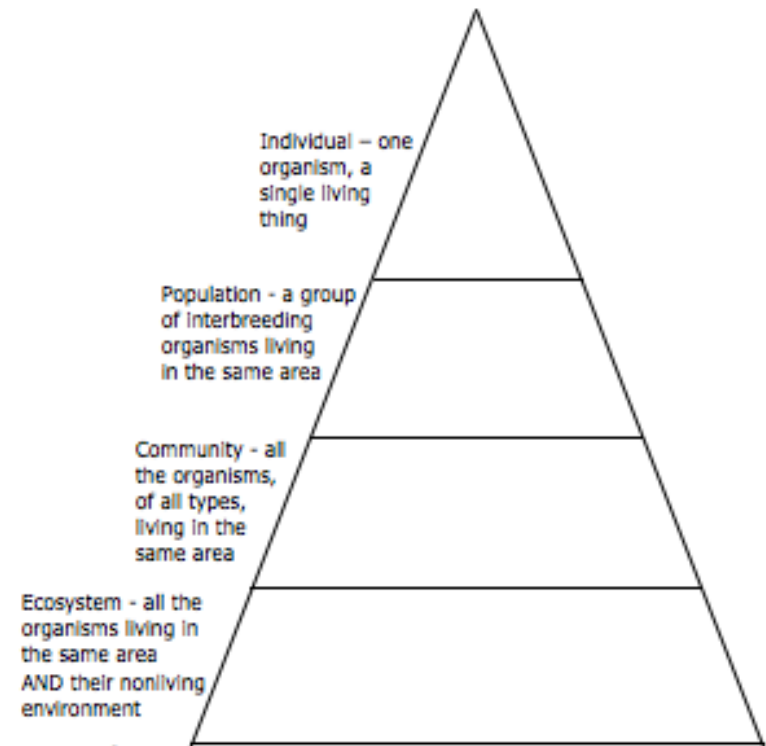
1. Predict what types of organisms could live in the terrarium.
2. What types of organisms could NOT live in the terrarium?
3. Why do you think so?

Explore

Materials: colored pencils

What To Do:

1. Choose an animal that lives in the wild - not a dog or a cat or other pet.
2. This is an individual. Draw it in the top of the pyramid below.
3. Imagine this animal interacting with other of its own kind. This group is a population. Draw them in the level of the pyramid labeled population.
4. Think of other types of living things your animal might interact with. Think about what it eats and uses for shelter. This is its community draw all of these things in the level called community.
5. What non-living things does your animal interact with? Where does it live? Where does it find water? What is the weather like where it lives? This is its ecosystem. Draw all of these things in the level called ecosystem.



Explain

Organism

Population

Community

Ecosystem

Elaborate

Remember a population is a group of organisms of the same kind. A group of mice in a field, a school of fish in the Gulf of Mexico and all the humans in your city or town, these are all examples of a population. Populations do not stay the same. There are many reasons for a population change such as limited resources, predator-prey cycles, human impact, habitat change or the loss of a large company.

The snowshoe hare is a common species of rabbit found in North America, its range extends throughout Canada, Alaska, and



Snowshoe Hare in Winter



Snowshoe Hare in Summer

into the northern United States. One distinctive quality is its 2 different coloration patterns – brown in the summer, and white in the winter to better camouflage with the snow. Its diet consists of grasses, berries, twigs, bark and leaves.



The Canada lynx is a wild cat that resembles a large house cat with a short tail and prominent tufts on its ears. It is very secretive and even experienced hunters rarely see one in the wild. Its range overlaps with the snowshoe hare, on which it almost exclusively preys upon.

To understand how the population of lynx and hares changes year to year, we need to collect information about the number of individuals in a population. Unfortunately, it is impossible to count the exact number of hares in Canada in any given year. Therefore, this information must be gained by capturing a small number of individuals and then estimating the actual number out in the wild. For over 300 years, the Hudson Bay Company has been involved in the fur trade in Canada. Detailed company records list the number of snowshoe hare pelts, and the number of lynx pelts collected by hunters and trappers every year since the late 1700's. A small sample of this data is presented in the table on the next page.


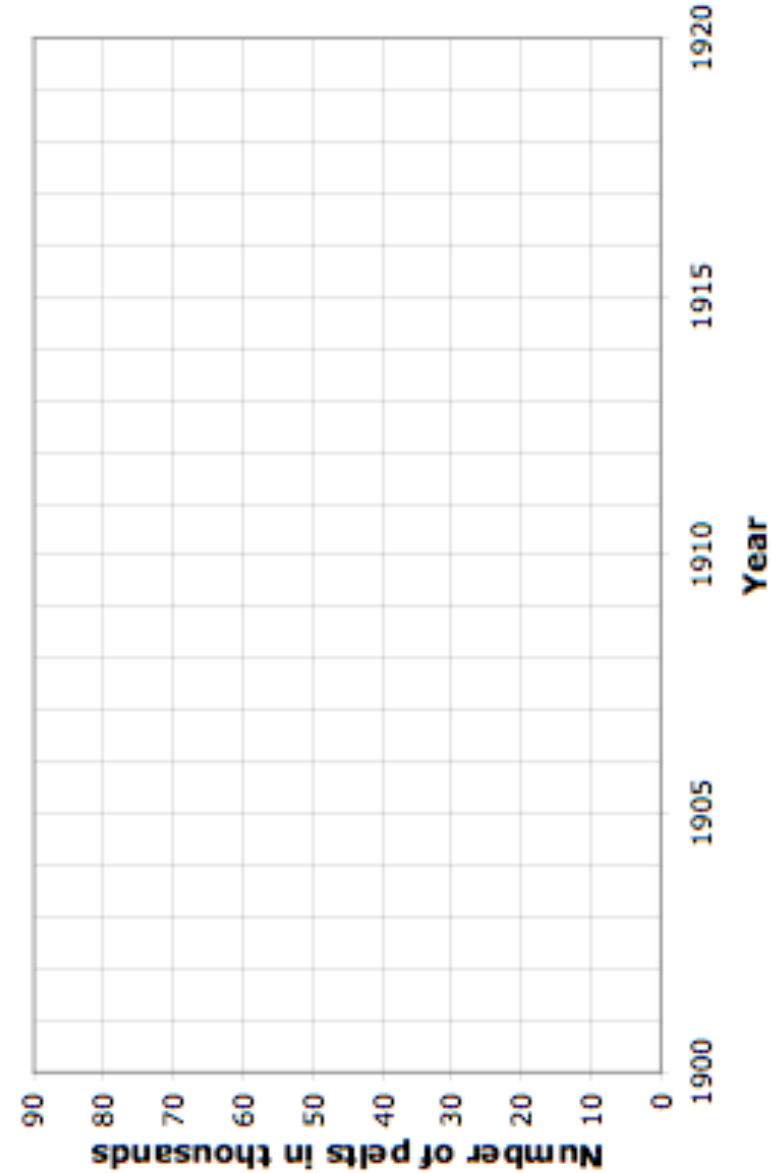


What To Do:

1. On the graph paper on the next page, use one color of pencil to graph the number of hares trapped each year between 1900 and 1920.
2. Use another color to graph the number of lynx trapped.
3. Answer the questions on the next page.

Year	Hares (x1000)	Lynx(x1000)
1900	30	4
1901	47.2	6.1
1902	70.2	9.8
1903	77.4	35.2
1904	36.3	59.4
1905	20.6	41.7
1906	18.1	19
1907	21.4	13
1908	22	8.3
1909	25.4	9.1
1910	27.1	7.4
1911	40.3	8
1912	57	12.3
1913	76.6	19.5
1914	52.3	45.7
1915	19.5	51.1
1916	11.2	29.7
1917	7.6	15.8
1918	14.6	9.7
1919	16.2	10.1
1920	24.7	8.6

Lynx and Hare Populations





Questions:

1. What patterns do you notice? Describe at least 3 patterns.

2. What do you think happens to the grass and seeds the hare eat as the population gradually increases?

3. If the number of lynx pelts taken goes up what does that say about the number of lynx left in the wild?

4. After a few years, the hare population begins to increase. Why?

5. In general, are there more lynx or more hares? Why?



Name _____

period _____

EXIT TICKET
Ecosystem Organization

Match the example to the correct word. Write the letter of the correct word in the blank beside the example.

- a) ecosystem b) community

c) organism d) population

- _____ 1. Rosie the rattlesnake

_____ 2. rattlesnakes, mice, small birds, small birds, crickets, grass, hawks, cacti and tumbleweed

_____ 3. the community, the water, the air, the rocks, the soil, and the mountains

_____ 4. all the rattlesnakes in the area

5. Which of the following is an example of a predator-prey relationship?
- A. Canadian lynx - snowshoe hare

B. Canadian lynx - butterfly

C. Butterfly - snowshoe hare