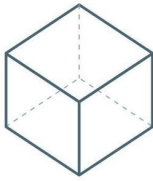
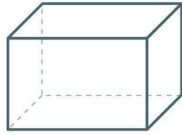


Vul in!

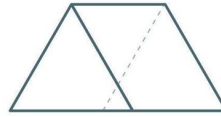
Naam:



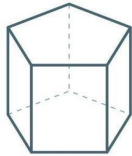
CUBE



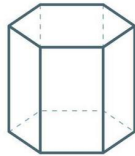
RECTANGULAR PRISM



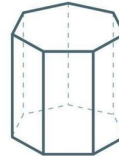
TRIANGULAR PRISM



PENTAGONAL PRISM

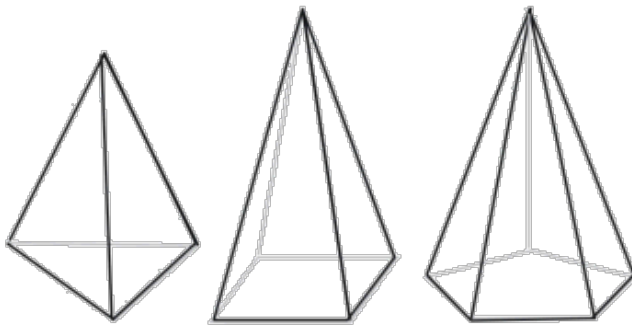


HEXAGONAL PRISM



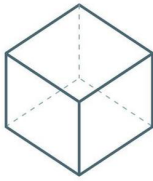
HEPTAGONAL PRISM

Prisma					
Totaal hoekpunten	10	8			
Grondvlak hoekpunten	5				6
Ribben	15			42	
Zijvlakken	7		10		

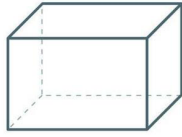


Piramide					
Totaal hoekpunten	4	8			
Grondvlak hoekpunten	3				4
Ribben	6		10		
Zijvlakken	4			12	

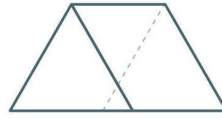
Antwoorden



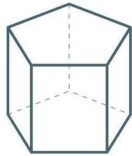
CUBE



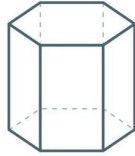
RECTANGULAR PRISM



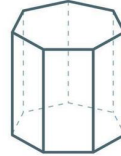
TRIANGULAR PRISM



PENTAGONAL PRISM

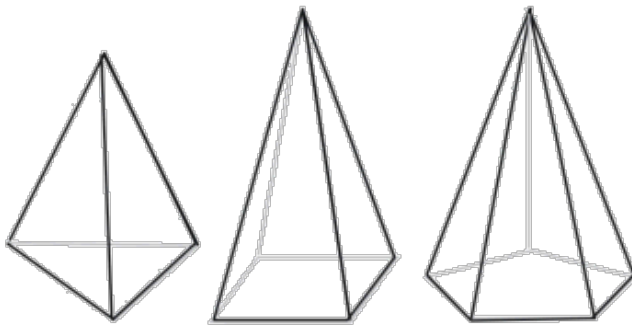


HEXAGONAL PRISM



HEPTAGONAL PRISM

Prisma					
Totaal hoekpunten	10	8	16	28	12
Grondvlak hoekpunten	5	4	8	14	6
Ribben	15	12	24	42	18
Zijvlakken	7	6	10	16	8



Piramide					
Totaal hoekpunten	4	8	6	12	5
Grondvlak hoekpunten	3	7	5	11	4
Ribben	6	14	10	22	8
Zijvlakken	4	8	6	12	5