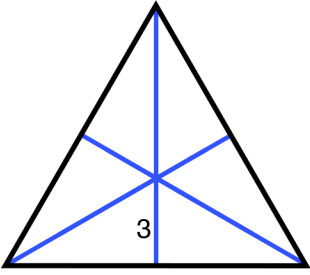
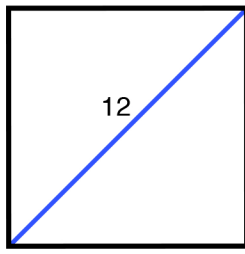
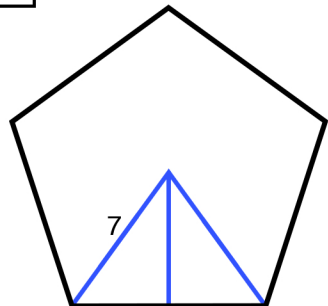
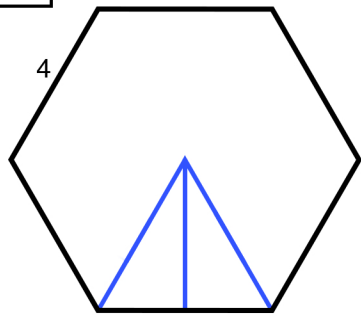
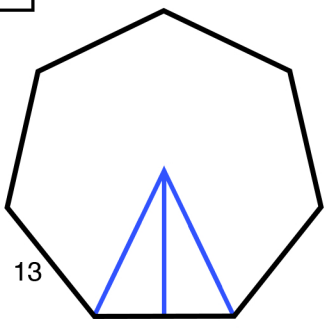
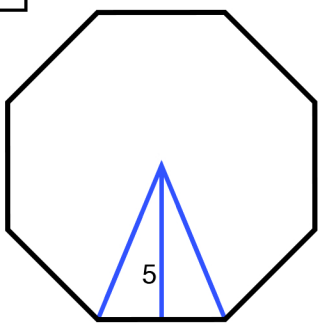
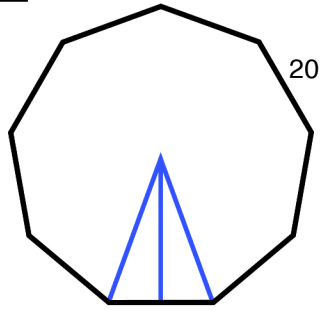
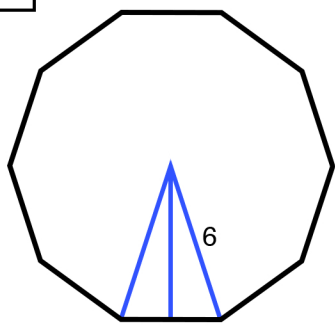
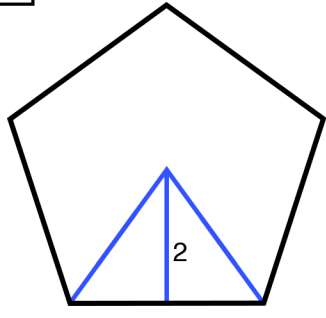
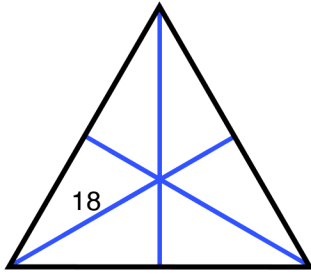
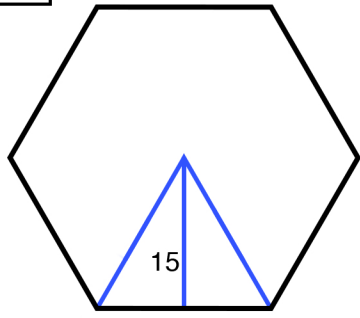
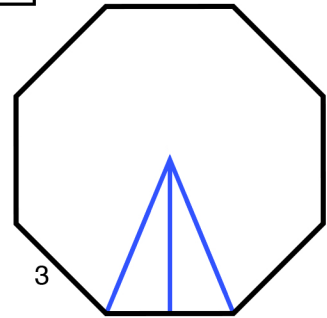
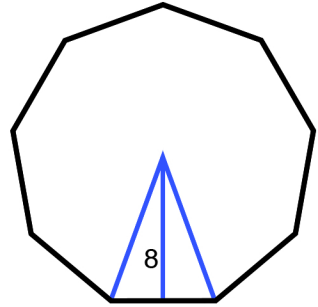
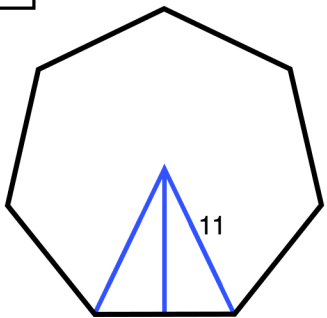
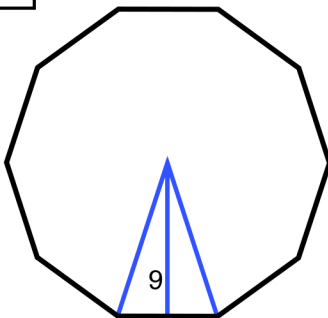
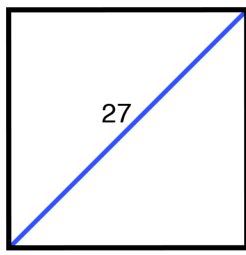
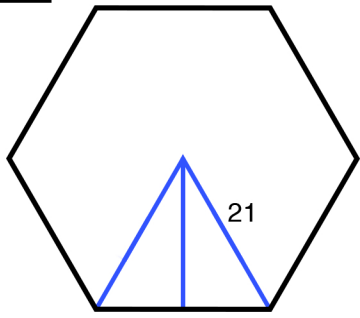
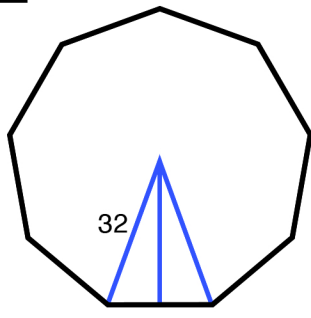
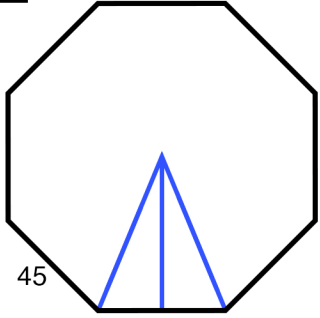


# Area of regular polygons

$$\text{Area} = \frac{(\text{Perimeter}) \times (\text{apothem})}{2}$$

Name: \_\_\_\_\_

<p>1 Find the area.</p> 	<p>2 Find the area.</p> 	<p>3 Find the area.</p> 	<p>4 Find the area.</p> 
<p>5 Find the area.</p> 	<p>6 Find the area.</p> 	<p>7 Find the area.</p> 	<p>8 Find the area.</p> 
<p>9 Find the area.</p> 	<p>10 Find the area.</p> 	<p>11 Find the area.</p> 	<p>12 Find the area.</p> 
<p>13 Find the area.</p> 	<p>14 Find the area.</p> 	<p>15 Find the area.</p> 	<p>16 Find the area.</p> 
<p>17 Find the area.</p> 	<p>18 Find the area.</p> 	<p>19 Find the area.</p> 	<p>20 Find the area.</p> 