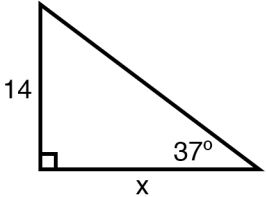
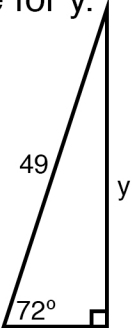
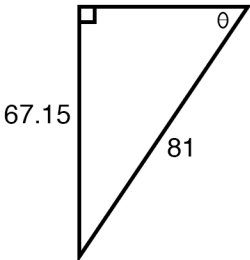
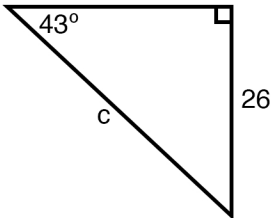
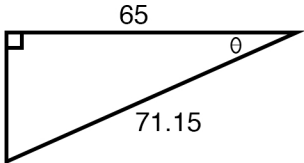
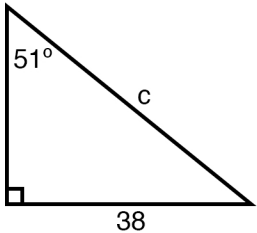

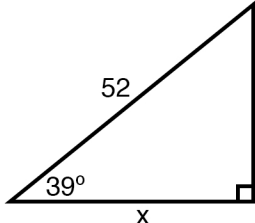
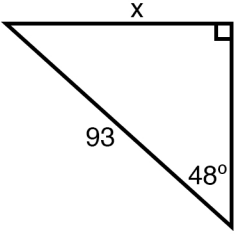
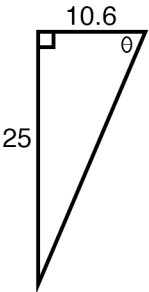
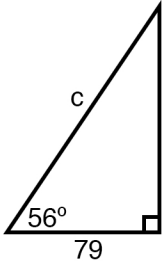
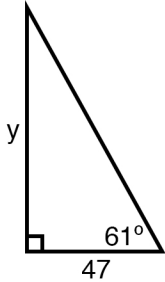
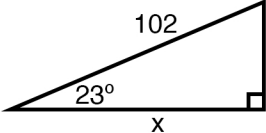
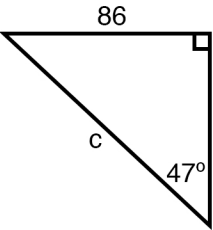
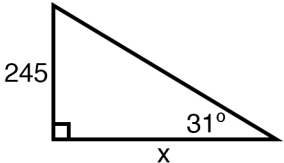
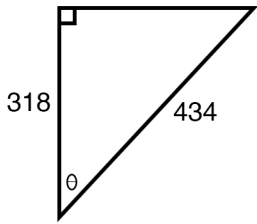
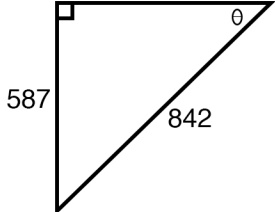
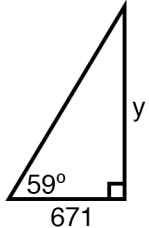
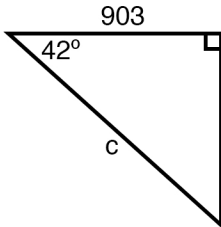


Solving with trigonometric functions

Name: _____

1 Solve for x. 	2 Solve for y. 	3 Solve for θ . 	4 Solve for c. 
5 Solve for θ . 	6 Solve for c. 	7 Solve for y. 	8 Solve for x. 
9 Solve for x. 	10 Solve for θ . 	11 Solve for c. 	12 Solve for y. 
13 Solve for x. 	14 Solve for c. 	15 Solve for x. 	16 Solve for θ . 
17 Solve for θ . 	18 Solve for y. 	19 Solve for c. 	20 Solve for y. 