

Level
OB



AbacusSeekho.com

Mental Maths Development Programme

ADDITION & SUBTRACTION

1	2	3	4	5	6	7	8	9	10
1	3	1	4	2	3	4	2	3	4
2	1	3	-2	-2	-2	-3	-1	1	-2

11	12	13	14	15	16	17	18	19	20
3	2	3	4	3	2	1	1	2	1
-2	-1	-1	-4	1	1	1	3	1	-1



DRAW BEADS FOR THE GIVEN NUMBER

1	2	3	4	5	6	7	8	9	10
—	—	—	—	—	—	—	—	—	—
6	7	9	5	8	9	5	7	8	6



11	12	13	14	15	16	17	18	19	20
—	—	—	—	—	—	—	—	—	—
5	6	7	8	9	5	6	8	7	9



ADDITION & SUBTRACTION

DRAW AND WRITE THE BEADS VALUE

6.  (+)  = _____

7.  (-)  = _____

8.  (+)  = _____

9.  (-)  = _____

10.  (+)  = _____





















ADDITION & SUBTRACTION

1	2	3	4	5	6	7	8	9	10
1	2	3	2	3	4	3	2	4	2
2	2	-1	1	-2	-4	-1	2	-2	1
-2	-2	2	1	-1	3	2	-2	-2	1
1	2	-2	-4	4	-1	-2	-1	3	-3

11	12	13	14	15	16	17	18	19	20
3	4	3	4	2	3	2	1	1	4
1	-2	-2	-2	2	-3	1	1	2	-2
-3	1	1	2	-2	4	-2	1	1	-1
2	1	2	-4	2	-4	1	-3	-4	2

DRAW AND WRITE THE BEADS VALUE

1	2	3	4	5	6	7	8	9	10
									
2	1	4	3	4	2	1	2	3	4

11	12	13	14	15	16	17	18	19	20
									

DRAW BEADS FOR THE GIVEN NUMBER

1	2	3	4	5	6	7	8	9	10
—	—	—	—	—	—	—	—	—	—
2	1	3	4	3	2	1	4	3	2

11	12	13	14	15	16	17	18	19	20
—	—	—	—	—	—	—	—	—	—
3	4	1	3	2	3	4	2	1	3

ADDITION (+)



1	2	3	4	5	6	7	8	9	10
1	1	1	1	1	1	2	1	2	1
2	1	1	2	1	2	1	1	1	1
1	2	1	1	2	1	1	2	1	2


11	12	13	14	15	16	17	18	19	20
3	1	1	2	2	2	3	1	1	2
1	2	3	2	1	1	1	3	2	1

SUBTRACTION (-)

DRAW AND WRITE THE BEADS VALUE

6.  (-)  = _____

7.  (-)  = _____

8.  (-)  = _____

9.  (-)  = _____

10.  (-)  = _____



ADDITION (+)

DRAW AND WRITE THE BEADS VALUE

1.  +  = _____

2.  +  = _____

3.  +  = _____

4.  +  = _____

5.  +  = _____



WRITE BEADS VALUE

1	2	3	4	5	6	7	8	9	10

11	12	13	14	15	16	17	18	19	20

SUBTRACTION (-)

DRAW AND WRITE THE BEADS VALUE


1.  (-)  = _____

2.  (-)  = _____











3.  (-)  = _____











4.  (-)  = _____

5.  (-)  = _____



WRITE THE BEADS VALUE

1	2	3	4	5	6	7	8	9	10
									

11	12	13	14	15	16	17	18	19	20
									

ADDITION (+)

DRAW AND WRITE THE BEADS VALUE

6.  +  = _____

7.  +  = _____

8.  +  = _____

9.  +  = _____

10.  +  = _____

