















Name _____

Fractions

Fourths, Fifths, & Sixths

Color the picture model to match the given fraction.

$\frac{2}{4}$ 	$\frac{1}{6}$ 	$\frac{1}{5}$ 	$\frac{4}{5}$ 
$\frac{6}{6}$ 	$\frac{1}{4}$ 	$\frac{3}{6}$ 	$\frac{5}{5}$ 
$\frac{2}{5}$ 	$\frac{4}{6}$ 	$\frac{4}{4}$ 	$\frac{2}{6}$ 
$\frac{5}{6}$ 	$\frac{3}{4}$ 	$\frac{3}{5}$ 