

Name _____

Fractions

Halves, Thirds, and Fourths

Color the picture model to match the given fraction.


$$\frac{1}{2}$$




$$\frac{1}{3}$$



$$\frac{1}{4}$$




$$\frac{2}{2}$$



$$\frac{2}{3}$$




$$\frac{2}{4}$$



$$\frac{3}{3}$$



$$\frac{3}{4}$$



$$\frac{4}{4}$$

