















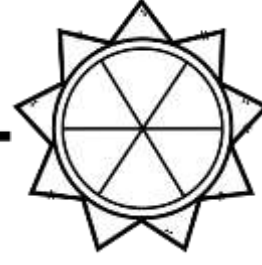




Name _____

Fractions

Sixths, Sevenths & Eighths

Color the picture model to match the given fraction.

$\frac{2}{7}$ 	$\frac{5}{8}$ 	$\frac{4}{7}$ 	$\frac{3}{6}$ 
$\frac{8}{8}$ 	$\frac{2}{6}$ 	$\frac{6}{7}$ 	$\frac{1}{8}$ 
$\frac{1}{7}$ 	$\frac{6}{8}$ 	$\frac{5}{6}$ 	$\frac{4}{8}$ 
$\frac{7}{7}$ 	$\frac{4}{6}$ 	$\frac{2}{8}$ 	$\frac{3}{7}$ 
$\frac{6}{6}$ 	$\frac{3}{8}$ 	$\frac{7}{8}$ 	$\frac{5}{7}$ 