





















Name _____

Fractions

Halves - Eighths

Color the picture model to match the given fraction.

| | | | |
|---|---|--|---|
| $\frac{3}{4}$  | $\frac{1}{3}$  | $\frac{4}{5}$  | $\frac{2}{6}$  |
| $\frac{2}{3}$  | $\frac{3}{6}$  | $\frac{6}{7}$  | $\frac{1}{2}$  |
| $\frac{5}{7}$  | $\frac{6}{8}$  | $\frac{4}{6}$  | $\frac{7}{8}$  |
| $\frac{3}{5}$  | $\frac{5}{6}$  | $\frac{2}{2}$  | $\frac{2}{4}$  |
| $\frac{5}{5}$  | $\frac{4}{8}$  | $\frac{3}{8}$  | $\frac{1}{7}$  |