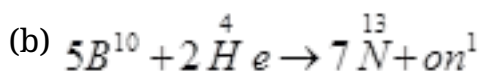
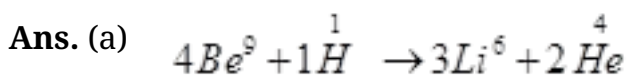
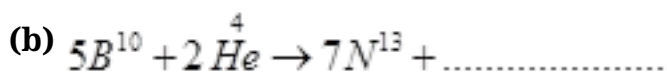
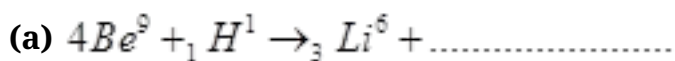


CBSE Class 12 physics
Important Questions
Chapter 13
Nuclei

1 Mark Questions

1. Complete the following nuclear reactions



2. What is *Q-value* of a nuclear reaction?

Ans. *Q-value* = (Mass of reactants – Mass of products)

3. The wavelengths of some of the spectral lines obtained in hydrogen spectrum are 9546\AA , 6463\AA and 1216\AA . Which one of these wavelengths belongs to Lyman series?

Ans. 1216\AA belong to Lyman series

4. Write the empirical relation for paschen series lines of hydrogen atom?

Ans. $\frac{1}{\lambda} = R \left(\frac{1}{3^2} - \frac{1}{n^2} \right)$ where $n = 4, 5, 6, 7 \dots$

2 Mark Questions

1. What fraction of tritium will remain after 25 years? Given half life of tritium as 12.5 years

$$\text{Ans. } \frac{N}{N_0} = \left(\frac{1}{2}\right)^{t/T} = \left(\frac{1}{2}\right)^{25/12.5}$$

$$\frac{N}{N_0} = \left(\frac{1}{2}\right)^2 = 1/4 = 0.25$$

2. Calculate the kinetic energy and potential energy of an electron in the first orbit of hydrogen atom. Given $e = 1.6 \times 10^{-19} \text{ C}$ and $r = 0.53 \times 10^{-10} \text{ m}$.

$$\text{Ans. (i) } K.E. = \frac{e^2 K}{2a_0}$$

$$K.E. = \frac{(1.6 \times 10^{-19})^2 \times 9 \times 10^9}{2 \times 0.53 \times 10^{-10}}$$

$$K.E. = 21.74 \times 10^{-19} \text{ J}$$

$$K.E. = \frac{21.74 \times 10^{-19}}{1.6 \times 10^{-19}} = 13.59 \text{ eV}$$

$$K.E. = 13.59 \text{ eV}$$

$$\text{(ii) } P.E. = \frac{-e^2 K}{r} = -2K.E.$$

$$P.E. = -2 \times 13.59$$

$$P.E. = -27.18 \text{ eV}$$

3. Why is nuclear fusion not possible in laboratory?

Ans. Nuclear fusion is not possible in laboratory as it is performed in high temperature. This cannot be attained in the laboratory.

4. Express 16mg mass into equivalent energy in electron volt?

Ans. $E = mc^2$

$$= 16 \times 10^{-6} \text{ Kg} (3 \times 10^8 \text{ m/s})^2$$

$$= 16 \times 9 \times 10^{10} \text{ Joules}$$

$$E = \frac{16 \times 9 \times 10^{10}}{1.6 \times 10^{-19}} \text{ eV}$$

$$E = 9 \times 10^{30} \text{ eV}$$

5. The three stable isotopes of neon: ${}^{20}_{10}\text{Ne}$, ${}^{21}_{10}\text{Ne}$ and ${}^{22}_{10}\text{Ne}$ have respective abundances of 90.51%, 0.27% and 9.22%. The atomic masses of the three isotopes are 19.99 u, 20.99 u and 21.99 u, respectively. Obtain the average atomic mass of neon.

Ans. Atomic mass of ${}^{20}_{10}\text{Ne}$, $m_1 = 19.99 \text{ u}$

Abundance of, $\eta_1 = 90.51\%$

Atomic mass of, $m_2 = 20.99 \text{ u}$

Abundance of, $\eta_2 = 0.27\%$

Atomic mass of, $m_3 = 21.99 \text{ u}$

Abundance of, $\eta_3 = 9.22\%$

The average atomic mass of neon is given as:

$$m = \frac{m_1\eta_1 + m_2\eta_2 + m_3\eta_3}{\eta_1 + \eta_2 + \eta_3}$$

$$= \frac{19.99 \times 90.51 + 20.99 \times 0.27 + 21.99 \times 9.22}{90.51 + 0.27 + 9.22}$$

$$= 20.1771u$$

6. From the relation $R = R_0 A^{1/3}$, where R_0 is a constant and A is the mass number of a nucleus, show that the nuclear matter density is nearly constant (i.e. independent of A).

Ans. We have the expression for nuclear radius as:

$$R = R_0 A^{1/3} \text{ Where,}$$

R_0 = Constant.

A = Mass number of the nucleus

$$\text{Nuclear matter density, } \rho = \frac{\text{Mass of the nucleus}}{\text{Volume of the nucleus}}$$

Let m be the average mass of the nucleus.

Hence, mass of the nucleus = mA

$$\therefore \rho = \frac{mA}{\frac{4}{3}\pi R^3} = \frac{3mA}{4\pi \left(R_0 A^{1/3}\right)^3} = \frac{3mA}{4\pi R_0^3 A} = \frac{3m}{4\pi R_0^3}$$

Hence, the nuclear matter density is independent of A . It is nearly constant.

3 Mark Questions

1. A neutron is absorbed by a ${}^6_3\text{Li}$ nucleus with subsequent emission of alpha particle. Write the corresponding nuclear reaction?

Ans. ${}_0^1n + {}^6_3\text{Li} \rightarrow {}^4_2\text{He}(\alpha\text{-particle}) + {}^A_Z\text{Y}$

$$0 + 3 = 2 + Z \Rightarrow Z = 1$$

(Conservation of Atomic Number)

$$1 + 6 = 4 + A$$

$$\Rightarrow A = 3$$

(Conservation of Mass Number)

$$\therefore {}^A_Z\text{Y} = {}^3_1\text{H}$$

$$\Rightarrow {}_0^1n + {}^6_3\text{Li} \rightarrow {}^4_2\text{He} + {}^3_1\text{H}$$

2. If the activity of a radioactive substance drops to $\frac{1}{8}$ th of its initial value in 30 years, find its half life period?

Ans. $\frac{A}{A_0} = \left(\frac{1}{2}\right)^{t/T}$

$$\frac{1}{8} = \left(\frac{1}{2}\right)^{30/T}$$

$$\left(\frac{1}{2}\right)^3 = \left(\frac{1}{2}\right)^{\frac{30}{T}}$$

$$\Rightarrow \frac{30}{T} = 3$$

Or

$$T = 10 \text{ years}$$

3. Show that nuclear density is independent of mass number A of a nucleus?

Ans. Nuclear density = $\frac{\text{Mass of nucleus}}{\text{Volume of nucleus}} = \frac{(\text{Mass of P or N}) \times A}{\text{Volume of Nucleus}}$

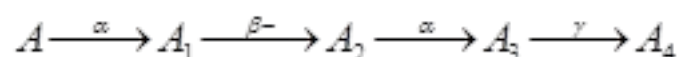
$$P = \frac{(1.6 \times 10^{-27}) A}{\frac{4}{3} \pi R^3} = \frac{(1.6 \times 10^{-27}) \times A}{\frac{4}{3} \pi \left(R_0 A^{\frac{1}{3}} \right)^3}$$

Here $R_0 = 1.2 \times 10^{-15} \text{ m}$

$$\Rightarrow P = \frac{(1.6 \times 10^{-27}) \times A}{\frac{4}{3} \pi R_0^3 A} = \frac{1.6 \times 10^{-27}}{\frac{4}{3} \times 3.14 \times (1.2 \times 10^{-15})^3}$$

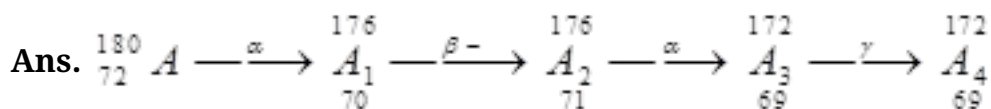
$$\Rightarrow P = 2.21 \times 10^{17} \text{ Kg} / \text{m}^3$$

4. A radioactive nucleus undergoes a series of decay according to the scheme



If the mass number and atomic number of A are 180 and 72 respectively, what are there

number for A_4 ?



5. Distinguish between isotopes and isobars. Give one example for each of the species?

Ans. The elements which have same atomic number but different mass number are called Isotopes.

For eg $\rightarrow {}_6^{10}\text{C} \ {}_6^{11}\text{C} \ {}_6^{12}\text{C} \ {}_6^{14}\text{C}$ (Isotopes of carbon)

Thus nuclides of different elements having same mass number but different atomic number are called isobars.

For eg $\rightarrow {}_1^3\text{H}$ and $_2^3\text{He}$

$_3^7\text{Li}$ and $_4^7\text{Be}$

6. A radio active nuclide decays to form a stable nuclide its half life is 3 minutes. What fractions of its 1g will remain radioactive after 9 minutes?

Ans. Suppose no. of atoms/gram = N_0

$t = 9$ minutes

$T_{1/2} = 3$ minutes

$$\frac{N}{N_0} = \left(\frac{1}{2}\right)^{t/T_{1/2}} = \left(\frac{1}{2}\right)^{9/3} = \left(\frac{1}{2}\right)^3 = 1/8$$

$$\Rightarrow N = \frac{N_0}{8}$$

$$\Rightarrow \text{Fraction decayed} = \frac{N_0 - N}{N_0} = \frac{N_0 - \frac{N_0}{8}}{N_0}$$

$$= 1 - \frac{1}{8} = \frac{7}{8} = 0.875$$

$$\therefore \text{Fraction remain undecayed} = 1 - 0.875 = 0.125$$

7. Obtain the binding energy (in MeV) of a nitrogen nucleus 1_7N , given $m({}^{14}_7N)$ = 14.00307 u

Ans. Atomic mass of nitrogen (${}^{14}_7N$), $m = 14.00307$ u

A nucleus of nitrogen ${}^{14}_7N$ contains 7 protons and 7 neutrons.

Hence, the mass defect of this nucleus, $\Delta m = 7m_H + 7m_n - m$

Where,

Mass of a proton, $m_H = 1.007825$ u

Mass of a neutron, $m_n = 1.008665$ u

$$\therefore \Delta m = 7 \times 1.007825 + 7 \times 1.008665 - 14.00307$$

$$= 7.054775 + 7.06055 - 14.00307$$

$$= 0.11236 \text{ u}$$

$$\text{But } 1 \text{ u} = 931.5 \text{ MeV} / c^2$$

$$\therefore \Delta m = 0.11236 \times 931.5 \text{ MeV} / c^2$$

Hence, the binding energy of the nucleus is given as:

$$Eb = \Delta mc^2$$

Where,

c = Speed of light

$$\therefore Eb = 0.11236 \times 931.5 \left(\frac{\text{MeV}}{c^2} \right) \times c^2$$

$$= 104.66334 \text{ MeV}$$

Hence, the binding energy of a nitrogen nucleus is 104.66334 MeV.

8. Obtain approximately the ratio of the nuclear radii of the gold isotope ${}_{79}^{197}\text{Au}$ and the silver isotope ${}_{47}^{107}\text{Ag}$.

Ans. Nuclear radius of the gold isotope ${}_{79}\text{Au}^{197} = R_{\text{Au}}$

Nuclear radius of the silver isotope ${}_{47}\text{Ag}^{107} = R_{\text{Ag}}$

Mass number of gold, $A_{\text{Au}} = 197$

Mass number of silver, $A_{\text{Ag}} = 107$

The ratio of the radii of the two nuclei is related with their mass numbers as:

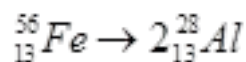
$$\begin{aligned} \frac{R_{\text{Au}}}{R_{\text{Ag}}} &= \left(\frac{A_{\text{Au}}}{A_{\text{Ag}}} \right)^{\frac{1}{3}} \\ &= \left(\frac{197}{107} \right)^{\frac{1}{3}} = 1.2256 \end{aligned}$$

Hence, the ratio of the nuclear radii of the gold and silver isotopes is about 1.23.

9. Suppose, we think of fission of a ${}_{26}^{56}\text{Fe}$ nucleus into two equal fragments, ${}_{13}^{28}\text{Al}$. Is the fission energetically possible? Argue by working out Q of the process. Given

$$m\left({}^{56}_{26}\text{Fe}\right) = 55.93494u \text{ and } m\left({}^{28}_{13}\text{Al}\right) = 27.98191u. .$$

Ans. The fission of ${}^{56}_{26}\text{Fe}$ can be given as:



It is given that:

$$\text{Atomic mass of } m\left({}^{56}_{26}\text{Fe}\right) = 55.93494 \text{ u}$$

$$\text{Atomic mass of } m\left({}^{28}_{13}\text{Al}\right) = 27.98191u$$

The Q -value of this nuclear reaction is given as:

$$Q = \left[m\left({}^{56}_{26}\text{Fe}\right) - 2m\left({}^{28}_{13}\text{Al}\right) \right] c^2$$

$$= [55.93494 - 2 \times 27.98191] c^2$$

$$= (0.02888c^2) u$$

$$\text{But } 1u = 931.5 \text{ MeV} / c^2$$

$$\therefore Q = -0.02888 \times 931.5 = -26.902 \text{ MeV}$$

The Q -value of the fission is negative. Therefore, the fission is not possible energetically. For an energetically-possible fission reaction, the Q -value must be positive.

10. The fission properties of ${}^{239}_{94}\text{Pu}$ are very similar to those of ${}^{235}_{92}\text{U}$. The average energy released per fission is 180 MeV. How much energy, in MeV, is released if all the atoms in 1 kg of pure ${}^{239}_{94}\text{Pu}$ undergo fission?

Ans. Average energy released per fission of ${}^{239}_{94}\text{Pu}$, $E_{\text{av}} = 180 \text{ MeV}$

Amount of pure ${}^{239}_{94}\text{Pu}$, $m = 1 \text{ kg} = 1000 \text{ g}$

NA = Avogadro number = 6.023×10^{23}

Mass number of ${}^{239}_{94}\text{Pu}$ = 239 g

1 mole of ${}^{239}_{94}\text{Pu}$ contains N_A atoms.

\therefore mg of ${}^{239}_{94}\text{Pu}$ contains $\left(\frac{N_A}{\text{Mass number}} \times m \right)$ atoms

$$= \frac{6.023 \times 10^{23}}{239} \times 1000 = 2.52 \times 10^{24} \text{ atoms}$$

\therefore Total energy released during the fission of 1 kg of ${}^{239}_{94}\text{Pu}$ is calculated as:

$$E = E_{av} \times 2.52 \times 10^{24}$$

$$= 180 \times 2.52 \times 10^{24} = 4.536 \times 10^{26} \text{ MeV}$$

Hence, $4.536 \times 10^{26} \text{ MeV}$ is released if all the atoms in 1 kg of pure ${}^{239}_{94}\text{Pu}$ undergo fission.

11. Calculate the height of the potential barrier for a head on collision of two deuterons. (Hint: The height of the potential barrier is given by the Coulomb repulsion between the two deuterons when they just touch each other. Assume that they can be taken as hard spheres of radius 2.0 fm.)

Ans. When two deuterons collide head-on, the distance between their centres, d is given as:

Radius of 1st deuteron + Radius of 2nd deuteron

$$\text{Radius of a deuteron nucleus} = 2 \text{ fm} = 2 \times 10^{-15} \text{ m}$$

$$\therefore d = 2 \times 10^{-15} + 2 \times 10^{-15} = 4 \times 10^{-15} \text{ m}$$

$$\text{Charge on a deuteron nucleus} = \text{Charge on an electron} = e = 1.6 \times 10^{-19} \text{ C}$$

Potential energy of the two-deuteron system:

$$V = \frac{e^2}{4\pi\epsilon_0 d}$$

Where,

ϵ_0 = Permittivity of free space

$$\frac{1}{4\pi\epsilon_0} = 9 \times 10^9 \text{ Mm}^2 \text{C}^{-2}$$

$$\therefore V = \frac{9 \times 10^9 \times (1.6 \times 10^{-19})^2}{4 \times 10^{-15}} \text{ J}$$

$$= \frac{9 \times 10^9 \times (1.6 \times 10^{-19})^2}{4 \times 10^{-15} \times (1.6 \times 10^{-19})} \text{ eV}$$

$$= 360 \text{ keV}$$

Hence, the height of the potential barrier of the two-deuteron system is 360 keV.

5 Mark Questions

1. The wavelength of the first member of Balmer series in the hydrogen spectrum is 6563 \AA . Calculate the wavelength of the first member of Lyman series in the same spectrum.

Ans. We know $\frac{1}{\lambda} = R \left(\frac{1}{2^2} - \frac{1}{n^2} \right), n = 3, 4, 5 \dots$

For first member $n_i = 3$ (Balmer series)

$$\frac{1}{\lambda_1} = R \left(\frac{1}{2^2} - \frac{1}{3^2} \right)$$

$$\frac{1}{\lambda_1} = R \left(\frac{1}{4} - \frac{1}{9} \right)$$

$$\lambda_1 = \frac{36}{5R} \text{----- (1)}$$

For first member of Lyman series

$$\frac{1}{\lambda_1'} = R \left(\frac{1}{1^2} - \frac{1}{2^2} \right)$$

$$\frac{1}{\lambda_1'} = R \left(1 - \frac{1}{4} \right)$$

Or

$$\lambda_1' = \frac{4}{3R} \text{----- (2)}$$

From (1) and (2)

$$\frac{\lambda_1'}{\lambda_1} = \frac{4}{3R} \times \frac{5R}{36}$$

$$\frac{\lambda_1'}{\lambda_1} = \frac{5}{27} \lambda_1$$

$$\lambda_1 = 6563 \text{Å}^\circ$$

$$\Rightarrow \lambda_1' = 1215.4 \text{Å}^\circ$$

2. A neutron is absorbed by a ${}^6_3\text{Li}$ nucleus with subsequent emission of α -particle. Write the corresponding nuclear reaction. Calculate the energy released in this reaction.

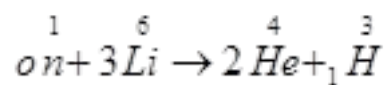
Given mass of ${}^6_3\text{Li} = 6.015126 \text{ a.m.u.}$

Mass of ${}^4_2\text{He} = 4.00026044 \text{ a.m.u.}$

Mass of neutron $\left({}^1_0n\right) = 1.0086654 \text{ a.m.u.}$

Mass of tritium $\left({}^3_1\text{H}\right) = 3.016049 \text{ a.m.u.}$

Ans. Nuclear reaction is given by



Mass of reactants = $m\left({}^1_0n\right) + m\left({}^6_3\text{Li}\right)$

$$= 1.0086654 + 6.015126 = 7.0237914 \text{ a.m.u.}$$

Mass Defect, Δm = mass of reactant – mass of product.

$$\Delta m = 7.0237194 - 7.018534$$

$$\Delta m = 0.005138 \text{ a.m.u.}$$

Since $1 \text{ a.m.u.} = 931 \text{ MeV}$

$$\therefore \text{Energy released} = \Delta m \times 931 \text{ MeV}$$

$$E = 0.005138 \times 931$$

$$E = 4.783 \text{ MeV}$$

3. Define decay constant of a radioactive sample. Which of the following radiation α -rays, β -rays and γ -rays.

(i) Are similar to X – rays?

(ii) Are easily absorbed by matter?

Ans. Radioactive decay constant (λ) is the reciprocal of time during which the number of atoms in the radioactive substance reduced to 36.8% of the original number of atoms in it.

(i) are similar to X – rays

(ii) Penetration power of α -rays is less than that of β and γ -rays so γ -rays are easily absorbed by matter.

4. State radioactive decay law and hence derive the relation $N = N_0 e^{-\lambda t}$ where symbols their usual meanings.

Ans. According to radioactive decay law the rate of disintegration of a radioactive substance at an instant is directly proportional to the number of nuclei in the radioactive substance at that time i.e.

$$N = N_0 e^{-\lambda t} \text{ Where symbols have their usual meanings}$$

Consider a radioactive substance having N_0 atoms initially at time ($t = 0$). After time (t) no. of atoms left undecayed be N .

If dN is the no. of atoms decayed in time dt then according to radioactive decay law

$$\frac{-dN}{dt} \propto N \text{ or } \frac{-dN}{dt} = \lambda N \text{ -----(1)}$$

Where λ is decay constant and negative sign indicates that a radioactive sample goes on decreasing with time. Equation (1) can also be written as

$$\frac{dN}{N} = -\lambda dt$$

Integrating both the sides

$$\log_e N = \lambda t + K \text{ ----(2)}$$

Where K is constant of integration

When $t = 0$, $N = N_0$

$$\Rightarrow K = \log_e N_0$$

Substituting K in equation (2)

$$\log_e N = \log_e N_0 = -\lambda t \quad (\because \log_e m - \log_e n = \log_e \frac{m}{n})$$

$$\log_e \frac{N}{N_0} = -\lambda t$$

$$\frac{N}{N_0} = e^{-\lambda t}$$

$$N = N_0 e^{-\lambda t}$$

5. Define half life and decay constant of a radioactive element. Write their S.I. unit.

Define expression for half life?

Ans. The time during which half of the atoms of the radioactive substance disintegrates is called half life of a radioactive substance.

We know $N = N_0 e^{-\lambda t}$

When $t = T \frac{1}{2}$ (Half life)

$$N = \frac{N_0}{2}$$

$$\Rightarrow \frac{N_0}{2} = N_0 e^{-\lambda T \frac{1}{2}}$$

$$\frac{1}{2} = e^{-\lambda T \frac{1}{2}}$$

$$\text{or } e^{\lambda T \frac{1}{2}} = 2$$

$$\lambda T \frac{1}{2} = \log_e 2$$

$$\lambda T \frac{1}{2} = 2.303 \times \log_{10} 2$$

$$\lambda T \frac{1}{2} = 2.303 \times 0.3010$$

$$T \frac{1}{2} = \frac{0.6931}{\lambda}$$

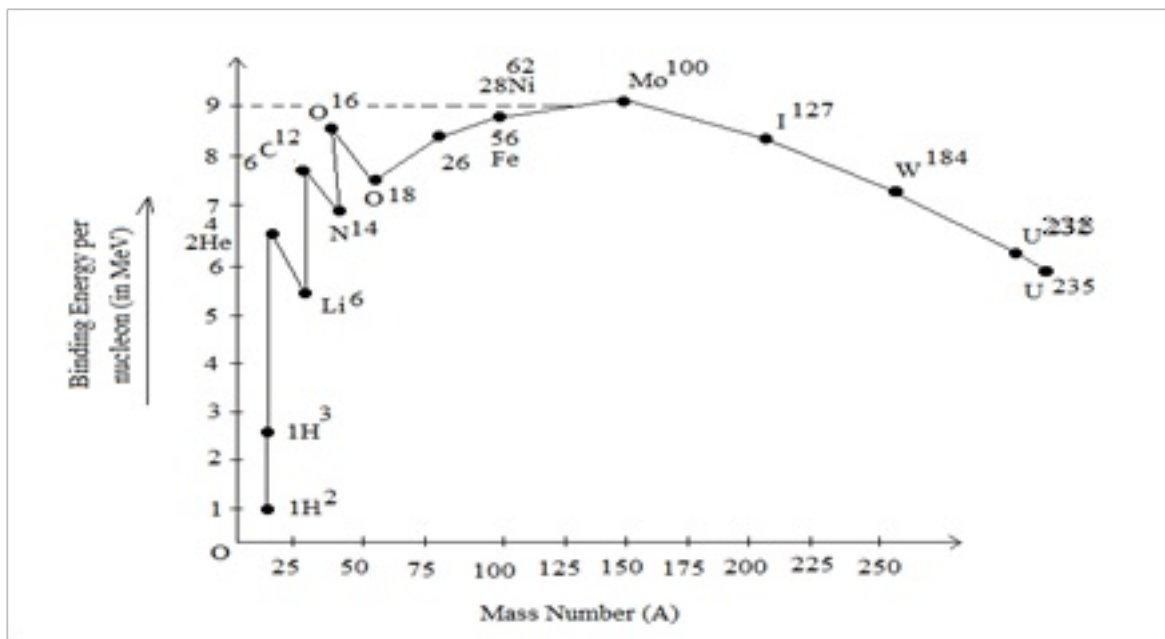
S.I. unit – second (s)

Radioactive decay constant (λ) is the reciprocal of the time during which the number of atoms in the radioactive substance reduces to 36.8 % of the original number of atoms in it.

S.I. unit – s^{-1} or min^{-1}

6. Draw a curve between mass number and binding energy per nucleon. Give two salient features of the curve. Hence define binding energy?

Ans. The total energy required to disintegrate the nucleus into its constituent particles is called binding energy of the nucleus.



Salient features of the curve

- (1) The intermediate nuclei have large value of binding energy per nucleon, so they are most stable. (For $30 < A < 63$)
- (2) The binding energy per nucleon has low value for both the light and heavy nuclei. So they are unstable nuclei.

7.(a) Two stable isotopes of lithium ^6_3Li and ^7_3Li have respective abundances of 7.5% and 92.5%. These isotopes have masses 6.01512 u and 7.01600 u, respectively. Find the atomic mass of lithium.

(b) Boron has two stable isotopes, $^{10}_5\text{B}$ and $^{11}_5\text{B}$. Their respective masses are 10.01294 u and 11.00931 u, and the atomic mass of boron is 10.811 u. Find the abundances of $^{10}_5\text{B}$ and $^{11}_5\text{B}$.

Ans. (a) Mass of lithium isotope ^6_3Li , $m_1 = 6.01512$ u

Mass of lithium isotope ^7_3Li , $m_2 = 7.01600$ u

Abundance of ${}^6_3\text{Li}$, $\eta_1 = 7.5\%$

Abundance of ${}^7_3\text{Li}$, $\eta_2 = 92.5\%$

The atomic mass of lithium atom is given as:

$$\begin{aligned}m &= \frac{m_1\eta_1 + m_2\eta_2}{\eta_1 + \eta_2} \\&= \frac{6.01512 \times 7.5 + 7.01600 \times 92.5}{92.5 + 7.5} \\&= 6.940934u\end{aligned}$$

(b) Mass of boron isotope ${}^{10}_5\text{B}$, $m_1 = 10.01294$ u

Mass of boron isotope ${}^{11}_5\text{B}$, $m_2 = 11.00931$ u

Abundance of, $\eta_1 = x\%$,

Abundance of, $\eta_2 = (100 - x)\%$

Atomic mass of boron, $m = 10.811$ u

The atomic mass of boron atom is given as:

$$\begin{aligned}m &= \frac{m_1\eta_1 + m_2\eta_2}{\eta_1 + \eta_2} \\10.811 &= \frac{10.01294 \times x + 11.00931 \times (100 - x)}{x + 100 - x} \\1081.11 &= 10.01294x + 1100.931 - 11.00931x \\\therefore x &= \frac{19.821}{0.99637} = 19.89\%\end{aligned}$$

And $100 - x = 80.11\%$

Hence, the abundance of $^{10}_5\text{B}$ is 19.89% and that of $^{11}_5\text{B}$ is 80.11%.

8. Obtain the binding energy of the nuclei $^{56}_{26}\text{Fe}$ and $^{209}_{83}\text{Bi}$ in units of MeV from the following data: $m(^{56}_{26}\text{Fe}) = 55.934939 \text{ u}$ $m(^{209}_{83}\text{Bi}) = 208.980388 \text{ u}$

Ans. Atomic mass of $^{56}_{26}\text{Fe}$, $m_1 = 55.934939 \text{ u}$

$^{56}_{26}\text{Fe}$ nucleus has 26 protons and $(56 - 26) = 30$ neutrons

Hence, the mass defect of the nucleus, $\Delta m = 26 \times m_H + 30 \times m_n - m_1$

Where,

Mass of proton, $m_H = 1.007825 \text{ u}$

Mass of a neutron, $m_n = 1.008665 \text{ u}$

$$\therefore \Delta m = 26 \times 1.007825 + 30 \times 1.008665 - 55.934939$$

$$= 26.20345 + 30.25995 - 55.934939$$

$$= 0.528461 \text{ u}$$

But $1 \text{ u} = 931.5 \text{ MeV}/c^2$

$$\therefore \Delta m = 0.528461 \times 931.5 \text{ MeV} / c^2$$

The binding energy of this nucleus is given as:

$$Eb_1 = \Delta mc^2 \text{ Where,}$$

c = Speed of light

$$\therefore E_{b1} = 0.528461 \times 931.5 \left(\frac{\text{MeV}}{c^2} \right) \times c^2$$

$$= 492.26 \text{ MeV}$$

$$\text{Average binding energy per nucleon} = \frac{492.26}{56} = 8.79 \text{ MeV}$$

Atomic mass of $^{209}_{83}\text{Bi}$, $m_2 = 208.980388 \text{ u}$

$^{209}_{83}\text{Bi}$ nucleus has 83 protons and $(209 - 83)$ 126 neutrons.

Hence, the mass defect of this nucleus is given as:

$$\Delta m' = 83 \times m_H + 126 \times m_n - m_2 \text{ Where,}$$

Mass of a proton, $m_H = 1.007825 \text{ u}$

Mass of a neutron, $m_n = 1.008665 \text{ u}$

$$\therefore \Delta m' = 83 \times 1.007825 + 126 \times 1.008665 - 208.980388$$

$$= 83.649475 + 127.091790 - 208.980388$$

$$= 1.760877 \text{ u}$$

But $1 \text{ u} = 931.5 \text{ MeV}/c^2$

$$\therefore \Delta m' = 1.760877 \times 931.5 \text{ MeV} / c^2$$

Hence, the binding energy of this nucleus is given as:

$$E_{b2} = \Delta m' c^2 = 1.760877 \times 931.5 \left(\frac{\text{MeV}}{c^2} \right) \times c^2$$

$$= 1640.26 \text{ MeV}$$

$$\text{Average binding energy per nucleon} = \frac{1640}{209} = 7.848 \text{ MeV}$$

9.A given coin has a mass of 3.0 g. Calculate the nuclear energy that would be required to separate all the neutrons and protons from each other. For simplicity assume that the coin is entirely made of ${}_{29}^{63}\text{Cu}$ atoms (of mass 62.92960 u).

Ans. Mass of a copper coin, $m' = 3 \text{ g}$

Atomic mass of ${}_{29}^{63}\text{Cu}$ atom, $m = 62.92960 \text{ u}$

$$\text{The total number of } {}_{29}^{63}\text{Cu} \text{ atoms in the coin, } N = \frac{N_A \times m'}{\text{Mass number}}$$

Where,

$$N_A = \text{Avogadro's number} = 6.023 \times 10^{23} \text{ atoms/g} \quad \text{Mass number} = 63 \text{ g}$$

$$\therefore N = 2.868 \times 10^{22} \text{ atoms}$$

${}_{29}^{63}\text{Cu}$ nucleus has 29 protons and $(63 - 29) = 34$ neutrons

$$\therefore \text{Mass defect of this nucleus, } \Delta m' = 29 \times m_H + 34 \times m_n - m$$

Where,

Mass of a proton, $m_H = 1.007825 \text{ u}$

Mass of a neutron, $m_n = 1.008665 \text{ u}$

$$\therefore \Delta m' = 29 \times 1.007825 + 34 \times 1.008665 - 62.9296 = 0.591935 \text{ u}$$

$$\text{Mass defect of all the atoms present in the coin, } \Delta m = 0.591935 \times 2.868 \times 10^{22}$$

$$= 1.69766958 \times 10^{22} \text{ u}$$

$$\text{But } 1 \text{ u} = 931.5 \text{ MeV} / c^2$$

$$\therefore \Delta m = 1.69766958 \times 10^{22} \times 931.5 \text{ MeV} / c^2 \quad \text{Hence, the binding energy of the nuclei of}$$

the coin is given as:

$$Eb = \Delta mc^2$$

$$= 1.69766958 \times 10^{-22} \times 931.5 = 1.581 \times 10^{-25} \text{ MeV}$$

$$\text{But } 1 \text{ MeV} = 1.6 \times 10^{-13} \text{ J}$$

$$Eb = 1.581 \times 10^{-25} \times 1.6 \times 10^{-13} = 2.5296 \times 10^{-12} \text{ J}$$

This much energy is required to separate all the neutrons and protons from the given coin.

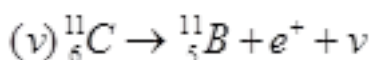
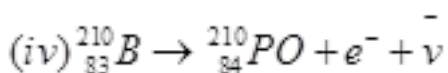
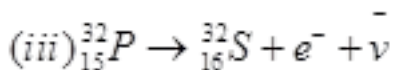
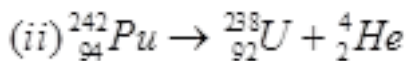
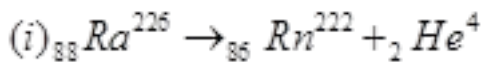
10. Write nuclear reaction equations for

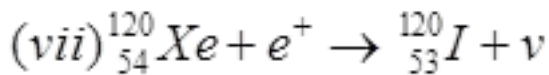
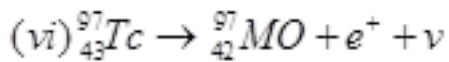
(i) α -decay of ${}^{226}_{88}\text{Ra}$ (ii) α -decay of ${}^{242}_{94}\text{Pu}$ (iii) β^- -decay of ${}^{32}_{15}\text{P}$

(iv) β^- -decay of ${}^{210}_{83}\text{Bi}$ (v) β^+ -decay of ${}^{11}_6\text{C}$ (vi) β^+ -decay of ${}^{97}_{43}\text{Tc}$

(vii) Electron capture of ${}^{120}_{54}\text{Xe}$

Ans. α is a nucleus of helium (${}_2\text{He}^4$) and β is an electron (e^- for β^- and e^+ for β^+). In every α -decay, there is a loss of 2 protons and 4 neutrons. In every β^+ -decay, there is a loss of 1 proton and a neutrino is emitted from the nucleus. In every β^- -decay, there is a gain of 1 proton and an antineutrino is emitted from the nucleus. For the given cases, the various nuclear reactions can be written as:





11. A radioactive isotope has a half-life of T years. How long will it take the activity to reduce to a) 3.125%, b) 1% of its original value?

Ans. Half-life of the radioactive isotope = T years

Original amount of the radioactive isotope = N_0

(a) After decay, the amount of the radioactive isotope = N

It is given that only 3.125% of N_0 remains after decay. Hence, we can write:

$$\frac{N}{N_0} = 3.125\% = \frac{3.125}{100} = \frac{1}{32}$$

$$\text{But } \frac{N}{N_0} = e^{-\lambda t}$$

Where,

λ = Decay constant

t = Time

$$\therefore -\lambda t = \frac{1}{32}$$

$$-\lambda t = \ln 1 - \ln 32$$

$$-\lambda t = 0 - 3.4567$$

$$t = \frac{3.4567}{\lambda}$$

$$\ln ce\lambda = \frac{0.693}{T}$$

$$\therefore t = \frac{3.466}{\frac{0.693}{T}} \approx 5T$$

Hence, the isotope will take about $5T$ years to reduce to 3.125% of its original value.

(b) After decay, the amount of the radioactive isotope = N

It is given that only 1% of N_0 remains after decay. Hence, we can write:

$$\frac{N}{N_0} = 1\% = \frac{1}{100}$$

$$\text{But } \frac{N}{N_0} = e^{-\lambda t}$$

$$\therefore e^{-\lambda t} = \frac{1}{100}$$

$$-\lambda t = \ln 1 - \ln 100$$

$$-\lambda t = 0 - 4.6052$$

$$t = \frac{4.6052}{\lambda}$$

Since, $\lambda = 0.693/T$

$$\therefore t = \frac{4.6052}{\frac{0.693}{T}} = 6.645T \text{ years}$$

Hence, the isotope will take about $6.645T$ years to reduce to 1% of its original value.

12. The normal activity of living carbon-containing matter is found to be about 15 decays per minute for every gram of carbon. This activity arises from the small

proportion of radioactive $^{14}_6\text{C}$ present with the stable carbon isotope $^{12}_6\text{C}$. When the organism is dead, its interaction with the atmosphere (which maintains the above equilibrium activity) ceases and its activity begins to drop. From the known half-life (5730 years) of $^{14}_6\text{C}$, and the measured activity, the age of the specimen can be approximately estimated. This is the principle of $^{14}_6\text{C}$ dating used in archaeology. Suppose a specimen from Mohenjodaro gives an activity of 9 decays per minute per gram of carbon. Estimate the approximate age of the Indus-Valley civilisation.

Ans. Decay rate of living carbon-containing matter, $R = 15$ decay/min

Let N be the number of radioactive atoms present in a normal carbon-containing matter.

Half life of $^{14}_6\text{C}$, $T_{1/2} = 5730$ years,

The decay rate of the specimen obtained from the Mohenjodaro site:

$R' = 9$ decays/min

Let N' be the number of radioactive atoms present in the specimen during the Mohenjodaro period.

Therefore, we can relate the decay constant, λ and time, t as:

$$\frac{N}{N'} = \frac{R}{R'} = e^{-\lambda t}$$

$$e^{-\lambda t} = \frac{9}{15} = \frac{3}{5}$$

$$-\lambda t = \log_e \frac{3}{5} = -0.5108$$

$$\therefore t = \frac{0.5108}{\lambda}$$

$$\text{But } \lambda = \frac{0.693}{T_{1/2}} = \frac{0.693}{5730}$$

$$\therefore t = \frac{0.5108}{\frac{0.693}{5730}} = 4223.5$$

Hence, the approximate age of the Indus-Valley civilisation is 4223.5 years.

13. Obtain the amount of ${}^{60}_{27}\text{Co}$ necessary to provide a radioactive source of 8.0 mCi strength. The half-life of ${}^{60}_{27}\text{Co}$ is 5.3 years.

Ans. The strength of the radioactive source is given as:

$$\begin{aligned}\frac{dN}{dt} &= 8.0 \text{ mCi} \\ &= 8 \times 10^{-3} \times 3.7 \times 10^{10} \\ &= 29.6 \times 10^7 \text{ decay / s}\end{aligned}$$

Where,

N = Required number of atoms

$$\text{of } {}^{60}_{27}\text{Co}, T_{1/2} = 5.3 \text{ years}$$

$$\begin{aligned}\text{Half-life} &= 5.3 \times 365 \times 24 \times 60 \times 60 \\ &= 1.67 \times 10^8 \text{ s}\end{aligned}$$

For decay constant λ , we have the rate of decay as:

$$\begin{aligned}\frac{dN}{dt} &= \lambda N \\ &= \frac{0.693}{T_{1/2}} = \frac{0.693}{1.67 \times 10^8} \text{ s}^{-1}\end{aligned}$$

$$\therefore N = \frac{1}{\lambda} \frac{dN}{dt}$$

$$\text{Where, } \lambda = \frac{29.6 \times 10^7}{\frac{0.693}{1.67 \times 10^8}} = 7.133 \times 10^{16} \text{ atoms}$$

For ${}_{27}\text{Co}^{60}$: Mass of 6.023×10^{23} (Avogadro's number) atoms = 60 g

$$\therefore \text{Mass of } 7.133 \times 10^{16} \text{ atoms} = \frac{60 \times 7.133 \times 10^{16}}{6.023 \times 10^{23}} = 7.016 \times 10^{-6} \text{ g}$$

Hence, the amount of ${}_{27}\text{Co}^{60}$ necessary for the purpose is $7.106 \times 10^{-6} \text{ g}$.

14. The half-life of ${}_{38}^{90}\text{Sr}$ is 28 years. What is the disintegration rate of 15 mg of this isotope?

Ans. Half life of ${}_{38}^{90}\text{Sr}$, $t_{1/2} = 28$ years

$$= 28 \times 365 \times 24 \times 60 \times 60$$

$$= 8.83 \times 10^8 \text{ s}$$

Mass of the isotope, $m = 15$ mg

90 g of ${}_{38}^{90}\text{Sr}$ atom contains 6.023×10^{23} (Avogadro's number) atoms.

Therefore, 15 mg of ${}_{38}^{90}\text{Sr}$ contains:

$$\frac{6.023 \times 10^{23} \times 15 \times 10^{-3}}{90} \text{ i.e., } 1.0038 \times 10^{20} \text{ number of atoms}$$

$$\text{Rate of disintegration, } \frac{dN}{dt} = \lambda N$$

Where,

$$\lambda = \text{Decay constant} = \frac{0.693}{8.83 \times 10^8} \text{ s}^{-1}$$

$$\therefore \frac{dN}{dt} = \frac{0.693 \times 1.0038 \times 10^{20}}{8.83 \times 10^8} = 7.878 \times 10^{10} \text{ atoms / s}$$

Hence, the disintegration rate of 15 mg of the given isotope is

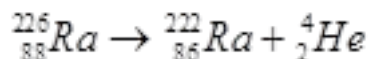
$$7.878 \times 10^{10} \text{ atoms / s.}$$

15. Find the Q-value and the kinetic energy of the emitted α -particle in the α -decay of (a)

${}^{226}_{88}\text{Ra}$ and (b) ${}^{220}_{86}\text{Rn}$. Given $m({}^{226}_{88}\text{Ra}) = 226.02540 \text{ u}$, $m({}^{222}_{86}\text{Rn}) = 222.01750 \text{ u}$,

$m({}^{220}_{86}\text{Rn}) = 220.01137 \text{ u}$, $m({}^{216}_{84}\text{Po}) = 216.00189 \text{ u}$.

Ans. (a) Alpha particle decay of ${}^{226}_{88}\text{Ra}$ emits a helium nucleus. As a result, its mass number reduces to $(226 - 4)$ 222 and its atomic number reduces to $(88 - 2)$ 86. This is shown in the following nuclear reaction.



Q-value of

emitted α -particle = (Sum of initial mass - Sum of final mass) c^2

Where,

c = Speed of light

It is given that:

$$m({}^{226}_{88}\text{Ra}) = 226.02540 \text{ u}$$

$$m({}^{222}_{86}\text{Rn}) = 222.01750 \text{ u}$$

$$m({}^4_2\text{He}) = 4.002603 \text{ u}$$

$$Q\text{-value} = [226.02540 - (222.01750 + 4.002603)] \text{ u} c^2$$

$$= 0.005297 \text{ } u c^2$$

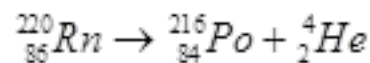
$$\text{But } 1 \text{ u} = 931.5 \text{ MeV}/c^2$$

$$\therefore Q = 0.005297 \times 931.5 \approx 4.94 \text{ MeV}$$

$$\text{Kinetic energy of the } \alpha\text{-particle} = \left(\frac{\text{Mass no after decay}}{\text{Mass no before decay}} \right) \times Q$$

$$= \frac{222}{226} \times 4.94 = 4.85 \text{ MeV}$$

(b) Alpha particle decay of ${}_{86}^{220}\text{Rn}$ is shown by the following nuclear reaction.



It is given that:

$$\text{Mass of } ({}_{86}^{220}\text{Rn}) = 220.01137 \text{ u}$$

$$\text{Mass of } ({}_{84}^{216}\text{Po}) = 216.00189 \text{ u}$$

$$\therefore Q\text{-value} = [220.01137 - (216.00189 + 4.00260)] \times 931.5$$

$$\approx 641 \text{ MeV}$$

$$\text{Kinetic energy of the } \alpha\text{-particle} = \left(\frac{220-4}{220} \right) \times 6.41$$

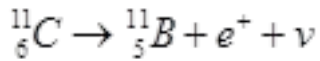
$$= 6.29 \text{ MeV}$$

16. The radionuclide ${}^{11}\text{C}$ decays according to ${}^{11}_6\text{C} \rightarrow {}^{11}_5\text{B} + e^+ + \nu$; $T_{1/2} = 20.3 \text{ min}$

The maximum energy of the emitted positron is 0.960 MeV.

Given the mass values: $m({}^{11}_6\text{C}) = 11.011434 \text{ u}$ and $m({}^{11}_5\text{B}) = 11.009305 \text{ u}$, calculate Q and compare it with the maximum energy of the positron emitted

Ans. The given nuclear reaction is:



Half life of ${}^{11}_6\text{C}$ nuclei, $T_{1/2} = 20.3 \text{ min}$

Atomic mass of $m({}^{11}_6\text{C}) = 11.011434 \text{ u}$

Atomic mass of $m({}^{11}_5\text{B}) = 11.009305 \text{ u}$

Maximum energy possessed by the emitted positron = 0.960 MeV

The change in the Q -value (ΔQ) of the nuclear masses of the ${}^{11}_6\text{C}$ nucleus is given as:

$$\Delta Q = \left[m'({}^{11}_6\text{C}) - \left[m'({}^{11}_5\text{B}) + m_e \right] \right] c^2 \dots\dots\dots(1)$$

Where,

m_e = Mass of an electron or positron = 0.000548 u

c = Speed of light

m' = Respective nuclear masses

If atomic masses are used instead of nuclear masses, then we have to add $6 m_e$ in the case of ${}^{11}_6\text{C}$ and $5 m_e$ in the case of ${}^{11}_5\text{B}$.

Hence, equation (1) reduces to:

$$\Delta Q = \left[m({}^{11}_6\text{C}) - m({}^{11}_5\text{B}) - 2m_e \right] c^2$$

Here, $m({}^{11}_6\text{C})$ and $m({}^{11}_5\text{B})$ are the atomic masses.

$$\begin{aligned} \therefore \Delta Q &= [11.011434 - 11.009305 - 2 \times 0.000548] c^2 \\ &= (0.001033 c^2) \text{ u} \end{aligned}$$

But $1 \text{ u} = 931.5 \text{ MeV}/c^2$

$$\therefore \Delta Q = 0.001033 \times 931.5 \approx 0.962 \text{ MeV}$$

The value of Q is almost comparable to the maximum energy of the emitted positron.

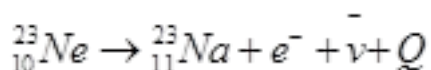
17. The nucleus ${}^{23}_{10}\text{Ne}$ decays by β^- emission. Write down the β^- decay equation and determine the maximum kinetic energy of the electrons emitted. Given that:

$$m({}^{23}_{10}\text{Ne}) = 22.994466 \text{ u}$$

$$m({}^{23}_{11}\text{Na}) = 22.989770 \text{ u}.$$

Ans. In β^- emission, the number of protons increases by 1, and one electron and an antineutrino are emitted from the parent nucleus.

β^- emission of the nucleus ${}^{23}_{10}\text{Ne}$ is given as:



It is given that:

$$\text{Atomic mass of } m({}^{23}_{10}\text{Ne}) = 22.994466 \text{ u}$$

$$\text{Atomic mass of } m({}^{23}_{11}\text{Na}) = 22.989770 \text{ u}$$

$$\text{Mass of an electron, } m_e = 0.000548 \text{ u}$$

Q -value of the given reaction is given as:

$$Q = \left[m({}^{23}_{10}\text{Ne}) - \left[m({}^{23}_{11}\text{Na}) + m_e \right] \right] c^2$$

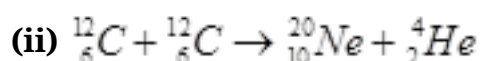
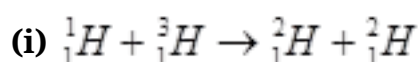
There are 10 electrons in ${}^{23}_{10}\text{Ne}$ and 11 electrons in ${}^{23}_{11}\text{Na}$. Hence, the mass of the electron is cancelled in the Q -value equation.

$$\therefore Q = [22.994466 - 22.989770] c^2$$

$$= (0.004696 c^2) u$$

The daughter nucleus is too heavy as compared to e^- and ν^- . Hence, it carries negligible energy. The kinetic energy of the antineutrino is nearly zero. Hence, the maximum kinetic energy of the emitted electrons is almost equal to the Q -value, i.e., 4.374 MeV.

18. The Q value of a nuclear reaction $A + b \rightarrow c + d$ is defined by $Q = [m_A + m_b - m_c - m_d] c^2$ where the masses refer to the respective nuclei. Determine from the given data the Q -value of the following reactions and state whether the reactions are exothermic or endothermic.



Atomic masses are given to be

$$m({}_1^2H) = 2.014102u$$

$$m({}_1^3H) = 3.016049u$$

$$m({}_6^{12}C) = 12.000000u$$

$$m({}_{10}^{20}Ne) = 19.992439u$$

Ans. (i) The given nuclear reaction is:

It is given that:

$$\text{Atomic mass } m({}_1^1H) = 1.007825u$$

$$\text{Atomic mass } m({}_1^3H) = 3.016049u$$

Atomic mass $m({}_1^2H) = 2.014102u$

According to the question, the Q -value of the reaction can be written as:

$$Q = [m({}_1^1H) + m({}_1^3H) - 2m({}_1^2H)]c^2$$
$$= [1.007825 + 3.016049 - 2 \times 2.014102]c^2$$

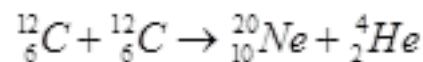
$$Q = (-0.00433c^2)u$$

$$\text{But } 1u = 931.5 \text{ MeV} / c^2$$

$$\therefore Q = -0.00433 \times 931.5 = -4.0334 \text{ MeV}$$

The negative Q -value of the reaction shows that the reaction is endothermic.

(ii) The given nuclear reaction is:



It is given that:

$$\text{Atomic mass of } m({}_{6}^{12}C) = 12.0u$$

$$\text{Atomic mass of } m({}_{10}^{20}Ne) = 19.992439u$$

$$\text{Atomic mass of } m({}_2^4He) = 4.0026.3u$$

The Q -value of this reaction is given as:

$$Q = [2m({}_{6}^{12}C) - m({}_{10}^{20}Ne) - m({}_2^4He)]c^2$$
$$= [2 \times 12.0 - 19.992439 - 4.002603]c^2$$

$$= (0.004958c^2)u$$

$$= 0.004958 \times 931.5 = 4.618377 \text{ MeV}$$

The positive Q -value of the reaction shows that the reaction is exothermic.

19. A 1000 MW fission reactor consumes half of its fuel in 5.00 y. How much ${}^{235}_{92}\text{U}$ did it contain initially? Assume that the reactor operates 80% of the time, that all the energy generated arises from the fission of ${}^{235}_{92}\text{U}$ and that this nuclide is consumed only by the fission process.

Ans. Half life of the fuel of the fission reactor, $t_{\frac{1}{2}} = 5 \text{ years}$

$$= 5 \times 365 \times 24 \times 60 \times 60 \text{ s}$$

We know that in the fission of 1 g of ${}^{235}_{92}\text{U}$ nucleus, the energy released is equal to 200 MeV.

1 mole, i.e., 235 g of ${}^{235}_{92}\text{U}$ contains $6.023 \times 10^{23} \text{ atoms}$.

$$\therefore 1 \text{ g } {}^{235}_{92}\text{U} \text{ contains } \frac{6.023 \times 10^{23}}{235} \text{ atoms}$$

The total energy generated per gram of ${}^{235}_{92}\text{U}$ is calculated as:

$$\begin{aligned} E &= \frac{6.023 \times 10^{23}}{235} \times 200 \text{ MeV} / \text{g} \\ &= \frac{200 \times 6.023 \times 10^{23} \times 1.6 \times 10^{-19} \times 10^6}{235} = 8.20 \times 10^{10} \text{ J} / \text{g} \end{aligned}$$

The reactor operates only 80% of the time.

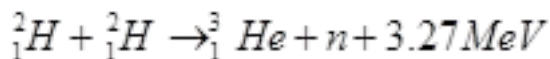
Hence, the amount of ${}^{235}_{92}\text{U}$ consumed in 5 years by the 1000 MW fission reactor is calculated as:

$$\begin{aligned} &= \frac{5 \times 80 \times 60 \times 60 \times 365 \times 24 \times 1000 \times 10^6}{100 \times 8.20 \times 10^{10}} \text{ g} \\ &\approx 1538 \text{ kg} \end{aligned}$$

∴ Initial amount of ${}_{92}^{235}\text{U} = 2 \times 1538 = 3076 \text{ kg}$

20. How long can an electric lamp of 100W be kept glowing by fusion of 2.0 kg of deuterium? Take the fusion reaction as ${}^2_1\text{H} + {}^2_1\text{H} \rightarrow {}^3_1\text{He} + n + 3.27 \text{ MeV}$.

Ans. The given fusion reaction is:



Amount of deuterium, $m = 2 \text{ kg}$

1 mole, i.e., 2 g of deuterium contains $6.023 \times 10^{23} \text{ atoms}$.

$$\therefore 2.0 \text{ kg of deuterium contains} = \frac{6.023 \times 10^{23}}{2} \times 2000 = 6.023 \times 10^{26} \text{ atoms}$$

It can be inferred from the given reaction that when two atoms of deuterium fuse, 3.27 MeV energy is released.

∴ Total energy per nucleus released in the fusion reaction:

$$\begin{aligned} E &= \frac{3.27}{2} \times 6.023 \times 10^{26} \text{ MeV} \\ &= \frac{3.27}{2} \times 6.023 \times 10^{26} \times 1.6 \times 10^{-19} \times 10^6 \\ &= 1.576 \times 10^{14} \text{ J} \end{aligned}$$

Power of the electric lamp, $P = 100 \text{ W} = 100 \text{ J/s}$

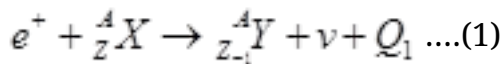
Hence, the energy consumed by the lamp per second = 100 J

The total time for which the electric lamp will glow is calculated as:

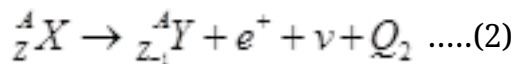
$$\frac{1.576 \times 10^{14}}{100 \times 60 \times 60 \times 24 \times 365} \approx 4.9 \times 10^4 \text{ years}$$

21. For the β^+ (positron) emission from a nucleus, there is another competing process known as electron capture (electron from an inner orbit, say, the K - shell, is captured by the nucleus and a neutrino is emitted). $e^+ + {}^A_Z X \rightarrow {}^A_{Z-1} Y + \nu$ Show that if β^+ emission is energetically allowed, electron capture is necessarily allowed but not vice-versa.

Ans. Let the amount of energy released during the electron capture process be Q_1 . The nuclear reaction can be written as:



Let the amount of energy released during the positron capture process be Q_2 . The nuclear reaction can be written as:



$$m_N({}^A_Z X) = \text{Nuclear mass of } {}^A_Z X$$

$$m_N({}^A_{Z-1} Y) = \text{Nuclear mass of } {}^A_{Z-1} Y$$

$$m({}^A_Z X) = \text{Atomic mass of } {}^A_Z X$$

$$m({}^A_{Z-1} Y) = \text{Atomic mass of } {}^A_{Z-1} Y$$

$$m_e = \text{Mass of an electron}$$

$$c = \text{Speed of light}$$

Q-value of the electron capture reaction is given as:

$$Q_1 = [m_N({}^A_Z X) + m_e - m_N({}^A_{Z-1} Y)] c^2$$

$$= [m({}^A_Z X) - Zm_e + m_e - m({}^A_{Z-1} Y) + (Z-1)m_e] c^2$$

$$= \left[m\left({}^A_Z X\right) - m\left({}^A_{Z-1} Y\right) \right] c^2 \dots\dots\dots(3)$$

Q-value of the positron capture reaction is given as:

$$\begin{aligned} Q_2 &= \left[m\left({}^A_Z X\right) - m\left({}^A_{Z-1} Y\right) - 2m_e \right] c^2 \\ &= \left[m\left({}^A_Z X\right) - m\left({}^A_{Z-1} Y\right) + (Z-1)m_e - m_e \right] c^2 \\ &= \left[m\left({}^A_Z X\right) - m\left({}^A_{Z-1} Y\right) - 2m_e \right] c^2 \dots\dots\dots(4) \end{aligned}$$

It can be inferred that if $Q_2 > 0$, then $Q_1 > 0$; Also, if $Q_1 > 0$, it does not necessarily mean that $Q_2 > 0$.

In other words, this means that if β^+ emission is energetically allowed, then the electron capture process is necessarily allowed, but not vice-versa. This is because the Q-value must be positive for an energetically-allowed nuclear reaction.

22. In a periodic table the average atomic mass of magnesium is given as 24.312 u. The average value is based on their relative natural abundance on earth. The three isotopes and their masses are ${}^{24}_{12}\text{Mg}$ (23.98504u), ${}^{25}_{12}\text{Mg}$ (24.98584u) and ${}^{26}_{12}\text{Mg}$ (25.98259u). The natural abundance of ${}^{24}_{12}\text{Mg}$ is 78.99% by mass. Calculate the abundances of other two isotopes.

Ans. Average atomic mass of magnesium, $m = 24.312$ u

Mass of magnesium isotope ${}^{24}_{12}\text{Mg}$, $m_1 = 23.98504$ u

Mass of magnesium isotope ${}^{25}_{12}\text{Mg}$, $m_2 = 24.98584$ u

Mass of magnesium isotope ${}^{26}_{12}\text{Mg}$, $m_3 = 25.98259$ u

Abundance of ${}^{24}_{12}\text{Mg}$, $\eta_1 = 78.99\%$

Abundance of ${}^{25}_{12}\text{Mg}$, $\eta_2 = x\%$

Hence, abundance of $^{25}_{12}\text{Mg}$, $\eta_3 = 100 - x - 78.99\% = (21.01 - x)\%$

We have the relation for the average atomic mass as:

$$m = \frac{m_1\eta_1 + m_2\eta_2 + m_3\eta_3}{\eta_1 + \eta_2 + \eta_3}$$

$$24.312 = \frac{23.98504 \times 78.99 + 24.98584 \times x + 25.98259 \times (21.01 - x)}{100}$$

$$2431.2 = 1894.5783096 + 24.98584x + 545.8942159 = 25.98259x$$

$$0.99675x = 9.2725255$$

And $\therefore x \approx 9.3\%$

Hence, the abundance of $^{25}_{12}\text{Mg}$ is 9.3% and that of $^{26}_{12}\text{Mg}$ is 11.71%.

23. The neutron separation energy is defined as the energy required to remove a neutron from the nucleus. Obtain the neutron separation energies of the nuclei $^{41}_{20}\text{Ca}$ and $^{27}_{13}\text{Al}$ from the following data:

$$m(^{40}_{20}\text{Ca}) = 39.962591 \text{ u}$$

$$m(^{41}_{20}\text{Ca}) = 40.962278 \text{ u}$$

$$m(^{26}_{13}\text{Al}) = 25.986895 \text{ u}$$

$$m(^{27}_{13}\text{Al}) = 26.981541 \text{ u}$$

Ans. For $^{41}_{20}\text{Ca}$: Separation energy = 8.363007 MeV

For $^{27}_{13}\text{Al}$: Separation energy = 13.059 MeV

A neutron ${}_0^1n$ is removed from a $(^{41}_{20}\text{Ca})$ nucleus. The corresponding nuclear reaction can be written as: $^{41}_{20}\text{Ca} \rightarrow ^{40}_{20}\text{Ca} + {}_0^1n$

It is given that:

$$\text{Mass } m\left({}_{20}^{40}\text{Ca}\right) = 39.962591 \text{ u}$$

$$\text{Mass } m\left({}_{20}^{41}\text{Ca}\right) = 40.962278 \text{ u}$$

$$\text{Mass } m\left({}_0^1n\right) = 1.008665 \text{ u}$$

The mass defect of this reaction is given as:

$$\begin{aligned}\Delta m &= m\left({}_{20}^{40}\text{Ca}\right) + \left({}_0^1n\right) - m\left({}_{20}^{41}\text{Ca}\right) \\ &= 39.962591 + 1.008665 - 40.962278 = 0.008978 \text{ u}\end{aligned}$$

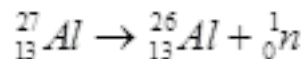
$$\text{But } 1\text{u} = 931.5 \text{ MeV} / c^2$$

$$\therefore \Delta m = 0.008978 \times 931.5 \text{ MeV} / c^2$$

Hence, the energy required for neutron removal is calculated as:

$$\begin{aligned}E &= \Delta mc^2 \\ &= 0.008978 \times 931.5 \text{ MeV}\end{aligned}$$

For ${}_{13}^{27}\text{Al}$, the neutron removal reaction can be written as:



It is given that:

$$\text{Mass } m\left({}_{13}^{27}\text{Al}\right) = 26.981541 \text{ u}$$

$$\text{Mass } m\left({}_{13}^{26}\text{Al}\right) = 25.986895 \text{ u}$$

The mass defect of this reaction is given as:

$$\begin{aligned}\Delta m &= m\left({}_{13}^{26}\text{Al}\right) + m\left({}_0^1n\right) - m\left({}_{13}^{27}\text{Al}\right) \\ &= 25.986895 + 1.008665 - 26.981541\end{aligned}$$

$$= 0.014019 \text{ u}$$

$$= 0.014019 \times 931.5 \text{ MeV} / c^2$$

Hence, the energy required for neutron removal is calculated as:

$$E = \Delta mc^2$$

$$= 0.014019 \times 931.13059 \text{ MeV}$$

24. A source contains two phosphorous radio nuclides $^{32}_{15}\text{P}$ ($T_{1/2} = 14.3\text{d}$) and $^{33}_{15}\text{P}$ ($T_{1/2} = 25.3\text{d}$). Initially, 10% of the decays come from $^{33}_{15}\text{P}$. How long one must wait until 90% do so?

Ans. Half life of $^{32}_{15}\text{P}$, $T_{1/2} = 14.3$ days

Half life of $^{33}_{15}\text{P}$, $T'_{1/2} = 25.3$ days

$^{33}_{15}\text{P}$ nucleus decay is 10% of the total amount of decay.

The source has initially 10% of $^{33}_{15}\text{P}$ nucleus and 90% of $^{32}_{15}\text{P}$ nucleus.

Suppose after t days, the source has 10% of $^{32}_{15}\text{P}$ nucleus and 90% of $^{33}_{15}\text{P}$ nucleus.

Initially:

Number of $^{33}_{15}\text{P}$ nucleus = N

Number of $^{32}_{15}\text{P}$ nucleus = $9N$

Finally:

Number of $^{33}_{15}\text{P}$ nucleus = $9N'$

Number of $^{32}_{15}\text{P}$ nucleus = N'

For $^{32}_{15}\text{P}$ nucleus, we can write the number ratio as:

$$\frac{N'}{9N} = \left(\frac{1}{2}\right)^{\frac{t}{T_{1/2}}}$$

$$N' = 9N(2)^{\frac{-t}{14.3}} \dots\dots\dots(1)$$

For $^{33}_{15}\text{P}$, we can write the number ratio as:

$$\frac{9N'}{N} = \left(\frac{1}{2}\right)^{\frac{t}{T_{1/2}}}$$

$$9N' = N(2)^{\frac{-t}{25.3}} \dots\dots\dots(2)$$

On dividing equation (1) by equation (2), we get:

$$\frac{1}{9} = 9 \times 2 \left(\frac{t}{25.3} - \frac{t}{14.3} \right)$$

$$\frac{1}{81} = 2 - \left(\frac{11t}{25.3 \times 14.3} \right)$$

$$\log 1 - \log 81 = \frac{-11t}{25.3 \times 14.3} \log 2$$

$$\frac{-11t}{25.3 \times 14.3} = \frac{0 - 1.908}{0.301}$$

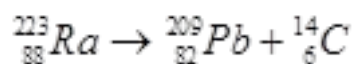
$$t = \frac{25.3 \times 14.3 \times 1.908}{11 \times 0.301} \approx 208.5 \text{ days}$$

Hence, it will take about 208.5 days for 90% decay of $^{33}_{15}\text{P}$.

25. Under certain circumstances, a nucleus can decay by emitting a particle more massive than an α -particle. Consider the following decay processes:

${}_{88}^{223}\text{Ra} \rightarrow {}_{82}^{209}\text{Pb} + {}_6^{14}\text{C}$, ${}_{88}^{223}\text{Ra} \rightarrow {}_{86}^{219}\text{Rn} + {}_2^4\text{He}$ Calculate the Q -values for these decays and determine that both are energetically allowed.

Ans. Take a ${}_{6}^{14}\text{C}$ emission nuclear reaction:



We know that:

Mass of ${}_{88}^{223}\text{Ra}$, $m_1 = 223.01850 \text{ u}$

Mass of ${}_{82}^{209}\text{Pb}$, $m_2 = 208.98107 \text{ u}$

Mass of ${}_6^{14}\text{C}$, $m_3 = 14.00324 \text{ u}$

Hence, the Q -value of the reaction is given as:

$$Q = (m_1 - m_2 - m_3)c^2$$

$$= (223.01850 - 208.98107 - 14.00324) c^2$$

$$= (0.03419c^2) \text{ u}$$

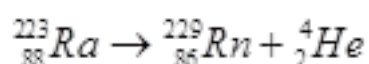
$$\text{But } 1 \text{ u} = 931.5 \text{ MeV} / c^2$$

$$\therefore Q = 0.03419 \times 931.5$$

$$= 31.848 \text{ MeV}$$

Hence, the Q -value of the nuclear reaction is 31.848 MeV. Since the value is positive, the reaction is energetically allowed.

Now take a ${}_2^4\text{He}$ emission nuclear reaction:



We know that:

Mass of ${}^{223}_{88}\text{Ra}$, $m_1 = 223.01850$

Mass of ${}^{219}_{82}\text{Rn}$, $m_2 = 219.00948$

Mass of ${}^4_2\text{He}$, $m_3 = 4.00260$

Q-value of this nuclear reaction is given as:

$$\begin{aligned} Q &= (m_1 - m_2 - m_3)c^2 \\ &= (223.01850 - 219.00948 - 4.00260) C^2 \\ &= (0.00642c^2) u = 0.00642 \times 931.5 = 5.98 \text{ MeV} \end{aligned}$$

Hence, the Qvalue of the second nuclear reaction is 5.98 MeV. Since the value is positive, the reaction is energetically allowed.

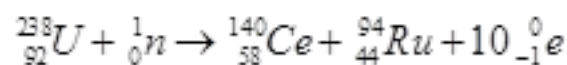
26. Consider the fission of ${}^{238}_{92}\text{U}$ by fast neutrons. In one fission event, no neutrons are emitted and the final end products, after the beta decay of the primary fragments, are ${}^{140}_{58}\text{Ce}$ and ${}^{99}_{44}\text{Ru}$. Calculate Q for this fission process. The relevant atomic and particle masses are

$$m({}^{238}_{92}\text{U}) = 238.05079 \text{ u}$$

$$m({}^{140}_{58}\text{Ce}) = 139.90543 \text{ u}$$

$$m({}^{99}_{44}\text{Ru}) = 98.90594 \text{ u}$$

Ans. In the fission of ${}^{238}_{92}\text{U}$, 10 β^- particles decay from the parent nucleus. The nuclear reaction can be written as:



It is given that:

Mass of a nucleus ${}^{238}_{92}\text{U}$ $m_1 = 238.05079 \text{ u}$

Mass of a nucleus $^{140}_{58}\text{Ce}$ $m_2 = 139.90543 \text{ u}$

Mass of a nucleus $^{99}_{44}\text{Ru}$, $m_3 = 98.90594 \text{ u}$

Mass of a neutron ^1_0n $m_4 = 1.008665 \text{ u}$

Q-value of the above equation,

$$Q = \left[m'(^{238}_{92}\text{U}) + m(^1_0\text{n}) - m'(^{140}_{58}\text{Ce}) - m'(^{99}_{44}\text{Ru}) - 10m_e \right] c^2$$

Where,

m' = Represents the corresponding atomic masses of the nuclei

$$m'(^{238}_{92}\text{U}) = m_1 - 92m_e$$

$$m'(^{140}_{58}\text{Ce}) = m_2 - 58m_e$$

$$m'(^{99}_{44}\text{Ru}) = m_3 - 44m_e$$

$$m(^1_0\text{n}) = m_4$$

$$Q = [m_1 - 92m_e + m_4 - m_2 + 58m_e - m_3 + 44m_e - 10m_e] c^2$$

$$= [m_1 + m_4 - m_2 - m_3] c^2$$

$$= [238.0507 + 1.008665 - 139.90543 - 98.90594] c^2$$

$$= [0.247995 c^2] u$$

$$\text{But } 1u = 931.5 \text{ MeV} / c^2$$

$$\therefore Q = 0.247995 \times 931.5 = 231.007 \text{ MeV}$$

Hence, the Q-value of the fission process is 231.007 MeV.

27. Consider the D - T reaction (deuterium - tritium fusion) ${}^2_1\text{H} + {}^3_1\text{H} \rightarrow {}^4_2\text{He} + n$

(a) Calculate the energy released in MeV in this reaction from the data:

$$m({}^2_1\text{H}) = 2.014102 \text{ u}$$

$$m({}^3_1\text{H}) = 3.016049 \text{ u}$$

(b) Consider the radius of both deuterium and tritium to be approximately 2.0 fm. What is the kinetic energy needed to overcome the coulomb repulsion between the two nuclei? To what temperature must the gas be heated to initiate the reaction? (Hint: Kinetic energy required for one fusion event = average thermal kinetic energy available with the interacting particles = $2(3kT/2)$; k = Boltzman's constant, T = absolute temperature.)

Ans. (a) Take the D-T nuclear reaction: ${}^2_1\text{H} + {}^3_1\text{H} \rightarrow {}^4_2\text{He} + n$

It is given that:

Mass of ${}^2_1\text{H}$, $m_1 = 2.014102 \text{ u}$

Mass of ${}^3_1\text{H}$, $m_2 = 3.016049 \text{ u}$

Mass of ${}^4_2\text{He}$ $m_3 = 4.002603 \text{ u}$

Mass of ${}_0^1n$, $m_4 = 1.008665 \text{ u}$

Q-value of the given D-T reaction is:

$$Q = [m_1 + m_2 - m_3 - m_4] c^2$$

$$= [2.014102 + 3.016049 - 4.002603 - 1.008665] c^2$$

$$= [0.018883 c^2] \text{ u}$$

But $1 \text{ u} = 931.5 \text{ MeV}/c^2$

$$\therefore Q = 0.018883 \times 931.5 = 17.59 \text{ MeV}$$

(b) Radius of deuterium and tritium, $r \approx 2.0 \text{ fm} = 2 \times 10^{-15} \text{ m}$ Distance between the two nuclei at the moment when they touch each other, $d = r + r = 4 \times 10^{-15} \text{ m}$ Charge on the deuterium nucleus = e

Charge on the tritium nucleus = e

Hence, the repulsive potential energy between the two nuclei is given as:

$$V = \frac{e^2}{4\pi\epsilon_0(d)}$$

Where,

ϵ_0 = Permittivity of free space

$$\frac{1}{4\pi\epsilon_0} = 9 \times 10^9 \text{ Nm}^2\text{C}^{-2}$$

$$\therefore V = \frac{9 \times 10^9 \times (1.6 \times 10^{-19})^2}{4 \times 10^{-15}} = 5.76 \times 10^{-14} \text{ J}$$

$$\frac{5.76 \times 10^{-14}}{1.6 \times 10^{-19}} = 3.6 \times 10^5 \text{ eV} = 360 \text{ keV}$$

Hence, $5.76 \times 10^{-14} \text{ J}$ or 360 keV of kinetic energy (KE) is needed to overcome the Coulomb repulsion between the two nuclei.

However, it is given that:

$$\text{KE} = 2 \times \frac{3}{2} kT$$

Where, k = Boltzmann constant = $1.38 \times 10^{-23} \text{ m}^2 \text{ kg s}^{-2} \text{ K}^{-1}$

T = Temperature required for triggering the reaction

$$\therefore T = \frac{KE}{3K}$$

$$= \frac{5.76 \times 10^{-14}}{3 \times 1.38 \times 10^{-23}} = 1.39 \times 10^9 K$$

Hence, the gas must be heated to a temperature of $1.39 \times 10^9 K$ to initiate the reaction.

28. Calculate and compare the energy released by a) fusion of 1.0 kg of hydrogen deep within Sun and b) the fission of 1.0 kg of ^{235}U in a fission reactor.

Ans. (a) Amount of hydrogen, $m = 1 \text{ kg} = 1000 \text{ g}$

1 mole, i.e., 1 g of hydrogen (^1_1H) contains 6.023×10^{23} atoms.

\therefore 1000 g of ^1_1H contains $6.023 \times 10^{23} \times 1000 \text{ atoms}$.

Within the sun, four ^1_1H nuclei combine and form one ^4_2He nucleus. In this process 26 MeV of energy is released.

Hence, the energy released from the fusion of 1 kg ^1_1H is:

$$E_1 = \frac{6.023 \times 10^{23} \times 26 \times 10^3}{4} = 39.1495 \times 10^{26} \text{ MeV}$$

(b) Amount of $^{235}_{92}\text{U} = 1 \text{ kg} = 1000 \text{ g}$

1 mole, i.e., 235 g of $^{235}_{92}\text{U}$ contains 6.023×10^{23} atoms.

\therefore 1000 g of $^{235}_{92}\text{U}$ contains $\frac{6.023 \times 10^{23} \times 1000}{235} \text{ atoms}$

It is known that the amount of energy released in the fission of one atom of $^{235}_{92}\text{U}$ is 200 MeV.

Hence, energy released from the fission of 1 kg of $^{235}_{92}\text{U}$ is:

$$E_2 = \frac{6 \times 10 \times 1000 \times 200}{235} = 5.106 \times 10^{26} \text{ MeV}$$

$$\therefore \frac{E_1}{E_2} = \frac{39.1495 \times 10^{26}}{5.106 \times 10^{26}} = 7.67 \approx 8$$

Therefore, the energy released in the fusion of 1 kg of hydrogen is nearly 8 times the energy released in the fission of 1 kg of uranium.

29. Suppose India had a target of producing by 2020 AD, 200,000 MW of electric power, ten percent of which was to be obtained from nuclear power plants. Suppose we are given that, on an average, the efficiency of utilization (i.e. conversion to electric energy) of thermal energy produced in a reactor was 25%. How much amount of fissionable uranium would our country need per year by 2020? Take the heat energy per fission of ^{235}U to be about 200MeV.

Ans. Amount of electric power to be generated, $P = 2 \times 10^5 \text{ MW}$

10% of this amount has to be obtained from nuclear power plants.

$$\therefore \text{Amount of nuclear power, } P_1 = \frac{10}{100} \times 2 \times 10^5$$

$$= 2 \times 10^4 \text{ MW}$$

$$= 2 \times 10^4 \times 10^6 \text{ J/s}$$

$$= 2 \times 10^{10} \times 60 \times 60 \times 24 \times 365 \text{ J/y}$$

Heat energy released per fission of a ^{235}U nucleus, $E = 200 \text{ MeV}$

Efficiency of a reactor = 25%

Hence, the amount of energy converted into the electrical energy per fission is calculated as:

$$\frac{25}{100} \times 200 = 50 \text{ MeV}$$

$$= 50 \times 1.6 \times 10^{-19} \times 10^6 = 8 \times 10^{-12} J$$

Number of atoms required for fission per year:

$$\frac{2 \times 10^{10} \times 60 \times 60 \times 24 \times 365}{8 \times 10^{-12}} = 78840 \times 10^{24} \text{ atoms}$$

1 mole, i.e., 235 g of U^{235} contains 6.023×10^{23} atoms.

\therefore Mass of 6.023×10^{23} atoms of $U^{235} = 235 \text{ g} = 235 \times 10^{-3} \text{ kg}$

\therefore Mass of 78840×10^{24} atoms of U^{235}

$$= \frac{235 \times 10^{-3}}{6.023 \times 10^{23}} \times 78840 \times 10^{24}$$

$$= 3.076 \times 10^4 \text{ kg}$$

Hence, the mass of uranium needed per year is $3.076 \times 10^4 \text{ kg}$.