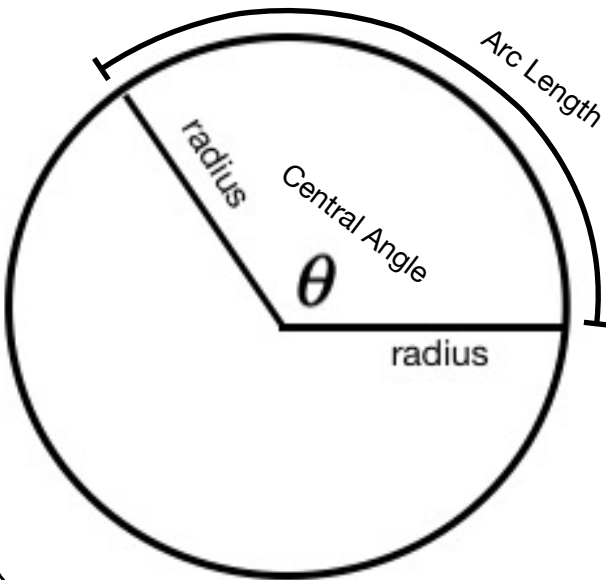


## What's this?

1. What is a radian? How does it relate to degrees?
2. What are Linear and Angular Speed and how do I calculate them?
3. What is Arc Length and Sector Area and how do I calculate them?
4. What is the Unit Circle and what is it used for?
5. REVIEW - SOH CAH TOA

## Vocabulary to get started

1. Arc Length: The distance along the curved line making up an arc. Usually represented as "s."
2. Central Angle: An angle whose vertex is on the center of the angle.
3. Supplementary Angles: Add to 180 degrees.
4. Complementary Angles: Add to 90 degrees.



Other Greek letter often used for angle variables

$\alpha$  = alpha

$\beta$  = beta

$\theta$  = theta

$\omega$  = omega

$\phi$  = phi

## Arithmetic and Calculator Skills needed to get started

$$\frac{\pi}{3} - \frac{\pi}{4} =$$

$$\frac{\pi}{6} + \frac{\pi}{12} =$$

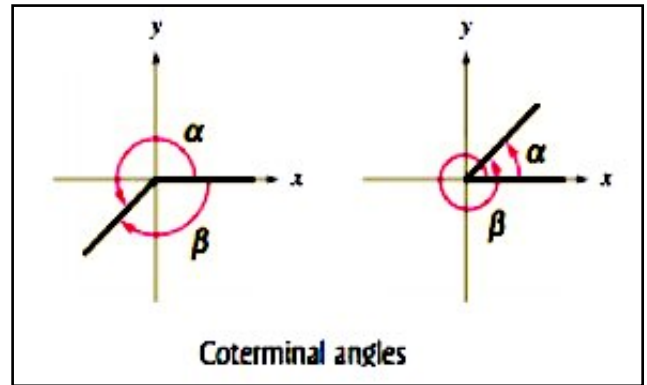
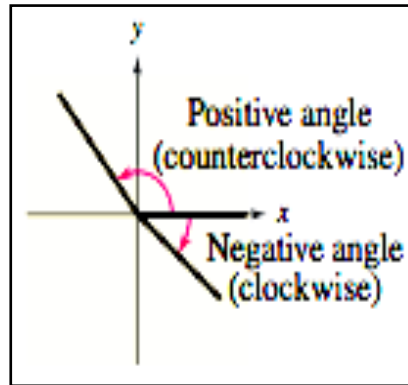
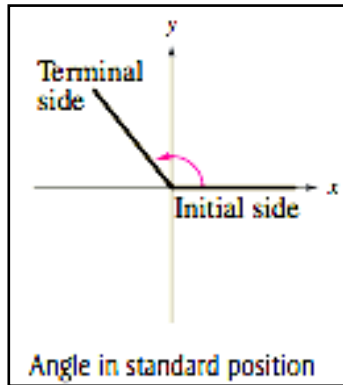
Finding Radians and Degrees on your Calculator

rationalizing denominators

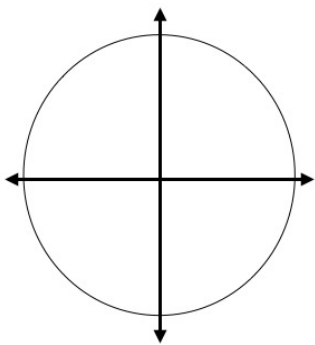
$$\frac{3}{\sqrt{2}}$$

$$\frac{1}{\sqrt{3}}$$

## Understanding and Sketching Central Angles

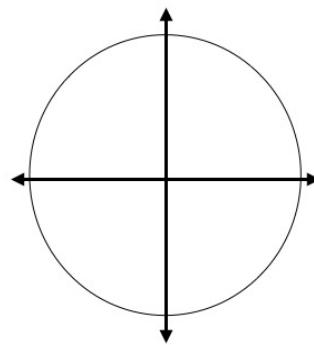


Sketch the following angles for practice. Then give a coterminal angle of the angle you sketched.



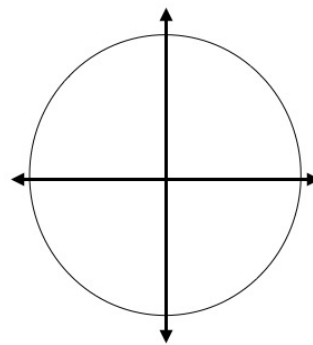
$225^\circ$

coterminal angle: \_\_\_\_\_



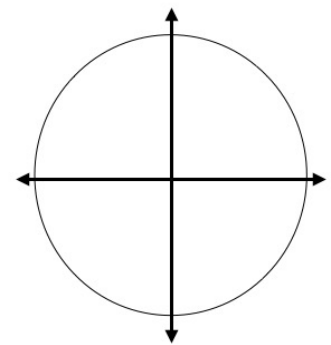
$-90^\circ$

coterminal angle: \_\_\_\_\_



$405^\circ$

coterminal angle: \_\_\_\_\_



$-210^\circ$

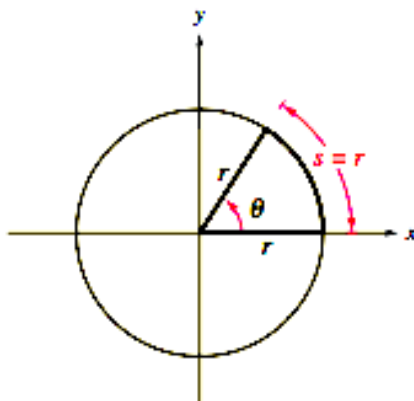
coterminal angle: \_\_\_\_\_

## What is a radian and how does it relate to degrees?

### What is a Radian?

One Radian is the measure of a central angle that intercepts an arc "s" equal in length to the radius of the circle. Radians are calculated more generally as

$$\text{Radians} = \frac{\text{Arc Length}}{\text{Radius}}$$



One Radian

### How many radians are there in one full circle?

Since arc length (s) is going to go around the whole circle, it has the same value of the circle's circumference.

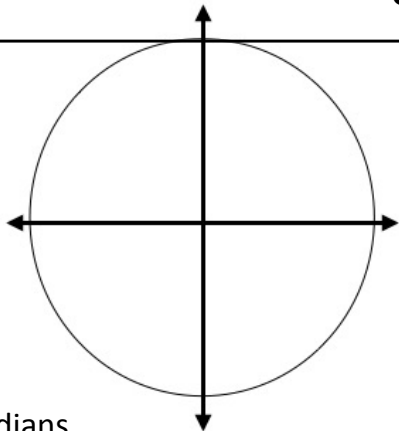
$$\text{Radians} = \frac{\text{Arc Length}}{\text{Radius}}$$

$$C = 2\pi r \quad \text{Circumference Formula}$$

$$\text{Radians} = \frac{2\pi r}{r} = 2\pi$$

So there are  $2\pi$  radians in one whole circle

## Practice converting degrees $\leftrightarrow$ radians



$$\frac{\theta_d}{360} = \frac{\theta_r}{2\pi}$$

Convert to Radians

$$135^\circ \rightarrow$$

$$-60^\circ \rightarrow$$

$$15^\circ \rightarrow$$

Convert to Degree

$$\frac{4\pi}{3} \rightarrow$$

$$-3\pi \rightarrow$$

$$\frac{5\pi}{8} \rightarrow$$

## SOH-CAH-TOA

$$\text{Sine} = \frac{\text{opposite}}{\text{hypotenuse}}$$

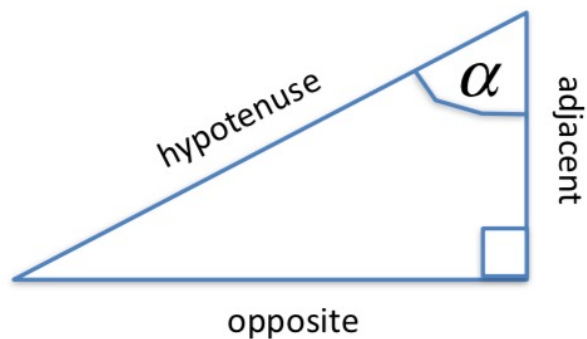
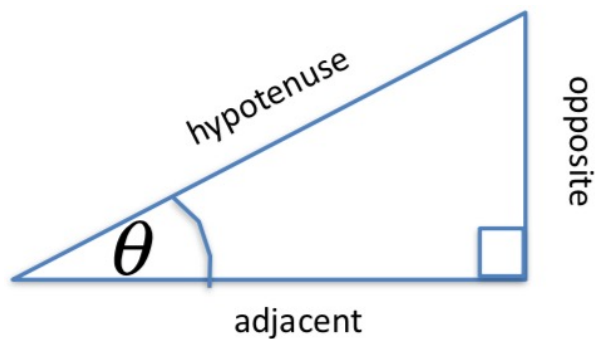
$$\text{Cosine} = \frac{\text{adjacent}}{\text{hypotenuse}}$$

$$\text{Tangent} = \frac{\text{opposite}}{\text{adjacent}}$$

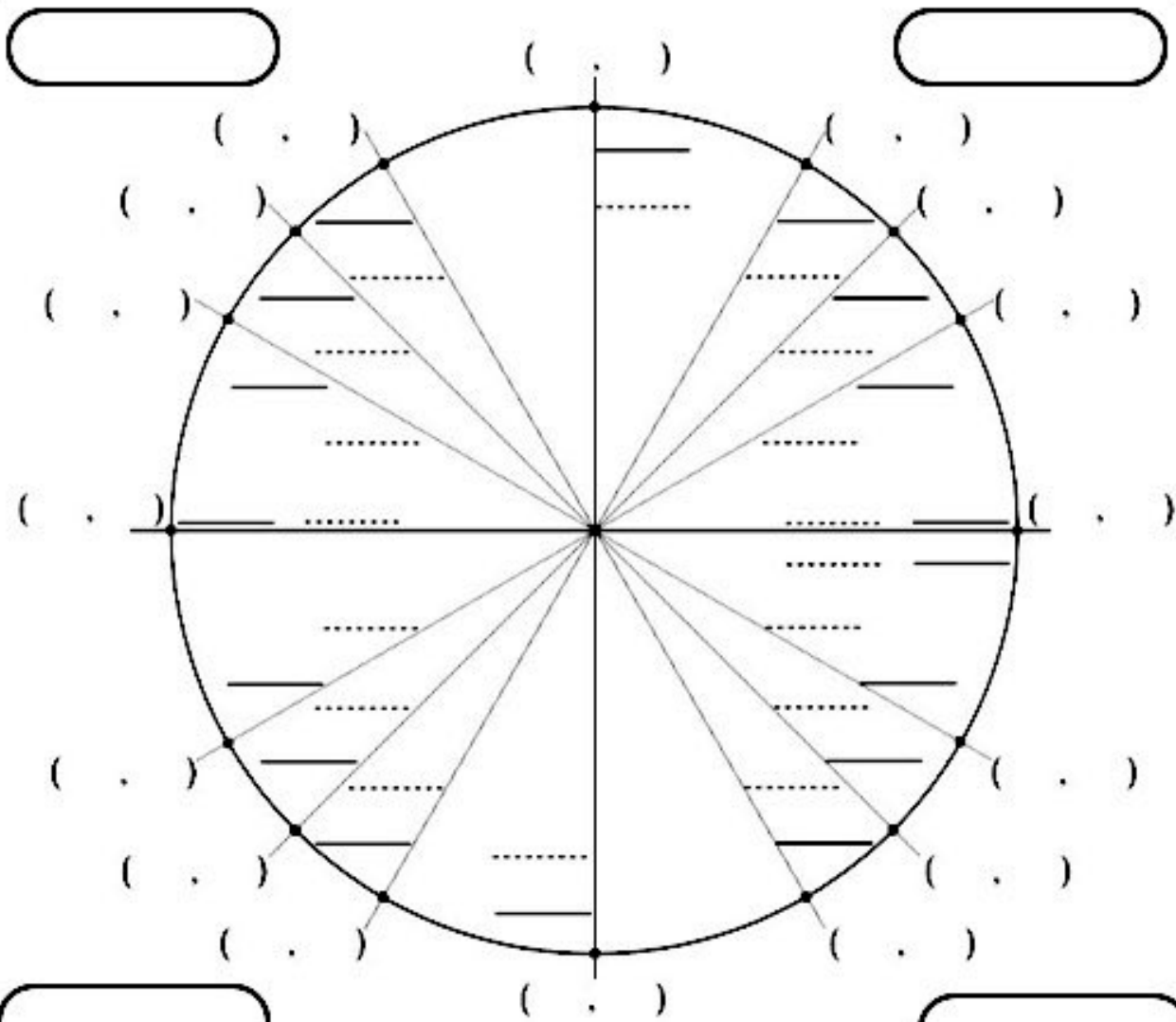
$$\text{Cosecant} = \frac{\text{hypotenuse}}{\text{opposite}}$$

$$\text{Secant} = \frac{\text{hypotenuse}}{\text{adjacent}}$$

$$\text{Cotangent} = \frac{\text{adjacent}}{\text{opposite}}$$



Unit Circle



$$x^2 + y^2 = 1$$

Unit Circle Formula

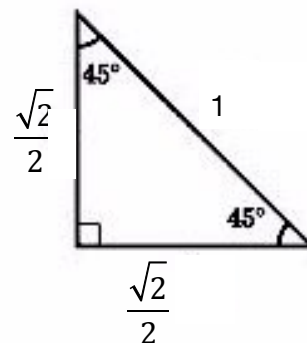
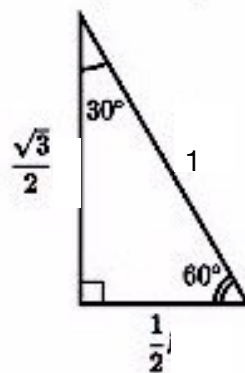
Trig definitions from unit circle

$$\sin(\theta) = \frac{y}{1} \quad \csc(\theta) = \frac{1}{y}$$

$$\cos(\theta) = \frac{x}{1} \quad \sec(\theta) = \frac{1}{x}$$

$$\tan(\theta) = \frac{y}{x} \quad \cot(\theta) = \frac{x}{y}$$

Special Right Triangles

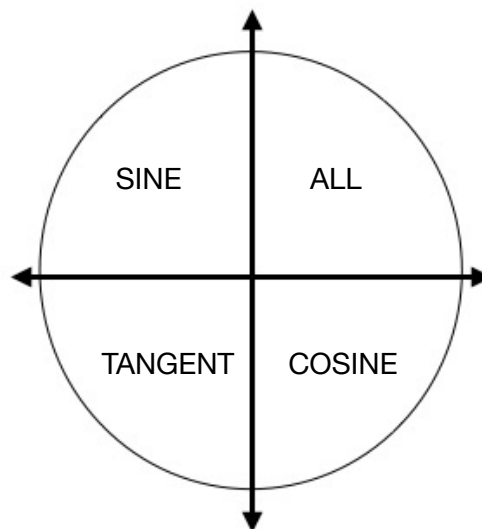




### Using the TRIG CHART to evaluate trigonometric ratios strategically

$\theta$ (Deg)	$\theta$ (Rad)	Ref Angle	$\sin \theta$	$\cos \theta$	$\tan \theta$
$0^\circ$					
$30^\circ$					
$45^\circ$					
$60^\circ$					
$90^\circ$					

**Reference Angle:** The angle that is made with the x-axis and the terminal side of angle.



Reference Angle: \_\_\_\_\_

Rewrite: \_\_\_\_\_

Solution: \_\_\_\_\_

Reference Angle: \_\_\_\_\_

Rewrite: \_\_\_\_\_

Solution: \_\_\_\_\_

Reference Angle: \_\_\_\_\_

Rewrite: \_\_\_\_\_

Solution: \_\_\_\_\_

Reference Angle: \_\_\_\_\_

Rewrite: \_\_\_\_\_

Solution: \_\_\_\_\_

Reference Angle: \_\_\_\_\_

Rewrite: \_\_\_\_\_

Solution: \_\_\_\_\_

Reference Angle: \_\_\_\_\_

Rewrite: \_\_\_\_\_

Solution: \_\_\_\_\_

Reference Angle: \_\_\_\_\_

Rewrite: \_\_\_\_\_

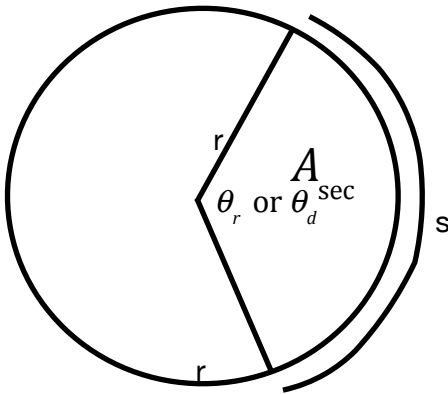
Solution: \_\_\_\_\_

Reference Angle: \_\_\_\_\_

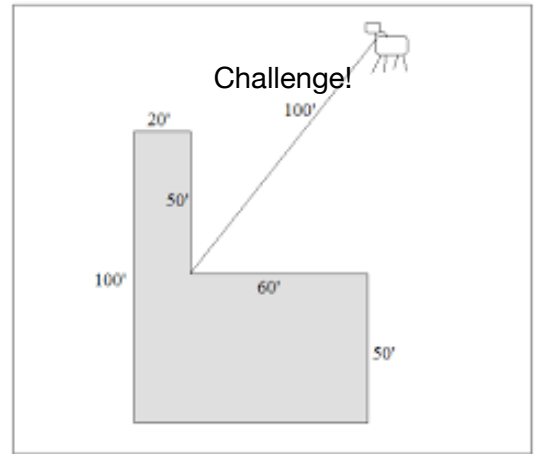
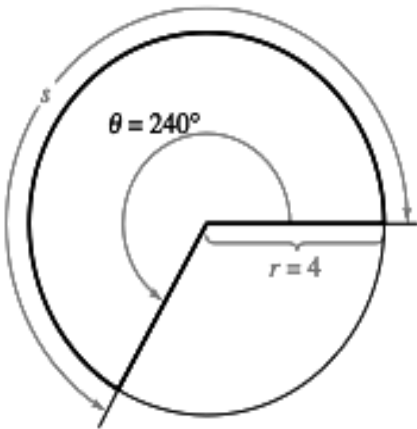
Rewrite: \_\_\_\_\_

Solution: \_\_\_\_\_

Find Arc Length or Sector Area.



$$\frac{\theta_d}{360} = \frac{\theta_r}{2\pi} = \frac{s}{2\pi r} = \frac{A_{\text{sec}}}{\pi r^2}$$



Angular and Linear Speed

The radius of each wheel of the car is 15 inches. If the wheels are turning at a rate of 3 revolutions per second, how fast is the car moving? Express your answer in inches per second and miles per hour.

Next, find the angular speed of the wheel in degrees per second AND radian per second.

