



# Selina Concise Physics Class 9 ICSE Solutions Upthrust in Fluids, Archimedes' Principle and Floatation

July 27, 2017 by Veerendra

## Selina Concise Physics Class 9 ICSE Solutions Upthrust in Fluids, Archimedes' Principle and Floatation

ICSE Solutions

Selina ICSE Solutions

APlusTopper.com provides step by step solutions for Selina Concise ICSE Solutions for Class 9 Physics Chapter 5 Upthrust in Fluids, Archimedes' Principle and Floatation. You can download the Selina Concise Physics ICSE Solutions for Class 9 with Free PDF download option. Selina Publishers Concise Physics for Class 9 ICSE Solutions all questions are solved and explained by expert teachers as per ICSE board guidelines.

[Download Formulae Handbook For ICSE Class 9 and 10](#)

### Selina ICSE Solutions for Class 9 Physics Chapter 5 Upthrust in Fluids, Archimedes' Principle and Floatation

#### Exercise 5(A)

#### Solution 1S.

When a body is partially or wholly immersed in a liquid, an upward force acts on it. This upward force is known as an **upthrust**.

**Upthrust can be demonstrated by the following experiment:**

Take an empty can and close its mouth with an airtight stopper. Put it in a tub filled with water. It floats with a large part of it above the surface of water and only a small part of it below the surface of water. Push the can into the water. You can feel an upward force and you find it difficult to push the can further into water. It is noticed that as the can is pushed more and more into the water, more and more force is needed to push the can further into water, until it is completely immersed. When the can is fully inside the water, a definite force is still needed to keep it at rest in that position. Again, if the can is released in this position, it is noticed that the can bounces back to the surface and starts floating again.

### Solution 2S.

Buoyant force on a body due to a liquid acts upwards at the centre of buoyancy.

### Solution 3S.

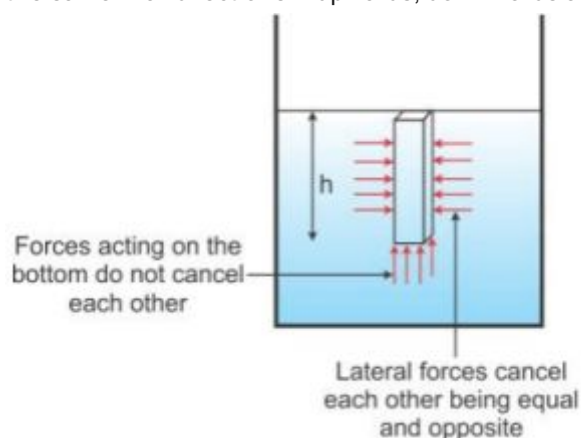
The property of a liquid to exert an upward force on a body immersed in it is called buoyancy.

### Solution 4S.

The upward force exerted on a body by the fluid in which it is submerged is called the upthrust. Its S.I. unit is 'newton'.

### Solution 5S.

A liquid contained in a vessel exerts pressure at all points and in all directions. The pressure at a point in a liquid is the same in all directions – upwards, downwards and sideways. It increases with the depth inside the liquid.



When a body is immersed in a liquid, the thrusts acting on the side walls of the body are neutralized as they are equal in magnitude and opposite in direction. However, the magnitudes of pressure on the upper and lower faces are not equal. The difference in pressure on the upper and lower faces cause a net upward force ( $= \text{pressure} \times \text{area}$ ) or upthrust on the body.

It acts at the centre of buoyancy.

### Solution 6S.

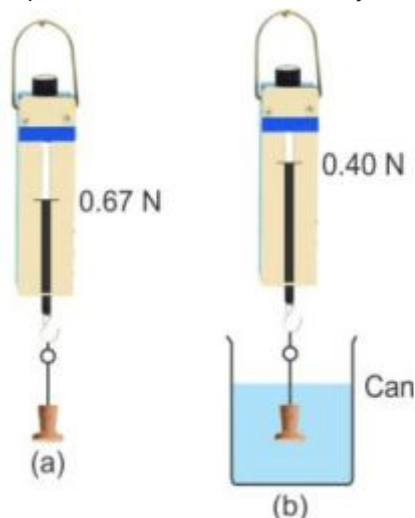
Upthrust due to water on block when fully submerged is more than its weight. Density of water is more than the density of cork; hence, upthrust due to water on the block of cork when fully submerged in water is more than its weight.

### Solution 7S.

A piece of wood if left under water comes to the surface of water because the upthrust on body due to its submerged part is equal to its own weight.

### Solution 8S.

Experiment to show that a body immersed in a liquid appears lighter:



Take a solid body and suspend it by a thin thread from the hook of a spring balance as shown in the above figure (a). Note its weight. Above figure (a) shows the weight as 0.67 N.

Then, take a can filled with water. Immerse the solid gently into the water while hanging from the hook of the spring balance as shown in figure (b). Note its weight. Above figure (b) shows the weight as 0.40 N.

The reading in this case (b) shall be less than the reading in the case (a), which proves that a body immersed in a liquid appears to be lighter.

#### **Solution 9S.**

The readings in the spring balance decreases.

As the cylinder is immersed in the jar of water, an upward force acts on it, which is in opposition to the weight component of the cylinder. Hence the cylinder appears to be lighter.

#### **Solution 10S.**

A body shall weigh more in vacuum because in vacuum, i.e. in absence of air, no upthrust will act on the body.

#### **Solution 11S.**

Upthrust on a body depends on the following factors:

1. Volume of the body submerged in the liquid or fluid.
2. Density of liquid or fluid in which the body is submerged.

#### **Solution 12S.**

Larger the volume of body submerged in liquid, greater is the upthrust acting on it.

#### **Solution 13S.**

A stone falls faster.

Because the volume of stone is less than the volume of bunch of feathers of the same mass, the upthrust due to air on stone is less than that on the bunch of feathers, and hence, the stone falls faster.

However, in vacuum, both shall fall together because there will be no upthrust.

#### Solution 14S.

$F_2 > F_1$ ; Sea water is denser than river water; therefore, the upthrust due to sea water will be greater than that due to river water at the same level. This shall make the body to appear lighter in the sea water.

#### Solution 15S.

**Observation:** Volume of a block of wood immersed in glycerine is smaller as compared to the volume of block immersed in water.

**Explanation:** Density of glycerine is more than that of water. Hence, glycerine exerts more upthrust on the block of wood than water, causing it to float in glycerine with a smaller volume.

#### Solution 16S.

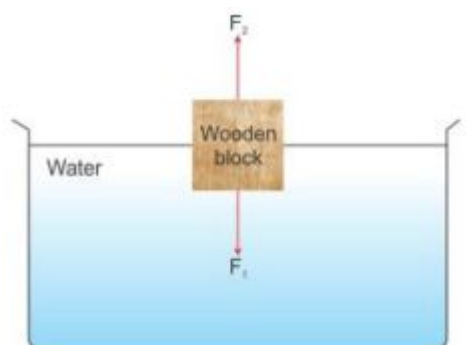
(i) Weight of the body =  $V \rho g$

(ii) Upthrust on the body =  $V \rho_L g$

(iii) Apparent weight of the body in liquid =  $V(\rho - \rho_L) g$

(iv) Loss in weight of the body =  $V \rho_L g$

#### Solution 17S.



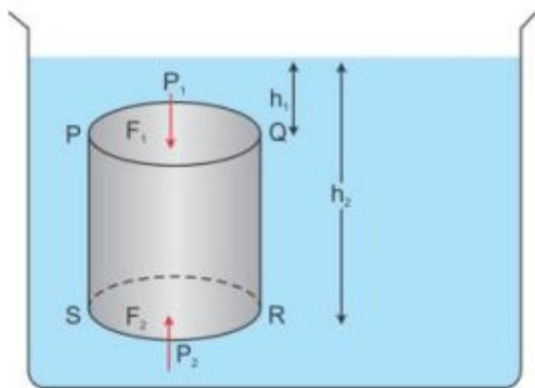
If  $F_1 < F_2$  or  $F_1 = F_2$ , the body will float.

If  $F_1 > F_2$ , the body will sink.

#### Solution 18S.

- (a) Both have equal volumes.
- (b) Bounce back to the surface.
- (c) More than

#### Solution 19S.



Consider a cylindrical body PQRS of cross-sectional area  $A$  immersed in a liquid of density  $\rho$  as shown in the figure above. Let the upper surface PQ of the body is at a depth  $h_1$  while its lower surface RS is at depth  $h_2$  below the free surface of liquid.

At depth  $h_1$ , the pressure on the upper surface PQ,

$$P_1 = h_1 \rho g.$$

Therefore, the downward thrust on the upper surface PQ,

$$F_1 = \text{Pressure} \times \text{Area} = h_1 \rho g A \dots\dots\dots(i)$$

At depth  $h_2$ , pressure on the lower surface RS,

$$P_2 = h_2 \rho g$$

Therefore, the upward thrust on the lower surface RS,

$$F_2 = \text{Pressure} \times \text{Area} = h_2 \rho g A \dots\dots\dots(ii)$$

The horizontal thrust at various points on the vertical sides of body get balanced because the liquid pressure is the same at all points at the same depth.

From the above equations (i) and (ii), it is clear that  $F_2 > F_1$  because  $h_2 > h_1$  and therefore, body will experience a net upward force.

Resultant upward thrust or buoyant force on the body,

$$\begin{aligned} F_B &= F_2 - F_1 \\ &= h_2 \rho g A - h_1 \rho g A \\ &= A (h_2 - h_1) \rho g \end{aligned}$$

However,  $A (h_2 - h_1) = V$ , the volume of the body is submerged in a liquid.

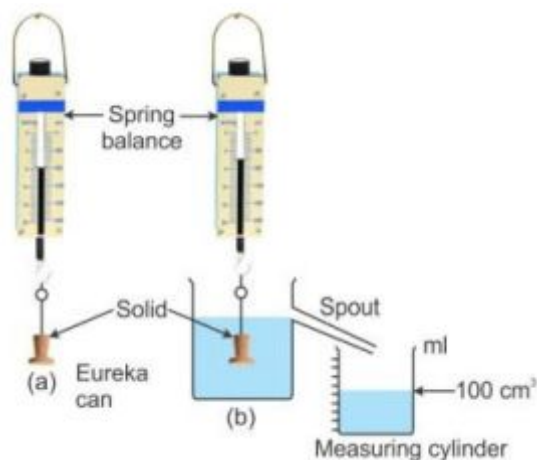
Therefore, upthrust  $F_B = V \rho g$ .

Now,  $V g = \text{Volume of solid immersed} \times \text{Density of liquid} \times \text{Acceleration due to gravity}$   
 $= \text{Volume of liquid displaced} \times \text{Density of liquid} \times \text{Acceleration due to gravity}$   
 $= \text{Mass of liquid displaced} \times \text{Acceleration due to gravity}$   
 $= \text{Weight of the liquid displaced by the submerged part of the body}$

Thus, Upthrust  $F_B$  = weight of the liquid displaced by the submerged part of the body.....(iii)

Now, let us take a solid and suspend it by a thin thread from the hook of a spring balance and note its weight.

Then take a eureka can and fill it with water up to its spout. Arrange a measuring cylinder below the spout of the eureka can as shown. Immerse the solid gently in water. The water displaced by the solid is collected in the



measuring cylinder.

When the water stops dripping through the spout, note the weight of the solid and volume of water collected in the measuring cylinder.

From the diagram, it is clear that

Loss in weight (Weight in air – Weight in water) = Volume of water displaced.

Or, Loss in weight = Volume of water displaced  $\times 1 \text{ gcm}^{-3}$  [Because the density of water =  $1 \text{ gcm}^{-3}$ ]

Or, Loss in weight = Weight of water displaced .....(iv)

From equations (iii) and (iv),

Loss in weight = Upthrust or buoyant force

#### **Solution 20S.**

Since the spheres have the same radius, both will have an equal volume inside water, and hence, the upthrust acted by water on both the spheres will be the same.

Hence, the required ratio of upthrust acting on two spheres is 1:1.

#### **Solution 21S.**

Sphere of iron will sink.

Density of iron is more than the density of water, so the weight of iron sphere will be more than the upthrust due to water in it; thus, it causes the iron sphere to sink.

Density of wood is less than the density of water, so the weight of sphere of wood shall be less than the upthrust due to water in it. So, the sphere of wood will float with a volume submerged inside water which is balanced by the upthrust due to water.

### Solution 22S.

The bodies of average density greater than that of the liquid sink in it. While the bodies of average density equal to or smaller than that of liquid float on it.

### Solution 23S.

- (i) The body will float if  $\rho \leq \rho_L$
- (ii) The body will sink if  $\rho > \rho_L$

### Solution 24S.

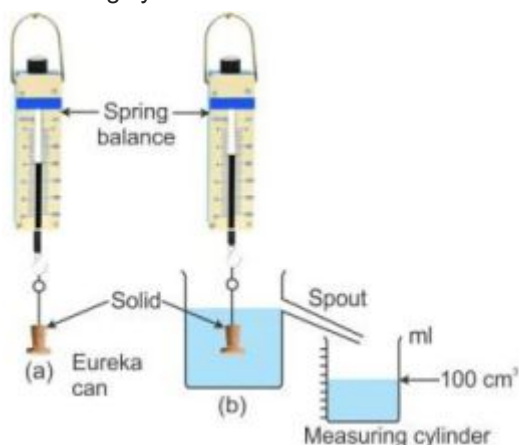
It is easier to lift a heavy stone under water than in air because in water, it experiences an upward buoyant force which balances the actual weight of the stone acting downwards. Thus, due to upthrust there is an apparent loss in the weight of the heavy stone, which makes it lighter in water, and hence easy to lift.

### Solution 25S.

Archimedes' principle states that when a body is immersed partially or completely in a liquid, it experiences an upthrust, which is equal to the weight of liquid displaced by it.

### Solution 26S.

Let us take a solid and suspend it by a thin thread from the hook of a spring balance and note its weight (Fig a). Then take a eureka can and fill it with water up to its spout. Arrange a measuring cylinder below the spout of the eureka can as shown. Immerse the solid gently in water. The water displaced by the solid gets collected in the measuring cylinder.



When water stops dripping through the spout, note the weight of the solid and volume of water collected in the measuring cylinder.

From diagram, it is clear that

$$\text{Loss in weight (Weight in air – weight in water)} = 300 \text{ gf} - 200 \text{ gf} = 100 \text{ gf}$$

$$\text{Volume of water displaced} = \text{Volume of solid} = 100 \text{ cm}^3$$

$$\text{Because density of water} = 1 \text{ gcm}^{-3}$$

$$\text{Weight of water displaced} = 100 \text{ gf} = \text{Upthrust or loss in weight}$$

This verifies Archimedes' principle.

### Solution 1M.

Turpentine

### Solution 2M.

N

### Solution 3M.

$$\rho > \rho_L$$

### Solution 1N.

$$1. \text{ Volume of body} = 100 \text{ cm}^3 = 100 \times 10^{-6} \text{ m}^3$$

$$\text{Weight in air} = 5 \text{ kgf}$$

$$\text{Density of liquid} = 1.8 \times 10^3 \text{ kgm}^{-3}$$

$$\begin{aligned} \text{(i) Upthrust due to liquid} &= \text{Volume of the solid submerged} \times \text{density of liquid} \times g \\ &= 100 \times 10^{-6} \times 1.8 \times 10^3 \times g \\ &= 0.18 \text{ kgf} \end{aligned}$$

$$\begin{aligned} \text{(ii) Weight of body in liquid} &= \text{Weight of body in air} - \text{upthrust} \\ &= 5 \text{ kgf} - 0.18 \text{ kgf} \\ &= 4.82 \text{ kgf} \end{aligned}$$

### Solution 2N.

$$2. \text{ Weight of body in air} = 450 \text{ gf}$$

$$\text{Weight of body in water} = 310 \text{ gf}$$

$$\begin{aligned} \text{(i) Volume of the body} &= \text{Loss in weight} \times \text{density of water} \\ &= (450 - 310) \times 1 \quad [\text{Assumption: density of water} = 1 \text{ gcm}^3] \\ &= 140 \text{ cm}^3 \end{aligned}$$

$$\begin{aligned} \text{(ii) Loss in weight} &= \text{Weight of body in air} - \text{Weight of body in water} \\ &= (450 - 310) \text{ gf} \\ &= 140 \text{ gf} \end{aligned}$$

$$\text{(iii) Upthrust on body} = \text{loss in weight} = 140 \text{ gf}$$

### Solution 3N.



3. Volume of hollow iron ball A, =  $15 \text{ cm}^3$

Mass of hollow iron ball A = 12 g

Mass of solid iron ball B = 12 g

Density of iron =  $8.0 \text{ gcm}^3$

$$\text{Volume of solid iron ball B} = \frac{\text{Mass}}{\text{Density}} = \frac{12}{8} = 1.5 \text{ cm}^3$$

$$\begin{aligned} \text{(a) Upthrust on ball A} &= \text{Volume of iron ball A} \times \text{density of water} \times g \\ &= 15 \times 1 \times g = 15 \text{ gf} \end{aligned}$$

$$\begin{aligned} \text{Upthrust on ball B} &= \text{Volume of iron ball A} \times \text{density of water} \times g \\ &= 1.5 \times 1 \times g = 1.5 \text{ gf} \end{aligned}$$

(b) Ball B will sink because the upthrust on ball B (= 1.5 gf) is less than its weight 12 gf, while the upthrust on ball A (= 15 gf) if it is fully submerged, which is greater than its weight 12 gf, so it will float with with its that much part submerged for which upthrust becomes equal to 12 gf (its weight).

#### Solution 4N.

4. Density of solid =  $5000 \text{ kg m}^{-3}$

Weight of solid = 0.5 kgf

Density of water =  $1000 \text{ kg m}^{-3}$

Here, Upthrust = Volume of the solid  $\times$  density of water  $\times$  g

$$\begin{aligned} &= \frac{0.5/g}{5000} \times 1000 \times g \\ &= \frac{0.5}{5000 \times g} \times 1000 \times g = 0.1 \text{ kgf} \end{aligned}$$

$$\begin{aligned} \text{Apparent weight} &= \text{True weight} - \text{Upthrust} \\ &= 0.5 - 0.1 = 0.4 \text{ kgf} \end{aligned}$$

#### Solution 5N.

5. Volume of spheres A & B =  $100 \text{ cm}^3$

Density of water =  $1 \text{ gcm}^{-3}$

Density of sphere A =  $0.3 \text{ gcm}^{-3}$

Density of sphere B =  $8.9 \text{ gcm}^{-3}$

$$\begin{aligned} \text{(a) (i) Weight of sphere A} &= (\text{density of sphere A} \times \text{volume}) \times g \\ &= 0.3 \times 100 \times g = 30 \text{ gf} \end{aligned}$$

$$\begin{aligned} \text{Weight of sphere B} &= (\text{density of sphere B} \times \text{volume}) \times g \\ &= 8.9 \times 100 \times g = 890 \text{ gf} \end{aligned}$$

$$\begin{aligned} \text{(ii) Upthrust on sphere A} &= \text{Volume of sphere A} \times \text{density of water} \times g \\ &= 100 \times 1 \times g = 100 \text{ gf} \end{aligned}$$

$$\begin{aligned} \text{Upthrust on sphere B} &= \text{Volume of sphere B} \times \text{density of water} \times g \\ &= 100 \times 1 \times g = 100 \text{ gf} \end{aligned}$$

Since the volume of both spheres is same inside water, the upthrust acting on them will also be same.

(b) The sphere A will float because the density of wood is less than the density of water.

#### Solution 6N.

6. Mass of a block = 13.5 kg

Weight of the block = 13.5 kgf

Volume =  $15 \times 10^{-3} \text{ m}^3$

Density of water =  $1000 \text{ kgm}^{-3}$

$$\begin{aligned} \text{(a) Upthrust} &= \text{Volume of block} \times \text{density of water} \times g \\ &= 15 \times 10^{-3} \times 1000 \times g \\ &= 15 \text{ kgf} \end{aligned}$$

(b) The block will float since the upthrust on it is more than its weight (= 13.5 kgf) when fully immersed in water.

(c) While floating, upthrust = 13.5 kgf (weight of the body)

#### Solution 7N.

Weight of piece of brass in air = 175 gf

Weight of piece of brass when fully immersed in water = 150 gf

Density of water =  $1 \text{ g cm}^{-3}$

(i) Volume of brass piece = Loss in weight =  $175 - 150 = 25 \text{ cm}^3$

(ii) The brass piece weighs less in water due to upthrust.

#### Solution 8N.

8. Given, side of the cube = 5 cm

$\therefore$  volume of the cube =  $5 \times 5 \times 5 = 125 \text{ cm}^3$

Mass of the cube = volume  $\times$  density

$$= 125 \times 9 = 1125 \text{ g}$$

$\therefore$  weight of the cube = 1125 gf (downwards)

Upthrust on cube = weight of the liquid displaced

$$= \text{volume of the cube} \times \text{density of liquid} \times g$$

$$= 125 \times 1.2 \times g$$

$$= 150 \text{ gf (upwards)}$$

Tension in thread = Net downward force

$$= \text{Weight of cube} - \text{Upthrust on cube}$$

$$= 1125 - 150 = 975 \text{ gf} = 9.75 \text{ N}$$

#### Solution 9N.

9. Volume of block of wood =  $50 \text{ cm} \times 50 \text{ cm} \times 50 \text{ cm} = 125000 \text{ cm}^3 = 0.125 \text{ m}^3$

Given,  $g = 9.8 \text{ m/s}^2$

Buoyant force =  $V\rho g$

$$= 0.125 \times 1000 \times 9.8 \text{ N}$$

$$= 1225 \text{ N}$$

#### Solution 10N.

10. Mass of body = 3.5 kg

Weight of the body = 3.5 kgf

Volume of water displaced when body is fully immersed =  $1000 \text{ cm}^3$

(i) Volume of body when fully immersed in liquid = Volume of water displaced

$\therefore$  Volume of body =  $1000 \text{ cm}^3$  or  $0.001 \text{ m}^3$

(ii) Upthrust on body = Volume of body  $\times$  Density of water  $\times g$

$$= 0.001 \times 1000 \times g$$

$$= 1 \text{ kgf}$$

(iii) Apparent weight = True weight - Upthrust

$$= (3.5 - 1)$$

$$= 2.5 \text{ kgf}$$

### Exercise 5(B)

#### Solution 1S.

The density of a substance is its mass per unit volume.

#### Solution 2S.

(i) The C.G.S. unit of density is  $\text{gcm}^{-3}$ .

(ii) The S.I. unit of density is  $\text{kgm}^{-3}$ .

#### Solution 3S.

$$1 \text{ gcm}^{-3} = 1000 \text{ kgm}^{-3}$$

#### Solution 4S.

It means the mass of  $1 \text{ m}^{-3}$  of iron is 7800 kg.

#### Solution 5S.

Density of water at  $4^\circ\text{C}$  in S.I. units is  $1000 \text{ kgm}^{-3}$ .

#### Solution 6S.

(i) Mass of a metallic body remains unchanged with increase in temperature.

(ii) Volume of metallic body increases with an increase in temperature.

(iii) Density (= Mass/volume) of a metallic body decreases with an increase in temperature.

#### Solution 7S.

On heating from  $0^\circ\text{C}$ , the density of water increases up to  $4^\circ\text{C}$  and then decreases beyond  $4^\circ\text{C}$ .

#### Solution 8S.

(i) Volume, (ii)  $\text{kg m}^{-3}$ , (iii) 1000 and (iv) 1000

### Solution 9S.

The relative density of a substance is the ratio of density of that substance to the density of water at 4°C.

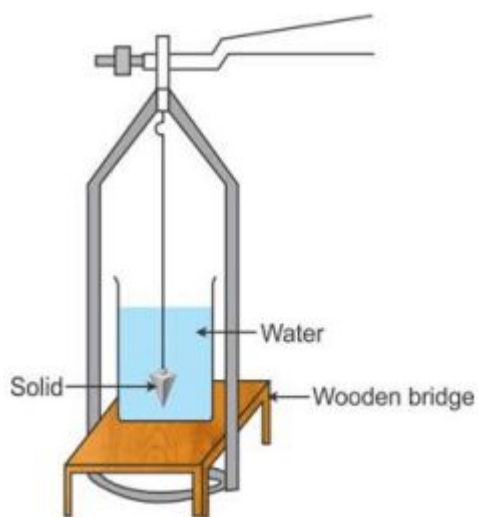
### Solution 10S.

Relative density is the ratio of two similar quantities; thus, it has no unit.

### Solution 11S.

Density of a substance is the ratio of its mass to its volume but R.D. of a substance is the ratio of density of that substance to the density of water at 4°C.

### Solution 12S.



#### Steps:

1. With the help of a physical balance, find the weight,  $W_1$  of the given solid.
2. Immerse the solid completely in a beaker filled with water such that it does not touch the walls and bottom of beaker, and find the weight  $W_2$  of solid in water.

#### Observations:

Loss in weight of solid when immersed in water =  $(W_1 - W_2)$  gf

R.D. = Weight of solid in air/Loss of weight of solid in water

R.D. =  $W_1/(W_1 - W_2)$ .

If the solid is soluble in water, then instead of water, take a liquid in which the solid is insoluble and it sinks in the liquid.

Then, R.D. = (Weight of solid in air/Loss of weight of solid in liquid) x R.D. of the liquid

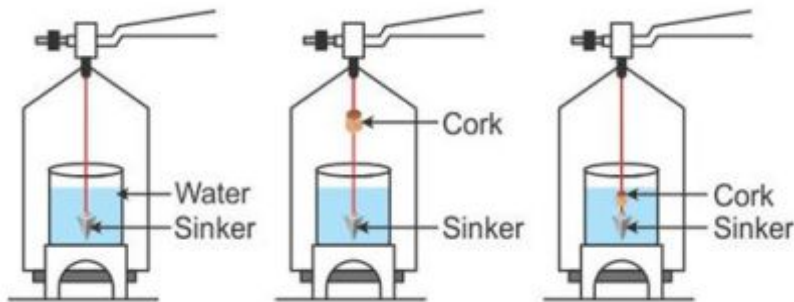
### Solution 13S.

- (i) Volume of the body =  $(W - W_1) \text{ cm}^3$   
(ii) Upthrust on the body =  $(W - W_1)gf$   
(iii) R.D. of the material of body =  $\frac{W}{W - W_1}$

#### Solution 14S.

Experimental determination of R.D. of a solid lighter than water (such as cork):

1. Take a sinker (i.e. a piece of metal or stone).
2. Place a beaker nearly two-third filled with water on a wooden bridge kept over the left pan of a physical balance.
3. Suspend the sinker with a thread from the hook of the left pan of balance so that it is completely immersed in water (as shown in the figure below). Find the weight  $W_1$  of the sinker in water.
4. Tie the given solid (say, a cork) in the middle of a thread, and then measure the weight  $W_2$  of a solid in the air along with the sinker in water.
5. Tie the cork with the sinker and immerse both of them completely in water of beaker and measure the weight  $W_3$  of the solid and sinker both in water.



#### Observations:

Weight of the sinker in water =  $W_1gf$

Weight of the sinker in water and cork in air =  $W_2gf$

Weight of sinker and cork together in water =  $W_3gf$

#### Calculations:

Weight of cork in air =  $(W_2 - W_1) gf$

Weight of cork in water =  $(W_3 - W_1) gf$

Loss in weight of the cork in water = Weight of cork in air - Weight of cork in water.

$$= [(W_2 - W_1) - (W_3 - W_1)] gf$$

$$= (W_2 - W_3) gf$$

R.D. of cork = Weight of cork in air / Loss of weight of cork in water

$$\text{Or, R.D. of cork} = (W_2 - W_1) / (W_2 - W_3).$$

#### Solution 15S.

The weight of the sinker and cork combined, in water will be less than the weight of the sinker alone in water because the upthrust due to water on cork (when completely immersed) is more than the weight of cork itself.

**Solution 1M.**

Water

**Solution 2M.**

No unit.

**Solution 3M.**

$$1 \text{ g cm}^{-3}$$

**Solution 1N.**

$$1. \text{ Density of copper in C.G.S.} = 8.83 \text{ gcm}^{-3}$$

$$\text{Density of copper in S.I.} = \frac{8.83}{1000 \times 100^{-6}} = 8830 \text{ kgm}^{-3}$$

**Solution 2N.**

$$2. \text{ R.D. of mercury} = 13.6$$

$$(i) \text{ Density in C.G.S.} = 13.6 \text{ gcm}^{-3}$$

$$(ii) \text{ Density in S.I.} = 13.6 \times 10^3 \text{ kgm}^{-3}$$

**Solution 3N.**

$$3. \text{ Density of iron} = 7.8 \times 10^3 \text{ kgm}^{-3}$$

$$\text{Density of iron in C.G.S.} = 7.8 \text{ gcm}^{-3}$$

$$\text{R.D.} = \text{Density in C.G.S. (without unit)} = 7.8$$

**Solution 4N.**

$$4. \text{ R.D. of silver} = 10.8$$

$$\text{Density of silver in C.G.S.} = 10.8 \text{ gcm}^{-3}$$

$$\text{Density in S.I.} = 10.8 \times 10^3 \text{ kgm}^{-3}$$

**Solution 5N.**

$$5. \text{ R.D. of silver} = 0.52$$

$$\text{Volume} = 2 \text{ m}^3$$

$$\text{Density of body in S.I.} = 0.52 \times 10^3 \text{ kgm}^{-3}$$

$$\therefore \text{Mass} = \text{Density} \times \text{volume} = (0.52 \times 10^3) \times 2 = 1040 \text{ kg}$$

**Solution 6N.**

$$6. \text{ Volume of air} = 4.5 \times 3.5 \times 2.5 \text{ m}^3$$

$$\text{Density of air at NTP} = 1.3 \text{ kgm}^{-3}$$

$$\text{Mass of air} = \text{Density} \times \text{volume}$$

$$\text{Or Mass} = (1.3) \times (4.5 \times 3.5 \times 2.5) = 51.19 \text{ kg}$$

**Solution 7N.**

$$7. \text{ Mass of stone} = 113 \text{ g}$$

$$\text{Rise in water level} = (40 - 30) \text{ ml} = 10 \text{ ml}$$

This rise is equal to the space occupied (volume) by the stone.

$$\therefore \text{ volume of stone} = 10 \text{ cm}^3$$

$$\text{Density of stone in C.G.S.} = \frac{\text{Mass}}{\text{Volume}} = \frac{113}{10} = 11.3 \text{ gcm}^{-3}$$

$$\text{R.D.} = 11.3$$

**Solution 8N.**

$$8. \text{ Volume of body} = 100 \text{ cm}^3$$

$$\text{Weight in air, } W_1 = 1 \text{ kgf} = 1000 \text{ gf}$$

$$\text{Mass of body} = 1 \text{ kg} = 1000 \text{ g}$$

$$\text{R.D. of solid} = 10$$

$$\text{R.D. of water} = 1$$

(i) Let  $W_2$  be the weight of the body in water.

$$\text{R.D. of body} = \frac{W_1}{W_1 - W_2} \times \text{R.D. of water}$$

$$\text{or, } 10 = \frac{1000}{(1000 - W_2)} \times 1$$

$$\text{or, } 10 (1000 - W_2) = 1000$$

$$\text{or, } 1000 - W_2 = 100$$

$$\text{or, } W_2 = 900 \text{ gf}$$

(ii) R.D. of body = Density in C.G.S. (without unit)

$$\text{or, R.D.} = \frac{\text{Mass}}{\text{Volume}} = \frac{1000}{100} = 10$$

**Solution 9N.**

$$9. \text{ Mass of body} = 70 \text{ kg}$$

$$\text{Volume of water displaced by body} = 20,000 \text{ cm}^3 = 0.02 \text{ m}^3$$

(i) Mass of solid immersed in water = Mass of water displaced

$$\text{Mass of solid immersed in water} = \text{Density of water} \times \text{Volume of water displaced}$$

$$\text{Mass of solid immersed in water} = 1000 \text{ kgm}^{-3} \times 0.02 \text{ m}^3 = 20 \text{ kg}$$

(ii) R.D. of solid = Density in C.G.S. (without unit)

$$\text{Density in C.G.S.} = \frac{\text{mass}}{\text{volume}} = \frac{70 \times 1000}{20,000} = 3.5 \text{ gcm}^3$$

$$\text{R.D.} = 3.5$$

**Solution 10N.**

10. Weight of solid in air,  $W_1 = 120$  gf

Weight of solid when completely immersed in water  $W_2 = 105$  gf

$$\text{R.D. of solid} = \frac{W_1}{W_1 - W_2} \times \text{R.D. of water}$$

$$\text{R.D. of solid} = \frac{120}{120-105} \times 1$$

$$\text{R.D. of solid} = 8$$

**Solution 11N.**

11. Weight of solid in air,  $W_1 = 32$  gf

Weight of solid when completely immersed in water  $W_2 = 28.8$  gf

(i) Volume of solid = Mass / density of solid

$$= \frac{32}{10} = 3.2 \text{ m}^3$$

$$\text{(ii) R.D. of solid} = \frac{W_1}{W_1 - W_2} \times \text{R.D. of water}$$

$$\text{R.D. of solid} = \frac{32}{32-28.8} \times 1$$

$$\text{R.D. of solid} = 10$$

(iii) Weight of solid in liquid of density  $0.9 \text{ gcm}^{-3} = W_3$

$$\text{R.D. of solid} = \frac{W_1}{W_1 - W_3} \times \text{R.D. of liquid}$$

$$\text{or, } 10 = \frac{32}{32 - W_3} \times 0.9$$

$$\text{or, } W_3 = 29.12 \text{ gf}$$

**Solution 12N.**

12. Weight of body in air,  $W_1 = 20$  gf

Weight of body when completely immersed in water  $W_2 = 18$  gf

$$\text{R.D. of body} = \frac{W_1}{W_1 - W_2} \times \text{R.D. of water}$$

$$\text{R.D. of body} = \frac{20}{20-18} \times 1$$

$$\text{R.D. of body} = 10$$

**Solution 13N.**



13. Weight of body in air,  $W_1 = 1.5 \text{ kgf}$

Weight of body when completely immersed in liquid  $W_2 = 0.9 \text{ kgf}$

Density of liquid  $= 1.2 \times 10^3 \text{ kgm}^{-3}$

R.D. of liquid  $= 1.2$

$$\text{R.D. of body} = \frac{W_1}{W_1 - W_2} \times \text{R.D. of liquid}$$

$$\text{R.D. of body} = \frac{1.5}{1.5 - 0.9} \times 1.2$$

$$\text{R.D. of body} = 3$$

#### Solution 14N.

14. R.D. of pure gold  $= 19.3$

Weight of bangle in air,  $W_1 = 25.25 \text{ gf}$

Weight of bangle when completely immersed in water  $W_2 = 23.075 \text{ gf}$

$$\text{R.D. of bangle} = \frac{W_1}{W_1 - W_2} \times \text{R.D. of water}$$

$$\text{R.D. of bangle} = \frac{25.25}{25.25 - 23.075} \times 1$$

$$\text{R.D. of bangle} = 11.6$$

The bangle is not made of pure gold as its density is not 19.3.

#### Solution 15N.

15. Weight of iron in air,  $W_1 = 44.5 \text{ gf}$

Weight of iron when completely immersed in water  $W_2 = 39.5 \text{ gf}$

$$1 \text{ R.D. of iron} = \frac{W_1}{W_1 - W_2} \times \text{R.D. of water}$$

$$\text{R.D. of iron} = \frac{44.5}{44.5 - 39.5} \times 1$$

$$\text{R.D. of iron} = 8.9$$

#### Solution 16N.

a. The mass of stone is 15.1 g. Hence, its weight in air will be  $W_a = 15.1 \text{ gf}$

b. When stone is immersed in water its weight becomes 9.7 gf. So, the upthrust on the stone is  $15.1 - 9.7 = 5.4 \text{ gf}$ ,  
Since the density of water is  $1 \text{ g cm}^{-3}$ , the volume of stone is  $5.4 \text{ cm}^3$ .

c. Weight of stone in liquid is  $W_l = 10.9 \text{ gf}$

Weight of stone in water is  $W_w = 9.7 \text{ gf}$

Therefore, the relative density of stone is

$$R.D._{\text{stone}} = \frac{W_a}{W_a - W_w} = \frac{15.1 \text{ gf}}{15.1 - 9.7 \text{ gf}}$$

$$\therefore R.D._{\text{stone}} = \frac{15.1}{5.4} = 2.8$$

d. Relative density of liquid is

$$R.D._{\text{liquid}} = \frac{W_a - W_l}{W_a - W_w} = \frac{15.1 - 10.9}{15.1 - 9.7} = \frac{4.2}{5.4}$$

$$\therefore R.D._{\text{stone}} = 0.7777 \approx 0.78$$

### Exercise 5(C)

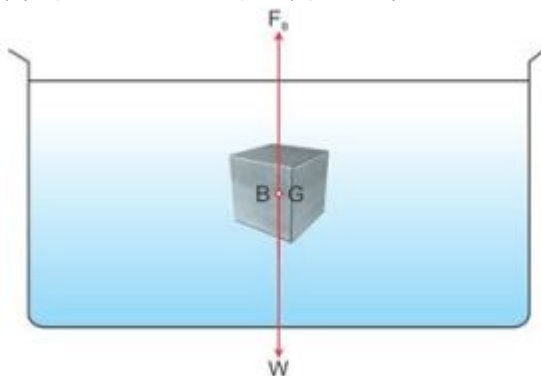
#### Solution 1S.

According to the principle of floatation, the weight of a floating body is equal to the weight of the liquid displaced by its submerged part.

#### Solution 2S.

(i) Two forces acting on the body are as listed below:

- (a) Weight of the body (downwards)
- (b) Upthrust of the liquid (upwards)



(ii) If the weight of the body is greater than the upthrust acting on it, the body will sink  
If the weight of the body is equal to or less than the upthrust acting on it, the body will float.

- (iii) (a) The net force acting on the body when it sinks is body's own weight.
- (b) The net force acting on the body when it floats is the upthrust due to the liquid.

#### Solution 3S.

The reading on the spring balance will be zero because wood floats on water and while floating the apparent weight = 0.

#### Solution 4S.

- (a) The ball will float because the density of ball (i.e. iron) is less than the density of mercury.
- (b) While floating, the apparent weight = 0.

### Solution 5S.

The body will float if its density is less than or equal to the density of the liquid  $\rho_S \leq \rho_L$ .

The body will sink if its density is greater than the density of the liquid  $\rho_S > \rho_L$ .

### Solution 6S.

Density of iron is less than the density of mercury; hence, an iron nail floats in mercury and density of iron is more than the density of water; hence, an iron nail sinks in water.

### Solution 7S.

(i) Weight of the floating body is equal to the upthrust.

(ii) While floating, the apparent weight is zero.

### Solution 8S.

When the body is partially immersed, its centre of buoyancy will be below the centre of gravity of the block.

When the body is completely immersed, its centre of buoyancy will coincide the centre of gravity.

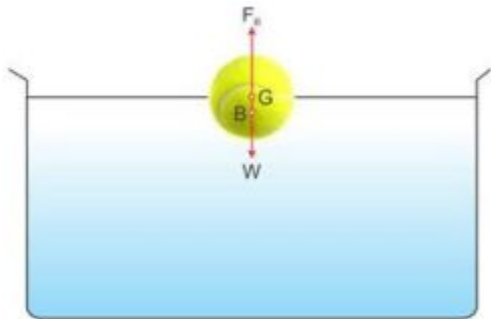
### Solution 9S.

The upthrust on the body by each liquid is the same and equal to the weight of the body.

However, upthrust = Volume submerged  $\times \rho_L \times g$ ,

For the liquid C, since the volume submerged is least so the density  $\rho_3$  must be maximum.

### Solution 10S.



The forces acting are as listed below:

1. Weight of the body acting downwards.
2. Upthrust due to water acting upwards.

Weight of water displaced by the floating body = Weight of the body

### Solution 11S.

Centre of buoyancy: It is the point through which the resultant of the buoyancy forces on a submerged body act; it coincides with the centre of gravity of the displaced liquid, if the body is completely immersed.

For a floating body with its part submerged in the liquid, the centre of buoyancy is at the centre of gravity of the submerged part of the body and it lies vertically below the centre of gravity of the entire body.

### Solution 12S.

**Observation :** The balloon will sink.

**Explanation :** As air is pumped out from jar, the density of air in jar decreases, so the upthrust on balloon decreases. As weight of balloon exceeds the upthrust on it, it sinks.

### Solution 13S.

(a) It will float with some part outside water.

**Reason :** On adding some salt to water, the density of water increases, so upthrust on a block of wood increases, and hence, the block rises up till the weight of salty water displaced by the submerged part of block becomes equal to the weight of the block.

(b) The block will sink.

**Reason:** On heating, the density of water decreases, so upthrust on the block decreases and the weight of block exceeds upthrust due to which it sinks.

### Solution 14S.

15. Let  $V$  be the volume of a body of density  $\rho_b$

Let the body be floating with its volume  $v$  immersed inside a liquid of density  $\rho_L$

Then, weight of the body,

$$W = \text{Volume of body} \times \text{density of body} \times g$$

$$\text{or, } W = V \rho_b g$$

Weight of liquid displaced by body or upthrust,

$$F_b = \text{Volume of displaced liquid} \times \text{density of liquid} \times g$$

$$\text{or, } F_b = v \rho_L g$$

$$\text{For floatation, } W = F_b$$

$$\text{i.e., } V \rho_b g = v \rho_L g$$

$$\text{or, } \frac{v}{V} = \frac{\rho_b}{\rho_L}$$

$$\text{Thus, } \frac{\text{Volume of immersed part of body}}{\text{Total volume of body}} = \frac{\text{Density of body}}{\text{Density of liquid}}$$

### Solution 15S.

Density of brine is more than the density of water. Hence, the upthrust exerted by brine is more than the upthrust exerted by water on ice. Therefore, floating ice is less submerged in brine.

### Solution 16S.

(i) 1:1; The weight of the water displaced by the man in sea and river will be same and will be equal to his own weight.

(ii) He finds it easier to swim in the sea because the density of sea water is more than the density of river water. So his weight is balanced in sea water with a part of his body submerged in the water.

### **Solution 17S.**

An iron nail sinks in water because density of iron is more than the density of water, so the weight of the nail is more than the upthrust of water on it.

On the other hand, ships are also made of iron, but they do not sink. This is because the ship is hollow and the empty space in it contains air, which makes its average density less than that of water. Therefore, even with a small portion of ship submerged in water, the weight of water displaced by the submerged part of ship becomes equal to the total weight of ship and it floats.

### **Solution 18S.**

Due to the hollow and empty space in the ship, the average density of a ship is less than the density of water.

### **Solution 19S.**

When a floating piece of ice melts into water, it contracts by the volume equal to the volume of ice pieces above the water surface while floating on it. Hence, the level of water does not change when ice floating on it melts.

### **Solution 20S.**

Forces acting on the body are listed below:

1. Weight of the body vertically downwards.
2. Upthrust of water on body vertically upwards.
3. Tension in thread vertically downwards.

### **Solution 21S.**

A ship submerges more as it sails from sea water to river water.

Density of river water is less than the density of sea water. Hence, according to the law of floatation, to balance the weight of the ship, a greater volume of water is required to be displaced in river water of lower density.

### **Solution 22S.**

(a) Icebergs are dangerous for ships as they may collide with them. Icebergs being lighter than water, float on water with a major part of their surfaces laying under the water surface and only a small part lies outside water. Thus, it becomes difficult for the driver of the ship to estimate the size of the iceberg.

(b) Density of a strong salt solution is more than the density of fresh water. Hence, the salt solution exerts a greater upthrust on the egg which balances the weight of the egg, so the egg floats in a strong salt solution but sinks in fresh water.

(c) Density of hydrogen is much less than the density of carbon dioxide. When a balloon is filled with hydrogen, the weight of the air displaced by an inflated balloon (i.e. upthrust) becomes more than the weight of a gas filled balloon, and hence, it rises. In case of a balloon filled with carbon dioxide, weight of the balloon becomes more than the upthrust of the air, and hence, it sinks to the floor.

(d) As a ship in harbor is unloaded, its weight decreases. As a result, it displaces less water, and the ship's hull rises in water till the weight of the water displaced balances the weight of the unloaded ship.

(e) The reason is that the density of air decreases with altitude. Therefore, as the balloon gradually goes up, the weight of the displaced air (i.e. upthrust) decreases. It keeps on rising as long as the upthrust exceeds its weight. When upthrust becomes equal to its weight, it stops rising.

(f) Density of river water is less than the density of sea water. Hence, according to the law of floatation, to balance the weight of the ship, a great volume of water is required to be displaced in river water having a comparatively lower density.

#### **Solution 1M.**

$$W = F_B$$

#### **Solution 2M.**

Zero

#### **Solution 3M.**

$$\rho_1 > \rho_2$$

#### **Solution 1N.**

1. Let the volume of the ball be  $V$ .

$$\text{Volume of ball above the surface of water} = \frac{1}{3}V$$

$$\therefore \text{Volume of ball immersed in water} = V - \frac{1}{3}V = \frac{2}{3}V$$

By the principle of floatation,

$$\frac{\text{Volume of rubber ball immersed}}{\text{Total volume of rubber ball}} = \frac{\text{Density of rubber}}{\text{Density of water}}$$

$$\text{or, } \frac{2}{3} = \frac{\text{Density of rubber}}{1000}$$

$$\text{or, Density of rubber ball} = 1000 \times \frac{2}{3} = 666.7 \text{ kgm}^3 \approx 667 \text{ kgm}^3$$

#### **Solution 2N.**

2. Mass of block of wood = 24 kg

Volume of wood =  $0.032 \text{ m}^3$

(a) Upthrust = Volume of block below the surface of water ( $v$ )  $\times$  density of liquid  $\times g$

Now for floatation, upthrust = weight of the body = 24 kgf

or,  $24 \text{ kgf} = v \times 1000 \times g$

$$\text{or, } v = \frac{24}{1000} = 0.024 \text{ m}^3$$

(b) According to the law of floatation,

$$\frac{\text{Volume of the submerged block}}{\text{Total volume of block}} = \frac{\text{Density of wood}}{\text{Density of water}}$$

$$\text{or, } \frac{0.024}{0.032} = \frac{\text{Density of wood}}{1000}$$

$$\text{or, Density of wood} = 1000 \times \frac{0.024}{0.032} = 750 \text{ kgm}^{-3}$$

### Solution 3N.

3. Mass of wooden cube = 700 g

Side of the wooden cube = 10 cm

Volume of the wooden cube =  $10^3 \text{ cm}^3$

Density of wooden cube = Mass/Volume =  $700 \times 10^{-3} \text{ gcm}^{-3}$

(b) According to the law of floatation,

$$\frac{\text{Volume of the submerged cube (v)}}{\text{Total volume of cube (V)}} = \frac{\text{Density of wood}}{\text{Density of water}}$$

$$\text{or, } \frac{v}{10^3} = \frac{700 \times 10^{-3}}{1}$$

$$\text{Or, Volume of the submerged cube} = 1000 \times 700 \times 10^{-3} = 700 \text{ cm}^3$$

$$\begin{aligned} \text{Or, Volume of the wooden cube above the water surface} &= V - v \\ &= 1000 - 700 = 300 \text{ cm or 3 m} \end{aligned}$$

### Solution 4N.

4. Density of wax ( $\rho_w$ ) =  $0.95 \text{ gcm}^{-3}$

Density of brine ( $\rho_b$ ) =  $1.1 \text{ gcm}^{-3}$

Let the total volume of piece of wax be  $V$  and the volume of immersed portion be  $v$ .

According to the law of floatation,

$$\frac{v}{V} = \frac{\rho_w}{\rho_b}$$

$$\text{or, } \frac{v}{V} = \frac{0.95}{1.1} = 0.86$$

$$\text{or, } v = 0.86 V$$

Thus, wax floats with 0.86th part of its volume above the surface brine.

### Solution 5N.

5. Density of ice ( $\rho_1$ ) =  $0.9 \text{ g cm}^{-3}$

Density of sea water ( $\rho_2$ ) =  $1.1 \text{ g cm}^{-3}$

Let the total volume of the iceberg be  $V$  and the volume of immersed portion be  $v$ .

According to the law of floatation,

$$\frac{v}{V} = \frac{\rho_1}{\rho_2}$$

$$\text{or, } \frac{v}{V} = \frac{0.9}{1.1} = \frac{9}{11}$$

$$\text{or, } v = \frac{9}{11} V$$

Thus, ice floats with  $\frac{9}{11}$ th part of its volume above the surface sea water.

#### Solution 6N.

6. Height of wooden piece = 15 cm

Height of wooden piece submerged in water = 10 cm

Height of wooden piece submerged in spirit = 12 cm

Note: Since the wooden block is of uniform cross-section, height will be proportional to volume.

Say density of wood =  $\rho_{\text{wood}} \text{ g cm}^{-3}$

Say density of spirit =  $\rho_{\text{spirit}} \text{ g cm}^{-3}$

According to the law of floatation,

$$\frac{v}{V} = \frac{\rho_{\text{wood}}}{\rho_{\text{wood}}}$$

$$\text{or, } \frac{10}{15} = \frac{\rho_{\text{wood}}}{\rho_{\text{water}}} = \frac{\rho_{\text{wood}}}{1}$$

$$\text{or, } \rho_{\text{wood}} = 0.667 \text{ g cm}^{-3}$$

Again, according to the law of floatation,

$$\frac{v}{V} = \frac{\rho_{\text{wood}}}{\rho_{\text{spirit}}}$$

$$\text{or, } \frac{12}{15} = \frac{\rho_{\text{wood}}}{\rho_{\text{spirit}}}$$

$$\text{or, } \frac{12}{15} = \frac{0.667}{\rho_{\text{spirit}}}$$

$$\text{or, } \rho_{\text{spirit}} = \frac{12}{10} \times 0.667 = 0.80 \text{ g cm}^{-3}$$

#### Solution 7N.



7. Volume of wooden block submerged in water ( $v$ ) =  $\frac{2}{3} \times$  total volume ( $V$ )

Volume of wooden block submerged in oil ( $v'$ ) =  $\frac{3}{4} \times$  total volume ( $V$ )

Say density of wood =  $\rho_{\text{wood}}$  gcm<sup>-3</sup>

Say density of oil =  $\rho_{\text{oil}}$  gcm<sup>-3</sup>

According to the law of floatation,

$$\frac{v}{V} = \frac{\rho_{\text{wood}}}{\rho_{\text{water}}}$$

$$\text{or, } \frac{2}{3} = \frac{\rho_{\text{wood}}}{\rho_{\text{water}}} = \frac{\rho_{\text{wood}}}{1000}$$

$$\text{or, } \rho_{\text{wood}} = 1000 \times \frac{2}{3} = 667 \text{ kgm}^{-3}$$

Again, according to the law of floatation,

$$\frac{v'}{V} = \frac{\rho_{\text{wood}}}{\rho_{\text{oil}}}$$

$$\text{or, } \frac{3}{4} = \frac{\rho_{\text{wood}}}{\rho_{\text{oil}}}$$

$$\text{or, } \frac{3}{4} = \frac{667}{\rho_{\text{oil}}}$$

$$\text{or, } \rho_{\text{oil}} = \frac{4}{3} \times 667 = 889 \text{ kgm}^{-3}$$

#### Solution 8N.

8. Let  $V$  be the volume of the iceberg.

Volume of iceberg above water = 800 cm<sup>3</sup>

Volume of iceberg submerged in water =  $v$

Density of ice ( $\rho_{\text{ice}}$ ) = 0.92 gcm<sup>-3</sup>

Density of sea water ( $\rho_{\text{sea water}}$ ) = 1.025 gcm<sup>-3</sup>

According to the law of floatation,

$$\frac{v}{V} = \frac{\rho_{\text{ice}}}{\rho_{\text{seawater}}}$$

$$\text{or, } \frac{v}{V} = \frac{0.92}{1.025}$$

$$\text{or, } \frac{v}{V} = \frac{0.92}{1.025} = 0.8976$$

$$\text{or, } v = (0.8976)V$$

$$\therefore \text{Volume of iceberg above water} = 800 \text{ cm}^3 = V - 0.8976 V$$

$$\text{or, } V(1 - 0.8976) = 800$$

$$\text{or, } V = \frac{800}{(1 - 0.8976)}$$

$$\text{or, } V = 7812.5 \text{ cm}^3$$

#### Solution 9N.

9. Volume of plastic balloon =  $15 \text{ m}^3$

Mass of empty balloon =  $7.15 \text{ kg}$

Density of hydrogen =  $0.09 \text{ kgm}^{-3}$

Density of air =  $1.3 \text{ kgm}^{-3}$

(i) Mass of hydrogen in the balloon = Volume of balloon  $\times$  Density of hydrogen

Mass of hydrogen in the balloon =  $(15 \times 0.09) \text{ kg} = 1.35 \text{ kg}$

(ii) Mass of hydrogen and balloon = Mass of empty balloon + Mass of hydrogen in the balloon

Mass of hydrogen balloon =  $[7.15 + 1.35] \text{ kg} = 8.5 \text{ kg}$

(iii) Given mass of equipment =  $x$

Total mass of hydrogen, balloon and equipment =  $(8.5 + x) \text{ kg}$

(iv) Weight of air displaced by the balloon = upthrust = Volume of balloon  $\times$  density of air  $\times g$

Mass of air displaced = Volume of balloon  $\times$  density of air

$$= 15 \times 1.3 = 19.5 \text{ kg}$$

(v) Using the law of floatation,

Mass of air displaced = Total mass of hydrogen, balloon and equipment

$$\text{or, } 19.5 = 8.5 + x$$

$$\text{or, } x = 11 \text{ kg}$$

Thus, mass of the equipment is  $11 \text{ kg}$

## More Resources for Selina Concise Class 9 ICSE Solutions

- [Concise Physics Class 9 ICSE Solutions](#)
- [Concise Chemistry Class 9 ICSE Solutions](#)
- [Concise Biology Class 9 ICSE Solutions](#)
- [Concise Mathematics Class 9 ICSE Solutions](#)

Filed Under: ICSE

Tagged With: Archimedes Principle, Floatation, Selina Class 9 Physics Solutions, Selina ICSE Solutions, Selina ICSE Solutions for Class 9 Physics, Selina ICSE Solutions for Class 9 Physics Chapter 5 Upthrust in Fluids Archimedes' Principle and Floatation, Selina ICSE Solutions for Class 9 Physics Upthrust in Fluids Archimedes' Principle and Floatation, Upthrust in Fluids

---

**Share with your Friends if solutions are helpful to YOU**

[www.AplusTopper.com](http://www.AplusTopper.com)

---

**500+ Long and Short  
Essay Writing Topics**

**10 Lines on Topic**

**200 + Paragraphs**

[RS Aggarwal Solutions Class 10](#)

[RS Aggarwal Solutions Class 9](#)

[RS Aggarwal Solutions Class 8](#)

[RS Aggarwal Solutions Class 7](#)

[RS Aggarwal Solutions Class 6](#)

[ICSE Solutions](#)

[Selina ICSE Solutions](#)

[Concise Mathematics Class 10 ICSE Solutions](#)

[Concise Physics Class 10 ICSE Solutions](#)

[Concise Chemistry Class 10 ICSE Solutions](#)

[Concise Biology Class 10 ICSE Solutions](#)

[Concise Mathematics Class 9 ICSE Solutions](#)

[Concise Physics Class 9 ICSE Solutions](#)

[Concise Chemistry Class 9 ICSE Solutions](#)

[Concise Biology Class 9 ICSE Solutions](#)

[ML Aggarwal Solutions](#)

[ML Aggarwal Class 10 Solutions](#)

[ML Aggarwal Class 9 Solutions](#)

[ML Aggarwal Class 8 Solutions](#)

[ML Aggarwal Class 7 Solutions](#)

[ML Aggarwal Class 6 Solutions](#)

[HSSLive Plus One](#)

[HSSLive Plus Two](#)

[Kerala SSLC](#)

## RECENT POSTS

[IGNOU Grade Card 2020 | How to Access and Download Ignou Grade Card?](#)

[IGNOU Result 2020 | How to Check IGNOU Results, IGNOU TEE Result for June and December 2020](#)

[Speech On Music | Music Speech for Students and Children in English](#)

[Speech On Advantages And Disadvantages Of Hostel Life for Children And Students In English](#)

[Sarvepalli Radhakrishnan Essay | Essay on Sarvepalli Radhakrishnan in English for Students and Children](#)

---

[My Teacher Essay | Essay on My Teacher for Students and Children](#)

---

[10 Lines on Dr S Radhakrishnan for Students and Children in English](#)

---

[Thank You Speech for Birthday for Students and Children in English](#)

---

[Thank You Speech for Teachers in English for Children and Students](#)

---

[Speech On Indian Army In Upholding The Security Of The Nation for Students and Children in English](#)

---

[100+ English Speech Topics for Students and Children | Persuasive Speech Topics](#)

---

Search the site ...

[RS Aggarwal Solutions](#)

[RS Aggarwal Solutions Class 10](#)

[RS Aggarwal Solutions Class 9](#)

[RS Aggarwal Solutions Class 8](#)

[RS Aggarwal Solutions Class 7](#)

[RS Aggarwal Solutions Class 6](#)

[English Speech](#)

[ICSE Solutions](#)

[Selina ICSE Solutions](#)

[ML Aggarwal Solutions](#)

[HSSLive Plus One](#)

[HSSLive Plus Two](#)

[Kerala SSLC](#)

[Distance Education](#)

---

[Disclaimer](#)

[Privacy Policy](#)

---

[Area Volume Calculator](#)

---

[Go Math Answer Key](#)

---

