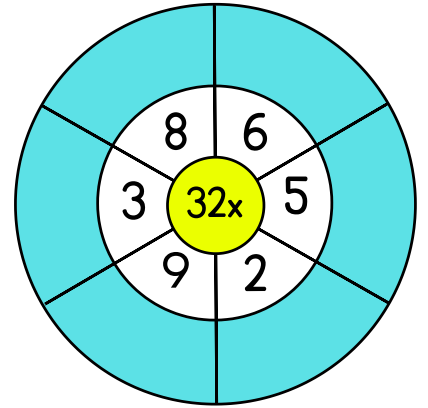
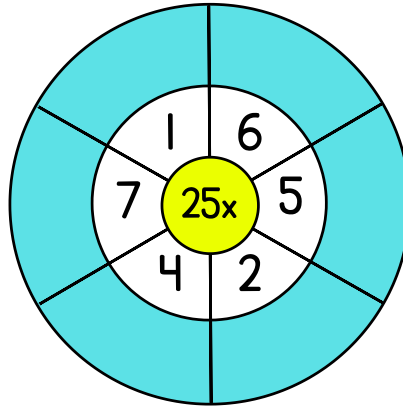
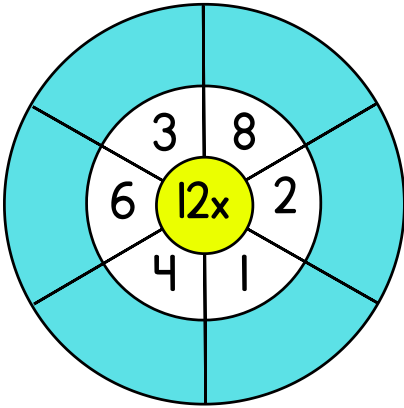
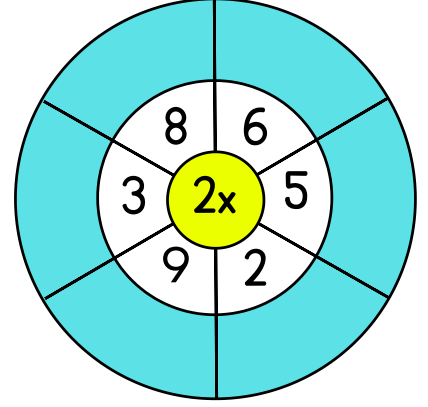
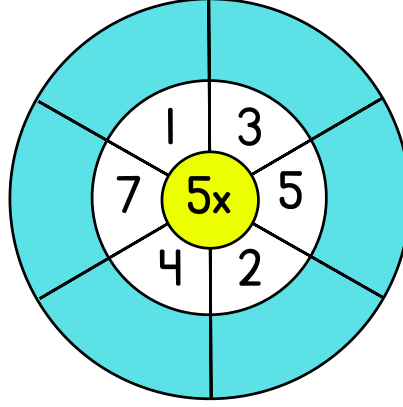
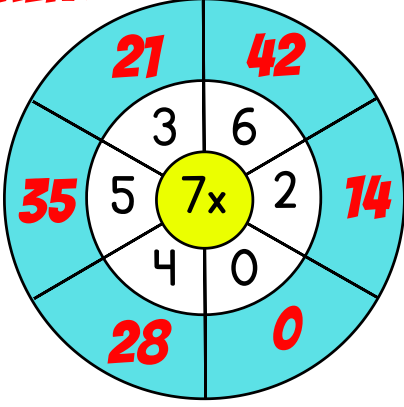


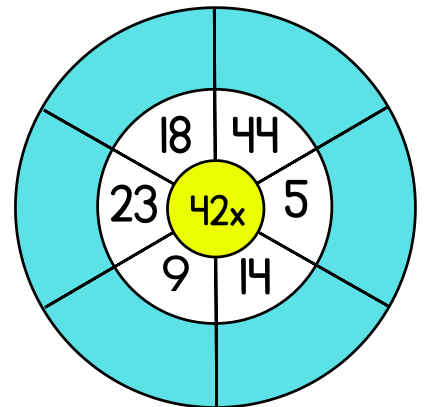
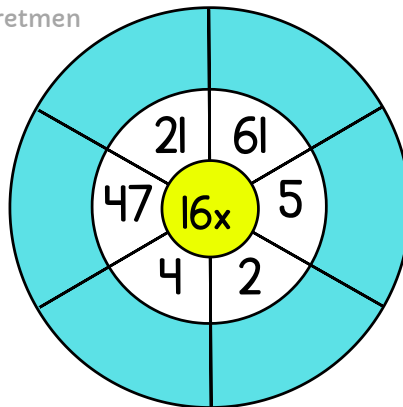
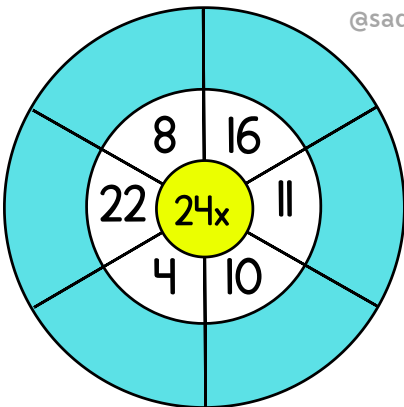


Aşağıdaki çarpma işlemlerini örnekteki gibi yapınız.

ÖRNEK :



@sadeöğretmen





$$\begin{array}{r} 14 \\ \times 22 \\ \hline \end{array}$$

$$\begin{array}{r} 17 \\ \times 55 \\ \hline \end{array}$$

$$\begin{array}{r} 45 \\ \times 7 \\ \hline \end{array}$$

$$\begin{array}{r} 15 \\ \times 5 \\ \hline \end{array}$$

$$\begin{array}{r} 157 \\ \times 0 \\ \hline \end{array}$$

$$\begin{array}{r} 16 \\ \times 12 \\ \hline \end{array}$$

$$\begin{array}{r} 28 \\ \times 11 \\ \hline \end{array}$$

$$\begin{array}{r} 46 \\ \times 9 \\ \hline \end{array}$$

$$\begin{array}{r} 82 \\ \times 7 \\ \hline \end{array}$$

$$\begin{array}{r} 32 \\ \times 15 \\ \hline \end{array}$$

$$\begin{array}{r} 25 \\ \times 10 \\ \hline \end{array}$$

$$\begin{array}{r} 74 \\ \times 6 \\ \hline \end{array}$$

$$\begin{array}{r} 12 \\ \times 51 \\ \hline \end{array}$$

$$\begin{array}{r} 66 \\ \times 12 \\ \hline \end{array}$$

$$\begin{array}{r} 42 \\ \times 17 \\ \hline \end{array}$$

$$\begin{array}{r} 24 \\ \times 15 \\ \hline \end{array}$$

$$\begin{array}{r} 44 \\ \times 20 \\ \hline \end{array}$$

$$\begin{array}{r} 35 \\ \times 40 \\ \hline \end{array}$$

@sadeöğretmen

$$\begin{array}{r} 28 \\ \times 2 \\ \hline \end{array}$$

$$\begin{array}{r} 55 \\ \times 2 \\ \hline \end{array}$$

$$\begin{array}{r} 68 \\ \times 8 \\ \hline \end{array}$$

$$\begin{array}{r} 33 \\ \times 25 \\ \hline \end{array}$$

$$\begin{array}{r} 35 \\ \times 12 \\ \hline \end{array}$$

$$\begin{array}{r} 72 \\ \times 15 \\ \hline \end{array}$$

