

Dates:

Topic:

Keywords:

1.

Encircle the unit fractions.

$$\frac{1}{4} \quad \frac{3}{4} \quad \frac{7}{9}$$

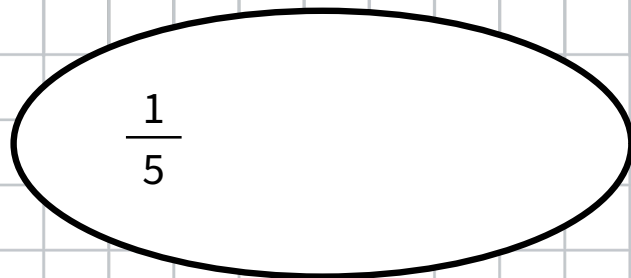
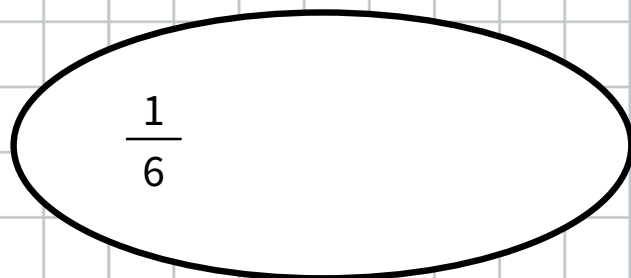
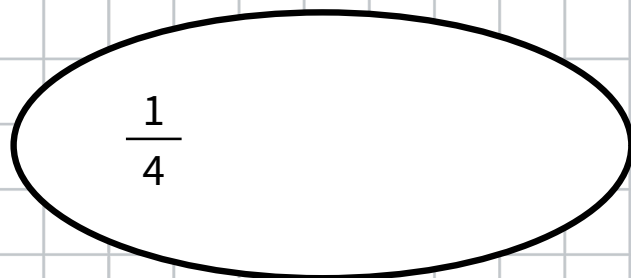
$$\frac{1}{9} \quad \frac{3}{5} \quad \frac{8}{10}$$

2.

A unit fraction show the relationships between _____ equal part in a _____

3.

Here is a unit fraction. Write the rest of unit fractions in the circle to create a WHOLE.



5.

A unit fraction for each model is given. Complete the models by drawing the missing unit fractions to complete the whole.

