


MATHSGYM



ASSIGNMENT

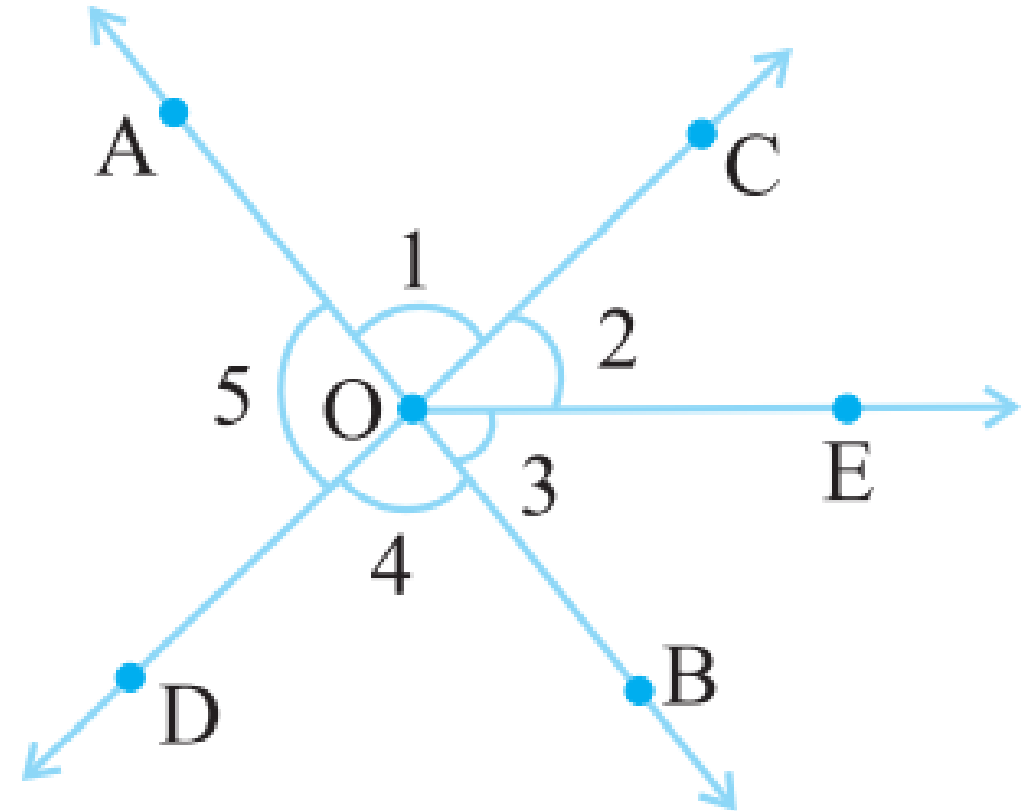
LINES & ANGLES
Assignment No. 53



Assignment 53 (HW) EX 5.1

Q 9. In the adjoining figure:

- (i) Is $\angle 1$ adjacent to $\angle 2$?
- (ii) Is $\angle AOC$ adjacent to $\angle AOE$?
- (iii) Do $\angle COE$ and $\angle EOD$ form a linear pair?
- (iv) Are $\angle BOD$ and $\angle DOA$ supplementary?
- (v) Is $\angle 1$ vertically opposite to $\angle 4$?
- (vi) What is the vertically opposite angle of $\angle 5$?

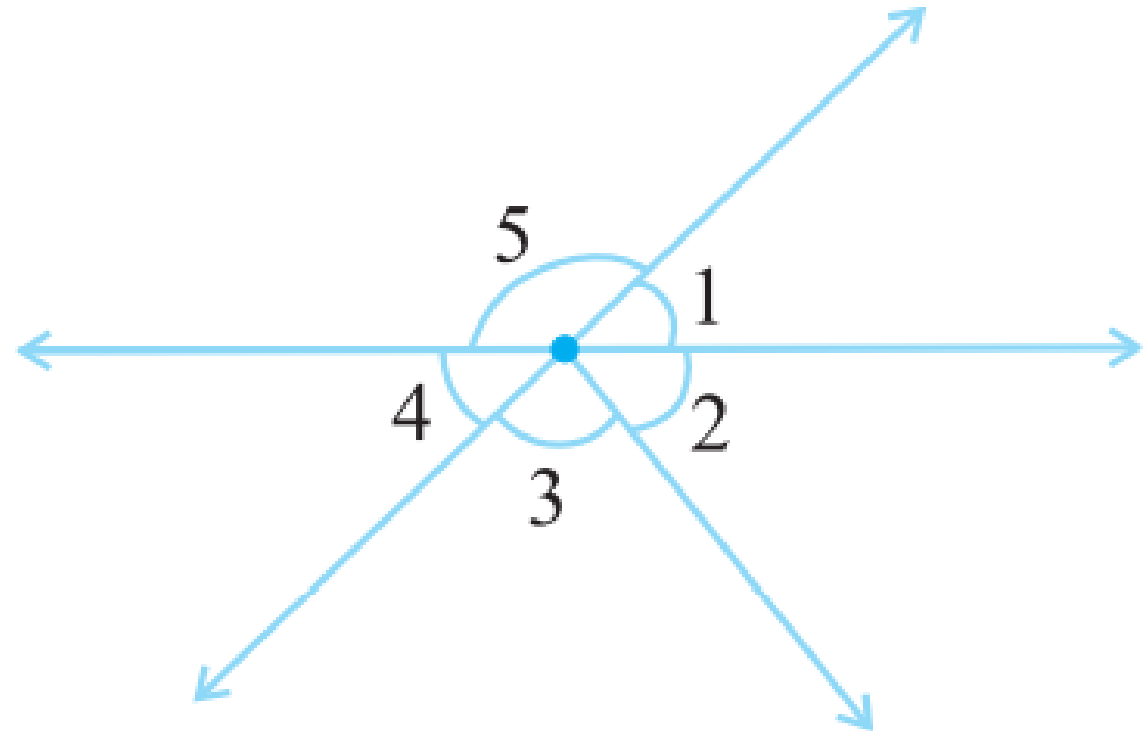




Assignment 53 (HW) EX 5.1

Q10. Indicate which pairs of angles are:

- (i) Vertically opposite angles.
- (ii) Linear pairs.



Assignment 53 (HW) EX 5.1

Q 11. In the following figure, is $\angle 1$ adjacent to $\angle 2$? Give reasons.

