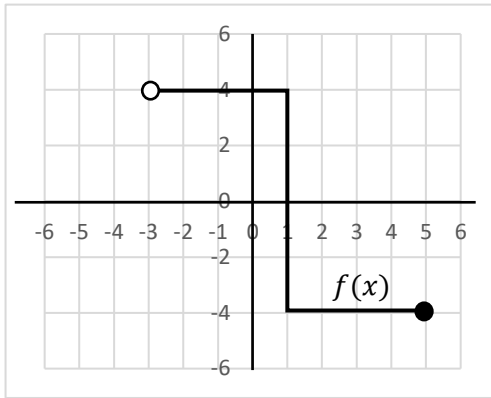
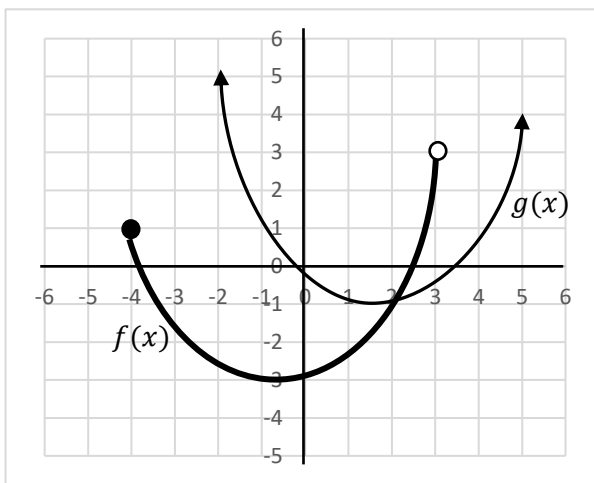


Domain and Range

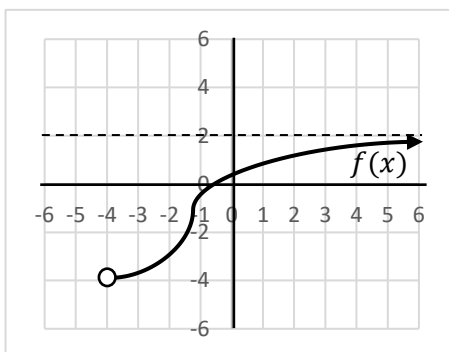
1. Consider the following function, $f(x)$. State the domain and range.



2. State the domain and range for $f(x)$ and $g(x)$.



3. Consider the following function, $f(x)$. State the equation of the asymptote and the domain and range.



4. Below is the graph of $g(x)$. State the equations of the asymptotes and the domain and range.

