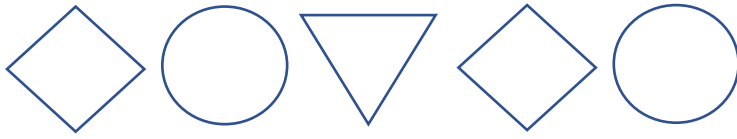


Continue the next three items in the pattern:



3, 6, 9, 12, _____, _____, _____

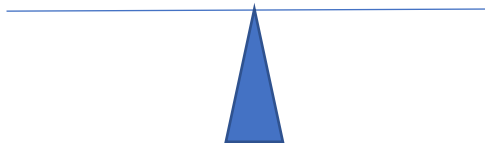
A, C, E, G, I, _____, _____, _____

1, 1, 2, 3, 5, 8, _____, _____, _____

Fill in the number that makes the scale balance:

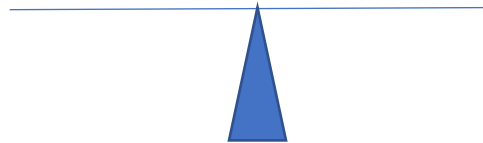
$6 + 4$

$3 +$



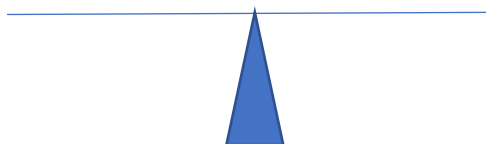
17

$6 +$



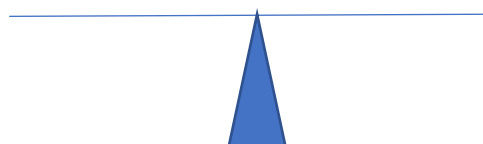
2×10

$4 \times$



$24 \div 6$

$15 -$



Fill in the missing values in these input/output tables:


In	Out
4	9
7	12
	16
15	20
40	

In	Out
2	6
4	12
8	24
10	
	60

Make up your own table

In	Out

Answer Sheet



15,18,21

K,M,O

13,21,34

7

11

5

11

11, 45

30, 20