

Ex 16.1

Tangents and Normals Ex 16.1 Q1(i)

We know that the slope of the tangent to the curve $y = f(x)$ is

$$\frac{dy}{dx} = f'(x) \quad \text{---(A)}$$

And the slope of the normal is

$$\frac{-1}{\frac{dy}{dx}} = \frac{-1}{f'(x)} \quad \text{---(B)}$$

Now,

$$y = \sqrt{x^3}$$

$$\therefore \frac{dy}{dx} = \frac{3x^2}{2\sqrt{x^3}}$$

\therefore Slope of tangent at $x = 4$ is

$$\left(\frac{dy}{dx}\right)_{x=4} = \frac{3 \cdot 16}{2\sqrt{64}} = \frac{48}{16} = 3$$

Slope of normal at $x = 4$ is

$$\frac{-1}{\frac{dy}{dx}} = \frac{-1}{f'(x)} = \frac{-1}{3}$$

Tangents and Normals Ex 16.1 Q1(ii)





We know that the slope of the tangent to the curve $y = f(x)$ is

$$\frac{dy}{dx} = f'(x) \quad \text{---(A)}$$

And the slope of the normal is

$$\frac{-1}{\frac{dy}{dx}} = \frac{-1}{f'(x)} \quad \text{---(B)}$$

$$y = \sqrt{x}$$

$$\therefore \frac{dy}{dx} = \frac{1}{2\sqrt{x}}$$

\therefore Slope of tangent at $x = 9$.

$$\left(\frac{dy}{dx}\right)_{x=9} = \frac{1}{2\sqrt{9}} = \frac{1}{6}$$

Also, the slope of normal is

$$\frac{-1}{\frac{dy}{dx}} = \frac{-1}{\frac{1}{6}} = -6$$

Tangents and Normals Ex 16.1 Q1(iii)

We know that the slope of the tangent to the curve $y = f(x)$ is

$$\frac{dy}{dx} = f'(x) \quad \text{---(A)}$$

And the slope of the normal is

$$\frac{-1}{\frac{dy}{dx}} = \frac{-1}{f'(x)} \quad \text{---(B)}$$

$$y = x^3 - x$$

$$\therefore \frac{dy}{dx} = 3x^2 - 1$$

\therefore Slope of tangent at $x = 2$ is

$$\left(\frac{dy}{dx}\right)_{x=2} = 3 \cdot 2^2 - 1 = 11$$

Slope of normal is

$$\frac{-1}{\frac{dy}{dx}} = \frac{-1}{11} = \frac{-1}{11}$$

Tangents and Normals Ex 16.1 Q1(iv)

We know that the slope of the tangent to the curve $y = f(x)$ is

$$\frac{dy}{dx} = f'(x) \quad \text{---(A)}$$

And the slope of the normal is

$$\frac{-1}{\frac{dy}{dx}} = \frac{-1}{f'(x)} \quad \text{---(B)}$$

$$y = 2x^2 + 3 \sin x$$

$$\therefore \frac{dy}{dx} = 4x + 3 \cos x$$

So, slope of tangent of $x = 0$ is

$$\left(\frac{dy}{dx}\right)_{x=0} = 4 \cdot 0 + 3 \cos 0^\circ = 3$$

And slope of normal is

$$\frac{-1}{\frac{dy}{dx}} = \frac{-1}{3} = \frac{-1}{3}$$

MillionStars edu
Think, Learn & Practice



Tangents and Normals Ex 16.1 Q1(v)

We know that the slope of the tangent to the curve $y = f(x)$ is

$$\frac{dy}{dx} = f'(x) \quad \text{---(A)}$$

And the slope of the normal is

$$\frac{-1}{\frac{dy}{dx}} = \frac{-1}{f'(x)} \quad \text{---(B)}$$

$$x = a(\theta - \sin \theta), \quad y = a(1 + \cos \theta)$$

Now,

$$\frac{dy}{dx} = \frac{\frac{dy}{d\theta}}{\frac{dx}{d\theta}} = \frac{-a \sin \theta}{a(1 - \cos \theta)}$$

∴ Slope of tangent of $\theta = -\frac{\pi}{2}$

$$\begin{aligned} \left(\frac{dy}{dx}\right)_{\theta=-\frac{\pi}{2}} &= \frac{-a \sin\left(-\frac{\pi}{2}\right)}{a\left(1 - \cos\left(-\frac{\pi}{2}\right)\right)} \\ &= \frac{a}{a(1-0)} = 1 \end{aligned}$$

Also, the slope of normal is

$$\frac{-1}{\frac{dy}{dx}} = \frac{-1}{f'(x)} = -1$$

Tangents and Normals Ex 16.1 Q1(vi)

We know that the slope of the tangent to the curve $y = f(x)$ is

$$\frac{dy}{dx} = f'(x) \quad \text{---(A)}$$

And the slope of the normal is

$$\frac{-1}{\frac{dy}{dx}} = \frac{-1}{f'(x)} \quad \text{---(B)}$$

$$x = a \cos^3 \theta, \quad y = a \sin^3 \theta$$

$$\therefore \frac{dx}{d\theta} = 3a \cos^2 \theta \times (-\sin \theta) = -3a \sin \theta \times \cos^2 \theta$$

$$\text{and } \frac{dy}{d\theta} = 3a \sin^2 \theta \times \cos \theta$$

Now,

$$\begin{aligned} \frac{dy}{dx} &= \frac{\frac{dy}{d\theta}}{\frac{dx}{d\theta}} = \frac{3a \sin^2 \theta \times \cos \theta}{-3a \sin \theta \times \cos^2 \theta} \\ &= -\tan \theta \end{aligned}$$

∴ Slope of tangent at $\theta = \frac{\pi}{4}$ is

$$\left(\frac{dy}{dx}\right)_{\theta=\frac{\pi}{4}} = 1$$

Also, the slope of normal is

$$\frac{-1}{\frac{dy}{dx}} = \frac{-1}{f'(x)} = -1$$

Tangents and Normals Ex 16.1 Q1(vii)

MillionStars edu
Think, Learn & Practice



We know that the slope of the tangent to the curve $y = f(x)$ is

$$\frac{dy}{dx} = f'(x) \quad \text{---(A)}$$

And the slope of the normal is

$$\frac{-1}{\frac{dy}{dx}} = \frac{-1}{f'(x)} \quad \text{---(B)}$$

$$x = a(\theta - \sin \theta), \quad y = a(1 - \cos \theta)$$

$$\therefore \frac{dx}{d\theta} = a(1 - \cos \theta), \quad \frac{dy}{d\theta} = a(0 + \sin \theta) = a \sin \theta$$

Now,

$$\frac{dy}{dx} = \frac{\frac{dy}{d\theta}}{\frac{dx}{d\theta}} = \frac{a \sin \theta}{a(1 - \cos \theta)}$$

Now, the slope of tangent at $\theta = \frac{\pi}{2}$ is

$$\left(\frac{dy}{dx}\right)_{\theta=\frac{\pi}{2}} = \frac{a \sin \frac{\pi}{2}}{a(1 - \cos \frac{\pi}{2})} = \frac{a}{a} = 1$$

And, the slope of normal is

$$\frac{-1}{\frac{dy}{dx}} = -1$$

Tangents and Normals Ex 16.1 Q1(viii)

We know that the slope of the tangent to the curve $y = f(x)$ is

$$\frac{dy}{dx} = f'(x) \quad \text{---(A)}$$

And the slope of the normal is

$$\frac{-1}{\frac{dy}{dx}} = \frac{-1}{f'(x)} \quad \text{---(B)}$$

$$y = (\sin 2x + \cot x + 2)^2$$

$$\therefore \frac{dy}{dx} = 2(\sin 2x + \cot x + 2)(2 \cos 2x - \operatorname{cosec}^2 x)$$

\therefore Slope of tangent of $x = \frac{\pi}{2}$ is

$$\begin{aligned} \left(\frac{dy}{dx}\right)_{x=\frac{\pi}{2}} &= 2\left(\sin \frac{\pi}{2} + \cot \frac{\pi}{2} + 2\right)\left(2 \cos \frac{\pi}{2} - \operatorname{cosec}^2 \frac{\pi}{2}\right) \\ &= 2(0 + 0 + 2)(-2 - 1) \\ &= -12 \end{aligned}$$

\therefore Slope of normal is

$$\frac{-1}{\frac{dy}{dx}} = \frac{1}{12}$$

Tangents and Normals Ex 16.1 Q1(ix)

MillionStars edu
Think, Learn & Practice



We know that the slope of the tangent to the curve $y = f(x)$ is

$$\frac{dy}{dx} = f'(x) \quad \text{---(A)}$$

And the slope of the normal is

$$\frac{-1}{\frac{dy}{dx}} = \frac{-1}{f'(x)} \quad \text{---(B)}$$

$$x^2 + 3y + y^2 = 5$$

Differentiating with respect to x , we get

$$2x + 3\frac{dy}{dx} + 2y\frac{dy}{dx} = 0$$

$$\Rightarrow \frac{dy}{dx}(3 + 2y) = -2x$$

$$\Rightarrow \frac{dy}{dx} = \frac{-2x}{3 + 2y}$$

So, the slope of tangent at $(1,1)$ is

$$\frac{dy}{dx} = \frac{-2 \cdot 1}{3 + 2 \cdot 1} = \frac{-2}{5}$$

The slope of normal is

$$\frac{-1}{\frac{dy}{dx}} = \frac{5}{2}$$

Tangents and Normals Ex 16.1 Q1(x)

We know that the slope of the tangent to the curve $y = f(x)$ is

$$\frac{dy}{dx} = f'(x) \quad \text{---(A)}$$

And the slope of the normal is

$$\frac{-1}{\frac{dy}{dx}} = \frac{-1}{f'(x)} \quad \text{---(B)}$$

$$xy = 6$$

Differentiating with respect to x , we get

$$y + x\frac{dy}{dx} = 0$$

$$\Rightarrow \frac{dy}{dx} = \frac{-y}{x}$$

\therefore Slope of tangent at $(1,6)$ is

$$\frac{dy}{dx} = -6 \text{ and}$$

Slope of normal is

$$\frac{-1}{\frac{dy}{dx}} = \frac{1}{6}$$

Tangents and Normals Ex 16.1 Q2

MillionStars edu
Think, Learn & Practice



Differentiating with respect to x , we get

$$y + x \frac{dy}{dx} + a + b \frac{dy}{dx} = 0$$

$$\Rightarrow \frac{dy}{dx}(x + b) = -(a + y)$$

$$\Rightarrow \frac{dy}{dx} = \frac{-(a + y)}{x + b}$$

$$\therefore \text{Slope of tangent} = \left(\frac{dy}{dx}\right)_{x=1, y=1} = \frac{-(a+1)}{b+1} = 2 \quad \text{[given]}$$

$$\Rightarrow -(a + 1) = 2b + 2$$

$$\Rightarrow 2b + a = -3 \quad \text{---(i)}$$

Also, $(1, 1)$ lies on the curve, so $x = 1, y = 1$ satisfies the equation

$$xy + ax + by = 2$$

$$\Rightarrow 1 + a + b = 2$$

$$\Rightarrow a + b = 1 \quad \text{---(ii)}$$

Solving (i) and (ii), we get

$$a = 5, b = -4$$

Tangents and Normals Ex 16.1 Q3

We have,

$$y = x^3 + ax + b \quad \text{---(i)}$$

$$x - y + 5 = 0 \quad \text{---(ii)}$$

Now,

Point $(1, -6)$ lies on (i), so,

$$-6 = 1 + a + b$$

$$\Rightarrow a + b = -7 \quad \text{---(iii)}$$

Also,

Slope of tangent to (i) is

$$\frac{dy}{dx} = 3x^2 + a$$

$$\Rightarrow \left(\frac{dy}{dx}\right)_{(1,-6)} = 3 + a$$

And slope of tangent to (ii) is

$$\frac{dy}{dx} = 1$$

According to the question slope of (i) and (ii) are parallel

$$\therefore 3 + a = 1$$

$$\Rightarrow a = -2$$

From (iii)

$$b = -5$$

Tangents and Normals Ex 16.1 Q4

MillionStars edu
Think, Learn & Practice



We have,

$$y = x^3 - 3x \quad \text{---(i)}$$

∴ Slope of (i) is

$$\frac{dy}{dx} = 3x^2 - 3 \quad \text{---(ii)}$$

Also,

The slope of the chord obtained by joining the points (1, -2) and (2, 2) is

$$\frac{2 - (-2)}{2 - 1} \quad \left[\text{Slope } \frac{y_2 - y_1}{x_2 - x_1} \right]$$
$$= 4$$

According to the question slope of tangent to (i) and the chord are parallel

$$\therefore 3x^2 - 3 = 4$$

$$\Rightarrow 3x^2 = 7$$

$$\Rightarrow x = \pm \sqrt{\frac{7}{3}}$$

From (i)

$$y = \pm \sqrt{\frac{7}{3}} \mp 3 \sqrt{\frac{7}{3}}$$
$$= \mp \frac{2}{3} \sqrt{\frac{7}{3}}$$

Thus, the required point is

$$\pm \sqrt{\frac{7}{3}}, \mp \frac{2}{3} \sqrt{\frac{7}{3}}$$

Tangents and Normals Ex 16.1 Q5

The given equations are

$$y = x^3 - 2x^2 - 2x \quad \text{---(i)}$$

$$y = 2x - 3 \quad \text{---(ii)}$$

Slope to the tangents of (i) and (ii) are

$$\frac{dy}{dx} = 3x^2 - 4x - 2 \quad \text{---(iii)}$$

and $\frac{dy}{dx} = 2 \quad \text{---(iv)}$

According to the question slope to (i) and (ii) are parallel, so

$$3x^2 - 4x - 2 = 2$$

$$\Rightarrow 3x^2 - 4x - 4 = 0$$

$$\Rightarrow 3x^2 - 6x + 2x - 4 = 0$$

$$\Rightarrow 3x(x - 2) + 2(x - 2) = 0$$

$$\Rightarrow (3x + 2)(x - 2) = 0$$

$$\Rightarrow x = \frac{-2}{3} \text{ or } 2$$

From (i)

$$y = \frac{4}{27} \text{ or } -4$$

Thus, the points are

$$\left(\frac{-2}{3}, \frac{4}{27} \right) \text{ and } (2, -4)$$

Tangents and Normals Ex 16.1 Q6

MillionStars edu
Think, Learn & Practice



We have,

$$y^2 = 2x^3 \quad \text{---(i)}$$

Differentiating (i) with respect to x , we get

$$2y \frac{dy}{dx} = 6x^2$$
$$\Rightarrow \frac{dy}{dx} = \frac{3x^2}{y} \quad \text{---(ii)}$$

According to the question

$$\frac{3x^2}{y} = 3$$
$$\Rightarrow x^2 = y \quad \text{---(iii)}$$

From (i) and (ii)

$$(x^2)^2 = 2x^3$$
$$\Rightarrow x^4 - 2x^3 = 0$$
$$\Rightarrow x^3(x - 2) = 0$$
$$\Rightarrow x = 0 \text{ or } 2$$

If $x = 0$, then

$$\frac{dy}{dx} = \frac{3x^2}{y} \Rightarrow \frac{dy}{dx} = 0$$

Which is not possible.

$\therefore x = 2$.

Putting $x = 2$ in the equation of the curve $y^2 = 2x^3$, we get $y = 4$.

Hence the required point is $(2, 4)$

Tangents and Normals Ex 16.1 Q7

We know that the slope to any curve is $\frac{dy}{dx} = \tan \theta$ where θ is the angle with positive direction of x -axis.

Now,

The given curve is

$$xy + 4 = 0 \quad \text{---(i)}$$

Differentiating with respect to x , we get

$$y + x \frac{dy}{dx} = 0$$
$$\Rightarrow \frac{dy}{dx} = \frac{-y}{x} \quad \text{---(ii)}$$

Also,

$$\frac{dy}{dx} = \tan 45^\circ = 1 \quad \text{---(iii)}$$

\therefore From (ii) and (iii)

$$\frac{-y}{x} = 1$$
$$\Rightarrow x = -y \quad \text{---(iv)}$$

From (i) and (iv), we get

$$-y^2 + 4 = 0$$
$$\Rightarrow y = \pm 2$$
$$\therefore x = \mp 2$$

Thus, the points are

$$(2, -2) \text{ and } (-2, 2)$$

Tangents and Normals Ex 16.1 Q8

MillionStars edu
Think, Learn & Practice



The given equation of the curve is

$$y = x^2 \quad \text{---(i)}$$

∴ Slope of tangent to (i) is

$$\frac{dy}{dx} = 2x \quad \text{---(ii)}$$

According to the question

$$\frac{dy}{dx} = x \quad \text{---(iii)} \quad \text{[Slope = x-coordinate]}$$

From (ii) and (iii)

$$2x = x$$

$$\Rightarrow x = 0 \text{ \& } y = 0$$

Thus, the required point is (0,0)

Tangents and Normals Ex 16.1 Q9

The given equation of the curve is

$$x^2 + y^2 - 2x - 4y + 1 = 0 \quad \text{---(i)}$$

Differentiating with respect to x , we get

$$2x + 2y \frac{dy}{dx} - 2 - 4 \frac{dy}{dx} = 0$$

$$\Rightarrow \frac{dy}{dx} (2y - 4) = 2 - 2x$$

$$\Rightarrow \frac{dy}{dx} = \frac{2(1-x)}{2(y-2)} \quad \text{---(ii)}$$

According to the question the tangent is parallel to x -axis, so $\theta = 0^\circ$

$$\therefore \text{Slope} = \tan \theta = \tan 0^\circ = 0 \quad \text{---(iii)}$$

From (ii) and (iii), we get

$$\frac{1-x}{y-2} = 0$$

$$\Rightarrow 1-x = 0$$

$$\Rightarrow x = 1$$

∴ from (i)

$$y = 0, 4$$

Thus, the points are (1,0) and (1,4)

Tangents and Normals Ex 16.1 Q10

The given equation of curve is

$$y = x^2 \quad \text{---(i)}$$

$$\therefore \text{Slope} = \frac{dy}{dx} = 2x \quad \text{---(ii)}$$

As per question

$$\text{slope} = \tan 45^\circ = 1 \quad \text{---(iii)}$$

From (ii) and (iii), we have

$$2x = 1$$

$$\Rightarrow x = \frac{1}{2}$$

∴ From (i)

$$y = \frac{1}{4}$$

Thus, the required point is

$$\left(\frac{1}{2}, \frac{1}{4}\right)$$

Tangents and Normals Ex 16.1 Q11

MillionStars edu
Think, Learn & Practice



The given equation of the curve is

$$y = 3x^2 - 9x + 8 \quad \text{--- (i)}$$

$$\text{Slope} = \frac{dy}{dx} = 6x - 9 \quad \text{--- (ii)}$$

As per question

The tangent is equally inclined to the axes

$$\therefore \theta = \frac{\pi}{4} \text{ or } \frac{-\pi}{4}$$

\therefore Slope = $\tan \theta$

$$= \tan \frac{\pi}{4} \text{ or } \tan \left(\frac{-\pi}{4} \right)$$

$$= 1 \text{ or } -1 \quad \text{--- (iii)}$$

From (ii) and (iii), we have,

$$6x - 9 = 1 \quad \text{or} \quad 6x - 9 = -1$$

$$\Rightarrow x = \frac{5}{3} \quad \text{or} \quad x = \frac{4}{3}$$

So, from (i)

$$y = \frac{4}{3} \quad \text{or} \quad y = \frac{4}{3}$$

Thus, the points are

$$\left(\frac{5}{3}, \frac{4}{3} \right) \text{ or } \left(\frac{4}{3}, \frac{4}{3} \right)$$

Tangents and Normals Ex 16.1 Q12

The given equation are

$$y = 2x^2 - x + 1 \quad \text{--- (i)}$$

$$y = 3x + 4 \quad \text{--- (ii)}$$

Slope to (i) is

$$\frac{dy}{dx} = 4x - 1 \quad \text{--- (iii)}$$

Slope to (ii) is

$$\frac{dy}{dx} = 3 \quad \text{--- (iv)}$$

According to the question

$$4x - 1 = 3$$

$$\Rightarrow x = 1$$

Thus from (i)

$$y = 2$$

Hence, the point is (1,2).

Tangents and Normals Ex 16.1 Q13

MillionStars edu
Think, Learn & Practice



The given equation of curve is

$$y = 3x^2 + 4 \quad \text{---(i)}$$

$$\text{Slope} = m_1 = \frac{dy}{dx} = 6x \quad \text{---(ii)}$$

Now,

$$\text{The given slope } m_2 = \frac{-1}{6}$$

We have,

tangent to (i) is perpendicular to the tangent whose slope is $\frac{-1}{6}$

$$\therefore m_1 \times m_2 = -1$$

$$\Rightarrow 6x \times \frac{-1}{6} = -1$$

$$\Rightarrow x = 1$$

From (i)

$$y = 7$$

Thus, the required point is (1, 7).

Tangents and Normals Ex 16.1 Q14

The given equation of curve and the line is

$$x^2 + y^2 = 13 \quad \text{---(i)}$$

$$\text{and } 2x + 3y = 7 \quad \text{---(ii)}$$

Slope = m_1 for (i)

$$m_1 = \frac{dy}{dx} = \frac{-x}{y} \quad \text{---(iii)}$$

Slope = m_2 for (ii)

$$m_2 = \frac{dy}{dx} = \frac{-2}{3} \quad \text{---(iv)}$$

According to the question

$$m_1 = m_2$$

$$\Rightarrow \frac{-x}{y} = \frac{-2}{3}$$

$$\Rightarrow x = \frac{2}{3}y$$

From (i)

$$\frac{4}{9}y^2 + y^2 = 13$$

$$\Rightarrow \frac{13y^2}{9} = 13$$

$$\Rightarrow y = \pm 3$$

$$\therefore x = \pm 2$$

Thus, the points are (2, 3) and (-2, -3).

Tangents and Normals Ex 16.1 Q15

MillionStars edu
Think, Learn & Practice



The given equation of the curve is

$$2a^2y = x^3 - 3ax^2 \quad \text{---(i)}$$

Differentiating with respect to x , we get

$$2a^2 \frac{dy}{dx} = 3x^2 - 6ax$$

$$\therefore \text{Slope } m_1 = \frac{dy}{dx} = \frac{1}{2a^2} [3x^2 - 6ax] \quad \text{---(ii)}$$

Also,

$$\begin{aligned} \text{Slope } m_2 &= \frac{dy}{dx} = \tan \theta \\ &= \tan 0^\circ = 0 \end{aligned}$$

[∵ Slope is parallel to x -axis]

$$\therefore m_1 = m_2$$

$$\Rightarrow \frac{1}{2a^2} [3x^2 - 6ax] = 0$$

$$\Rightarrow 3x [x - 2a] = 0$$

$$\Rightarrow x = 0 \text{ or } 2a$$

∴ From (i)

$$y = 0 \text{ or } -2a$$

Thus, the required points are $(0,0)$ or $(2a,-2a)$.

Tangents and Normals Ex 16.1 Q16

The given equations of curve and the line are

$$y = x^2 - 4x + 5 \quad \text{---(i)}$$

$$2y + x = 7 \quad \text{---(ii)}$$

Slope of the tangent to (i) is

$$m_1 = \frac{dy}{dx} = 2x - 4 \quad \text{---(iii)}$$

Slope of the line (ii) is

$$m_2 = \frac{dy}{dx} = \frac{-1}{2} \quad \text{---(iv)}$$

We have given that slope of (i) and (ii) are perpendicular to each other.

$$\therefore m_1 \times m_2 = -1$$

$$\Rightarrow (2x - 4) \left(\frac{-1}{2} \right) = -1$$

$$\Rightarrow -2x + 4 = -2$$

$$\Rightarrow x = 3$$

From (i)

$$y = 2$$

Thus, the required point is $(3,2)$.

Tangents and Normals Ex 16.1 Q17

MillionStars edu
Think, Learn & Practice



Differentiating $\frac{x^2}{4} + \frac{y^2}{25} = 1$ with respect to x , we get

$$\frac{x}{2} + \frac{2y}{25} \cdot \frac{dy}{dx} = 0$$

or $\frac{dy}{dx} = -\frac{25}{4} \cdot \frac{x}{y}$

(i) Now, the tangent is parallel to the x - axis if the slope of the tangent is zero.

$$\therefore -\frac{25}{4} \cdot \frac{x}{y} = 0$$

This is possible if $x = 0$.

Then $\frac{x^2}{4} + \frac{y^2}{25} = 1$ for $x = 0$ gives $y^2 = 25$

$$\therefore y = \pm 5$$

Thus, the points at which the tangents are parallel to the x - axis are $(0, 5)$ and $(0, -5)$.

(ii) Now, the tangent is parallel to the y - axis if the slope of the normal is zero.

$$\therefore \frac{4y}{25x} = 0$$

This is possible if $y = 0$.

Then $\frac{x^2}{4} + \frac{y^2}{25} = 1$ for $y = 0$ gives $x^2 = 4$

$$\therefore x = \pm 2$$

Thus, the points at which the tangents are parallel to the y - axis are $(2, 0)$ and $(-2, 0)$.

Tangents and Normals Ex 16.1 Q18

The equation of the given curve is $x^2 + y^2 - 2x - 3 = 0$.

On differentiating with respect to x , we have:

$$2x + 2y \frac{dy}{dx} - 2 = 0$$

$$\Rightarrow y \frac{dy}{dx} = 1 - x$$

$$\Rightarrow \frac{dy}{dx} = \frac{1-x}{y}$$

Now, the tangents are parallel to the x -axis if the slope of the tangent is 0.

$$\therefore \frac{1-x}{y} = 0 \Rightarrow 1-x = 0 \Rightarrow x = 1$$

But, $x^2 + y^2 - 2x - 3 = 0$ for $x = 1$.

$$\Rightarrow y^2 = 4 \Rightarrow y = \pm 2$$

Hence, the points at which the tangents are parallel to the x -axis are $(1, 2)$ and $(1, -2)$

(b) Now, the tangents are parallel to the x -axis if the slope of the tangents is 0

$$\frac{y}{1-x} = 0$$
$$y = 0$$

But, $x^2 + y^2 - 2x - 3 = 0$ for $y = 0$
 $x^2 - 2x - 3 = 0$
 $x = -1, 3$

Hence, the points at which the tangents are parallel to the y -axis are, $(-1, 0), (3, 0)$

Tangents and Normals Ex 16.1 Q19

Wondershare PDFelement
MillionStars edu
Think, Learn & Practice



The equation of the given curve is $\frac{x^2}{9} + \frac{y^2}{16} = 1$.

On differentiating both sides with respect to x , we have:

$$\begin{aligned} \frac{2x}{9} + \frac{2y}{16} \cdot \frac{dy}{dx} &= 0 \\ \Rightarrow \frac{dy}{dx} &= \frac{-16x}{9y} \end{aligned}$$

(i) The tangent is parallel to the x -axis if the slope of the tangent is i.e., $0 \cdot \frac{-16x}{9y} = 0$, which is possible if $x = 0$.

$$\text{Then, } \frac{x^2}{9} + \frac{y^2}{16} = 1 \text{ for } x = 0$$

$$\Rightarrow y^2 = 16 \Rightarrow y = \pm 4$$

Hence, the points at which the tangents are parallel to the x -axis are

$(0, 4)$ and $(0, -4)$.

(ii) The tangent is parallel to the y -axis if the slope of the normal is 0, which gives $\frac{-1}{\left(\frac{-16x}{9y}\right)} = \frac{9y}{16x} = 0 \Rightarrow y = 0$.

$$\text{Then, } \frac{x^2}{9} + \frac{y^2}{16} = 1 \text{ for } y = 0.$$

$$\Rightarrow x = \pm 3$$

Hence, the points at which the tangents are parallel to the y -axis are

$(3, 0)$ and $(-3, 0)$.

Tangents and Normals Ex 16.1 Q20

The equation of the given curve is $y = 7x^3 + 11$.

$$\therefore \frac{dy}{dx} = 21x^2$$

The slope of the tangent to a curve at (x_0, y_0) is $\left. \frac{dy}{dx} \right|_{(x_0, y_0)}$.

Therefore, the slope of the tangent at the point where $x = 2$ is given by,

$$\left. \frac{dy}{dx} \right|_{x=2} = 21(2)^2 = 84$$

It is observed that the slopes of the tangents at the points where $x = 2$ and $x = -2$ are equal.

Hence, the two tangents are parallel.

Tangents and Normals Ex 16.1 Q21

MillionStars edu
Think, Learn & Practice

The given equation of curve is

$$y = x^3 \quad \text{---(i)}$$

Slope of the tangent to (i) is

$$m_1 = \frac{dy}{dx} = 3x^2 \quad \text{---(ii)}$$

Also,

given that slope of the tangent is parallel to x-coordinate of the point.

$$\therefore m_2 = \frac{dy}{dx} = x \quad \text{---(iii)}$$

From (ii) and (iii)

$$m_1 = m_2$$

$$\Rightarrow 3x^2 = x$$

$$\Rightarrow 3x^2 - x = 0$$

$$\Rightarrow x(3x - 1) = 0$$

$$\Rightarrow x = 0 \quad \text{or} \quad \frac{1}{3}$$

\therefore From (i)

$$y = 0 \quad \text{or} \quad \frac{1}{27}$$

Thus, the required point is $(0, 0)$ or $\left(\frac{1}{3}, \frac{1}{27}\right)$.



Ex 16.2

Tangents and Normals Ex 16.2 Q1

The given equation of the curve is

$$\sqrt{x} + \sqrt{y} = a \quad \text{---(i)}$$

Differentiating with respect to x , we get

$$\frac{1}{2\sqrt{x}} + \frac{1}{2\sqrt{y}} \times \frac{dy}{dx} = 0$$

$$\Rightarrow \frac{dy}{dx} = -\frac{\sqrt{y}}{\sqrt{x}}$$

$$\therefore m = \left(\frac{dy}{dx} \right)_{\left(\frac{a^2}{4}, \frac{a^2}{4} \right)} = -\frac{\frac{a}{2}}{\frac{a}{2}} = -1$$

Thus,

the equation of tangent is

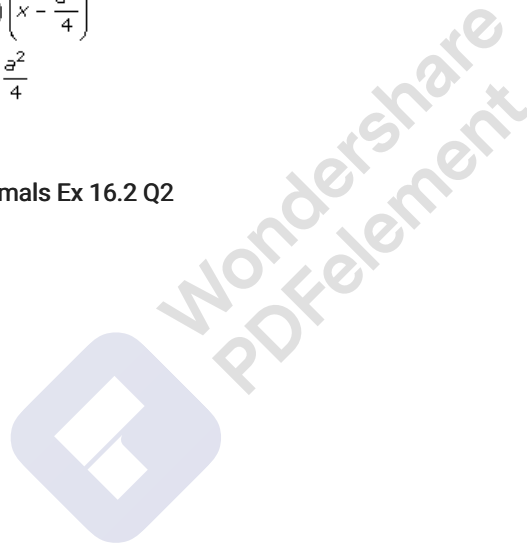
$$y - y_1 = m(x - x_1)$$

$$\Rightarrow y - \frac{a^2}{4} = (-1) \left(x - \frac{a^2}{4} \right)$$

$$\Rightarrow x + y = \frac{a^2}{4} + \frac{a^2}{4}$$

$$\Rightarrow x + y = \frac{a^2}{2}$$

Tangents and Normals Ex 16.2 Q2





The equation of the curve is

$$y = 2x^3 - x^2 + 3 \quad \text{---(i)}$$

$$\text{Slope} = m = \frac{dy}{dx} = 6x^2 - 2x$$

$$\therefore m = \left(\frac{dy}{dx} \right)_{(1,4)} = 4$$

Now,

The equation of normal is (i) is

$$y - y_1 = \frac{-1}{m}(x - x_1)$$

$$\Rightarrow (y - 4) = \frac{-1}{4}(x - 1)$$

$$\Rightarrow x + 4y = 16 + 1$$

$$\Rightarrow x + 4y = 17$$

Tangents and Normals Ex 16.2 Q3(i)

(i) The equation of the curve is $y = x^4 - 6x^3 + 13x^2 - 10x + 5$.

On differentiating with respect to x , we get:

$$\frac{dy}{dx} = 4x^3 - 18x^2 + 26x - 10$$

$$\left. \frac{dy}{dx} \right|_{(0,5)} = -10$$

Thus, the slope of the tangent at $(0, 5)$ is -10 . The equation of the tangent is given as:

$$y - 5 = -10(x - 0)$$

$$\Rightarrow y - 5 = -10x$$

$$\Rightarrow 10x + y = 5$$

The slope of the normal at $(0, 5)$ is $\frac{-1}{\text{Slope of the tangent at } (0, 5)} = \frac{1}{10}$.

Therefore, the equation of the normal at $(0, 5)$ is given as:

$$y - 5 = \frac{1}{10}(x - 0)$$

$$\Rightarrow 10y - 50 = x$$

$$\Rightarrow x - 10y + 50 = 0$$

Tangents and Normals Ex 16.2 Q3(ii)



(ii) The equation of the curve is $y = x^4 - 6x^3 + 13x^2 - 10x + 5$.

On differentiating with respect to x , we get:

$$\frac{dy}{dx} = 4x^3 - 18x^2 + 26x - 10$$
$$\left. \frac{dy}{dx} \right|_{(1, 3)} = 4 - 18 + 26 - 10 = 2$$

Thus, the slope of the tangent at $(1, 3)$ is 2. The equation of the tangent is given as:

$$y - 3 = 2(x - 1)$$
$$\Rightarrow y - 3 = 2x - 2$$
$$\Rightarrow y = 2x + 1$$

The slope of the normal at $(1, 3)$ is $\frac{-1}{\text{Slope of the tangent at } (1, 3)} = \frac{-1}{2}$.

Therefore, the equation of the normal at $(1, 3)$ is given as:

$$y - 3 = -\frac{1}{2}(x - 1)$$
$$\Rightarrow 2y - 6 = -x + 1$$
$$\Rightarrow x + 2y - 7 = 0$$

Tangents and Normals Ex 16.2 Q3(iii)

The equation of the curve is $y = x^2$.

On differentiating with respect to x , we get:

$$\frac{dy}{dx} = 2x$$
$$\left. \frac{dy}{dx} \right|_{(0, 0)} = 0$$

Thus, the slope of the tangent at $(0, 0)$ is 0 and the equation of the tangent is given as:

$$y - 0 = 0(x - 0)$$
$$\Rightarrow y = 0$$

The slope of the normal at $(0, 0)$ is $\frac{-1}{\text{Slope of the tangent at } (0, 0)} = \frac{-1}{0}$, which is not defined.

Therefore, the equation of the normal at $(x_0, y_0) = (0, 0)$ is given by

$$x = x_0 = 0.$$

Tangents and Normals Ex 16.2 Q3(iv)

MillionStars edu
Think, Learn & Practice



We know that the equation of tangent and the normal to any curve is given by

$$y - y_1 = m(x - x_1) \quad (\text{A}) \quad \text{Tangent}$$

$$y - y_1 = \frac{-1}{m}(x - x_1) \quad (\text{B}) \quad \text{Normal}$$

Where m is the slope

We have,

$$y = 2x^2 - 3x - 1 \quad P = (1, -2)$$

$$\text{Slope } m = \frac{dy}{dx} = 4x - 3$$

$$m = \left(\frac{dy}{dx}\right)_P = 1$$

\therefore equation of tangent from (A)

$$(y + 2) = 1(x - 1)$$

$$\Rightarrow x - y = 3$$

And equation of normal from (B)

$$(y + 2) = -1(x - 1)$$

$$\Rightarrow x + y + 1 = 0$$

Tangents and Normals Ex 16.2 Q3(v)

We know that the equation of tangent and the normal to any curve is given by

$$y - y_1 = m(x - x_1) \quad (\text{A}) \quad \text{Tangent}$$

$$y - y_1 = \frac{-1}{m}(x - x_1) \quad (\text{B}) \quad \text{Normal}$$

Where m is the slope

We have,

$$y^2 = \frac{x^3}{4-x} \quad P = (2, -2)$$

Differentiating with respect to x , we get

$$2y \frac{dy}{dx} = \frac{3x^2(4-x) + x^3}{(4-x)^2}$$

$$\Rightarrow \frac{dy}{dx} = \frac{3x^2(4-x) + x^3}{2y(4-x)^2}$$

$$\begin{aligned} \therefore \text{Slope } m &= \left(\frac{dy}{dx}\right)_P = \frac{3 \times 4(4-2) + 8}{-2 \times 2(4-2)^2} \\ &= \frac{32}{-16} = -2 \end{aligned}$$

From (A)

Equation of tangent is

$$(y + 2) = -2(x - 2)$$

$$\Rightarrow 2x + y = 2$$

From (B)

Equation of Normal is

$$(y + 2) = \frac{1}{2}(x - 2)$$

$$\Rightarrow x - 2y = 6$$

Tangents and Normals Ex 16.2 Q3(vi)



We know that the equation of tangent and the normal to any curve is given by

$$y - y_1 = m(x - x_1) \quad \text{(A) Tangent}$$

$$y - y_1 = \frac{-1}{m}(x - x_1) \quad \text{(B) Normal}$$

Where m is the slope

We have,

$$y = x^2 + 4x + 1 \quad \text{and} \quad P = (x = 3)$$

$$\text{Slope} = \frac{dy}{dx} = 2x + 4$$

$$\therefore m = \left(\frac{dy}{dx}\right)_P = 10$$

From (A)

Equation of tangent is

$$(y - 22) = 10(x - 3)$$

$$\Rightarrow 10x - y = 8$$

From (B)

Equation of normal is

$$(y - 22) = \frac{-1}{10}(x - 3)$$

$$\Rightarrow x + 10y = 223$$

Tangents and Normals Ex 16.2 Q3(vii)





We know that the equation of tangent and the normal to any curve is given by

$$y - y_1 = m(x - x_1) \quad \text{(A) Tangent}$$

$$y - y_1 = \frac{-1}{m}(x - x_1) \quad \text{(B) Normal}$$

Where m is the slope

We have,

$$\frac{x^2}{a^2} + \frac{y^2}{b^2} = 1 \quad \text{and} \quad P = (a \cos \theta, b \sin \theta)$$

Differentiating with respect to x , we get

$$\frac{2x}{a^2} + \frac{2y}{b^2} \frac{dy}{dx} = 0$$

$$\Rightarrow \frac{dy}{dx} = -\frac{xb^2}{ya^2}$$

$$\begin{aligned} \therefore \text{Slope } m &= \left(\frac{dy}{dx}\right)_P = \frac{-a \cos \theta b^2}{b \sin \theta a^2} \\ &= \frac{-b}{a} \cot \theta \end{aligned}$$

From (A)

Equation of tangent is,

$$(y - b \sin \theta) = \frac{-b}{a} \cot \theta (x - a \cos \theta)$$

$$\Rightarrow \frac{b}{a} x \cot \theta + y = b \sin \theta + b \cot \theta \times \cos \theta$$

$$\Rightarrow \frac{x}{a} \cot \theta + \frac{y}{b} = \frac{\sin^2 \theta + \cos^2 \theta}{\sin \theta}$$

$$\Rightarrow \frac{x}{a} \cot \theta + \frac{y}{b} = \frac{1}{\sin \theta}$$

$$\Rightarrow \frac{x}{a} \cos \theta + \frac{y}{b} \sin \theta = 1$$

From (B)

Equation of normal is

$$(y - b \sin \theta) = \frac{a \sin \theta}{b \cos \theta} (x - a \cos \theta)$$

$$\Rightarrow \frac{a}{b} x \tan \theta - y = \frac{a^2}{b} \sin \theta - b \sin \theta$$

$$\Rightarrow \frac{a}{b} x \tan \theta - y = \frac{a^2 - b^2}{b} \sin \theta$$

$$\Rightarrow \frac{a}{b} x \sec \theta - y \operatorname{cosec} \theta = \frac{a^2 - b^2}{b}$$

$$\Rightarrow ax \sec \theta - by \operatorname{cosec} \theta = a^2 - b^2$$

Tangents and Normals Ex 16.2 Q3(viii)



We know that the equation of tangent and the normal to any curve is given by

$$y - y_1 = m(x - x_1) \quad \text{(A) Tangent}$$

$$y - y_1 = \frac{-1}{m}(x - x_1) \quad \text{(B) Normal}$$

Where m is the slope

We have,

$$\frac{x^2}{a^2} - \frac{y^2}{b^2} = 1 \quad P = (a \sec \theta, b \tan \theta)$$

Differentiating with respect to x , we get

$$\frac{2x}{a^2} - \frac{2y}{b^2} \frac{dy}{dx} = 0$$

$$\Rightarrow \frac{dy}{dx} = \frac{xb^2}{ya^2}$$

$$\therefore \text{Slope } m = \left(\frac{dy}{dx} \right)_P = \frac{a \sec \theta b^2}{b \tan \theta a^2} \\ = \frac{b}{a \sin \theta}$$

From (A)

Equation of tangent is,

$$(y - b \tan \theta) = \frac{b}{a \sin \theta} (x - a \sec \theta)$$

$$\Rightarrow \frac{b}{a \sin \theta} x - y = \frac{b \sec \theta}{\sin \theta} - b \tan \theta$$

$$\Rightarrow \frac{bx}{a \sin \theta} - y = \frac{b \sec \theta}{\sin \theta} (1 - \sin^2 \theta)$$

$$\Rightarrow \frac{x}{a} - \frac{y}{b} \sin \theta = \cos \theta$$

$$\Rightarrow \frac{x}{a} \sec \theta - \frac{y}{b} \tan \theta = 1$$

From (B)

Equation of normal is

$$y - b \tan \theta = \frac{-a \sin \theta}{b} (x - a \sec \theta)$$

$$\Rightarrow ax \sin \theta + by = b^2 \tan \theta + a^2 \tan \theta$$

$$\Rightarrow ax \cos \theta + by \cot \theta = a^2 + b^2$$

Tangents and Normals Ex 16.2 Q3(ix)



We know that the equation of tangent and the normal to any curve is given by

$$y - y_1 = m(x - x_1) \quad (\text{A}) \quad \text{Tangent}$$

$$y - y_1 = \frac{-1}{m}(x - x_1) \quad (\text{B}) \quad \text{Normal}$$

Where m is the slope

We have,

$$y^2 = 4ax \quad p \left(\frac{a}{m^2}, \frac{2a}{m} \right)$$

Differentiating with respect to x , we get

$$2y \frac{dy}{dx} = 4a$$

$$\Rightarrow \frac{dy}{dx} = \frac{2a}{y}$$

$$\therefore \text{Slope } m = \left(\frac{dy}{dx} \right)_p = m$$

From (A)

Equation of tangent is

$$\left(y - \frac{2a}{m} \right) = m \left(x - \frac{a}{m^2} \right)$$

$$\Rightarrow m^2x - my = 2a - a$$

$$\Rightarrow m^2x - my = a$$

From (B)

Equation of normal is

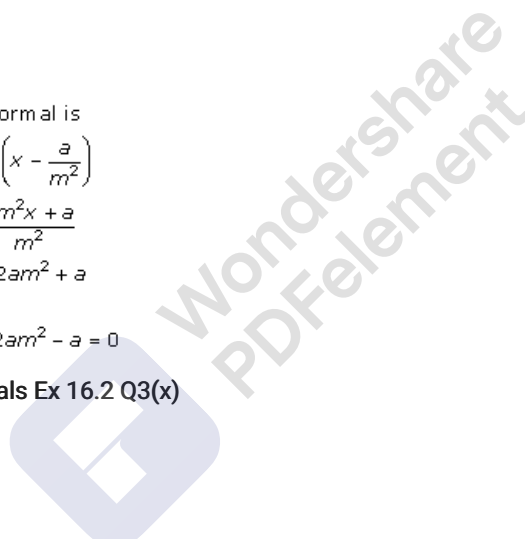
$$\left(y - \frac{2a}{m} \right) = \frac{-1}{m} \left(x - \frac{a}{m^2} \right)$$

$$\Rightarrow (my - 2a) = \frac{-m^2x + a}{m^2}$$

$$\Rightarrow m^2x + m^3y = 2am^2 + a$$

$$\Rightarrow m^2x + m^3y - 2am^2 - a = 0$$

Tangents and Normals Ex 16.2 Q3(x)



MillionStars edu
Think, Learn & Practice



We know that the equation of tangent and the normal to any curve is given by

$$y - y_1 = m(x - x_1) \quad \text{(A) Tangent}$$

$$y - y_1 = \frac{-1}{m}(x - x_1) \quad \text{(B) Normal}$$

Where m is the slope

We have,

$$c^2(x^2 + y^2) = x^2y^2 \quad P = \left(\frac{c}{\cos \theta}, \frac{c}{\sin \theta}\right)$$

Differentiating with respect to x , we get

$$c^2\left(2x + 2y \frac{dy}{dx}\right) = 2xy^2 + 2x^2y \frac{dy}{dx}$$

$$\Rightarrow \frac{dy}{dx}(2yc^2 - 2x^2y) = 2xy^2 - 2xc^2$$

$$\therefore \frac{dy}{dx} = \frac{x(y^2 - c^2)}{y(c^2 - x^2)}$$

$$\begin{aligned} \therefore \text{Slope } m = \left(\frac{dy}{dx}\right)_P &= \frac{\frac{c}{\cos \theta} \left(\frac{c^2}{\sin^2 \theta} - c^2\right)}{\frac{c}{\sin \theta} \left(c^2 - \frac{c^2}{\cos^2 \theta}\right)} \\ &= \frac{c^2 \tan \theta (1 - \sin^2 \theta)}{c^2 \tan^2 \theta (\cos^2 \theta - 1)} \\ &= \frac{1}{-\tan \theta} \times \frac{\cos^2 \theta}{\sin^2 \theta} \\ &= \frac{-\cos^3 \theta}{\sin^3 \theta} \end{aligned}$$

From (A)

Equation of tangent is

$$\left(y - \frac{c}{\sin \theta}\right) = \frac{-\cos^3 \theta}{\sin^3 \theta} \left(x - \frac{c}{\cos \theta}\right)$$

$$\Rightarrow x \cos^3 \theta + y \sin^3 \theta = c \sin^2 \theta + c \cos^2 \theta$$

$$\Rightarrow x \cos^3 \theta + y \sin^3 \theta = c$$

From (B)

Equation of normal is

$$\left(y - \frac{c}{\sin \theta}\right) = \frac{\sin^3 \theta}{\cos^3 \theta} \left(x - \frac{c}{\cos \theta}\right)$$

$$\Rightarrow x \sin^3 \theta - y \cos^3 \theta = \frac{c \sin^3 \theta}{\cos \theta} - \frac{c \cos^3 \theta}{\sin \theta}$$

$$\begin{aligned} \Rightarrow x \sin^3 \theta - y \cos^3 \theta &= \frac{c(\sin^4 \theta - \cos^4 \theta)}{\cos \theta \times \sin \theta} \\ &= \frac{c(\sin^2 \theta - \cos^2 \theta)(\sin^2 \theta + \cos^2 \theta)}{\frac{1}{2} \sin 2\theta} \\ &= \frac{-2c \cos 2\theta}{\sin 2\theta} = -2c \cot 2\theta \end{aligned}$$

$$\therefore x \sin^3 \theta - y \cos^3 \theta + 2c \cot 2\theta = 0$$

Tangents and Normals Ex 16.2 Q3(xi)

MillionStars edu
Think, Learn & Practice



We know that the equation of tangent and the normal to any curve is given by

$$y - y_1 = m(x - x_1) \quad \text{(A) Tangent}$$

$$y - y_1 = \frac{-1}{m}(x - x_1) \quad \text{(B) Normal}$$

Where m is the slope

We have,

$$xy = c^2 \quad P = \left(ct, \frac{c}{t} \right)$$

Differentiating with respect to x , we get

$$y + x \frac{dy}{dx} = 0$$

$$\Rightarrow \frac{dy}{dx} = -\frac{y}{x}$$

$$\therefore \text{Slope } m = \left(\frac{dy}{dx} \right)_P = \frac{-c}{ct} = \frac{-1}{t^2}$$

From (A)

Equation of tangent is

$$\left(y - \frac{c}{t} \right) = \frac{-1}{t^2} (x - ct)$$

$$\Rightarrow x + t^2 y = tc + ct$$

$$\Rightarrow x + t^2 y = 2ct$$

From (B)

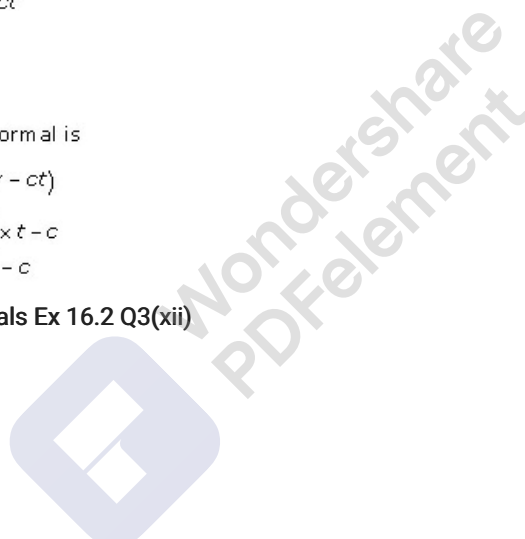
Equation of normal is

$$\left(y - \frac{c}{t} \right) = t^2 (x - ct)$$

$$\Rightarrow xt^3 - ty = ct^3 \times t - c$$

$$\Rightarrow xt^3 - ty = ct^4 - c$$

Tangents and Normals Ex 16.2 Q3(xii)



MillionStars edu
Think, Learn & Practice



We know that the equation of tangent and the normal to any curve is given by

$$y - y_1 = m(x - x_1) \quad \text{(A) Tangent}$$

$$y - y_1 = \frac{-1}{m}(x - x_1) \quad \text{(B) Normal}$$

Where m is the slope

$$\frac{x^2}{a^2} + \frac{y^2}{b^2} = 1 \quad \text{---(i)} \quad P = (x_1, y_1)$$

Differentiating with respect to x , we get

$$\frac{2x}{a^2} + \frac{2y}{b^2} \frac{dy}{dx} = 0$$

$$\Rightarrow \frac{dy}{dx} = -\frac{xb^2}{ya^2}$$

$$\therefore \text{Slope } m = \left(\frac{dy}{dx}\right)_P = -\frac{x_1b^2}{y_1a^2}$$

From (A)

Equation of tangent is

$$(y - y_1) = -\frac{x_1b^2}{y_1a^2}(x - x_1)$$

$$\Rightarrow xx_1b^2 + yy_1a^2 = x_1^2b^2 + y_1^2a^2$$

Divide by a^2b^2 both side

$$\Rightarrow \frac{xx_1}{a^2} + \frac{yy_1}{b^2} = \frac{x_1^2}{a^2} + \frac{y_1^2}{b^2}$$
$$= 1$$

[$\because (x_1, y_1)$ lies on (i)]

$$\therefore \frac{xx_1}{a^2} + \frac{yy_1}{b^2} = 1$$

From (B)

Equation of normal is

$$(y - y_1) = \frac{y_1a^2}{x_1b^2}(x - x_1)$$

$$xy_1a^2 - yx_1b^2 = x_1y_1a^2 - y_1x_1b^2$$

Dividing by x_1y_1 both side

$$\frac{xa^2}{x_1} - \frac{yb^2}{y_1} = a^2 - b^2$$

Tangents and Normals Ex 16.2 Q3(xiii)

Differentiating $\frac{x^2}{a^2} - \frac{y^2}{b^2} = 1$ with respect to x , we have:

$$\frac{2x}{a^2} - \frac{2y}{b^2} \frac{dy}{dx} = 0$$

$$\Rightarrow \frac{2y}{b^2} \frac{dy}{dx} = \frac{2x}{a^2}$$

$$\Rightarrow \frac{dy}{dx} = \frac{b^2x}{a^2y}$$

Therefore, the slope of the tangent at (x_0, y_0) is $\left[\frac{dy}{dx}\right]_{(x_0, y_0)} = \frac{b^2x_0}{a^2y_0}$.

Then, the equation of the tangent at (x_0, y_0) is given by,

$$y - y_0 = \frac{b^2x_0}{a^2y_0}(x - x_0)$$

$$\Rightarrow a^2yy_0 - a^2y_0^2 = b^2xx_0 - b^2x_0^2$$

$$\Rightarrow b^2xx_0 - a^2yy_0 - b^2x_0^2 + a^2y_0^2 = 0$$

Tangents and Normals Ex 16.2 Q3(xiv)

MillionStars edu
Think, Learn & Practice



Differentiating $x^{\frac{2}{3}} + y^{\frac{2}{3}} = 2$ with respect to x , we get

$$\frac{2}{3}x^{-\frac{1}{3}} + \frac{2}{3}y^{-\frac{1}{3}} \frac{dy}{dx} = 0$$

$$\Rightarrow \frac{dy}{dx} = -\left(\frac{y}{x}\right)^{\frac{1}{3}}$$

Therefore, the slope of the tangent at $(1,1)$ is $\left.\frac{dy}{dx}\right|_{(1,1)} = -1$

So, the equation of the tangent at $(1,1)$ is

$$y - 1 = -1(x - 1)$$

$$\Rightarrow y + x - 2 = 0$$

Also, the slope of the normal at $(1,1)$ is given by $\frac{-1}{\text{slope of tangent at } (1,1)} = 1$

\therefore the equation of the normal at $(1,1)$ is

$$y - 1 = 1(x - 1)$$

$$\Rightarrow y - x = 0$$

Tangents and Normals Ex 16.2 Q3(xv)

We know that the equation of tangent and the normal to any curve is given by

$$y - y_1 = m(x - x_1) \quad \text{(A) Tangent}$$

$$y - y_1 = \frac{-1}{m}(x - x_1) \quad \text{(B) Normal}$$

Where m is the slope

We have,

$$x^2 = 4y \quad P = (2, 1)$$

$$\therefore 2x = \frac{4dy}{dx}$$

$$\Rightarrow \frac{dy}{dx} = \frac{x}{2}$$

$$\therefore \text{Slope } m = \left(\frac{dy}{dx}\right)_P = 1$$

From (A)

Equation of tangent is

$$y - 1 = 1(x - 2)$$

$$\Rightarrow x - y = 1$$

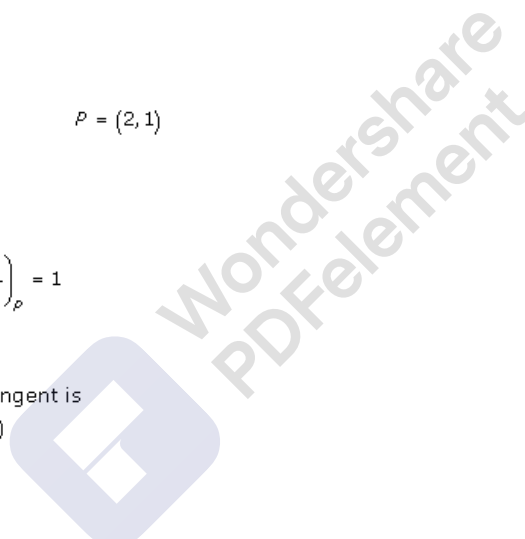
From (B)

Equation of normal is

$$(y - 1) = -1(x - 2)$$

$$\Rightarrow x + y = 3$$

Tangents and Normals Ex 16.2 Q3(vi)





The equation of the given curve is $y^2 = 4x$.

Differentiating with respect to x , we have:

$$2y \frac{dy}{dx} = 4$$

$$\Rightarrow \frac{dy}{dx} = \frac{4}{2y} = \frac{2}{y}$$

$$\therefore \left. \frac{dy}{dx} \right|_{(1,2)} = \frac{2}{2} = 1$$

Now, the slope at point $(1, 2)$ is $\left. \frac{dy}{dx} \right|_{(1,2)} = \frac{-1}{1} = -1$.

∴ Equation of the tangent at $(1, 2)$ is $y - 2 = -1(x - 1)$.

$$\Rightarrow y - 2 = -x + 1$$

$$\Rightarrow x + y - 3 = 0$$

Equation of the normal is,

$$y - 2 = -(-1)(x - 1)$$

$$y - 2 = x - 1$$

$$x - y + 1 = 0$$

Tangents and Normals Ex 16.2 Q3(xix)

Let $\frac{x^2}{a^2} - \frac{y^2}{b^2} = 1$ be the equation of the curve.

Rewriting the above equation as,

$$\frac{y^2}{b^2} = \frac{x^2}{a^2} - 1$$

$$\Rightarrow y^2 = \frac{b^2}{a^2} x^2 - b^2$$

$$2y \frac{dy}{dx} = \frac{b^2}{a^2} 2x$$

$$\Rightarrow \frac{dy}{dx} = \frac{b^2 x}{a^2 y}$$

Differentiating the above function w.r.t. x , we get,

$$\Rightarrow \left[\frac{dy}{dx} \right]_{(\sqrt{2}a, b)} = \frac{b^2 \sqrt{2}a}{a^2 b} = \frac{\sqrt{2}b}{a}$$

Slope of the tangent $m = \frac{\sqrt{2}b}{a}$

Equation of the tangent is

$$(y - y_1) = m(x - x_1)$$

$$\Rightarrow (y - b) = \frac{\sqrt{2}b}{a}(x - \sqrt{2}a)$$

$$\Rightarrow a(y - b) = \sqrt{2}b(x - \sqrt{2}a)$$

$$\Rightarrow \sqrt{2}bx - ay + ab - 2ab = 0$$

$$\Rightarrow \sqrt{2}bx - ay - ab = 0$$

Slope of the normal is $-\frac{1}{\frac{\sqrt{2}b}{a}} = -\frac{a}{b\sqrt{2}}$

Equation of the normal is

$$(y - y_1) = m(x - x_1)$$

$$\Rightarrow (y - b) = \frac{-a}{\sqrt{2}b}(x - \sqrt{2}a)$$

$$\Rightarrow \sqrt{2}b(y - b) = -a(x - \sqrt{2}a)$$

$$\Rightarrow ax + \sqrt{2}by - \sqrt{2}b^2 - \sqrt{2}a^2 = 0$$

$$\Rightarrow ax + \sqrt{2}by - \sqrt{2}(a^2 + b^2) = 0$$

Tangents and Normals Ex 16.2 Q4

MillionStars edu
Think, Learn & Practice



The given equations are,

$$x = \theta + \sin \theta, \quad y = 1 + \cos \theta$$

$$\frac{dx}{d\theta} = 1 + \cos \theta, \quad \frac{dy}{d\theta} = -\sin \theta$$

$$\therefore \frac{dx}{dx} = \frac{\frac{dy}{d\theta}}{\frac{dx}{d\theta}} = \frac{-\sin \theta}{1 + \cos \theta}$$

Slope,

$$m = \left(\frac{dy}{dx} \right)_{\theta = \frac{\pi}{4}} = \frac{-\frac{1}{\sqrt{2}}}{1 + \frac{1}{\sqrt{2}}} = -1 + \frac{1}{\sqrt{2}}$$

Thus, equation of tangent is,

$$y - y_1 = m(x - x_1)$$

$$y - \left(1 + \frac{1}{\sqrt{2}}\right) = \left(-1 + \frac{1}{\sqrt{2}}\right) \left(x - \left(\frac{\pi}{4} + \frac{1}{\sqrt{2}}\right)\right)$$

$$y - 1 - \frac{1}{\sqrt{2}} = \left(-1 + \frac{1}{\sqrt{2}}\right) \left(x - \frac{\pi}{4} - \frac{1}{\sqrt{2}}\right)$$

Tangents and Normals Ex 16.2 Q5(i)

We know that the equation of tangent and normal to any curve at the point (x_1, y_1) is

$$y - y_1 = m(x - x_1) \quad \text{---(A) Tangent}$$

$$y - y_1 = \frac{-1}{m}(x - x_1) \quad \text{---(B) Normal}$$

Where m is slope.

$$x = \theta + \sin \theta, \quad y = 1 + \cos \theta, \quad \theta = \frac{\pi}{2}$$

$$\therefore P = \left[\left(\frac{\pi}{2} + 1 \right), 1 \right]$$

$$\text{and } \frac{dx}{d\theta} = 1 + \cos \theta, \quad \frac{dy}{d\theta} = -\sin \theta$$

$$\therefore \text{Slope } m = \left(\frac{dy}{dx} \right)_P = \left(\frac{\frac{dy}{d\theta}}{\frac{dx}{d\theta}} \right) = \frac{-1}{+1} = -1$$

Equation of tangent from (A)

$$(y - 1) = -1 \left(x - \left(\frac{\pi}{2} + 1 \right) \right)$$

$$\Rightarrow x + y = \frac{\pi}{2} + 1 + 1$$

$$\Rightarrow 2(x + y) = \pi + 4$$

From (B)

Equation of normal is

$$(y - 1) = 1 \left(x - \left(\frac{\pi}{2} + 1 \right) \right)$$

$$\Rightarrow 2(x - y) = \pi$$

Tangents and Normals Ex 16.2 Q5(ii)

MillionStars edu
Think, Learn & Practice



We know that the equation of tangent and normal to any curve at the point (x_1, y_1) is

$$y - y_1 = m(x - x_1) \quad \text{---(A) Tangent}$$

$$y - y_1 = -\frac{1}{m}(x - x_1) \quad \text{---(B) Normal}$$

Where m is slope.

$$x = \frac{2at^2}{1+t^2}, \quad y = \frac{2at^3}{1+t^2}, \quad t = \frac{1}{2}$$

$$\therefore P = \left(x = \frac{a}{2 + \frac{1}{2}} = \frac{2a}{5}, y = \frac{a}{4 + 1} = \frac{a}{5} \right)$$

Now,

$$\frac{dx}{dt} = \frac{4a + (1+t^2) - 2at^2(2t)}{(1+t^2)^2} \\ = \frac{4at}{(1+t^2)^2}$$

$$\frac{dy}{dt} = \frac{6at^2(1+t^2) - (2at^3)(2t)}{(1+t^2)^2} \\ = \frac{6at^2 - 2at^4}{(1+t^2)^2}$$

$$\therefore \frac{dy}{dx} = \frac{\frac{dy}{dt}}{\frac{dx}{dt}} = \frac{6at^2 + 2at^4}{4at}$$

$$\therefore \text{Slope } m = \left(\frac{dy}{dx} \right)_P = \frac{\frac{3a}{2} + \frac{a}{8}}{2a} = \frac{13}{16}$$

From (A)

Equation of tangent is,

$$\left(y - \frac{a}{5} \right) = \frac{13}{16} \left(x - \frac{2a}{5} \right)$$

$$16y - \frac{16a}{5} = 13x - \frac{26a}{5}$$

$$13x - 16y - 2a = 0$$

Equation of normal is,

$$\left(y - \frac{a}{5} \right) = -\frac{16}{13} \left(x - \frac{2a}{5} \right)$$

$$13y - \frac{13a}{5} = -16x + \frac{32a}{5}$$

$$16x + 13y - 9a = 0$$

Tangents and Normals Ex 16.2 Q5(iii)



We know that the equation of tangent and normal to any curve at the point (x_1, y_1) is

$y - y_1 = m(x - x_1)$ ---(A) Tangent

$y - y_1 = \frac{-1}{m}(x - x_1)$ ---(B) Normal

Where m is slope.

$x = at^2, \quad y = 2at, \quad t = 1$

$\therefore P = (a, 2a)$

and

$\frac{dx}{dt} = 2at, \quad \frac{dy}{dt} = 2a$

$\therefore \text{Slope } m = \left(\frac{dy}{dx}\right)_p = \frac{\frac{dy}{dt}}{\frac{dx}{dt}} = \frac{2a}{2a} = 1$

From (A)

Equation of tangent is

$(y - 2a) = 1(x - a)$

$\Rightarrow x - y + a = 0$

From (B)

Equation of normal is

$(y - 2a) = -1(x - a)$

$\Rightarrow x + y = 3a$

Tangents and Normals Ex 16.2 Q5(iv)

We know that the equation of tangent and normal to any curve at the point (x_1, y_1) is

$y - y_1 = m(x - x_1)$ ---(A) Tangent

$y - y_1 = \frac{-1}{m}(x - x_1)$ ---(B) Normal

Where m is slope.

$x = a \sec t, \quad y = b \tan t, \quad t = t$

$\therefore \frac{dx}{dt} = a \sec t \times \tan t$

and

$\frac{dy}{dt} = b \sec^2 t$

$\therefore \text{Slope } m = \frac{dy}{dx} = \frac{b \sec^2 t}{a \sec t \times \tan t} = \frac{b}{a} \operatorname{cosec} t$

From (A)

Equation of tangent

$(y - b \tan t) = \frac{b}{a} \operatorname{cosec} t (x - a \sec t)$

$\Rightarrow bx \operatorname{cosec} t - ay = ab \operatorname{cosec} t \times \sec t - ab \tan t$
 $= \frac{ab [1 - \sin^2 t]}{\sin t \times \cos t}$
 $= \frac{ab \cos t}{\sin t}$

$\Rightarrow bx \sec t - ay \tan t = ab$

From (B)

Equation of normal is

$(y - b \tan t) = \frac{-a \sin t}{b} (x - a \sec t)$

$\Rightarrow ax \sin t + by = a^2 \tan t + b^2 \tan t$

$\Rightarrow ax \cos t + by \cot t = a^2 + b^2$

Tangents and Normals Ex 16.2 Q5(v)

MillionStars edu
Think, Learn & Practice



We know that the equation of tangent and normal to any curve at the point (x_1, y_1) is

$$y - y_1 = m(x - x_1) \quad \text{---(A) Tangent}$$

$$y - y_1 = \frac{-1}{m}(x - x_1) \quad \text{---(B) Normal}$$

Where m is slope.

$$x = a(\theta + \sin\theta), y = a(1 - \cos\theta)$$

$$\frac{dx}{d\theta} = a(1 + \cos\theta), \frac{dy}{d\theta} = a \sin\theta$$

$$\begin{aligned} \therefore \text{Slope } m &= \frac{dy}{dx} = \frac{\sin\theta}{1 + \cos\theta} = \frac{\frac{2 \sin\theta}{2} \times \frac{\cos\theta}{2}}{\frac{2 \cos^2\theta}{2}} \\ &= \frac{\tan\theta}{2} \end{aligned}$$

Now,

From (A)

Equation of tangent

$$y - a(1 - \cos\theta) = \frac{\tan\theta}{2}(x - a(\theta + \sin\theta))$$

$$\Rightarrow \frac{x \tan\theta}{2} - y = a(\theta + \sin\theta) \frac{\tan\theta}{2} - a(1 - \cos\theta)$$

From (B)

Equation of normal is

$$y - a(1 - \cos\theta) = \frac{-\cot\theta}{2}(x - a(\theta + \sin\theta))$$

$$\Rightarrow (y - 2a) \frac{\tan\theta}{2} + x - a\theta = 0$$

Tangents and Normals Ex 16.2 Q5(vi)

$$x = 3\cos\theta - \cos^3\theta, y = 3\sin\theta - \sin^3\theta$$

$$\Rightarrow \frac{dx}{d\theta} = -3\sin\theta + 3\cos^2\theta\sin\theta \text{ and } \frac{dy}{d\theta} = 3\cos\theta - 3\sin^2\theta\cos\theta$$

$$\Rightarrow \frac{dy}{dx} = \frac{dy/d\theta}{dx/d\theta} = \frac{3\cos\theta - 3\sin^2\theta\cos\theta}{-3\sin\theta + 3\cos^2\theta\sin\theta} = \frac{\cos\theta(1 - \sin^2\theta)}{-\sin\theta(1 - \cos^2\theta)} = \frac{\cos^3\theta}{-\sin^3\theta} = -\tan^3\theta$$

So equation of the tangent at θ is

$$y - 3\sin\theta + \sin^3\theta = -\tan^3\theta(x - 3\cos\theta + \cos^3\theta)$$

$$\Rightarrow 4(y \cos^3\theta - x \sin^3\theta) = 3\sin 4\theta$$

So equation of normal at θ is

$$y - 3\sin\theta + \sin^3\theta = \frac{1}{\tan^3\theta}(x - 3\cos\theta + \cos^3\theta)$$

$$\Rightarrow y \cos^3\theta - x \sin^3\theta = 3\sin^4\theta - \sin^6\theta - 3\cos^4\theta + \cos^6\theta$$

$$\Rightarrow y \sin^3\theta - x \cos^3\theta = 3\sin^4\theta - \sin^6\theta - 3\cos^4\theta + \cos^6\theta$$

Tangents and Normals Ex 16.2 Q6

MillionStars edu
Think, Learn & Practice



The given equation of curve is

$$x^2 + 2y^2 - 4x - 6y + 8 = 0 \quad \text{---(i) at } x = 2$$

Differentiating with respect to x , we get

$$2x + 4y \frac{dy}{dx} - 4 - 6 \frac{dy}{dx} = 0$$

$$\Rightarrow \frac{dy}{dx} [4y - 6] = 4 - 2x$$

$$\therefore \frac{dy}{dx} = \frac{2 - x}{2y - 3}$$

Now,

From (i) at $x = 2$

$$4 + 2y^2 - 8 - 6y + 8 = 0$$

$$\Rightarrow 2y^2 - 6y + 4 = 0$$

$$\Rightarrow y^2 - 3y + 2 = 0$$

$$\Rightarrow (y - 2)(y - 1) = 0$$

$$\Rightarrow y = 2, 1$$

Thus,

$$\text{Slope } m_1 = \left(\frac{dy}{dx} \right)_{(2,2)} = 0$$

$$m_2 = \left(\frac{dy}{dx} \right)_{(2,1)} = 0$$

Thus, the equation of normal is

$$(y - y_1) = \frac{-1}{0}(x - 2)$$

$$\Rightarrow x = 2$$

Tangents and Normals Ex 16.2 Q7

The equation of the given curve is $ay^2 = x^3$.

On differentiating with respect to x , we have:

$$2ay \frac{dy}{dx} = 3x^2$$

$$\Rightarrow \frac{dy}{dx} = \frac{3x^2}{2ay}$$

The slope of a tangent to the curve at (x_0, y_0) is $\left. \frac{dy}{dx} \right|_{(x_0, y_0)}$.

\Rightarrow The slope of the tangent to the given curve at (am^2, am^3) is

$$\left. \frac{dy}{dx} \right|_{(am^2, am^3)} = \frac{3(am^2)^2}{2a(am^3)} = \frac{3a^2m^4}{2a^2m^3} = \frac{3m}{2}$$

\therefore Slope of normal at (am^2, am^3)

$$= \frac{-1}{\text{slope of the tangent at } (am^2, am^3)} = \frac{-2}{3m}$$

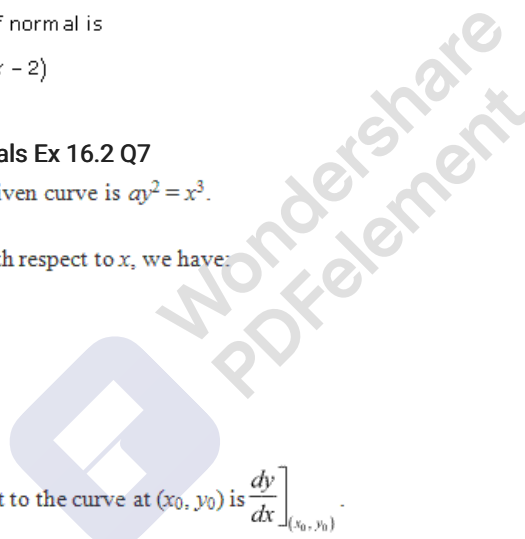
Hence, the equation of the normal at (am^2, am^3) is given by,

$$y - am^3 = \frac{-2}{3m}(x - am^2)$$

$$\Rightarrow 3my - 3am^4 = -2x + 2am^2$$

$$\Rightarrow 2x + 3my - am^2(2 + 3m^2) = 0$$

Tangents and Normals Ex 16.2 Q8





The given equations are

$$y^2 = ax^3 + b \quad \text{---(i)}$$

$$y = 4x - 5 \quad \text{---(ii)} \quad P = (2, 3)$$

Differentiating (i) with respect to x , we get

$$2y \frac{dy}{dx} = 3ax^2$$

$$\therefore \frac{dy}{dx} = \frac{3ax^2}{2y}$$

$$\therefore m_1 = \left(\frac{dy}{dx}\right)_P = \frac{12a}{6} = 2a$$

$$m_2 = \text{slope of (ii)} = 4$$

According to the question

$$m_1 = m_2 \Rightarrow 2a = 4 \Rightarrow a = 2$$

From (i)

$$y^2 = 2 \times 2^3 + b$$

$$\Rightarrow 9 = 16 + b$$

$$\Rightarrow b = -7$$

Thus,

$$a = 2, b = -7$$

Tangents and Normals Ex 16.2 Q9

The given equations are,

$$y = x^2 + 4x - 16 \quad \text{---(i)}$$

$$3x - y + 1 = 0 \quad \text{---(ii)}$$

Slope m_1 of (i)

$$m_1 = \frac{dy}{dx} = 2x + 4$$

Slope m_2 of (ii)

$$m_2 = 3$$

As per question

$$m_1 = m_2$$

$$\Rightarrow 2x + 4 = 3$$

$$\Rightarrow x = \frac{-1}{2}$$

From (i)

$$y = \frac{1}{4} - 2 - 16 = -\frac{71}{4}$$

$$\therefore P = \left(\frac{-1}{2}, -\frac{71}{4}\right)$$

Thus, the equation of tangent


$$\left(y + \frac{71}{4}\right) = 3\left(x + \frac{1}{2}\right)$$

$$\Rightarrow 3x - y = \frac{71}{4} - \frac{3}{2}$$

$$\Rightarrow 3x - y = \frac{65}{4}$$

$$\Rightarrow 12x - 4y - 65 = 0$$

Tangents and Normals Ex 16.2 Q10





The given equation is

$$y = x^3 + 2x + 6 \quad \text{---(i)}$$

$$x + 14y + 4 = 0 \quad \text{---(ii)}$$

Slope m_1 of (i)

$$m_1 = \frac{dy}{dx} = 3x^2 + 2$$

Slope m_2 of (ii)

$$m_2 = \frac{-1}{14}$$

∴ Slope of normal to (i) is

$$\frac{-1}{m_1} = \frac{-1}{3x^2 + 2}$$

According to the question

$$\frac{-1}{3x^2 + 2} = \frac{-1}{14}$$

$$\Rightarrow 3x^2 \cdot 2 = 14$$

$$\Rightarrow x^2 = 4$$

$$\Rightarrow x = \pm 2$$

From (i)

$$y = 8 + 4 + 6 \quad \text{or} \quad -8 - 4 + 6$$
$$= 18 \quad \text{or} \quad -6$$

so, $P = (2, 18)$ and $Q = (-2, -6)$

Thus, the equation of normal is

$$(y - 18) = \frac{-1}{14}(x - 2) \Rightarrow x + 14y + 86 = 0$$

$$\text{or} \quad (y + 6) = \frac{-1}{14}(x + 2) \Rightarrow x + 14y - 254 = 0$$

Tangents and Normals Ex 16.2 Q11

The given equations are,

$$y = 4x^3 - 3x + 5 \quad \text{---(i)}$$

$$9y + x + 3 = 0 \quad \text{---(ii)}$$

Slope m_1 of (i)

$$m_1 = \frac{dy}{dx} = 12x^2 - 3$$

Slope m_2 of (ii)

$$m_2 = \frac{-1}{9}$$

According to the question

$$m_1 \times m_2 = -1$$

$$\Rightarrow (12x^2 - 3)\left(-\frac{1}{9}\right) = -1$$

$$\Rightarrow 4x^2 - 1 = 3$$

$$\Rightarrow x^2 = 1$$

$$\Rightarrow x = \pm 1$$

From (i)

$$y = 4 - 3 + 5 \quad \text{or} \quad -4 + 3 + 5$$
$$= 6 \quad \text{or} \quad 4$$

∴ $P = (1, 6)$ or $Q = (-1, 4)$

Thus, the equation of tangent is

$$(y - 6) = 9(x - 1) \Rightarrow 9x - y - 3 = 0$$

$$(y - 4) = 9(x + 1) \Rightarrow 9x - y + 13 = 0$$

Tangents and Normals Ex 16.2 Q12

MillionStars edu
Think, Learn & Practice



The given equations are,

$$y = x \log_e x \quad \text{--- (i)}$$

$$2x - 2y + 3 = 0 \quad \text{--- (ii)}$$

Slope m_1 of (i)

$$m_1 = \frac{dy}{dx} = \log_e x + 1$$

slope m_2 of (ii)

$$m_2 = 1$$

Tangents and Normals Ex 16.2 Q13

The equation of the given curve is $y = x^2 - 2x + 7$.

On differentiating with respect to x , we get:

$$\frac{dy}{dx} = 2x - 2$$

(a) The equation of the line is $2x - y + 9 = 0$.

$$2x - y + 9 = 0 \Rightarrow y = 2x + 9$$

This is of the form $y = mx + c$.

∴ Slope of the line = 2

If a tangent is parallel to the line $2x - y + 9 = 0$, then the slope of the tangent is equal to the slope of the line.


Therefore, we have:

$$2 = 2x - 2$$

$$\Rightarrow 2x = 4$$

$$\Rightarrow x = 2$$

Now, $x = 2$



MillionStars edu
Think, Learn & Practice



$$\Rightarrow y = 4 - 4 + 7 = 7$$

Thus, the equation of the tangent passing through (2, 7) is given by,

$$y - 7 = 2(x - 2)$$

$$\Rightarrow y - 2x - 3 = 0$$

Hence, the equation of the tangent line to the given curve (which is parallel to line $2x - y + 9 = 0$) is $y - 2x - 3 = 0$.

(b) The equation of the line is $5y - 15x = 13$.

$$5y - 15x = 13 \Rightarrow y = 3x + \frac{13}{5}$$

This is of the form $y = mx + c$.

\therefore Slope of the line = 3

If a tangent is perpendicular to the line $5y - 15x = 13$, then the slope of the tangent is $\frac{-1}{\text{slope of the line}} = \frac{-1}{3}$.

$$\Rightarrow 2x - 2 = \frac{-1}{3}$$

$$\Rightarrow 2x = \frac{-1}{3} + 2$$

$$\Rightarrow 2x = \frac{5}{3}$$

$$\Rightarrow x = \frac{5}{6}$$

$$\text{Now, } x = \frac{5}{6}$$

$$\Rightarrow y = \frac{25}{36} - \frac{10}{6} + 7 = \frac{25 - 60 + 252}{36} = \frac{217}{36}$$

Thus, the equation of the tangent passing through $\left(\frac{5}{6}, \frac{217}{36}\right)$ is given by,

$$y - \frac{217}{36} = -\frac{1}{3}\left(x - \frac{5}{6}\right)$$

$$\Rightarrow \frac{36y - 217}{36} = \frac{-1}{18}(6x - 5)$$

$$\Rightarrow 36y - 217 = -2(6x - 5)$$

$$\Rightarrow 36y - 217 = -12x + 10$$

$$\Rightarrow 36y + 12x - 227 = 0$$

Hence, the equation of the tangent line to the given curve (which is perpendicular to line $5y - 15x = 13$) is $36y + 12x - 227 = 0$.

Tangents and Normals Ex 16.2 Q14

MillionStars edu
Think, Learn & Practice



The equation of the given curve is $y = \frac{1}{x-3}$, $x \neq 3$.

The slope of the tangent to the given curve at any point (x, y) is given by,

$$\frac{dy}{dx} = \frac{-1}{(x-3)^2}$$

If the slope of the tangent is 2, then we have:

$$\frac{-1}{(x-3)^2} = 2$$

$$\Rightarrow 2(x-3)^2 = -1$$

$$\Rightarrow (x-3)^2 = \frac{-1}{2}$$

This is not possible since the L.H.S. is positive while the R.H.S. is negative.

Hence, there is no tangent to the given curve having slope 2.

Tangents and Normals Ex 16.2 Q15

The slope of the tangent to the given curve at any point (x, y) is given by,

$$\frac{dy}{dx} = \frac{-(2x-2)}{(x^2-2x+3)^2} = \frac{-2(x-1)}{(x^2-2x+3)^2}$$

If the slope of the tangent is 0, then we have:

$$\frac{-2(x-1)}{(x^2-2x+3)^2} = 0$$

$$\Rightarrow -2(x-1) = 0$$

$$\Rightarrow x = 1$$

$$\text{When } x = 1, y = \frac{1}{1-2+3} = \frac{1}{2}.$$

∴ The equation of the tangent through $\left(1, \frac{1}{2}\right)$ is given by,

$$y - \frac{1}{2} = 0(x-1)$$

$$\Rightarrow y - \frac{1}{2} = 0$$

$$\Rightarrow y = \frac{1}{2}$$

Hence, the equation of the required line is $y = \frac{1}{2}$.

Tangents and Normals Ex 16.2 Q16

MillionStars edu
Think, Learn & Practice



The equation of the given curve is $y = \sqrt{3x-2}$.

The slope of the tangent to the given curve at any point (x, y) is given by,

$$\frac{dy}{dx} = \frac{3}{2\sqrt{3x-2}}$$

The equation of the given line is $4x - 2y + 5 = 0$.

$$4x - 2y + 5 = 0 \Rightarrow y = 2x + \frac{5}{2} \text{ (which is of the form } y = mx + c)$$

\therefore Slope of the line = 2

Now, the tangent to the given curve is parallel to the line $4x - 2y - 5 = 0$ if the slope of the tangent is equal to the slope of the line.

$$\frac{3}{2\sqrt{3x-2}} = 2$$

$$\Rightarrow \sqrt{3x-2} = \frac{3}{4}$$

$$\Rightarrow 3x-2 = \frac{9}{16}$$

$$\Rightarrow 3x = \frac{9}{16} + 2 = \frac{41}{16}$$

$$\Rightarrow x = \frac{41}{48}$$

$$\text{When } x = \frac{41}{48}, y = \sqrt{3\left(\frac{41}{48}\right) - 2} = \sqrt{\frac{41}{16} - 2} = \sqrt{\frac{41-32}{16}} = \sqrt{\frac{9}{16}} = \frac{3}{4}$$

\therefore Equation of the tangent passing through the point $\left(\frac{41}{48}, \frac{3}{4}\right)$ is given by,

$$y - \frac{3}{4} = 2\left(x - \frac{41}{48}\right)$$

$$\Rightarrow \frac{4y-3}{4} = 2\left(\frac{48x-41}{48}\right)$$

$$\Rightarrow 4y-3 = \frac{48x-41}{6}$$

$$\Rightarrow 24y-18 = 48x-41$$

$$\Rightarrow 48x-24y = 23$$

Hence, the equation of the required tangent is $48x - 24y = 23$

Tangents and Normals Ex 16.2 Q17



The given equations are,

$$x^2 + 3y - 3 = 0 \quad \text{--- (i)}$$

$$y = 4x - 5 \quad \text{--- (ii)}$$

Slope m_1 of (i)

$$m_1 = \frac{dy}{dx} = -\frac{2x}{3}$$

Slope m_2 of (ii)

$$m_2 = 4$$

According to the question

$$m_1 = m_2$$

$$\Rightarrow -\frac{2x}{3} = 4$$

$$\Rightarrow x = -6$$

From (i)

$$36 + 3y - 3 = 0$$

$$\Rightarrow 3y = -33$$

$$\therefore y = -11$$

$$\text{So, } P = (-6, -11)$$

Thus, the equation of tangent is

$$(y + 11) = 4(x + 6)$$

$$\Rightarrow 4x - y + 13 = 0$$

Tangents and Normals Ex 16.2 Q18

The equations are

$$\left(\frac{x}{a}\right)^n + \left(\frac{y}{b}\right)^n = 2 \quad \text{--- (i)}$$

$$\frac{x}{a} + \frac{y}{b} = 2 \quad \text{--- (ii)}$$

$$P = (a, b)$$

We need to prove (ii) is the tangent to (i)

Differentiating (i) with respect to x , we get

$$n\left(\frac{x}{a}\right)^{n-1} \times \frac{1}{a} + n\left(\frac{y}{b}\right)^{n-1} \times \frac{1}{b} \times \frac{dy}{dx} = 0$$

$$\Rightarrow \frac{x^{n-1}}{a^n} + \frac{y^{n-1}}{b^n} \times \frac{dy}{dx} = 0$$

$$\Rightarrow \frac{dy}{dx} = -\left(\frac{x}{y}\right)^{n-1} \times \left(\frac{b}{a}\right)^n$$

$$\therefore \text{Slope } m = \left(\frac{dy}{dx}\right)_P = -\left(\frac{a}{b}\right)^{n-1} \times \left(\frac{b}{a}\right)^n \\ = -\frac{b}{a}$$

Thus, the equation of tangent is

$$(y - b) = -\frac{b}{a}(x - a)$$

$$\Rightarrow bx + ay = ab + ab$$

$$\Rightarrow bx + ay = 2ab$$

$$\Rightarrow \frac{x}{a} + \frac{y}{b} = 2$$

Tangents and Normals Ex 16.2 Q19

MillionStars edu
Think, Learn & Practice



We have,

$$x = \sin 3t, \quad y = \cos 2t, \quad t = \frac{\pi}{4}$$

$$\therefore P = \left(x = \frac{1}{\sqrt{2}}, y = 0 \right)$$

Now,

$$\frac{dx}{dt} = 3 \cos 3t, \quad \frac{dy}{dt} = -2 \sin 2t$$

$$\begin{aligned} \therefore \text{Slope } m &= \frac{dy}{dx} = \frac{\frac{dy}{dt}}{\frac{dx}{dt}} = \frac{-2 \sin 2t}{3 \cos 3t} \\ &= \frac{-2}{-3 \times \frac{1}{\sqrt{2}}} \\ &= \frac{+2\sqrt{2}}{3} \end{aligned}$$

Thus, equation of tangent is

$$(y - 0) = \frac{+2\sqrt{2}}{3} \left(x - \frac{1}{\sqrt{2}} \right)$$

$$2\sqrt{2}x - 3y = 2$$



Ex 16.3



Tangents and Normals Ex 16.3 Q1(i)

We know that angle of intersection of two curves is given by

$$\tan \theta = \frac{|m_1 - m_2|}{1 + m_1 m_2} \quad \text{---(A)}$$

Where m_1 and m_2 are slopes of curves.

The given equations are

$$y^2 = x \quad \text{---(i)}$$

$$x^2 = y \quad \text{---(ii)}$$

$$m_1 = \frac{dy}{dx} = \frac{1}{2y}$$

$$m_2 = \frac{dy}{dx} = 2x$$

Solving (i) and (ii)

$$x^4 - x = 0 \quad \Rightarrow \quad x(x^3 - 1) = 0$$

and $y = 0, 1$

$$\therefore m_1 = \frac{1}{2}, \infty \quad \text{and} \quad m_2 = 0 \text{ or } 2$$

$$\therefore \tan \theta = \frac{|m_2 - m_1|}{1 + m_1 m_2} = \frac{3}{4}$$

$$\therefore \theta = \tan^{-1} \left(\frac{3}{4} \right)$$

$$\text{and} \quad \tan \theta = \frac{|m_2 - m_1|}{1 + m_1 m_2} = \infty$$

$$\theta = \frac{\pi}{2}$$

Tangents and Normals Ex 16.3 Q1(ii)

MillionStars edu
Think, Learn & Practice



We know that angle of intersection of two curves is given by

$$\tan \theta = \left| \frac{m_1 - m_2}{1 + m_1 m_2} \right| \quad \text{---(A)}$$

Where m_1 and m_2 are slopes of curves.

$$y = x^2 \quad \text{---(i)}$$

$$x^2 + y^2 = 20 \quad \text{---(ii)}$$

Solving (i) and (ii)

$$y + y^2 = 20$$

$$\Rightarrow y^2 + y - 20 = 0$$

$$\Rightarrow (y + 5)(y - 4) = 0$$

$$\Rightarrow y = -5, 4$$

$$\therefore x = \sqrt{-5}, \pm 2$$

$$\therefore \text{Points are } P = (2, 4), Q = (-2, 4)$$

Now,

Slope m_1 for (i)

$$m_1 = 2x = 4$$

Slope m_2 for (ii)

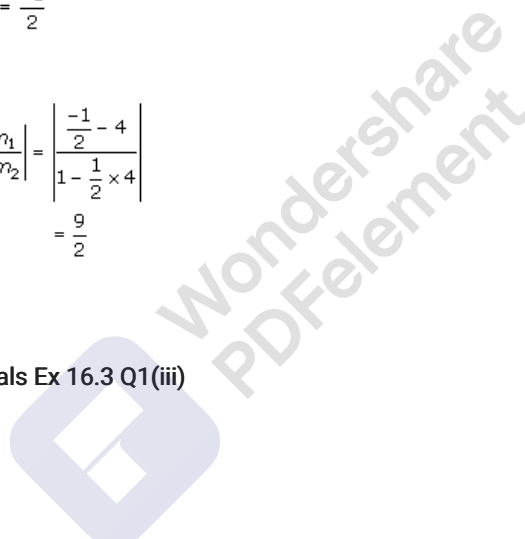
$$m_2 = \frac{dy}{dx} = \frac{-x}{y} = \frac{-1}{2}$$

Now,

$$\tan \theta = \left| \frac{m_2 - m_1}{1 + m_1 m_2} \right| = \left| \frac{\frac{-1}{2} - 4}{1 - \frac{1}{2} \times 4} \right|$$
$$= \frac{9}{2}$$

$$\therefore \theta = \tan^{-1} \frac{9}{2}$$

Tangents and Normals Ex 16.3 Q1(iii)



MillionStars edu
Think, Learn & Practice



We know that angle of intersection of two curves is given by

$$\tan \theta = \left| \frac{m_1 - m_2}{1 + m_1 m_2} \right| \quad \text{---(A)}$$

Where m_1 and m_2 are slopes of curves.

$$2y^2 = x^3 \quad \text{---(i)}$$

$$y^2 = 32x \quad \text{---(ii)}$$

Solving (i) and (ii)

$$x^3 = 64x$$

$$\Rightarrow x(x^2 - 64) = 0$$

$$\Rightarrow x(x + 8)(x - 8) = 0$$

$$\Rightarrow x = 0, -8, 8$$

$$\therefore y = 0, -16$$

$$\therefore P = (0, 0), Q = (8, 16)$$

Now,

$$m_1 = \frac{dy}{dx} = \frac{3x^2}{4y} = 0 \text{ or } 3$$

$$m_2 = \frac{dy}{dx} = \frac{32}{2y} = \infty \text{ or } 1$$

From (A)

$$\tan \theta = \left| \frac{\infty - 0}{10} \right| = \infty \Rightarrow \theta = \frac{\pi}{2}$$

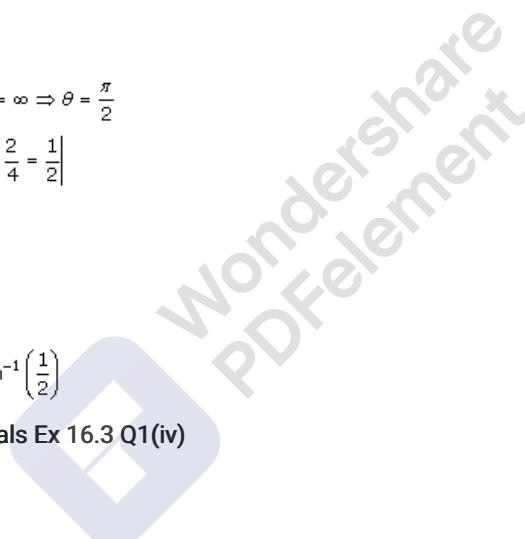
$$\text{and } \tan \theta = \left| \frac{3 - 1}{13} \right| = \frac{2}{13} = \frac{1}{6.5}$$

$$\therefore \theta = \tan^{-1}\left(\frac{1}{6.5}\right)$$

Thus,

$$\theta = \frac{\pi}{2} \text{ and } \tan^{-1}\left(\frac{1}{6.5}\right)$$

Tangents and Normals Ex 16.3 Q1(iv)



MillionStars edu
Think, Learn & Practice



We have,

$$x^2 + y^2 - 4x - 1 = 0 \quad \text{---(i)}$$

and $x^2 + y^2 - 2y - 9 = 0 \quad \text{---(ii)}$

Equation (i) can be written as

$$(x - 2)^2 + y^2 - 5 = 0 \quad \text{---(iii)}$$

Subtracting (ii) from (i), we get

$$-4x + 2y + 8 = 0$$

$$\Rightarrow y = 2x - 4$$

Substituting in (iii), we get

$$(x - 2)^2 + (2x - 4)^2 - 5 = 0$$

$$\Rightarrow (x - 2)^2 + 4(x - 2)^2 - 5 = 0$$

$$\Rightarrow (x - 2)^2 = 1$$

$$\Rightarrow x - 2 = 1, x - 2 = -1$$

$$\Rightarrow x = 3 \text{ or } x = 1$$

$$\therefore y = 2(3) - 4 = 2 \text{ or } y = -2$$

\therefore The points of intersection of the two curves are (3,2) and (-1,-2)

Differentiation (i) and (ii), w.r.t.x we get

$$2x + 2y \frac{dy}{dx} - 4 = 0 \quad \text{---(iv)}$$

and $2x + 2y \frac{dy}{dx} - 2 \frac{dy}{dx} = 0 \quad \text{---(v)}$

\therefore At (3,2), from equation (iv) we have,

$$\left(\frac{dy}{dx}\right)_{C_1} = \frac{4 - 2(3)}{2(2)} = \frac{-1}{2}$$

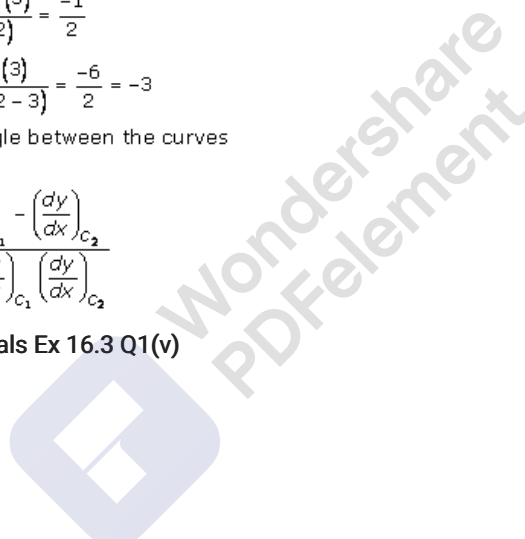
$$\left(\frac{dy}{dx}\right)_{C_2} = \frac{-2(3)}{(2 \times 2 - 3)} = \frac{-6}{2} = -3$$

\therefore If ϕ is the angle between the curves

Then,

$$\tan \phi = \frac{\left(\frac{dy}{dx}\right)_{C_1} - \left(\frac{dy}{dx}\right)_{C_2}}{1 + \left(\frac{dy}{dx}\right)_{C_1} \left(\frac{dy}{dx}\right)_{C_2}}$$

Tangents and Normals Ex 16.3 Q1(v)



MillionStars edu
Think, Learn & Practice



$$\frac{x^2}{a^2} + \frac{y^2}{b^2} = 1 \quad \text{---(i)}$$

$$x^2 + y^2 = ab \quad \text{---(ii)}$$

From (ii), we get

$$y^2 = ab - x^2$$

∴ From (i), we get

$$\frac{x^2}{a^2} + \frac{ab - x^2}{b^2} = 1$$

$$\Rightarrow b^2x^2 + a^3b - a^2x^2 = a^2b^2$$

$$\Rightarrow (b^2 - a^2)x^2 = a^2b^2 - a^3b$$

$$\begin{aligned} \Rightarrow x^2 &= \frac{a^2b^2 - a^3b}{b^2 - a^2} \\ &= \frac{a^2b(b - a)}{(b - a)(b + a)} \\ &= \frac{a^2b}{b + a} \end{aligned}$$

$$\therefore x = \pm \sqrt{\frac{a^2b}{a + b}}$$

$$\begin{aligned} \therefore y^2 &= ab - x^2 = ab - \frac{a^2b}{a + b} \\ &= \frac{a^2b + ab^2 - a^2b}{a + b} = \frac{ab^2}{a + b} \end{aligned}$$

Differentiating (i) and (ii) w.r.t.x we get

$$\frac{2x}{a^2} + \frac{2y}{b^2} \times \left(\frac{dy}{dx}\right)_{C_1} = 0$$

$$\text{and } 2x + 2y \left(\frac{dy}{dx}\right)_{C_2} = 0$$

$$\therefore \left(\frac{dy}{dx}\right)_{C_1} = \frac{-x}{a^2} \times \frac{b^2}{y} = \frac{-b^2x}{a^2y}$$

$$\left(\frac{dy}{dx}\right)_{C_2} = \frac{-x}{y}$$

At $\left(\pm \sqrt{\frac{a^2b}{a + b}}, \pm \sqrt{\frac{ab^2}{a + b}}\right)$ we get

$$\left(\frac{dy}{dx}\right)_{C_1} = \frac{-b^2}{a^2} \frac{\sqrt{a}}{\sqrt{b}} = \frac{-b^2\sqrt{a}}{a^2\sqrt{b}}$$

$$\left(\frac{dy}{dx}\right)_{C_2} = -\frac{\sqrt{a}}{\sqrt{b}}$$

Tangents and Normals Ex 16.3 Q1(vi)

Wondershare PDFelement

MillionStars edu
Think, Learn & Practice



We know that angle of intersection of two curves is given by

$$\tan \theta = \left| \frac{m_1 - m_2}{1 + m_1 m_2} \right| \quad \text{---(A)}$$

Where m_1 and m_2 are slopes of curves.

$$x^2 + 4y^2 = 8 \quad \text{---(i)}$$

$$x^2 - 2y^2 = 2 \quad \text{---(ii)}$$

Solving (i) and (ii)

$$6y^2 = 6 \Rightarrow y = \pm 1$$

$$\therefore x^2 = 2 + 2 \Rightarrow x = \pm 2$$

\therefore Point of intersection are

$$P = (2, 1) \text{ and } (-2, -1)$$

Now,

Slope m_1 for (i)

$$8y \frac{dy}{dx} = -2x \Rightarrow \frac{dy}{dx} = -\frac{x}{4y}$$

$$\therefore m_1 = \frac{1}{2}$$

Slope m_2 for (ii)

$$4y \frac{dy}{dx} = 2x \Rightarrow \frac{dy}{dx} = \frac{x}{2y}$$

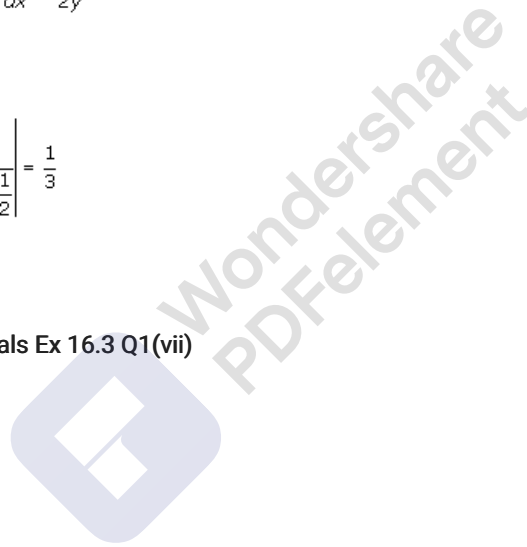
$$\therefore m_2 = 1$$

From (A)

$$\tan \theta = \left| \frac{1 - \frac{1}{2}}{1 + 1 \times \frac{1}{2}} \right| = \frac{1}{3}$$

$$\therefore \theta = \tan^{-1} \left(\frac{1}{3} \right)$$

Tangents and Normals Ex 16.3 Q1(vii)





We know that angle of intersection of two curves is given by

$$\tan \theta = \left| \frac{m_1 - m_2}{1 + m_1 m_2} \right| \quad \text{---(A)}$$

Where m_1 and m_2 are slopes of curves.

$$x^2 = 27y \quad \text{---(i)}$$

$$y^2 = 8x \quad \text{---(ii)}$$

Solving (i) and (ii) are

$$\frac{y^4}{64} = 27y$$

$$\Rightarrow y(y^3 - 27 \times 64) = 0$$

$$\Rightarrow y = 0 \text{ or } 12$$

$$\therefore x = 0 \text{ or } 18$$

\therefore Points of intersection is (0,0) and (18,12)

Now,

Slope of (i)

$$m_1 = \frac{2x}{27} = \frac{12}{9} = \frac{4}{3}$$

Slope of (ii)


$$m_2 = \frac{8}{2y} = \frac{8}{24} = \frac{1}{3}$$

From (A)

$$\tan \theta = \left| \frac{\frac{4}{3} - \frac{1}{3}}{1 + \frac{4}{3} \times \frac{1}{3}} \right| = \frac{9}{13}$$

$$\therefore \theta = \tan^{-1} \left(\frac{9}{13} \right)$$

Tangents and Normals Ex 16.3 Q1(viii)



MillionStars edu
Think, Learn & Practice



We know that angle of intersection of two curves is given by

$$\tan \theta = \left| \frac{m_1 - m_2}{1 + m_1 m_2} \right| \quad \text{---(A)}$$

Where m_1 and m_2 are slopes of curves.

$$x^2 + y^2 = 2x \quad \text{---(i)}$$

$$y^2 = x \quad \text{---(ii)}$$

Solving (i) and (ii)

$$x^2 + x = 2x$$

$$\Rightarrow x^2 - x = 0$$

$$\Rightarrow x(x - 1) = 0$$

$$\Rightarrow x = 0, 1$$

$$\therefore y = 0 \text{ or } 1$$

\therefore The points of intersection is $P = (0, 0)$, $Q = (1, 1)$

\therefore Slope of (i)

$$2y \frac{dy}{dx} = 2 - 2x$$

$$\therefore \frac{dy}{dx} = \frac{2 - 2x}{2y} = \frac{1 - x}{y}$$

$$\therefore m_1 = 0$$

Slope of (ii)

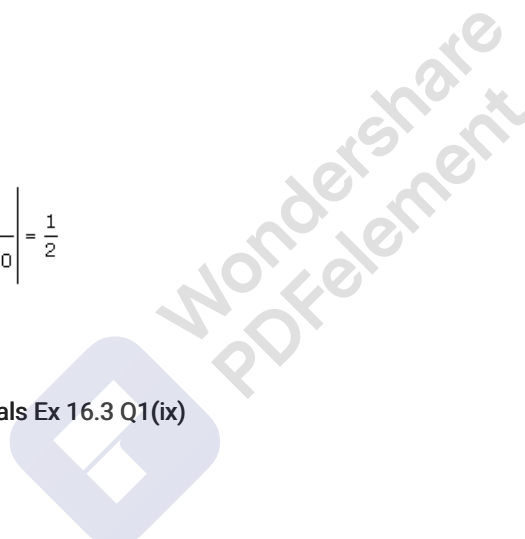
$$m_2 = \frac{1}{2y} = \frac{1}{2}$$

From (A)

$$\tan \theta = \left| \frac{\frac{1}{2} - 0}{1 + \frac{1}{2} \times 0} \right| = \frac{1}{2}$$

$$\therefore \theta = \tan^{-1} \left(\frac{1}{2} \right)$$

Tangents and Normals Ex 16.3 Q1(ix)



MillionStars edu
Think, Learn & Practice



$$y = 4 - x^2 \dots\dots (i)$$

$$y = x^2 \dots\dots (ii)$$

Substituting eq (ii) in (i) we get,

$$x^2 = 4 - x^2$$

$$\Rightarrow x^2 = 2$$

$$\Rightarrow x = \pm\sqrt{2}$$

From (i) when $x = \sqrt{2}$, we get $y = 2$ and when $x = -\sqrt{2}$, we get $y = 2$

Thus the two curves intersect at $(\sqrt{2}, 2)$ and $(-\sqrt{2}, 2)$.

Differentiating (i) wrt x , we get

$$\frac{dy}{dx} = 0 - 2x = -2x$$

Differentiating (ii) wrt x , we get

$$\frac{dy}{dx} = 2x$$

Angle of intersection at $(\sqrt{2}, 2)$

$$m_1 = \left(\frac{dy}{dx}\right)_{(\sqrt{2}, 2)} = -2\sqrt{2}$$

Angle of intersection at $(-\sqrt{2}, 2)$

$$m_2 = \left(\frac{dy}{dx}\right)_{(-\sqrt{2}, 2)} = 2\sqrt{2}$$

Let θ be the angle of intersection of the two curves,

$$\tan \theta = \left| \frac{m_2 - m_1}{1 + m_1 m_2} \right| = \left| \frac{2\sqrt{2} + 2\sqrt{2}}{1 + (2\sqrt{2})(-2\sqrt{2})} \right| = \left| \frac{4\sqrt{2}}{-7} \right| = \frac{4\sqrt{2}}{7}$$

$$\Rightarrow \theta = \tan^{-1} \left(\frac{4\sqrt{2}}{7} \right)$$

Tangents and Normals Ex 16.3 Q2(i)



We know that two curves intersects orthogonally if

$$m_1 \times m_2 = -1 \quad \text{---(A)}$$

Where m_1 and m_2 are the slopes of two curves

$$y = x^3 \quad \text{---(i)}$$

$$6y = 7 - x^2 \quad \text{---(ii)}$$

Slope of (i)

$$\frac{dy}{dx} = 3x^2 = m_1$$

Slope of (ii)

$$\frac{dy}{dx} = -\frac{2}{6}x = m_2$$

Point of intersection of (i) and (ii) is

$$6x^3 = 7 - x^2$$

$$\Rightarrow 6x^3 + x^2 - 7 = 0$$

$$\Rightarrow x = 1$$

$$\therefore y = 1$$

$$\therefore P = (1,1)$$

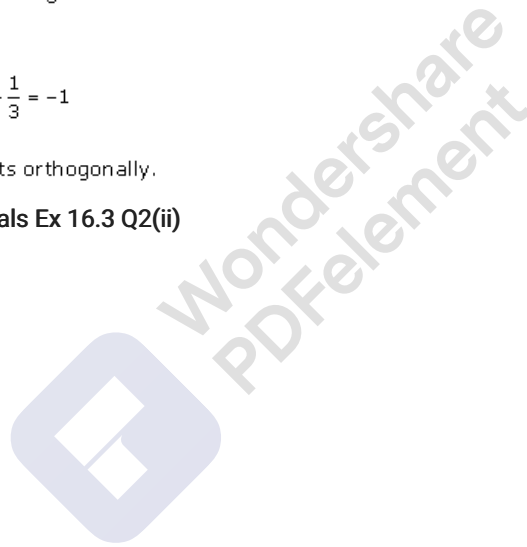
$$\therefore m_1 = 3 \text{ and } m_2 = -\frac{1}{3}$$

Now,

$$m_1 \times m_2 = 3 \times -\frac{1}{3} = -1$$

\therefore (i) and (ii) cuts orthogonally.

Tangents and Normals Ex 16.3 Q2(ii)





We know that two curves intersects orthogonally if

$$m_1 \times m_2 = -1 \quad \text{---(A)}$$

Where m_1 and m_2 are the slopes of two curves

$$x^3 - 3xy^2 = -2 \quad \text{---(i)}$$

$$3x^2y - y^3 = 2 \quad \text{---(ii)}$$

Point of intersection of (i) and (ii)

$$(i) + (ii)$$

$$\Rightarrow x^3 - 3xy^2 + 3x^2y - y^3 = 0$$

$$\Rightarrow (x - y)^3 = 0$$

$$\Rightarrow x = y$$

\therefore from (i)

$$x^3 - 3x^2 = -2$$

$$\Rightarrow -2x^3 = -2$$

$$\Rightarrow x = 1$$

$\therefore P = (1, 1)$ is the point of intersection

Now,

Slope of (i)

$$3x^2 - 3y^2 - 6xy \frac{dy}{dx} = 0$$

$$\therefore m_1 = \frac{dy}{dx} = \frac{3(x^2 - y^2)}{6xy}$$

Slope of (ii)

$$6xy + 3x^2 \frac{dy}{dx} - 3y^2 \frac{dy}{dx} = 0$$

$$\Rightarrow m_2 = \frac{dy}{dx} = \frac{-6xy}{3(x^2 - y^2)}$$

$$\therefore m_1 \times m_2 = \frac{(x^2 - y^2)}{2xy} \times \frac{-2xy}{(x^2 - y^2)} = -1$$

Tangents and Normals Ex 16.3 Q2(iii)



We know that two curves intersects orthogonally if

$$m_1 \times m_2 = -1 \quad \text{---(A)}$$

Where m_1 and m_2 are the slopes of two curves

$$x^2 + 4y^2 = 8 \quad \text{---(i)}$$

$$x^2 - 2y^2 = 4 \quad \text{---(ii)}$$

Point of intersection of (i) and (ii) is (i) - (ii), we get

$$6y^2 = 4$$

$$\Rightarrow y = \sqrt{\frac{2}{3}}$$

$$\therefore x^2 = 4 + \frac{8}{6}$$

$$x^2 = \frac{32}{6}$$

$$\Rightarrow x = \frac{4}{\sqrt{3}}$$

Now,

Slope of (i)

$$2x + 8y \frac{dy}{dx} = 0$$

$$\Rightarrow \frac{dy}{dx} = -\frac{x}{4y}$$

$$\Rightarrow m_1 = -\frac{1}{4} \times \frac{4}{\sqrt{2}} = -\frac{1}{\sqrt{2}} \quad \left[\because \frac{x}{y} = \frac{4}{\sqrt{2}} \right]$$

Slope of (ii)

$$2x - 4y \frac{dy}{dx} = 0$$

$$\Rightarrow \frac{dy}{dx} = \frac{x}{2y}$$

$$\Rightarrow m_2 = \frac{1}{2} \times \frac{4}{\sqrt{2}} = \sqrt{2}$$

$$\therefore m_1 \times m_2 = -\frac{1}{\sqrt{2}} \times \sqrt{2} = -1$$

\(\therefore\) (i) and (ii) cuts orthogonally.

Tangents and Normals Ex 16.3 Q3(i)

We have,

$$x^2 = 4y \quad \text{---(i)}$$

$$4y + x^2 = 8 \quad \text{---(ii)} \quad P = (2, 1)$$

Slope of (i)

$$2x = 4 \frac{dy}{dx}$$

$$\therefore m_1 = \left(\frac{dy}{dx} \right)_P = \left(\frac{x}{2} \right)_P = 1$$

Slope of (ii)

$$4 \frac{dy}{dx} + 2x = 0$$

$$\therefore m_2 = \left(\frac{dy}{dx} \right)_P = \left(-\frac{x}{2} \right)_P = -1$$

$$\therefore m_1 \times m_2 = 1 \times -1 = -1$$

Hence the result.

Tangents and Normals Ex 16.3 Q3(ii)

MillionStars edu
Think, Learn & Practice



We have,

$$x^2 = y \quad \text{---(i)}$$

$$x^3 + 6y = 7 \quad \text{---(ii)} \quad P = (1, 1)$$

Slope of (i)

$$2x = \frac{dy}{dx}$$

$$\therefore m_1 = \left(\frac{dy}{dx}\right)_P = 2$$

Slope of (ii)

$$3x^2 + 6\frac{dy}{dx} = 0$$

$$\therefore m_2 = \left(\frac{dy}{dx}\right)_P = \left(-\frac{x^2}{2}\right)_P = -\frac{1}{2}$$

$$\therefore m_1 \times m_2 = 2 \times \frac{-1}{2} = -1$$

Tangents and Normals Ex 16.3 Q3(iii)

We have,

$$y^2 = 8x \quad \text{---(i)}$$

$$2x^2 + y^2 = 10 \quad \text{---(ii)} \quad P(1, 2\sqrt{2})$$

Slope of (i)

$$2y \frac{dy}{dx} = 8$$

$$\therefore m_1 = \left(\frac{dy}{dx}\right)_P = \left(\frac{4}{y}\right)_P = \sqrt{2}$$

Slope of (ii)

$$4x + 2y \frac{dy}{dx} = 0$$

$$\therefore m_2 = \left(\frac{dy}{dx}\right)_P = \left(-\frac{2x}{y}\right)_P = -\frac{1}{\sqrt{2}}$$

$$\therefore m_1 \times m_2 = \sqrt{2} \times \frac{-1}{\sqrt{2}} = -1$$

Tangents and Normals Ex 16.3 Q4



We have,

$$4x = y^2 \quad \text{--- (i)}$$

$$4xy = k \quad \text{--- (ii)}$$

Slope of (i)

$$4 = 2y \frac{dy}{dx}$$

$$\Rightarrow m_1 = \frac{dy}{dx} = \frac{2}{y}$$

Slope of (ii)

$$y + x \frac{dy}{dx} = 0$$

$$\Rightarrow m_2 = \frac{dy}{dx} = \frac{-y}{x}$$

Solving (i) and (ii)

$$\frac{k}{y} = y^2$$

$$\Rightarrow y^3 = k$$

$$k = \frac{k^{\frac{2}{3}}}{4}$$

\therefore (i) and (ii) cuts orthogonally

$$\therefore m_1 \times m_2 = -1$$

$$\Rightarrow \frac{2}{y} \times \frac{-y}{x} = -1$$

$$\Rightarrow \frac{2}{x} = 1$$

$$\Rightarrow x = 2$$

$$\Rightarrow \frac{k^{\frac{2}{3}}}{4} = 2$$

$$\Rightarrow k^{\frac{2}{3}} = 8$$

$$\therefore k^2 = 512$$

Tangents and Normals Ex 16.3 Q5



MillionStars edu
Think, Learn & Practice



We have,

$$2x = y^2 \quad \text{--- (i)}$$

$$2xy = k \quad \text{--- (ii)}$$

Slope of (i)

$$2 = 2y \frac{dy}{dx}$$

$$\Rightarrow m_1 = \frac{dy}{dx} = \frac{1}{y}$$

Slope of (ii)

$$y + x \left(\frac{dy}{dx} \right) = 0$$

$$\therefore m_2 = \frac{dy}{dx} = \frac{-y}{x}$$

Now,

Solving (i) and (ii)

$$\frac{k}{y} = y^2$$

$$\Rightarrow y^3 = k$$

$$\therefore x = \frac{y^2}{2} = \frac{k^{\frac{2}{3}}}{2}$$

\therefore (i) and (ii) cuts orthogonally

$$\therefore m_1 \times m_2 = -1$$

$$\frac{1}{y} \times \frac{-y}{x} = -1$$

$$\Rightarrow \frac{1}{x} = 1$$

$$\Rightarrow x = 1$$

$$\Rightarrow \frac{k^{\frac{2}{3}}}{2} = 1$$

$$\Rightarrow k^{\frac{2}{3}} = 2$$

Closing both side, we get

$$k^2 = 8$$

Tangents and Normals Ex 16.3 Q6

Wondershare
PDFelement

MillionStars edu
Think, Learn & Practice



$$xy = 4$$

$$\Rightarrow x = \frac{4}{y} \dots\dots (i)$$

$$x^2 + y^2 = 8 \dots\dots (ii)$$

Substituting eq (i) in (ii) we get,

$$x^2 + y^2 = 8$$

$$\Rightarrow \left(\frac{4}{y}\right)^2 + y^2 = 8$$

$$\Rightarrow 16 + y^4 = 8y^2$$

$$\Rightarrow y^4 - 8y^2 + 16 = 0$$

$$\Rightarrow (y^2 - 4)^2 = 0$$

$$\Rightarrow y^2 = 4$$

$$\Rightarrow y = \pm 2$$

From (i) when $y = 2$, we get $x = 2$ and when $y = -2$, we get $x = -2$

Thus the two curves intersect at $(2, 2)$ and $(-2, 2)$.

Differentiating (i) wrt x , we get

$$y + x \frac{dy}{dx} = 0$$

$$\Rightarrow \frac{dy}{dx} = -\frac{y}{x}$$

Differentiating (ii) wrt x , we get

$$y + x \frac{dy}{dx} = 0$$

$$\Rightarrow \frac{dy}{dx} = -\frac{y}{x}$$

Differentiating (ii) wrt x , we get

$$2x + 2y \frac{dy}{dx} = 0$$

$$\Rightarrow \frac{dy}{dx} = -\frac{x}{y}$$

At $(2, 2)$

$$\left(\frac{dy}{dx}\right)_{C_1} = -1$$

$$\left(\frac{dy}{dx}\right)_{C_2} = -1$$

Clearly $\left(\frac{dy}{dx}\right)_{C_1} = \left(\frac{dy}{dx}\right)_{C_2}$ at $(2, 2)$

So given two curves touch each other at $(2, 2)$.

Similarly, it can be seen that two curves touch each other at $(-2, -2)$.

Tangents and Normals Ex 16.3 Q7

MillionStars edu
Think, Learn & Practice



$$y^2 = 4x \dots (i)$$

$$x^2 + y^2 - 6x + 1 = 0 \dots (ii)$$

Differentiating (i) wrt x, we get

$$2y \frac{dy}{dx} = 4$$

$$\Rightarrow \frac{dy}{dx} = \frac{2}{y}$$

Differentiating (ii) wrt x, we get

$$2x + 2y \frac{dy}{dx} - 6 + 0 = 0$$

$$\Rightarrow \frac{dy}{dx} = \frac{3-x}{y}$$

At (1, 2)

$$\left(\frac{dy}{dx}\right)_C = \frac{2}{2} = 1$$

$$\left(\frac{dy}{dx}\right)_C = \frac{3-1}{2} = \frac{2}{2} = 1$$

Clearly $\left(\frac{dy}{dx}\right)_C = \left(\frac{dy}{dx}\right)_C$ at (1, 2)

So given two curves touch each other at (1, 2).

Tangents and Normals Ex 16.3 Q8

We have,

$$\frac{x^2}{a^2} - \frac{y^2}{b^2} = 1 \quad \dots (i)$$

$$xy = c^2 \quad \dots (ii)$$

Slope of (i)

$$\frac{2x}{a^2} - \frac{2y}{b^2} \frac{dy}{dx} = 0$$

$$\therefore m_1 = \frac{dy}{dx} = \frac{x}{y} \times \frac{b^2}{a^2}$$

Slope of (ii)

$$y + x \frac{dy}{dx} = 0$$


$$\therefore m_2 = \frac{dy}{dx} = \frac{-y}{x}$$

\therefore (i) and (ii) cuts orthogonally

$$\therefore m_1 \times m_2 = -1$$

$$\Rightarrow \frac{x}{y} \times \frac{-y}{x} \times \frac{a^2}{b^2} = -1$$

$$\Rightarrow a^2 = b^2$$



MillionStars edu
Think, Learn & Practice



We have,

$$\frac{x^2}{a^2} + \frac{y^2}{b^2} = 1 \quad \text{--- (i)}$$

$$\frac{x^2}{A^2} - \frac{y^2}{B^2} = 1 \quad \text{--- (ii)}$$

Slope of (i)

$$\frac{2x}{a^2} + \frac{2y}{b^2} \times \frac{dy}{dx} = 0$$

$$\therefore m_1 = \frac{dy}{dx} = -\frac{x}{y} \times \frac{b^2}{a^2}$$

Slope of (ii)

$$\frac{2x}{A^2} - \frac{2y}{B^2} \times \frac{dy}{dx} = 0$$

$$\therefore m_2 = \frac{dy}{dx} = \frac{x}{y} \times \frac{B^2}{A^2}$$

\(\therefore\) (i) and (ii) cuts orthogonally

$$\therefore m_1 \times m_2 = -1$$

$$\therefore \frac{-x}{y} \times \frac{b^2}{a^2} \times \frac{x}{y} \times \frac{B^2}{A^2} = -1$$

$$\Rightarrow \frac{x^2}{y^2} \times \frac{b^2 B^2}{a^2 A^2} = 1$$

$$\Rightarrow \frac{x^2}{y^2} = \frac{a^2 A^2}{b^2 B^2} \quad \text{--- (iii)}$$

Now,

(i) - (ii) gives

$$x^2 \left[\frac{1}{a^2} - \frac{1}{A^2} \right] + y^2 \left[\frac{1}{b^2} + \frac{1}{B^2} \right] = 0$$

$$\Rightarrow \frac{x^2}{y^2} = \frac{B^2 + b^2}{b^2 B^2} \times \frac{a^2 A^2}{a^2 - A^2}$$

Put in (iii), we get

$$\frac{(B^2 + b^2)}{b^2 B^2} \times \frac{a^2 A^2}{(a^2 - A^2)} = \frac{a^2 A^2}{b^2 B^2}$$

$$\Rightarrow B^2 + b^2 = a^2 - A^2$$

$$\Rightarrow a^2 - b^2 = A^2 + B^2$$

Tangents and Normals Ex 16.3 Q9

Wondershare
PDFelement

MillionStars edu
Think, Learn & Practice

We have,

$$\frac{x^2}{a^2 + \lambda_1} + \frac{y^2}{b^2 + \lambda_1} = 1 \quad \text{---(i)}$$

$$\frac{x^2}{a^2 + \lambda_2} + \frac{y^2}{b^2 + \lambda_2} = 1 \quad \text{---(ii)}$$

slope of (i)

$$\frac{2x}{a^2 + \lambda_1} + \frac{2y}{b^2 + \lambda_1} \times \frac{dy}{dx} = 0$$

$$\Rightarrow m_1 = \frac{dy}{dx} = \frac{-x}{y} \times \frac{b^2 + \lambda_1}{a^2 + \lambda_1}$$

Slope of (ii)

$$\frac{2x}{a^2 + \lambda_2} + \frac{2y}{b^2 + \lambda_2} \times \frac{dy}{dx} = 0$$

$$\Rightarrow m_2 = \frac{dy}{dx} = \frac{-x}{y} \times \frac{b^2 + \lambda_2}{a^2 + \lambda_2}$$

Now,

Subtracting (ii) from (i), we get

$$x^2 \left[\frac{1}{a^2 + \lambda_1} - \frac{1}{a^2 + \lambda_2} \right] + y^2 \left[\frac{1}{b^2 + \lambda_1} - \frac{1}{b^2 + \lambda_2} \right] = 0$$

$$\Rightarrow \frac{x^2}{y^2} = \frac{\lambda_2 - \lambda_1}{(b^2 + \lambda_1)(b^2 + \lambda_2)} \times \frac{1}{\frac{\lambda_1 - \lambda_2}{(a^2 + \lambda_1)(a^2 + \lambda_2)}}$$

Now,

$$\begin{aligned} m_1 \times m_2 &= \frac{x^2}{y^2} \times \frac{(b^2 + \lambda_1)(b^2 + \lambda_2)}{(a^2 + \lambda_1)(a^2 + \lambda_2)} \\ &= \frac{(\lambda_2 - \lambda_1)}{(b^2 + \lambda_1)(b^2 + \lambda_2)} \times \frac{(a^2 + \lambda_1)(a^2 + \lambda_2)}{\lambda_2 - \lambda_1} \times \frac{(b^2 + \lambda_1)(b^2 + \lambda_2)}{(a^2 + \lambda_1)(a^2 + \lambda_2)} \\ &= -1 \end{aligned}$$

\(\therefore\) (i) and (ii) cuts orthogonally

Tangents and Normals Ex 16.3 Q10

Suppose the straight line $x \cos \alpha + y \sin \alpha = p$ touches the curve at $Q(x_1, y_1)$.

But equation of tangent to $\frac{x^2}{a^2} + \frac{y^2}{b^2} = 1$ at $Q(x_1, y_1)$ is

$$\frac{xx_1}{a^2} + \frac{yy_1}{b^2} = 1$$

Thus equation $\frac{xx_1}{a^2} + \frac{yy_1}{b^2} = 1$ and $x \cos \alpha + y \sin \alpha = p$ represent the same line.

$$\therefore \frac{x_1/a^2}{\cos \alpha} + \frac{y_1/b^2}{\sin \alpha} = \frac{1}{p}$$

$$\Rightarrow x_1 = \frac{a^2 \cos \alpha}{p}, \quad y_1 = \frac{b^2 \sin \alpha}{p} \dots \dots \dots (i)$$

The point $Q(x_1, y_1)$ lies on the curve $\frac{x^2}{a^2} + \frac{y^2}{b^2} = 1$

$$\therefore \frac{a^4 \cos^2 \alpha}{p^2 a^2} + \frac{b^4 \sin^2 \alpha}{p^2 b^2} = 1$$

$$\Rightarrow a^2 \cos^2 \alpha - b^2 \sin^2 \alpha = p^2$$

MillionStars edu
Think, Learn & Practice