

Name: _____

Date: _____

Fractions Learning Check



Part 1: Writing Fractions

Directions: Write the fraction of the shaded area.

1.



2.



3.




4.



Part 2: Fractions on a Number Line


Directions: Write the fraction that is represented by the X.

1.



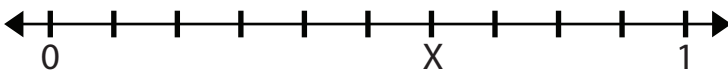
X = _____

2.



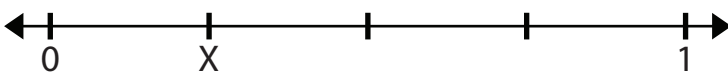
X = _____

3.



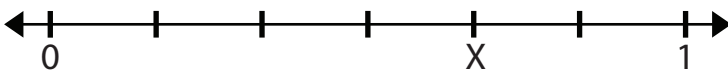
X = _____

4.



X = _____

5.



X = _____

Name: _____

Date: _____

Fractions Learning Check



Part 3: Equivalent Fractions

Directions: Fill in the missing number to create equivalent fractions.

1. $\frac{1}{2} = \frac{\square}{6}$

2. $\frac{4}{8} = \frac{\square}{4}$

3. $\frac{2}{6} = \frac{\square}{3}$

4. $\frac{1}{3} = \frac{\square}{9}$

5. $\frac{3}{4} = \frac{\square}{12}$

Part 4: Comparing Fractions

Directions: Write $<$, $>$, or $=$ to compare the fractions.

1. $\frac{2}{10} \square \frac{1}{10}$

2. $\frac{2}{4} \square \frac{3}{4}$

3. $\frac{5}{5} \square \frac{5}{6}$

4. $\frac{4}{5} \square \frac{3}{5}$

5. $\frac{1}{3} \square \frac{3}{3}$

6. $\frac{2}{4} \square \frac{4}{8}$