



CBSE

Additional Practice Questions Subject: Chemistry Theory (043) Class: XII 2023-24

Max. marks: 70

Time: 3 hours

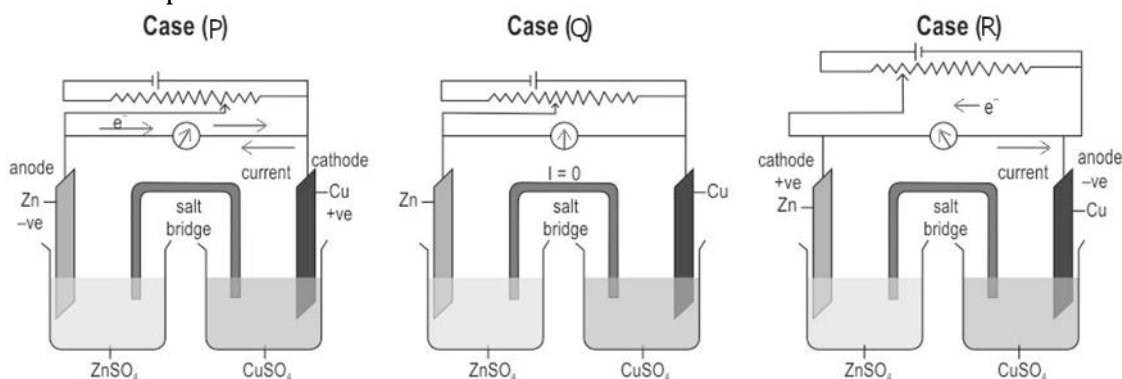
General Instructions:

- (a) There are 33 questions in this question paper with internal choice.
- (b) **SECTION A** comprises **16** multiple -choice questions carrying 1 mark each.
- (c) **SECTION B** comprises **5** short answer questions carrying 2 marks each.
- (d) **SECTION C** comprises **7** short answer questions carrying 3 marks each.
- (e) **SECTION D** comprises **2** case - based questions carrying 4 marks each.
- (f) **SECTION E** comprises **3** long answer questions carrying 5 marks each.
- (g) All questions are compulsory.
- (h) Use of log tables and calculators is not allowed.

Section A

The following questions are multiple -choice questions with one correct answer. Each question carries 1 mark. There is no internal choice in this section.

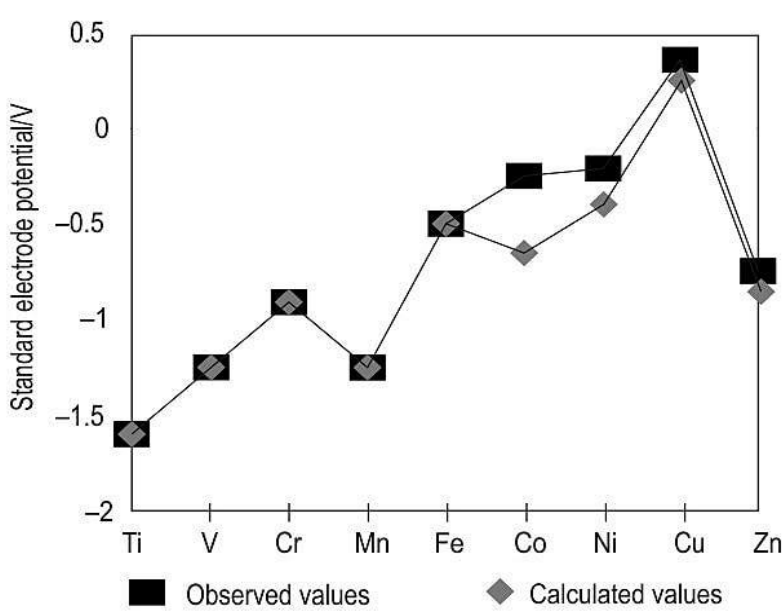
- 1 Sunita set up three cells as shown below:



She applied external potential in all the three cells. The potential is increased slowly, till the opposing voltage reaches the value of 1.1 V.



	<p>Which of the following statements is INCORRECT?</p> <p>(a) Electrons flow from Zn rod to Cu rod hence current flows from Cu to Zn in case (P).</p> <p>(b) The chemical reaction takes place in case (Q) till the opposing voltage reaches 1.1 V.</p> <p>(c) Zinc is deposited at the zinc electrode and copper dissolves at copper electrode in case (P).</p> <p>(d) Electrons flow from Cu to Zn and current flows from Zn to Cu in case (R).</p>															
2	<p>Two compounds M and N have the general formula $C_nH_{2n}O$ but different structural formulae.</p> <p>i) Compound N belongs to that homologous series where the first member contains 3 carbon atoms.</p> <p>ii) Compound M reacts with one equivalent of monohydric alcohol in the presence of dry hydrogen chloride to yield a hemiacetal.</p> <p>Identify the homologous series to which compounds M and N belong to?</p> <p>(a) Both the compounds are aldehydes.</p> <p>(b) Compound M is an aldehyde and compound N is a ketone.</p> <p>(c) Both the compounds are ketones.</p> <p>(d) Compound N is an aldehyde and compound M is a ketone.</p>															
3	<p>During a quiz competition, team A and team B have to answer a tie question on the characteristics of RNA.</p> <p>Their responses are as follows:</p> <table><tr><th>Name</th><th>Team</th><th>Response</th></tr><tr><td>Adrika</td><td>A</td><td>Different RNA molecules of a cell are involved in the synthesis of proteins.</td></tr><tr><td>Shaakho</td><td>A</td><td>The single-stranded helix of RNA folds upon itself to form the secondary structure.</td></tr><tr><td>Rounak</td><td>B</td><td>The C-2 atom of the pentose sugar for a ribose nucleotide contains an -OH group.</td></tr><tr><td>Ritama</td><td>B</td><td>The message for the synthesis of a particular protein is present only in the RNA.</td></tr></table> <p>What is the expected result of the quiz and why?</p> <p>(a) Team A wins the quiz as both the responses are correct.</p> <p>(b) Team B wins the quiz as both the responses are correct.</p> <p>(c) Team A loses the quiz as Adrika's response is incorrect.</p> <p>(d) Team B loses the quiz as Rounak's response is incorrect.</p>	Name	Team	Response	Adrika	A	Different RNA molecules of a cell are involved in the synthesis of proteins.	Shaakho	A	The single-stranded helix of RNA folds upon itself to form the secondary structure.	Rounak	B	The C-2 atom of the pentose sugar for a ribose nucleotide contains an -OH group.	Ritama	B	The message for the synthesis of a particular protein is present only in the RNA.
Name	Team	Response														
Adrika	A	Different RNA molecules of a cell are involved in the synthesis of proteins.														
Shaakho	A	The single-stranded helix of RNA folds upon itself to form the secondary structure.														
Rounak	B	The C-2 atom of the pentose sugar for a ribose nucleotide contains an -OH group.														
Ritama	B	The message for the synthesis of a particular protein is present only in the RNA.														

- 4 What will be the change in the hybridisation of C when a nucleophile attacks the electrophilic centre of the carbonyl group?
- (a) sp^2 to sp
 (b) sp^3 to sp^2
 (c) sp^3 to sp
 (d) sp^2 to sp^3
- 5 Four compounds, CH_3Cl , CH_3Br , C_2H_5Br and C_3H_7I are represented by the letters M, N, O and P in the table below (*in random order*). The boiling points are also given on the table.
- | | | | | |
|--------------------|-----------------|--------------|----------------|-----------------|
| Boiling points(BP) | $-24.2^\circ C$ | $38^\circ C$ | $3.56^\circ C$ | $101.6^\circ C$ |
| Compound | M | N | O | P |
- Which of the four compounds does 'N' most likely represent?
- (a) CH_3Cl
 (b) CH_3Br
 (c) C_2H_5Br
 (d) C_3H_7I
- 6 Study the graph given below.
- 
- Legend: Observed values Calculated values
- Observed and calculated values for the standard electrode potentials
 ($M^{2+} \rightarrow M^0$) of the elements Ti to Zn
- Based on the graph given, which element will MOST LIKELY be involved in the



	following reaction? Metal + conc. sulphuric acid \rightarrow Metal sulphate + sulphur dioxide + water (a) Cu (b) Co (c) Ti (d) Zn																
7	<p>The table given below shows the results of three experiments on the rate of the reaction between compounds P and Q at a constant temperature.</p> <table><tr><th>Experiment</th><th>The initial concentration of P (mol dm⁻³)</th><th>The initial concentration of Q (mol dm⁻³)</th><th>Initial rate (mol dm⁻³ s⁻¹)</th></tr><tr><td>1</td><td>0.1</td><td>0.2</td><td>1.10 x 10⁻⁴</td></tr><tr><td>2</td><td>0.3</td><td>0.2</td><td>9.91 x 10⁻⁴</td></tr><tr><td>3</td><td>0.3</td><td>0.1</td><td>4.96 x 10⁻⁴</td></tr></table> <p>Based on the data, what will be the rate equation for the reaction between P and Q?</p> <p>(a) k[P]²[Q] (b) k[P][Q]² (c) k[P][Q] (d) k[P]</p>	Experiment	The initial concentration of P (mol dm ⁻³)	The initial concentration of Q (mol dm ⁻³)	Initial rate (mol dm ⁻³ s ⁻¹)	1	0.1	0.2	1.10 x 10 ⁻⁴	2	0.3	0.2	9.91 x 10 ⁻⁴	3	0.3	0.1	4.96 x 10 ⁻⁴
Experiment	The initial concentration of P (mol dm ⁻³)	The initial concentration of Q (mol dm ⁻³)	Initial rate (mol dm ⁻³ s ⁻¹)														
1	0.1	0.2	1.10 x 10 ⁻⁴														
2	0.3	0.2	9.91 x 10 ⁻⁴														
3	0.3	0.1	4.96 x 10 ⁻⁴														
8	<p>The table below shows the K_H values for some gasses at 293 K and at the same pressure.</p> <table><tr><td>K_H values (kbar)</td><td>144.97</td><td>69.16</td><td>76.48</td><td>34.86</td></tr><tr><td>Gas</td><td>Helium</td><td>Hydrogen</td><td>Nitrogen</td><td>Oxygen</td></tr></table> <p>In which of the following are the gases arranged in their decreasing order of solubility (from left to right)?</p> <p>(a) Helium > Nitrogen > Hydrogen > Oxygen (b) Hydrogen > Helium > Nitrogen > Oxygen (c) Nitrogen > Hydrogen > Oxygen > Helium (d) Oxygen > Hydrogen > Nitrogen > Helium</p>	K _H values (kbar)	144.97	69.16	76.48	34.86	Gas	Helium	Hydrogen	Nitrogen	Oxygen						
K _H values (kbar)	144.97	69.16	76.48	34.86													
Gas	Helium	Hydrogen	Nitrogen	Oxygen													
9	<p>Sampriti took 4 acids. Help her to arrange the acids from left to right, in the increasing order of their acidity: 2, 4, 6 - Trinitrophenol, acetic acid, phenol, and benzoic acid.</p>																



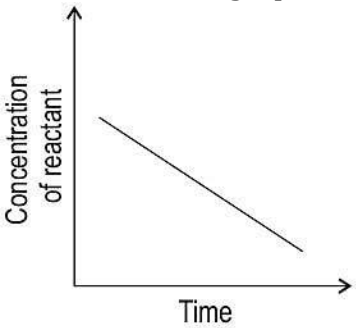
	<p>(a) 2, 4, 6 - Trinitrophenol, acetic acid, benzoic acid, phenol (b) phenol, acetic acid, benzoic acid, 2, 4, 6 - Trinitrophenol (c) 2, 4, 6 - Trinitrophenol, benzoic acid, acetic acid, phenol (d) phenol, benzoic acid, acetic acid, 2, 4, 6 - Trinitrophenol</p>
10	<p>An archeologist found that the percentage of carbon-14 in a wooden artifact was 20% of what carbon-14 would have been in the wood when it was cut from the tree.</p> <p>What would be the approximate age of this wooden artifact? (Given the half-life of carbon-14 = 5730 years)</p> <p>(a) 5,790 years (b) 12,060 years (c) 13,300 years (d) 38,000 years</p>
11	<p>Sourima was having a severe headache. She took a medicine to relieve her pain. The medicine is industrially prepared by:</p> <p>(a) mononitration of phenyl methanoate (b) acetylation of salicylic acid in presence of an acid (c) hydrogenation of anisole with Br₂ in ethanoic acid (d) nitration of anisole with a mixture of concentrated sulphuric and nitric acids</p>
12	<p>Which of the following options give the correct arrangement of the atomic radii of the 3d, 4d, and 5d transition series of elements?</p> <p>(a) atomic radii of 3d < atomic radii of 4d < atomic radii of 5d (b) atomic radii of 3d < atomic radii of 4d ≈ atomic radii of 5d (c) atomic radii of 3d ≈ atomic radii of 4d > atomic radii of 5d (d) atomic radii of 3d > atomic radii of 4d > atomic radii of 5d</p>
13	<p>Two statements are given below - one labelled Assertion (A) and the other labelled Reason (R). Assertion (A): 2-Methoxy-2-methyl propane reacts with hydrogen iodide to form methyl alcohol and 2-Iodo-2-methylpropane. Reason (R): The reaction given in (A) follows S_N2 mechanism. Which of the following is correct?</p> <p>(a) Both A and R are true, and R is a correct explanation of A. (b) Both A and R are true, but R is not the correct explanation of A. (c) A is true, but R is false. (d) A is false, but R is true.</p>
14	<p>Two statements are given below - one labeled Assertion (A) and the other labeled Reason (R). Assertion (A): In acetaldehyde, the carbonyl carbon acts as a Lewis acid and the carbonyl oxygen acts as a Lewis base.</p>



	<p>Reason (R): Carbonyl compounds have substantial dipole moments. Which of the following is correct?</p> <p>(a) Both A and R are true, and R is a correct explanation of A. (b) Both A and R are true, but R is not the correct explanation of A. (c) A is true, but R is false. (d) A is false, but R is true.</p>
15	<p>Two statements are given below - one labelled Assertion (A) and the other labelled Reason (R). Assertion (A): Denaturation of protein does not change the primary structure of proteins. Reason (R): The bonding between the carbon and hydrogen atoms during denaturation of proteins remains intact. Which of the following is correct?</p> <p>(a) Both A and R are true, and R is the correct explanation of A. (b) Both A and R are true, but R is not the correct explanation of A. (c) A is true, but R is false. (d) A is false, but R is true.</p>
16	<p>Two statements are given below - one labelled Assertion (A) and the other labelled Reason (R). Assertion (A): Copper does not form copper (II) sulphate on reaction with dil. sulphuric acid. Reason (R): The standard potential for $\text{Cu}^{+2} \text{Cu}$ electrode is negative. Which of the following is correct?</p> <p>(a) Both A and R are true, and R is a correct explanation of A. (b) Both A and R are true, but R is not the correct explanation of A. (c) A is true, but R is false. (d) A is false, but R is true.</p>

Section B

This section contains 5 questions with internal choice in one question. The following questions are very short answer type and carry 2 marks each.

17	<p>Given below is a graph of concentration of reactant vs time for a reaction.</p>  <p>(a) Based on the graph above draw a rate of reaction vs concentration of reactant graph for the same reaction.</p> <p>(b) What will be the order of this reaction? Justify.</p>										
18	<p>'Colligative properties help in determining the molar masses of the solutes.' The method based on which colligative property is preferred over others for determining molar masses of biomolecules and why?</p>										
19	<p>In which of the two compounds $\text{CH}_3\text{CH}_2\text{CH}_2\text{Cl}$ or $\text{C}_6\text{H}_5\text{Cl}$ will the C-Cl bond be longer? Why?</p>										
20	<p>Correctly match the items in the 'Reactants' column with those in the 'Product' column.</p> <table border="1"> <thead> <tr> <th>Reactants</th><th>Products</th></tr> </thead> <tbody> <tr> <td>(a) Cyclohexene heated in the presence of KMnO_4 and H_2SO_4</td><td>(i) Butanal</td></tr> <tr> <td>(b) Propanenitrile hydrolysed after reduction in the presence of stannous chloride and hydrochloric acid</td><td>(ii) 2-Chloro-2-phenylacetic acid</td></tr> <tr> <td></td><td>(iii) Adipic acid</td></tr> <tr> <td></td><td>(iv) Propiophenone</td></tr> </tbody> </table> <p>OR</p> <p>Aqueous hydrogen cyanide is allowed to react separately with propanone and ethanal. In which case will the rate of reaction be faster and why?</p>	Reactants	Products	(a) Cyclohexene heated in the presence of KMnO_4 and H_2SO_4	(i) Butanal	(b) Propanenitrile hydrolysed after reduction in the presence of stannous chloride and hydrochloric acid	(ii) 2-Chloro-2-phenylacetic acid		(iii) Adipic acid		(iv) Propiophenone
Reactants	Products										
(a) Cyclohexene heated in the presence of KMnO_4 and H_2SO_4	(i) Butanal										
(b) Propanenitrile hydrolysed after reduction in the presence of stannous chloride and hydrochloric acid	(ii) 2-Chloro-2-phenylacetic acid										
	(iii) Adipic acid										
	(iv) Propiophenone										
21	<p>Glucose does not give a positive result with the Schiff's reagent in the Schiff's test. Based on the above information</p> <p>(a) Give a reason for the observation.</p> <p>(b) What type of carbonyl group is present in a glucose molecule?</p>										

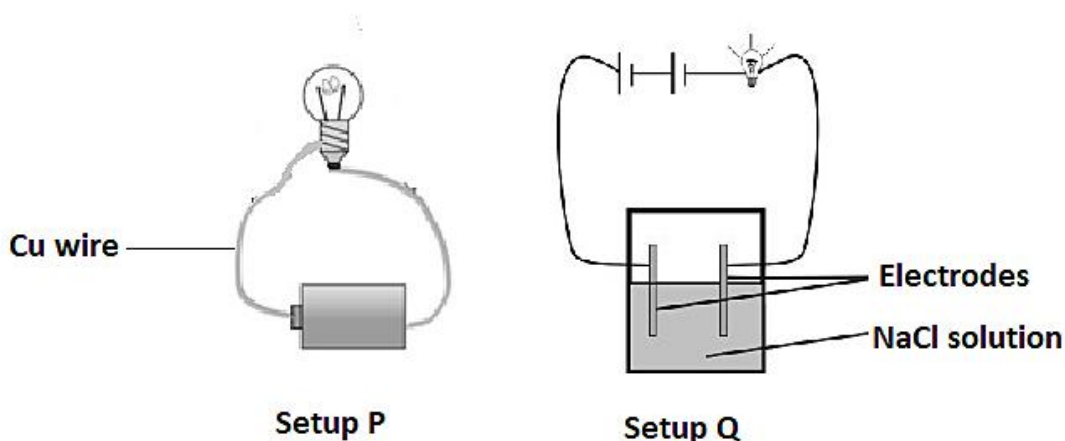
Section C

This section contains 7 questions with internal choice in one question. The following questions are short answer type and carry 3 marks each

- 22 A metal (M) forms two different compounds O and P with two different ligands. Ligand present in compound O is Cl^- and that in compound P is CN^- . The metal M has 4 electrons in the d orbital. Complete the table given below based on the above information:

	Compound O	Compound P
Field strength of the ligands		
Electronic configuration for metal M in the complex		
Type of complex that will be formed (High spin/low spin)		

- 23 Abhisrija arranged two setups P and Q as shown below.



Both experiments are carried out at 25°C .

- Name the current carriers in setup P and Q.
- What is the effect of an increase in temperature on the conductivity of NaCl solution and Cu wire?
- What happens to the chemical composition of NaCl and Cu wire when current is passed through both setups for a prolonged period of time?

- 24 Draw the structure of:



	<p>(a) 3-Methylphenol</p> <p>(b) 2,4,6-Trinitrophenol</p> <p>(c) Benzene-1,3-diol</p>
25	<p>(a) If acetaldehyde, propane, propanone, acetic acid, and ethyl alcohol are arranged in the increasing order of their boiling points, which two compounds are expected to be at the third and the fourth position?</p> <p>(b) The resonance structures of the carboxylic acid group are shown below, which of them is the most stable and why?</p> <div style="text-align: center;"><p>(1) (2) (3)</p></div>
26	<p>(a) Write a balanced equation for the reaction between glucose and hydrogen cyanide. What inference can we draw from it?</p> <p>(b) Samta reacted glucose with acetic anhydride. Will the reaction help her to determine the number of secondary alcoholic groups and the number of primary alcoholic groups that are present in a glucose molecule? Justify your answer.</p>
27	<p>Three sets of pairs (i) and (ii) of S_N1 reactions are given below. For each set of reactions state which reaction (i) or (ii) is expected to be slower? Justify your answer.</p> <p>(a) (i) $(CH_3)_3CCl + CH_3CH_2O^- \rightarrow (CH_3)_3COCH_2CH_3 + Cl^-$ [In presence of ethanol]</p> <p>(ii) $(CH_3)_3CCl + 2 CH_3CH_2O^- \rightarrow (CH_3)_3COCH_2CH_3 + Cl^-$ [In presence of ethanol]</p> <p>(b) (i) $(CH_3)_3CCl + H_2O \rightarrow (CH_3)_3COH + HCl$</p> <p>(ii) $(CH_3)_3CBr + H_2O \rightarrow (CH_3)_3COH + HBr$</p> <p>(c) (i) $(CH_3)_3CCl + H_2O \rightarrow (CH_3)_3COH + HCl$</p> <p>(ii) $C_6H_5Cl + H_2O \rightarrow C_6H_5OH + HCl$</p>
28	<p>(a) Write any four methods to increase the rate of a reversible reaction in the forward direction.</p> <p>(b) What is the unit for rate of reaction in SI units?</p>



Section D

The following questions are case -based questions. Each question has an internal choice and carries 4 marks.

- 29 One of the most distinctive properties of transition metal complexes is their wide range of colours. This means that some of the visible spectrum is being removed from white light as it passes through the sample, so the light that emerges is no longer white. The colour of the complex is complementary to that which is absorbed. The complementary colour is the colour generated from the wavelength left over; for example, if green light is absorbed by the complex, the complex appears red.

The colour of a co-ordination compound depends on two factors:

- presence of ligands: For example, anhydrous CuSO_4 is white, but $\text{CuSO}_4 \cdot 5\text{H}_2\text{O}$ is blue in colour.

- influence of ligands: If ligands like 'en' are added to $[\text{Ni}(\text{H}_2\text{O})_6]^{2+}$ in the molar ratios en: Ni, 1:1, 2:1, 3:1 a series of reactions and their associated colour changes occur.

(a) Give an example of another complex that shows properties similar to those shown in the compound of Cu mentioned above.

What is the geometry of the central metal atom of this complex?

(b) What is the type of ligand added above to $[\text{Ni}(\text{H}_2\text{O})_6]^{2+}$ to demonstrate the influence of ligand on colours of complex compounds?

(c) Complete the table given below:

en:N i	Colour absorbed
2:1	
3:1	

OR

en:N i	Formula of the ion formed
1:1	
3:1	

- 30 Conductivity measurements are used routinely in many industrial and environmental applications as a fast, inexpensive and reliable way of measuring the ionic content in a solution.



	<p>For example, the measurement of conductivity is a typical way to monitor and continuously trend the performance of water purification systems.</p> <p>In many cases, conductivity is linked directly to the total dissolved solids (TDS). High quality deionized water has a conductivity of about 5×10^{-6} S/m at STP, typical drinking water is in the range of 0.02–0.08 S/m, while sea water is about 5 S/m.</p> <p>According to research, the TDS in a sample of fresh water can be calculated as $\text{TDS (mg/L)} = 10^4 \times 0.65 \times \text{conductivity (S/m)}$.</p> <p>The conductivity of a sample of water taken from a borewell is given as 0.13 S/m at STP.</p> <p>A conductivity cell is created using the water above. The resistance of the cell is found to be 10 ohms.</p> <p>(a) What is the cell constant of the cell given above?</p> <p>(b) What is the amount of TDS in the sample of water taken?</p> <p>(c) According to some studies TDS of 250 mg/L represents a good source of drinking water. What would the conductivity of such a sample of water be? If such water was made by diluting the sample of water given above, what would be the resistance of a conductivity cell made using that?</p> <p>OR</p> <p>If the resistance of a cell made from diluting the sample of water taken above was found to be 79 ohms, calculate the TDS of the new sample.</p>
--	--

Section E

<p><i>The following questions are long answer type and carry 5 marks each. All questions have an internal choice.</i></p>	
31	<p>Answer any five questions with respect to the series of ions given below: $\text{Sc}^{+3}, \text{Ti}^{+4}, \text{V}^{+4}, \text{V}^{+2}, \text{Cr}^{+2}, \text{Fe}^{+3}, \text{Ni}^{+2}, \text{Cu}^{+2}, \text{Zn}^{+2}$</p> <p>(a) Which of these ions are isoelectronic?</p> <p>(b) Why do $\text{Sc}^{+3}, \text{Ti}^{+4}$, and Zn^{+2} form colourless aqueous solution?</p> <p>(c) Which ion(s) from the list is/are not transition element(s) and why?</p> <p>(d) Cr forms two types of oxides - Cr^{+2} and Cr^{+3}. Which of them is expected to turn red litmus blue?</p> <p>(e) Arrange the following ions in the increasing order of their magnetic moments: $\text{Sc}^{+3}, \text{V}^{+2}, \text{V}^{+4}, \text{Ni}^{+2}$.</p> <p>(f) Why are alloys mostly prepared from transition metals?</p> <p>(g) Which ion can also has a +1 oxidation state?</p>



	[Atomic number of: Sc =21, Ti =22, V =23, Cr=24, Fe=26, Ni=28, Cu=29, Zn=30]												
32	<p>The following table contains osmotic pressure data for three compounds dissolved in various solvents.</p> <table><tr><th>Compound</th><th>Concentration, C (g/L)</th><th>Osmotic pressure (atm)</th></tr><tr><td>Cellulose</td><td>12.5</td><td>0.0021</td></tr><tr><td>Protein</td><td>28.5</td><td>0.0026</td></tr><tr><td>Haemoglobin</td><td>5</td><td>0.0018</td></tr></table> <p>(R = 0.083 L bar mol⁻¹ K⁻¹)</p> <p>(a) If the concentration of protein is doubled keeping all other variables constant, what will be the osmotic pressure of the new solution?</p> <p>(b) When one litre of cellulose solution was heated to 315 K, its osmotic pressure changed to 0.00248 atm. What is the molecular mass of the cellulose in the solution?</p> <p>(c) A solution of 10 g of protein in a litre of solvent was found to be isotonic to the haemoglobin solution given above in the table, at the same temperature. If the molecular weight of the protein is 130,000 g/mol, what is the molecular weight of haemoglobin.</p> <p>OR</p> <p>The relation between the osmotic pressure of three solutions A, B, and C is:</p> <p>$\pi_B < \pi_C$ $\pi_C > \pi_A$ $\pi_A > \pi_B$</p> <p>The three solutions have the same molarity and are at the same temperature.</p> <p>(a) For which of the solutions is the value of 'i' expected to be the greatest? Give a reason.</p> <p>(b) Which of the solutions is MOST LIKELY to be glucose, potassium sulphate, and sodium chloride?</p> <p>(c) Which of the solutions is expected to give a vapour pressure-mole fraction graph similar to that of an acetone-chloroform mixture? Give reason.</p>	Compound	Concentration, C (g/L)	Osmotic pressure (atm)	Cellulose	12.5	0.0021	Protein	28.5	0.0026	Haemoglobin	5	0.0018
Compound	Concentration, C (g/L)	Osmotic pressure (atm)											
Cellulose	12.5	0.0021											
Protein	28.5	0.0026											
Haemoglobin	5	0.0018											
33	<p>The compound C₆H₅NHCOCH₃ is obtained when compound A reacts with acetic anhydride in presence of pyridine. This compound A does not undergo Friedel-Crafts reaction.</p> <p>(a) Write the reaction showing the formation of C₆H₅NHCOCH₃ from compound A.</p> <p>(b) The pH of the aq. solution of A is less than 7. Is this statement true? Give reason.</p> <p>(c) State what type of functional group can be introduced into compound A, that will:</p> <p>(i) increase the pH of the aqueous solution</p>												



	<p>(ii) decrease the pH of the aqueous solution</p> <p>(d) What do you observe when compound A reacts with bromine water at room temperature?</p> <p>OR</p> <p>Parul was given two test tubes. One of the test tubes contained ethyl amine and the other contained aniline. To distinguish between the two compounds, she adds a reagent X to both the test tubes. She observes that in only one of the test tubes a yellow dye is formed.</p> <p>(a) Identify the reagent X.</p> <p>(b) Describe how this reagent is prepared and give a reason why it is not readily available in a laboratory.</p> <p>(c) Which of the two compounds forms the yellow dye?</p> <p>(d) Draw the structure of the yellow dye formed.</p>



CBSE

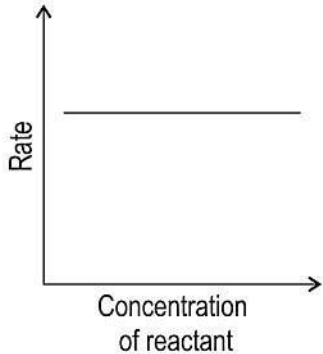
Additional Practice Questions - Marking Scheme

Subject: Chemistry Theory (043)

Class: XII 2023-24

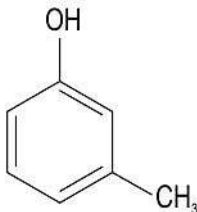
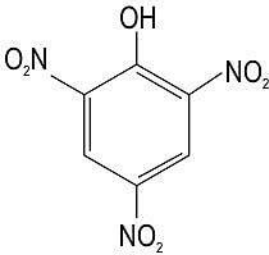
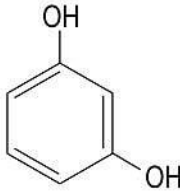
Section A	
1	(c) Zinc is deposited at the zinc electrode and copper dissolves at copper electrode in case (P).
2	(b) Compound M is an aldehyde and compound N is a ketone.
3	(a) Team A wins the quiz as both the responses are correct.
4	(d) sp^2 to sp^3
5	(c) C_2H_5Br
6	(a) Cu
7	(a) $k[P]^2[Q]$
8	(d) Oxygen > Hydrogen > Nitrogen > Helium
9	(b) phenol, acetic acid, benzoic acid, 2, 4, 6 - Trinitrophenol
10	(c) 13,300 years
11	(b) acetylation of salicylic acid in presence of an acid
12	(b) atomic radii of 3d < atomic radii of 4d \approx atomic radii of 5d
13	(c) A is true, but R is false.
14	(a) Both A and R are true, and R is a correct explanation of A.



15	(b) Both (A) and (R) true but (R) is not the correct explanation of (A).
16	(c) A is true, but R is false.
Section B	
17	<p>(a) 1 mark for the correct graph:</p>  <p>(b) The rate of the reaction is independent of the concentration of the reactant. Therefore, the reaction is a zero-order reaction. [1 mark]</p>
18	<p>The method based on osmotic pressure is preferred over others for determining molar masses of biomolecules.</p> <p>It is preferred for biomolecules as the pressure measurement is done around room temperature and biomolecules are generally not stable at higher temperatures.</p> <p><i>[Give 1 mark for identifying the correct property and 1 mark for the correct reason. Students may write the answer in their own words.]</i></p>
19	<p>The C-Cl bond in $\text{CH}_3\text{CH}_2\text{CH}_2\text{Cl}$ is longer than C-Cl bond in $\text{C}_6\text{H}_5\text{Cl}$. [1 mark]</p> <p>Reason:</p> <ul style="list-style-type: none">- The C-atom of C-Cl bond in $\text{CH}_3\text{CH}_2\text{CH}_2\text{Cl}$ is sp^3 hybridised while that in $\text{C}_6\text{H}_5\text{Cl}$ is sp^2 hybridised. <p>So the C-Cl bond in $\text{CH}_3\text{CH}_2\text{CH}_2\text{Cl}$ is longer than in $\text{C}_6\text{H}_5\text{Cl}$.</p> <p>OR</p> <ul style="list-style-type: none">- The C-Cl bond in chlorobenzene has a partial double bond character due to resonance. So, the C-Cl bond in chlorobenzene is shorter than in $\text{CH}_3\text{CH}_2\text{CH}_2\text{Cl}$. [1 mark]



20	<table><tr><th>Reactant s</th><th>Products</th></tr><tr><td>(a)</td><td>(iii)</td></tr><tr><td>(b)</td><td>(i)</td></tr></table> <p>[Give 1 mark for each correct match]</p> <p>OR</p> <p>The rate of reaction will be faster in ethanal. In propanone, the presence of the two methyl groups causes steric hindrance that reduces the access of the nucleophile toward the carbonyl C. This is not the case for ethanal. Hence the rate of reaction will be faster with ethanal than with propanone.</p> <p>[Give 1 mark for identifying the compound which will react faster and 1 mark for the reason. Students may write the answer in their own words.]</p>	Reactant s	Products	(a)	(iii)	(b)	(i)						
Reactant s	Products												
(a)	(iii)												
(b)	(i)												
21	<p>(a) The -OH group present on the C5 atom in the glucose molecule forms a six-membered ring with the -CHO group to form a cyclic hemiacetal structure. Thus, glucose does not give a positive result with the Schiff's reagent in the Schiff's test. [1 mark]</p> <p>(b) The carbonyl group present in glucose is aldehydic. [1 mark]</p>												
Section C													
22	<table><tr><td></td><td>Compound O</td><td>Compound P</td></tr><tr><td>Field strength of the ligands</td><td>weak field ligand</td><td>strong field ligand</td></tr><tr><td>Electronic configuration for metal M in the complex</td><td>t_{2g}^3, e_g^1</td><td>t_{2g}^4, e_g^0</td></tr><tr><td>Type of complex that will be formed (High spin/low spin)</td><td>high spin</td><td>low spin</td></tr></table> <p>[Give 0.5 marks for each correct answer]</p>		Compound O	Compound P	Field strength of the ligands	weak field ligand	strong field ligand	Electronic configuration for metal M in the complex	t_{2g}^3, e_g^1	t_{2g}^4, e_g^0	Type of complex that will be formed (High spin/low spin)	high spin	low spin
	Compound O	Compound P											
Field strength of the ligands	weak field ligand	strong field ligand											
Electronic configuration for metal M in the complex	t_{2g}^3, e_g^1	t_{2g}^4, e_g^0											
Type of complex that will be formed (High spin/low spin)	high spin	low spin											
23	<p>(a) - The current carriers in setup P are free mobile electrons. - The current carriers in setup Q are ions present in the solution. [Give 0.5 marks for each correct answer]</p>												

	<p>(b) - In NaCl solution conductivity rises with a rise in temperature. - In Cu wire, the conductivity reduces with a rise in temperature. <i>[Give 0.5 marks for each correct answer]</i></p> <p>(c) - When current is passed through the setup Q for prolonged time, the chemical composition changes due to electrochemical reactions. - When current is passed through setup P for prolonged time, the chemical composition remains the same. <i>[Give 0.5 marks for each correct answer]</i></p>
24	<p>(a) The structure of 3-Methylphenol is</p>  <p>(b) The structure of 2,4,6-Trinitrophenol is</p>  <p>(c) The structure of Benzene-1,3-diol is</p>  <p><i>[Give 1 mark for each correct answer]</i></p>
25	<p>(a) Acetaldehyde and ethyl alcohol are expected to be at the third and the fourth positions respectively. <i>[Give 0.5 marks for each correct answer.]</i></p>



	<p>(b) The structure (3) is most stable. This is because structure (3) has all the atoms with a complete octet or duplet in case of hydrogen. (Give 1 mark each for the explanation and identification of the most stable resonance structure.)</p>
26	<p>(a) The balanced reaction between glucose and hydrogen cyanide is:</p> $\begin{array}{c} \text{CHO} \\ \\ (\text{CHOH})_4 \\ \\ \text{CH}_2\text{OH} \end{array} \xrightarrow{\text{HCN}} \begin{array}{c} \text{CH} \begin{array}{l} \nearrow \text{CN} \\ \searrow \text{OH} \end{array} \\ \\ (\text{CHOH})_4 \\ \\ \text{CH}_2\text{OH} \end{array}$ <p>The inference drawn from the above reaction is that glucose contains a carbonyl group in it.</p> <p>[Give 0.5 marks each for the correct structural formula of glucose and the product formed. Name of the product is not required, and 1 mark for the correct inference]</p> <p>(b)</p> <ul style="list-style-type: none">- The reaction will not help her to determine the number of secondary alcoholic groups and the number of primary alcoholic groups in a glucose molecule. [0.5 marks]- The primary and secondary alcoholic groups in a glucose molecule, both undergo acetylation with acetic anhydride. [0.5 marks]
27	<p>1 mark for each of the following:</p> <p>(a) Both the reactions occur at the same rate as $\text{S}_{\text{N}}1$ reactions are independent of the concentration of the nucleophile.</p> <p>(b) The reaction (i) will be slower as Br^- is a better leaving group than Cl^-.</p> <p>(c) Reaction (ii) will not occur as the C-Cl bond has a partial double bond character due to resonance.</p> <p>[No marks to be awarded if justification is not given.]</p>
28	<p>(a) 0.5 marks each for any four correct points such as:</p> <ul style="list-style-type: none">- increasing the concentration of reactants- decreasing the concentration of products- using a catalyst- carrying out the reaction at the optimum temperature. <p>[marks to be given for any other relevant point]</p> <p>(b) $\text{mol m}^{-3}\text{s}^{-1}$ [1 mark]</p>



Section D

29

(a) Another complex that shows similar properties as shown in the compound of Cu stated here is $[\text{Ti}(\text{H}_2\text{O})_6]\text{Cl}_3$. The geometry of the complex is octahedral.

[Give 0.5 marks for each correct answer. Any other correct answer to be accepted.]

(b) When a ligand can bind through two donor atoms as in the ligand 'en' added to $[\text{Ni}(\text{H}_2\text{O})_6]^{2+}$ it is said to be a didentate ligand. *[1 mark]*

(c)

en:N i	Colour absorbed
2:1	red
3:1	blue green

[Give 1 mark for each correct answer]

OR

en:N i	Formula of the ion formed
1:1	$[\text{Ni}(\text{H}_2\text{O})_4(\text{en})]^{2+}$
3:1	$[\text{Ni}(\text{en})_3]^{2+}$

[Give 1 mark for each correct answer]

30

(a) Cell constant = $10 \text{ ohms} \times 0.13 \text{ S/m} = 1.3 \text{ m}^{-1}$ *[1 mark]*

(b) $\text{TDS} = 10^4 \times 0.65 \times \text{conductivity (S/m)}$
 $\text{TDS} = 10^4 \times 0.65 \times 0.13 = 845 \text{ mg/L}$ *[1 mark]*

(c) $\text{TDS} = 10^4 \times 0.65 \times \text{conductivity (S/m)}$
 $\text{conductivity} = 250 / (10^4 \times 0.65)$
 $\text{conductivity} = 0.038 \text{ S/m}$ *[1 mark]*

$\text{conductivity} = \text{cell constant} / R$
 $R = \text{cell constant} / \text{conductivity}$
 $R = 1.3 / 0.038 = 34.2 \text{ ohms}$ *[1 mark]*



	<p>OR</p> <p>$R = \text{cell constant/conductivity}$ $\text{conductivity} = 1.3/79$ $\text{conductivity} = 0.016 \text{ S/m}$ [1 mark]</p> <p>$\text{TDS} = 10^4 \times 0.65 \times \text{conductivity}$ $\text{TDS} = 10^4 \times 0.65 \times 0.016$ $\text{TDS} = 104 \text{ mg/L}$ [1 mark]</p>
Section E	
31	<p>(a) Sc^{+3} and Ti^{+4} are isoelectronic with 18 electrons in them. [Give 1 mark for the correct answer]</p> <p>(b) Colour of coordination compounds arise due to the d-d transitions. Sc^{+3} and Ti^{+4} ions do not have any electrons in their 3d orbitals and Zn^{+2} has fully filled 3d orbital. So, d-d transitions do not occur in these ions and thus they are colourless. [Give 1 mark for the correct answer]</p> <p>(c) Zn^{+2} ion from the list is not an ion of a transition metal because it has a complete $3d^{10}$ orbital. It cannot lose any electron from the $3d^{10}$ and they are all paired. So, it is not a transition metal ion. [Give 1 mark for identifying the correct ion and the reason together]</p> <p>(d) CrO is expected to turn red litmus blue as it is basic in nature. [Give 1 mark for the correct answer]</p> <p>(e) The increasing order of the magnetic moments of the given ions are: Sc^{+3}, V^{+4}, Ni^{+2}, V^{+2} [Give 1 mark for the correct answer]</p> <p>(f) The transition metals have similar radii. Hence, alloys are readily formed by these metals. [Give 1 mark for the correct answer].</p> <p>(g) Cu ion can also have a +1 oxidation state. [Give 1 mark for the correct answer].</p>



32

a) Osmotic pressure = CRT

If the concentration is doubled without a change in temperature, the osmotic pressure also will be doubled. Thus, osmotic pressure of the new solution will be 0.0052 atm. (1 mark)

b) $M = wRT/(\pi V)$, where w is the mass of the solute taken, V is the volume of the solution taken. In one liter of solution, there are 12.5 g of solute

$$\therefore M = 12.5 \text{ g} \times 0.083 \text{ L bar mol}^{-1} \text{ K}^{-1} \times 315 \text{ K} / ((0.00248 \times 1.01 \text{ bar})(1 \text{ L}))$$

$$M = 130,474 \text{ g mol}^{-1} \text{ (1 mark for correct formula, 1 mark for the correct answer)}$$

c) $M_1 = w_1RT/(\pi_1V_1)$ - (1) for haemoglobin

$M_2 = w_2RT/(\pi_2V_2)$ - (2) for protein [1 mark]

For isotonic solutions, osmotic pressure is equal.

Dividing we get,

$$M_2/M_1 = (C_2RT)/(C_1RT), \text{ where } C_1 = w_1/V_1 \text{ and } C_2 = w_2/V_2$$

$$130000/M_1 = 10/5$$

$$\therefore M_1 = 65000 \text{ g/mol [1 mark]}$$

OR

(a) The value of 'i' is expected to be the highest for solution C. From the given relations we can conclude that

$$\pi_C > \pi_A > \pi_B$$

Since the osmotic pressure of solution C is the highest, therefore the value of 'i' will be highest in solution C.

[Give 1 mark each for the correct order and the reason]

(b) Solution C is most likely to be potassium sulphate.

Solution A is most likely to be sodium chloride.

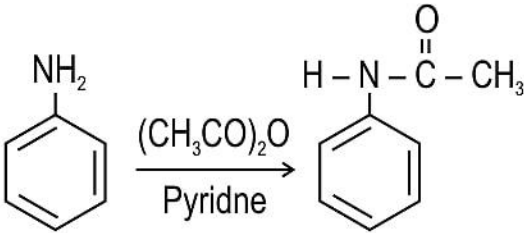
Solution B is most likely to be glucose.

[Give 0.5 marks for each correct identification]

(c) Solution B is most likely to give a vapour pressure-mole fraction graph similar to that of an acetone-chloroform mixture.

[Give 0.5 marks for the correct answer]

Acetone-chloroform solution has strong H-bonding in it. H-bonding is seen only in the glucose solution but not in the potassium sulphate and sodium chloride

	<p>solutions. Hence, it is expected to give a vapour pressure-mole fraction graph similar to that of an acetone-chloroform mixture. <i>[Give 1 mark for correct answer]</i></p>
33	<p>(a) The reaction is:</p> <div style="text-align: center;">  </div> <p>Compound A <i>[Give 1 mark for the correct reaction.]</i></p> <p>(b) The given statement is not correct. Compound A is aniline. The presence of a lone pair of electrons on the N-atom makes it a Lewis base. So, the pH of the aq. solution of aniline is always more than 7. <i>[Give 1 mark for the correct explanation. Students can write the answer in their own words]</i></p> <p>(c) 1 mark each for the following:</p> <p>(i) introducing electron releasing groups like -OCH₃ and -CH₃</p> <p>(ii) introducing electron withdrawing groups like -NO₂ and -COOH</p> <p>(d) Aniline reacts with bromine water at room temperature to give a white precipitate of 2,4,6-tribromoaniline. <i>[Give 1 mark for the correct observation. Name of the product formed may not be written. Students can write the answer in their own words]</i></p> <p>OR</p> <p>(a) Benzenediazonium chloride (b) 1 mark each for the following:</p> <ul style="list-style-type: none"> - Benzenediazonium chloride is prepared by adding sodium nitrite to a mixture of aniline in hydrochloric acid at 0 °C - 5 °C. - Benzenediazonium chloride is very unstable and therefore is prepared and used immediately. <p>(c) Aniline reacts with the reagent to form the yellow dye.</p>

