

Student's Name Mission Adventures

Today's exploration missions at _____, on

_____.
(date)


(location)

1 Understanding the Game

Answer in short sentences or choose from the word bank

Word Bank: paddle • serve • score • teamwork • rules


1. What is the job of the paddle?

 _____

2. What does it mean to serve the ball?

 _____

3. Why are rules important in a game like Pickleball?

 _____

2 Planning & Executive Functioning

Put the steps in the correct order

Write 1–4 next to each step.

Check the court is safe

Get equipment

Warm up your body

Start the game

Question:

What could happen if you skip warming up?

 _____

Student's Name Mission Adventures

Today's exploration missions at _____, on

_____.
(date)

(location)

Budgeting at the Gift Shop or Café

You have \$15 to spend.

Item	Price	Buy? (Yes/No)
Snack	\$4	<input type="checkbox"/>
Drink	\$3	<input type="checkbox"/>
Souvenir	\$8	<input type="checkbox"/>

1. Total spent: \$_____

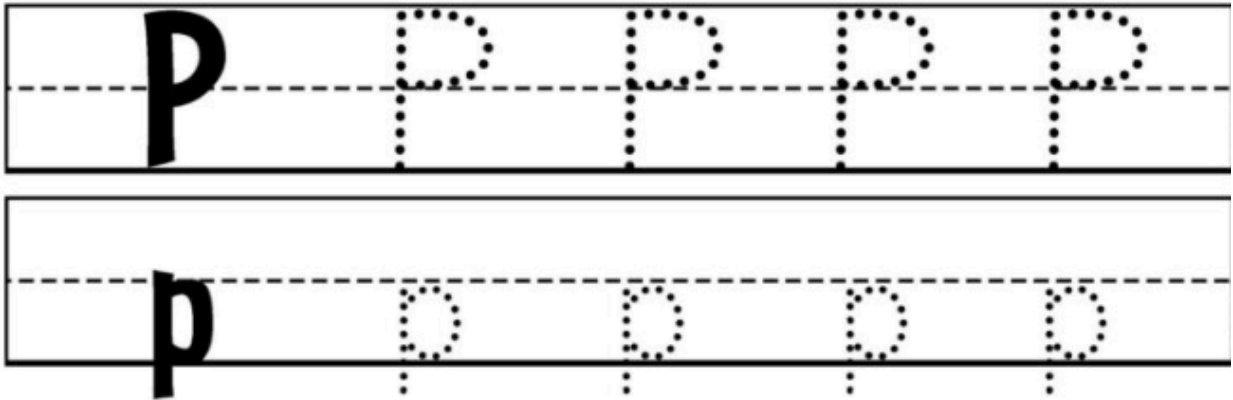

Money left: \$_____

Student's Name Mission Adventures

Today's exploration missions at _____, on

_____ (location)

_____ (date)



Trace it, circle it, color it.



Student's Name Mission Adventures

Today's exploration missions at _____, on

_____.
(date)

(location)

4. Social Skills at the Counter

What should you say when you pay for your candy?

- A. Nothing
 - B. "Thank you"
 - C. "Give me candy"
 - D. Walk away
-

5. Making Smart Choices

Two candies cost:

- Gummy worms: \$9 per pound
- Chocolate almonds: \$14 per pound

Which candy is cheaper per pound?

- A. Gummy worms
- B. Chocolate almonds
- C. Both cost the same
- D. I don't know

Student's Name Mission Adventures

Today's exploration missions at _____, on

_____.
(date)

(location)

Mission 1

10 points



Identify the following:

Measure the water temperature in fahrenheit AND in celsius in 2 different spots.

Spot 1 _____

Spot 2 _____

What instrument would you use?

Take a picture of 3 instruments, or tools, that measure.

How much is 78 degree fahrenheit in degrees celsius?

What is the freezing temperature in fahrenheit versus celsius?

What is something about measuring temperature that you wonder?

Now, go find the answer.

Mission 2

10 points



Locate, read, and summarize using only key words (1-2 important, key words per sentence) for 3 informational signs. (These may not be menus or entrance information)

What part of speech were the key words you chose- nouns, verbs, adjectives, or adverbs?

What makes these signs informational?

Why did you choose these signs in particular?

Student's Name Mission Adventures


Today's exploration missions at _____, on

_____.
(date)

_____.
(location)

Mission 3

10 points



Identify the following:

The perimeter of _____.

It's area. _____

It's volume. _____

Draw a to scale drawing of _____ using the attached graph paper.
(1 block = 1 foot)

Mission 4

10 points



During our briefing, we discussed the time period.

Looking around, is there any evidence you can find that might signify the time period?

Create a 5-7 minute video explaining how this location is tied to the time period we discussed. Plan it out before you video.

What might have been happening in different spots during that time that is different than it is now?