

--	--	--	--	--	--	--	--

Name _____

Fox Friends

Addition

Directions: Fill in the sum. Color the pictures.

$2+6 = \square$	$8+2 = \square$
$5+4 = \square$	$3+4 = \square$
$1+3 = \square$	$7+2 = \square$
$3+7 = \square$	$6+4 = \square$
$4+4 = \square$	$5+0 = \square$
$6+3 = \square$	$4+2 = \square$
$3+2 = \square$	$4+4 = \square$
$2+1 = \square$	$2+5 = \square$

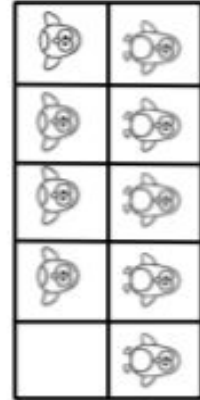
A Tracing program product ©2011 by Amy Wilson. All rights reserved.

Addition and Subtraction 1-10

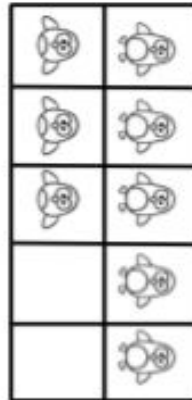
Name _____

Solve the addition problems. Use the pictures for help.

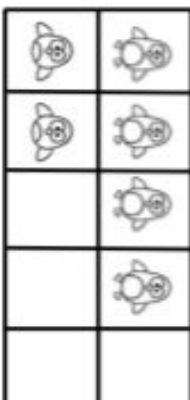
$$5 + 4 =$$



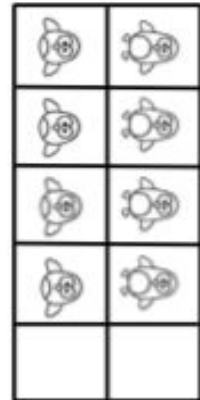
$$5 + 3 =$$



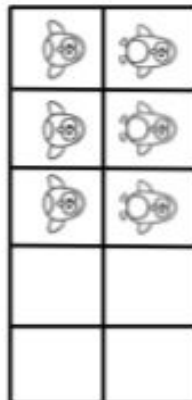
$$4 + 2 =$$



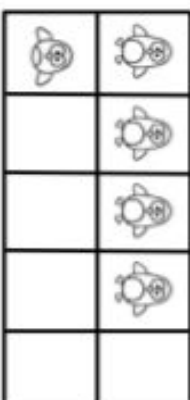
$$4 + 4 =$$



$$3 + 3 =$$



$$4 + 1 =$$



Name _____

Date _____

Adding

Count the two sets of objects on each line.
Write the sum (total number of objects) on the line.

+	=	
+	=	
+	=	
+	=	
+	=	
+	=	

Name _____

Date _____

Adding to 5

+	=	
$2 + 1 =$		
+	=	
$1 + 4 =$		
+	=	
$2 + 2 =$		
+	=	
$3 + 2 =$		
+	=	
$4 + 1 =$		