



Menu
Kindergarten Math



[Click Here For User Guide](#)

[Click Here For User Guide](#)

Practice Units



<u>Item</u>	<u>Domain</u>	<u>TEKS</u>
1. Counting Forward and Backward	1	K.2A
2. Match Numbers and Objects	1	K.2B
3. Writing Numerals	1	K.2B, C
4. Naming Objects	1	K.2C, E; .6A
5. Comparing Numbers	1	K.2D
6. Counting/Comparing Objects	1	K.2D, I
7. Greater Than, Less Than and Equal Numbers I	1	K.2E
8. Greater Than, Less Than and Equal Numbers II	1	K.2G
9. Greater Than, Less Than and Equal Numbers III	1	K.2G
10. Counting Up and Down	1	K.2F
11. Using Symbols	1	K.2H; 3A
12. Number Combinations	1	K.2I
13. Add and Match To Objects	1	K.3A
14. Add and Subtract Models	1	K.3A
15. Add and Subtract With Words	1	K.3B
16. Adding Up To Ten	1	K.3A
17. Adding Up To More Than Ten	1	K.3A
18. Add/Subtract and Match to Objects	1	K.3A, C
19. Add/Subtract Up To Ten Match	1	K.3A
20. Add Up To Ten Match	1	K.3A
21. Add With a Number Line	1	K.3A
22. Subtract and Match To Objects	1	K.3A, C
23. Subtract Up To Ten Match	1	K.3A
24. Subtract With a Number Line	1	K.3A
25. Modeling Addition	1	K.3C


26.	Knowing Coins	1	K.4A
27.	Missing Numbers To 50	2	K.5A
28.	Missing Numbers To 100	2	K.5A
29.	Number Patterns	2	K.5A
30.	Two Dimension Shapes	3	K.6A, D
31.	Two and Three Dimension Shapes	3	K.6A, B, C, D, E
32.	Parts Of A Picture	3	K.6F
33.	Shapes In A Picture	3	K.6F
34.	Comparing Sizes	3	K.7A
35.	Comparing Objects	3	K.7B
36.	Making A Chart	4	K.8A, B, C
37.	Reading A Chart	4	K.8A, B
38.	Earnings, Gifts and Skills	5	K.9A, B, C
39.	Need Or Want	5	K.9D


Name: _____

Date: _____

S/N 509

1. Count the number of dots in each block and write the number on the line below each of them.





Which of the two numbers is bigger?


Write the word for the bigger number




Write the word for the smaller number



2. Count the number of x's in each frame and write the number on the line below each of them.





Which of the two numbers is bigger?

Write the word for the bigger number



Write the word for the smaller number




Teacher Key

S/N 509


TEKS K.2D

Domain 1

1. Count the number of dots in each block and write the number on the line below each of them.



7



3

Which of the two numbers is bigger?

7

Write the word for the bigger number




Seven

Write the word for the smaller number




Three

2. Count the number of x's in each frame and write the number on the line below each of them.



7



3

Which of the two numbers is bigger?

7

Write the word for the bigger number



Seven

Write the word for the smaller number



Three