

Word Problem Intervention

By Numeracy Consultants

Level 2



Addition and Subtraction to 1,000

Addition / Subtraction
Result Unknown to 100

Addition / Subtraction
Change/Part Unknown to 100

Addition / Subtraction
Start Unknown to 100

Comparison
Difference Unknown to 100

Larger / Smaller
Quantity Unknown to 100

Addition / Subtraction
Result Unknown to 1,000

Addition / Subtraction
Change/Part Unknown to 1,000

Addition / Subtraction
Start Unknown to 1,000

Comparison
Difference Unknown to 1,000

Larger / Smaller
Quantity Unknown to 1,000

Individual License

Free Supplement:
NumeracyConsultants.net

Any use of this elibrary by anyone besides the individual named above is a violation of the user agreement and will be copyright infringement.


info@numeracyconsultants.net



To purchase the remainder of
this resource please visit

www.numeracyconsultants.net/store

CUBS Strategy




Read the Problem and Comprehend

Say what is happening in your own words.



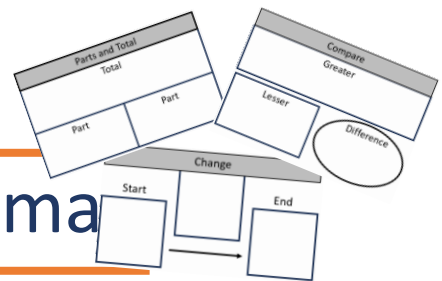
Reread the Problem and Understand the Schema?

Is problem dealing with a total, parts, change, compare, equal groups?



Reread and

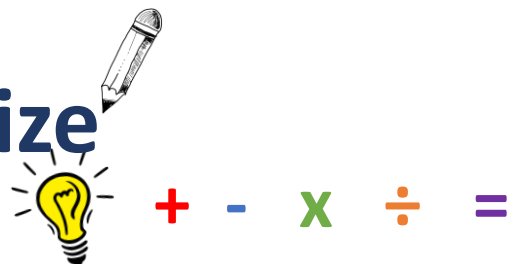
Build the Schema




Build the problem using a graphic organizer.



Summarize and Solve



CUBS Strategy



Read the Problem and Comprehend

Say what is happening in your own words.



Reread the Problem and Understand the Schema?

Is problem dealing with a total, parts, change, compare, equal groups?

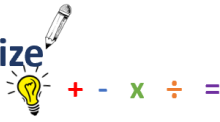


Reread and Build the Schema

Build the problem using a graphic organizer.



Summarize and Solve



©Numeracy Consultants LLC

CUBS Strategy



Read the Problem and Comprehend

Say what is happening in your own words.



Reread the Problem and Understand the Schema?

Is problem dealing with a total, parts, change, compare, equal groups?

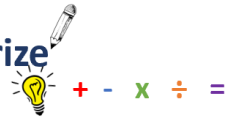


Reread and Build the Schema

Build the problem using a graphic organizer.




Summarize and Solve



©Numeracy Consultants LLC

CUBS Strategy



Read the Problem and Comprehend

Say what is happening in your own words.



Reread the Problem and Understand the Schema?

Is problem dealing with a total, parts, change, compare, equal groups?

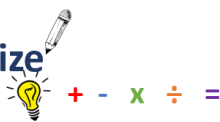


Reread and Build the Schema

Build the problem using a graphic organizer.



Summarize and Solve



©Numeracy Consultants LLC

CUBS Strategy



Read the Problem and Comprehend

Say what is happening in your own words.



Reread the Problem and Understand the Schema?

Is problem dealing with a total, parts, change, compare, equal groups?

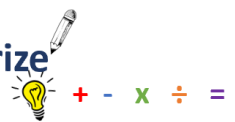


Reread and Build the Schema

Build the problem using a graphic organizer.



Summarize and Solve



©Numeracy Consultants LLC

CUBS Strategy — Classroom Implementation Guide

Step-by-step guide for teaching math word problems

C

STEP 1 · COMPREHEND

Read the problem — understand what's happening

→ Read the problem aloud together, then ask: "What is this problem about? Tell me in your own words."

→ Circle key nouns — who or what the problem involves. No numbers yet.

→ Have students retell the story to a partner before moving on.

Tip: Resist pointing out numbers here — pure comprehension of context comes first.

U

STEP 2 · UNDERSTAND THE SCHEMA

Reread — identify the problem type

→ Reread slowly, looking for the structure of the problem. Ask: "Is something being joined, separated, compared, or split into equal groups?"

→ Underline action words (gave away, altogether, more than, each) that signal the schema.

→ Students name the type and explain why: "This is a ___ problem because ___."

Tip: This is the deepest step — spend the most time here, especially early in the year.

B

STEP 3 · BUILD THE SCHEMA

Reread — fill in the graphic organizer

→ Students select the matching graphic organizer and reread to pull out numbers and unknowns.

→ Fill in known values; write "?" for what is unknown. Model: "I know the total is 24. I don't know one part, so I write a question mark."

→ Check: does the organizer match the story? If not, revisit Step 2.

Tip: Laminated organizers with dry-erase markers are great for repeated practice.

S

STEP 4 · SUMMARIZE AND SOLVE

Write the equation — solve and check

→ Use the graphic organizer to write a number sentence. Ask: "What operation does this schema require?"


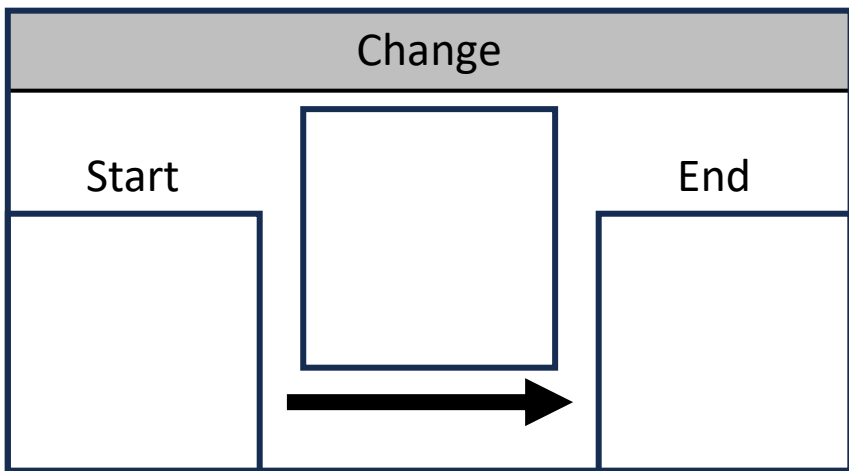
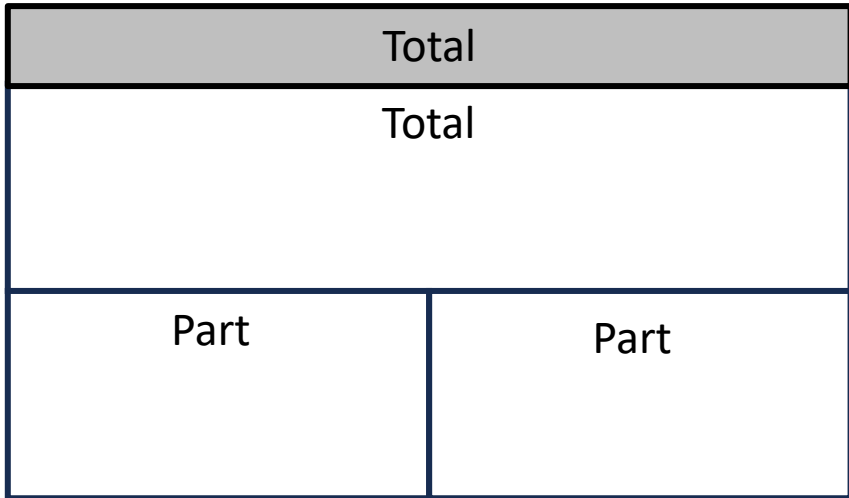
→ Solve using any strategy. Write a complete answer sentence tied to the story context.



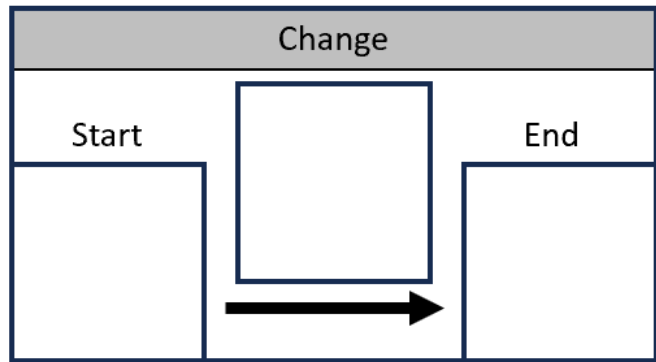
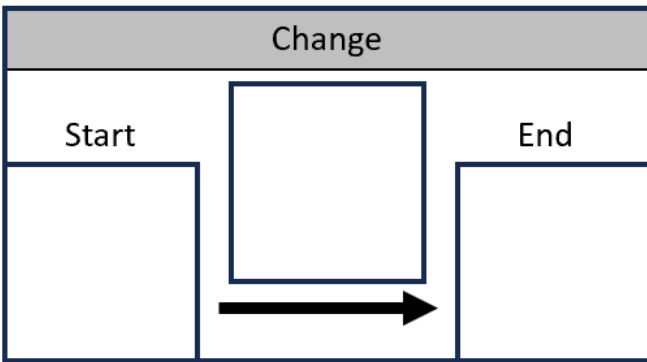
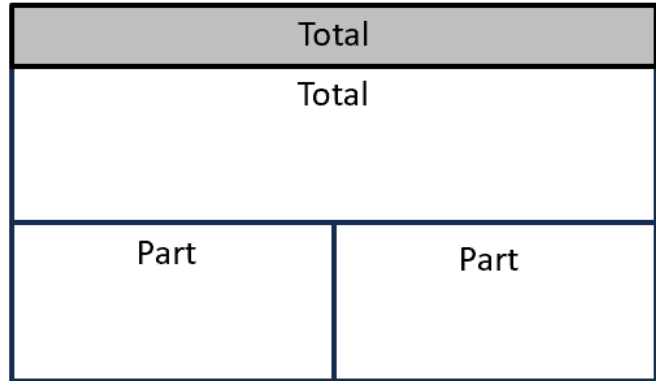
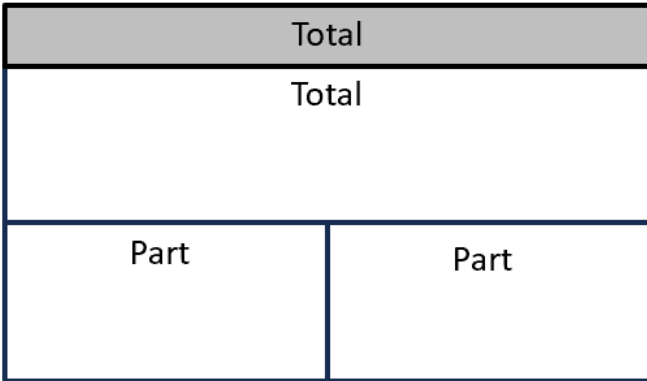
→ Check: reread the problem with the answer plugged in — does it make sense?




Tip: Require a labeled sentence every time — "There are 15 apples left." — to close the loop back to comprehension.


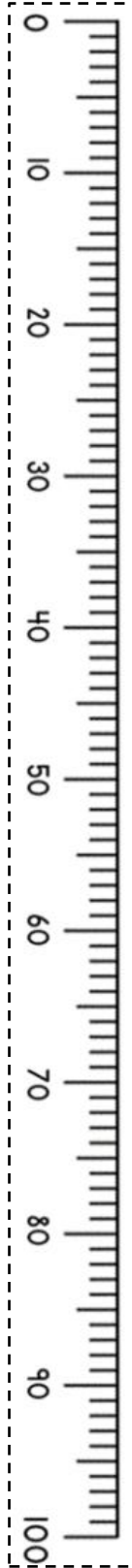
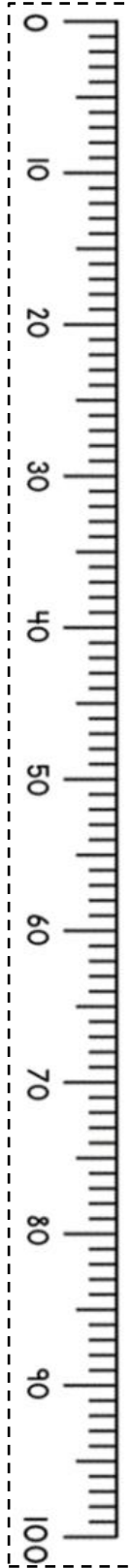
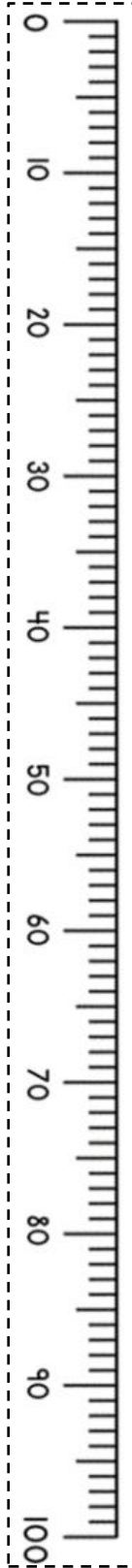

Rollout suggestion: Introduce one letter at a time over several days before using the full process. Model each step with think-alouds, then move to partner work, then independent practice. Post an anchor chart with all four steps visible throughout the unit.


Free Supplement: NumeracyConsultants.net











Addition & Subtraction Result Unknown

The result unknown section has two types of problems: change problems, where the result of the change is unknown, and total or total or combining problems, where the total of the combined parts is unknown.

(Total: Part/Part/Whole Problems):

- Total or combining problems involve situations where the result of combining the parts is unknown.
- These are sometimes referred to as part/part/whole problems because they involve breaking down a whole into parts or combining parts to find the whole.

Total: Result Unknown

Tom had 8 blue marbles and 5 red marbles. How many marbles does he have total?

$$8 + 5 = ?$$

Total	
Total	
Part	Part

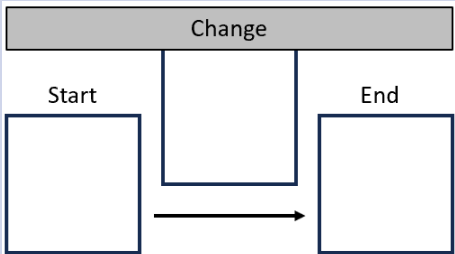
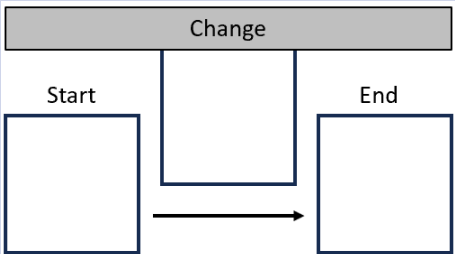
The unknown is the sum or total.

Addition & Subtraction Result Unknown

The result unknown section has two types of problems: change problems, where the result of the change is unknown, and combining problems, where the total of the combined parts is unknown.

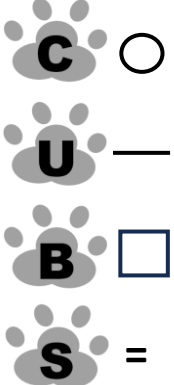


Change Problems (Joining or Separating Problems):

- In change problems, the result is unknown because some kind of change occurs, such as an increase or decrease in quantity.
- These problems often involve scenarios where items are added together (joining) or taken away from each other (separating).

Increase Change: Result Unknown	Decrease Change: Result Unknown
<p>Tom has 8 apples. Lisa gave him 5 apples. How many apples does Tom have all together?</p> <p style="text-align: center;">$8 + 5 = ?$</p>  <p>The unknown or end is the result of the change.</p>	<p>Tom has 13 apples. He gave 5 apples to Lisa. How many apples does Tom have now?</p> <p style="text-align: center;">$13 - 5 = ?$</p>  <p>The unknown or end is the result of the change.</p>

Name: _____










Free Supplement: NumeracyConsultants.net

Teacher Led	Jason has 25 pieces of candy. Sam has 43 pieces of candy.
	How many pieces of candy do they have altogether?
Teacher Guided	Cal saw 34 spiders. Fred saw 28 spiders. How many spiders
	did they see in all?
Independent Problem	Jim drew 54 pictures. Emma drew 27 pictures. How many
	pictures did they draw combined?

Main Menu

Name: _____












Free Supplement: NumeracyConsultants.net

Teacher Led	<p>There are 47 butterflies in a garden, and then 32 more butterflies flew into the garden. How many butterflies are in the garden total?</p>
 ○	
 —	
 □	
 =	
Teacher Guided	<p>In a basket, there were 35 oranges and in another basket there were 19 oranges. How many oranges are there altogether?</p>
	
	
	
	
Independent Problem	<p>At the zoo, there were 16 monkeys playing in the trees, and 17 more monkeys joined them. How many monkeys in total?</p>
	

Main Menu

Name: _____












Free Supplement: NumeracyConsultants.net

Teacher Led	Lisa had 86 candies, and she ate 12 of them. How many candies does Lisa have left?
 C ○  U —  B □  S =	
Teacher Guided	Sarah had 45 stickers, but she gave 27 to her friend. How many stickers does Sarah have now?
   	
Independent Problem	In a box, there were 45 toy cars, 27 of them were taken out to play with. How many toy cars are still in the box?
  	

Main Menu

Name: _____










Free Supplement: NumeracyConsultants.net

Teacher Led	<p>Bella had 50 marbles, and she decided to give 26 of them to her younger brother. How many marbles does Bella have now?</p>
 ○  —  □  =	
Teacher Guided	<p>A bakery had 42 apple pies, and they sold 28 of them in the morning. How many apple pies are still available for the afternoon customers?</p>
   	
Independent Problem	<p>Tom collected 70 seashells at the beach, but he accidentally dropped 25 of them back into the ocean. How many seashells does he have left?</p>
  	

Main Menu

Name: _____










Free Supplement: NumeracyConsultants.net

Teacher Led	Emily had 33 apples, and her friend gave her 38 more.
 ○  —  □  =	How many apples does Emily have now?
Teacher Guided	In a toy store, there were 45 teddy bears on the shelf. The
   	owner brought 45 more teddy bears from the back room. How many teddy bears are there in total?
Independent Problem	James saved \$35 last week and saved \$48 this week. How
	much money has he saved in total?

Main Menu

Name: _____










Free Supplement: NumeracyConsultants.net

Teacher Led	A pizza has 24 slices, and Sarah ate 12 slices. How many slices are left?
 ○  —  □  =	
Teacher Guided	Sarah had 38 cookies, and she gave 14 cookies to her friend. How many cookies does Sarah have now?
   	
Independent Problem	There were 30 fish in the fish bowl, but 14 fish died. How many fish are left in the fish bowl now?
	

Main Menu

Name: _____







Free Supplement: NumeracyConsultants.net

Teacher Led	In a basket, there are 56 oranges and in a bucket there are 26 oranges. How many oranges are there in all?
 ○  —  □  =	
Teacher Guided	The zoo has 33 monkeys in one cage and 43 monkeys in another cage. How many monkeys are there in total?
   	
Independent Problem	Sophie has 66 crayons in her bin and 25 crayons in her desk. How many crayons does Sophie have total?
	

Main Menu

Name: _____







Free Supplement: NumeracyConsultants.net

Teacher Led	There are 58 ducks swimming in a pond, and 23 ducks swimming in another pond. How many ducks are there altogether?
   	
Teacher Guided	John has 47 balloons in his room, and 22 balloons in his basement. How many balloons does he have total?
	
Independent Problem	Emma has 23 apples in her lunch box, and she has 53 apples in her locker. How many apples does Emma have in all?
	

Main Menu

Name: _____

Free Supplement: NumeracyConsultants.net

Teacher Led	There are 92 birds sitting in a tree, and 55 of them fly away. How many birds are still on the branch?
 ○  —  □  =	
Teacher Guided	Emma has 50 balloons, and 35 of them accidentally popped. How many balloons does Emma have now?
	
Independent Problem	In a box, there are 49 candies, and Timmy eats 24 of them. How many candies are left in the box?
	

Main Menu

Name: _____

Free Supplement: NumeracyConsultants.net

There are 36 pears in a fruit bowl, 18 of them are taken for a snack.
How many pears are left in the bowl?

A farmer had 30 chickens and 25 pigs. How many animals does he
have on his farm?

Jason has 32 toy cars, but he gives 14 of them to his friend. How many
toy cars does Jason have now?

Addition & Subtraction Result Unknown

The result unknown section has two types of problems: change problems, where the result of the change is unknown, and total or total or combining problems, where the total of the combined parts is unknown.

(Total: Part/Part/Whole Problems):

- Total or combining problems involve situations where the result of combining the parts is unknown.
- These are sometimes referred to as part/part/whole problems because they involve breaking down a whole into parts or combining parts to find the whole.

Total: Result Unknown

Tom had 8 blue marbles and 5 red marbles. How many marbles does he have total?

$$8 + 5 = ?$$

Total	
Total	
Part	Part

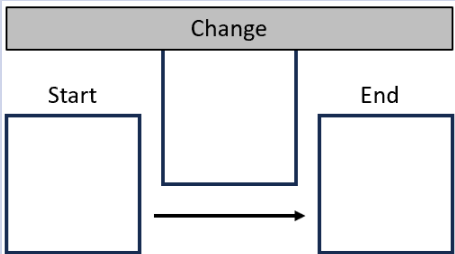
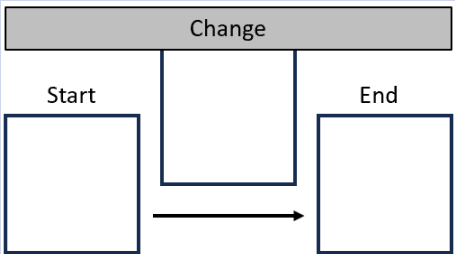
The unknown is the sum or total.

Addition & Subtraction Result Unknown

The result unknown section has two types of problems: change problems, where the result of the change is unknown, and combining problems, where the total of the combined parts is unknown.

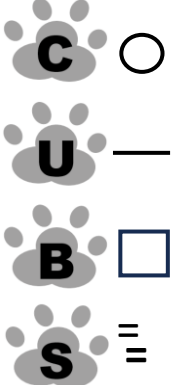


Change Problems (Joining or Separating Problems):

- In change problems, the result is unknown because some kind of change occurs, such as an increase or decrease in quantity.
- These problems often involve scenarios where items are added together (joining) or taken away from each other (separating).

Increase Change: Result Unknown	Decrease Change: Result Unknown
<p>Tom has 8 apples. Lisa gave him 5 apples. How many apples does Tom have all together?</p> <p style="text-align: center;">$8 + 5 = ?$</p> <div style="text-align: center;">  </div> <p>The unknown or end is the result of the change.</p>	<p>Tom has 13 apples. He gave 5 apples to Lisa. How many apples does Tom have now?</p> <p style="text-align: center;">$13 - 5 = ?$</p> <div style="text-align: center;">  </div> <p>The unknown or end is the result of the change.</p>

Name: _____










Free Supplement: NumeracyConsultants.net

Teacher Led	Jason has 225 pieces of candy. Sam has 543 pieces of candy. How many pieces of candy do they have altogether?
	
Teacher Guided	Cal saw 434 spiders. Fred saw 428 spiders. How many spiders did they see in all?
	
Independent Problem	Jim drew 254 pictures. Emma drew 327 pictures. How many pictures did they draw combined?
	

Main Menu

Name: _____












Free Supplement: NumeracyConsultants.net

Teacher Led	<p>There are 347 butterflies in a garden, and then 312 more butterflies flew into the garden. How many butterflies are in the garden total?</p>
 ○	
 —	
 □	
 =	
Teacher Guided	<p>In a basket, there were 135 oranges and in another basket there were 119 oranges. How many oranges are there altogether?</p>
	
	
	
	
Independent Problem	<p>At the zoo, there were 116 monkeys playing in the trees, and 217 more monkeys joined them. How many monkeys in total?</p>
	

Main Menu

Name: _____












Free Supplement: NumeracyConsultants.net

Teacher Led	Lisa had 526 candies, and she ate 112 of them. How many candies does Lisa have left?
 C ○  U —  B □  S =	
Teacher Guided	Sarah had 415 stickers, but she gave 257 to her friend. How many stickers does Sarah have now?
   	
Independent Problem	In a box, there were 312 toy cars, 177 of them were taken out to play with. How many toy cars are still in the box?
  	

Main Menu

Name: _____










Free Supplement: NumeracyConsultants.net

Teacher Led	Bella had 530 marbles, and she decided to give 126 of them to her younger brother. How many marbles does Bella have now?
 ○  —  □  =	
Teacher Guided	A bakery had 642 apple pies, and they sold 258 of them in the morning. How many apple pies are still available for the afternoon customers?
   	
Independent Problem	Tom collected 346 seashells at the beach, but he accidentally dropped 125 of them back into the ocean. How many seashells does he have left?
  	

Main Menu

Name: _____












Free Supplement: NumeracyConsultants.net

Teacher Led	Emily had 633 apples, and her friend gave her 89 more.
 ○  —  □  =	How many apples does Emily have now?
Teacher Guided	In a toy store, there were 415 teddy bears on the shelf.
   	The owner brought 85 more teddy bears from the back room. How many teddy bears are there in total?
Independent Problem	James saved \$135 last week and saved \$148 this week.
	How much money has he saved in total?

Main Menu

Name: _____










Free Supplement: NumeracyConsultants.net

Teacher Led	A jumbo pizza has 200 slices, and Sarah ate 25 slices. How many slices are left?
 ○  —  □  =	
Teacher Guided	Sarah had 318 cookies, and she gave 124 cookies to her friend. How many cookies does Sarah have now?
   	
Independent Problem	There were 200 fish in the fish tank, but 75 fish died. How many fish are left in the fish tank now?
  	

Main Menu

Name: _____







Free Supplement: NumeracyConsultants.net

Teacher Led	In a basket, there are 156 oranges and in a bucket there are 86 oranges. How many oranges are there in all?
   	
Teacher Guided	The zoo has 83 monkeys in one cage and 63 monkeys in another cage. How many monkeys are there in total?
   	
Independent Problem	Sophie has 266 crayons in her bin and 144 crayons in her desk. How many crayons does Sophie have total?
	

Main Menu

Name: _____







Free Supplement: NumeracyConsultants.net

Teacher Led	There are 238 ducks swimming in a pond, and 212 ducks swimming in another pond. How many ducks are there altogether?
   	
Teacher Guided	John has 237 balloons in his room, and 322 balloons in his basement. How many balloons does he have total?
	
Independent Problem	Emma has 43 apples in her lunch box, and she has 83 apples in her locker. How many apples does Emma have in all?
	

Main Menu

Name: _____

Free Supplement: NumeracyConsultants.net

Teacher Led	There are 792 birds sitting in a tree, and 155 of them fly away. How many birds are still on the branch?
 ○  —  □  =	
Teacher Guided	Emma has 125 balloons, and 35 of them accidentally popped. How many balloons does Emma have now?
	
Independent Problem	In a box, there are 149 candies, and Timmy eats 58 of them. How many candies are left in the box?
	

Main Menu

Name: _____

Free Supplement: NumeracyConsultants.net

There are 136 pears in a fruit bowl, 67 of them are taken for a snack.
How many pears are left in the bowl?

A farmer had 332 chickens and 125 pigs. How many animals does he
have on his farm?

Jason has 232 toy cars, but he gives 107 of them to his friend. How
many toy cars does Jason have now?

To purchase the remainder of
this resource please visit

www.numeracyconsultants.net/store