



Developing Multiplicative Thinking

Free Supplement

Individual License Multiplication and Division Grades 3-5

Any use of this eLibrary by anyone besides individual named above is a violation of the user agreement and will be copyright infringement.

info@numeracyconsultants.net



Numeracy Consultants LLC



To purchase the remainder of this resource

Please Visit

<https://numeracyconsultants.net/store>



Individual License

3-5 eLibrary Multiplication

Free Supplement



Numeracy Consultants LLC

Any use of this eLibrary by anyone besides the individual named above is a violation of the user agreement and will be copyright infringement.

info@numeracyconsultants.net

Table of Contents
Developing Multiplicative Thinking
Leveled Math Practice for Multiplication & Division

| | Pages |
|--|-------|
| Cover..... | 1 |
| License Agreement..... | 2 |
| Copyright Notification..... | 3 |
| Table of Contents..... | 4 |
| Level A/AA Multiplication Answer Sheet..... | 5 |
| Level B Multiplication Answer Sheet..... | 6 |
| Level C Multiplication Answer Sheet..... | 7 |
| Level C/D Multiplication Answer Sheet..... | 8 |
| Level C/D Division Answer Sheet..... | 9 |
| Concrete Models (Level A-D) Multiplication Answer Sheets ONLY..... | 10 |
| Screened/Abstract Models (Level B-D) Multiplication Answer Sheets ONLY..... | 23 |
| Commutative Property (Level B) No Answer Sheet Needed..... | 29 |
| Algebraic Models (Level D Multiplication Answer Sheet) OR (Division Answer Sheet - Measurement Division & Partitive Division)..... | 33 |
| Measurement Division, Partitive Division, Remainders (No Answer Sheet Needed)..... | 42 |
| Inverse Relationship of Multiplication and Division..... | 57 |
| Guided Story Problems (Multiplication, Rate, Multiplicative Comparison, Measurement Division, Partitive Division)..... | 67 |
| Multiplying by Ten or Multiples of Ten..... | 87 |
| Two Digit Multiplication and Division..... | 95 |



Name _____

1. groups of

There are

groups of

Repeated Addition Problem

Skip Count

2. groups of

There are

groups of

Repeated Addition Problem

Skip Count

3. groups of

There are

groups of

Repeated Addition Problem

Skip Count

4. groups of

There are

groups of

Repeated Addition Problem

Skip Count

5. groups of

There are

groups of

Repeated Addition Problem

Skip Count

6. groups of

There are

groups of

Repeated Addition Problem

Skip Count



Name _____

Free Supplement

Multiplication

Level B

| | |
|--|--|
| | |
|--|--|

Groups # in each group

1. Multiplication Equation

| | |
|--|--|
| | |
|--|--|

Groups # in each group

2. Multiplication Equation

| | |
|--|--|
| | |
|--|--|

Groups # in each group

3. Multiplication Equation

| | |
|--|--|
| | |
|--|--|

Groups # in each group

4. Multiplication Equation

| | |
|--|--|
| | |
|--|--|

Groups # in each group

5. Multiplication Equation

| | |
|--|--|
| | |
|--|--|

Groups # in each group

6. Multiplication Equation



Name _____

1.

| | |
|-------------------|----------------------|
| of | |
| Number of Groups | Number in Each Group |
| Multiplier | Multiplicand |

$$\underline{\quad \quad \quad} \times \underline{\quad \quad \quad} =$$
Multiplier \times Multiplicand

2.

| | |
|-------------------|----------------------|
| of | |
| Number of Groups | Number in Each Group |
| Multiplier | Multiplicand |

$$\underline{\quad \quad \quad} \times \underline{\quad \quad \quad} =$$
Multiplier \times Multiplicand

3.

| | |
|-------------------|----------------------|
| of | |
| Number of Groups | Number in Each Group |
| Multiplier | Multiplicand |

$$\underline{\quad \quad \quad} \times \underline{\quad \quad \quad} =$$
Multiplier \times Multiplicand

4.

| | |
|-------------------|----------------------|
| of | |
| Number of Groups | Number in Each Group |
| Multiplier | Multiplicand |

$$\underline{\quad \quad \quad} \times \underline{\quad \quad \quad} =$$
Multiplier \times Multiplicand

5.

| | |
|-------------------|----------------------|
| of | |
| Number of Groups | Number in Each Group |
| Multiplier | Multiplicand |

$$\underline{\quad \quad \quad} \times \underline{\quad \quad \quad} =$$
Multiplier \times Multiplicand

6.

| | |
|-------------------|----------------------|
| of | |
| Number of Groups | Number in Each Group |
| Multiplier | Multiplicand |

$$\underline{\quad \quad \quad} \times \underline{\quad \quad \quad} =$$
Multiplier \times Multiplicand



Name _____

1.

Missing Factor Equation

Multiplication Equation

“One More Group” Equation

2.

Missing Factor Equation

Multiplication Equation

“One Less Group” Equation

3.

Missing Factor Equation

Multiplication Equation

“One More Group” Equation

4.

Missing Factor Equation

Multiplication Equation

“One Less Group” Equation

5.

Missing Factor Equation

Multiplication Equation

“One More Group” Equation

6.

Missing Factor Equation

Multiplication Equation

“One Less Group” Equation



Name _____

1.

Product first; missing factor equation

Division Equation

2.

Product first; missing factor equation

Division Equation

3.

Product first; missing factor equation

Division Equation

4.

Product first; missing factor equation

Division Equation

5.

Product first; missing factor equation

Division Equation

6.

Product first; missing factor equation

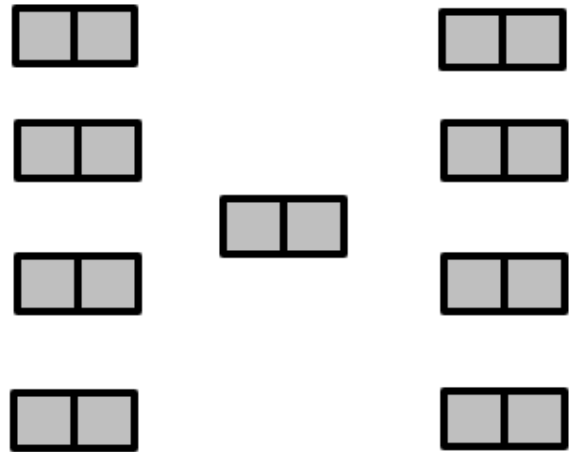
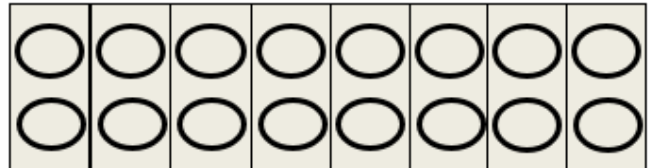

Division Equation

Concrete Models Level A-D

Multiplication Answer Sheets Only

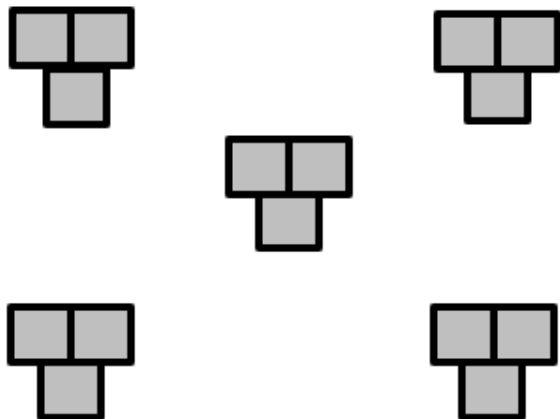

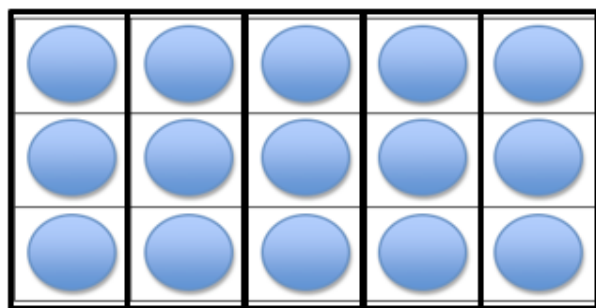
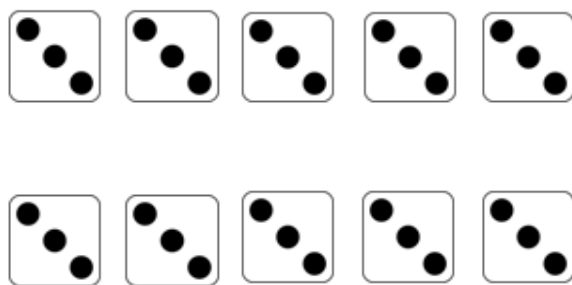

Name _____ Free Supplement _____

Equal Groups
2's



Name _____


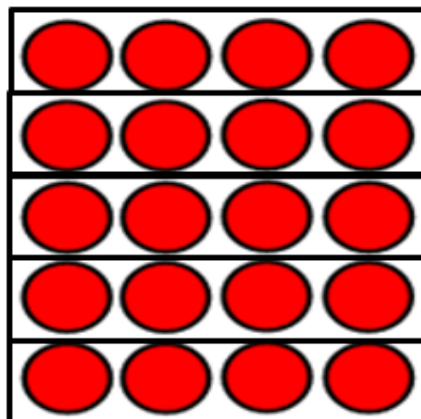

Free Supplement

Equal Groups
3's

Name _____

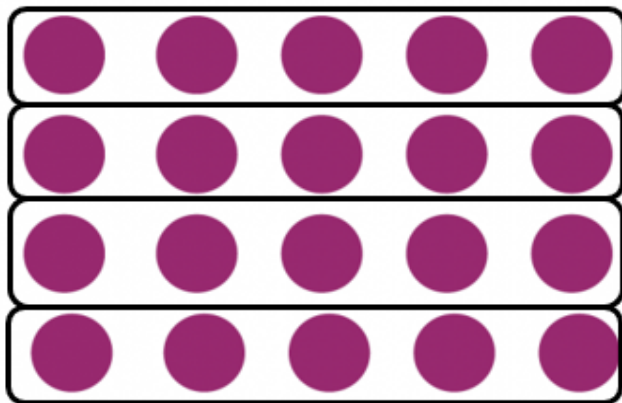



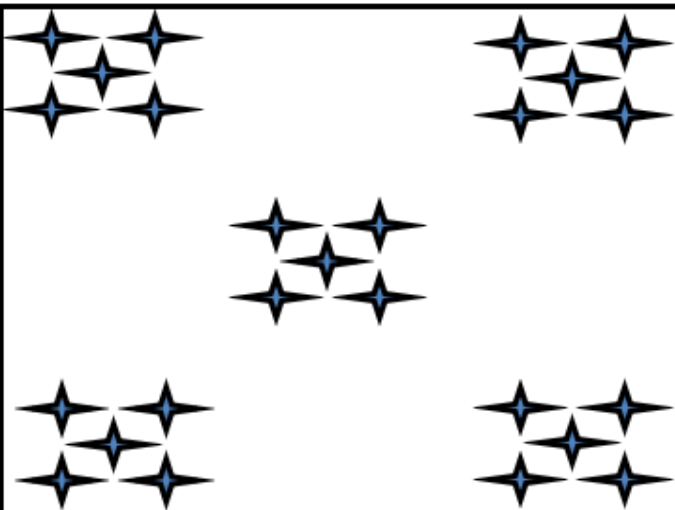

Free Supplement

Equal Groups
4's





Name _____ Free Supplement

Equal Groups
5's



Name _____



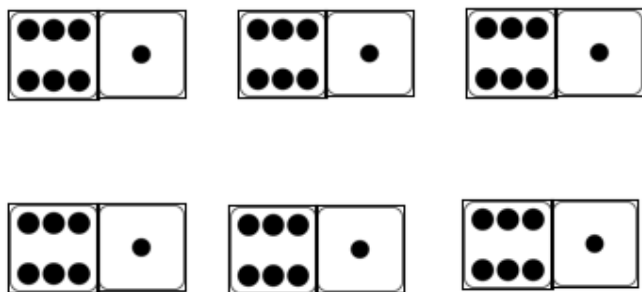


Free Supplement



Name _____

Free Supplement




Equal Groups
7s



Name _____

Free Supplement




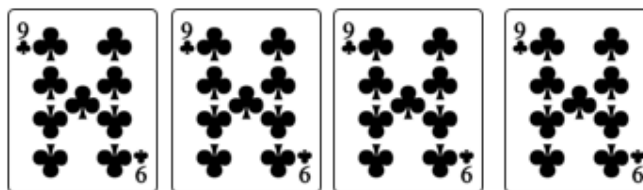
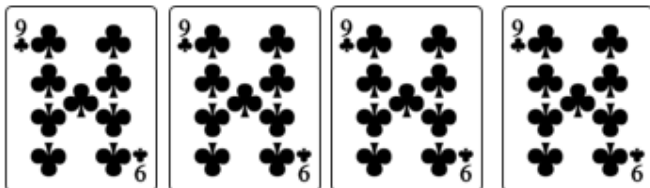










Equal Groups
8's



Name _____

Free Supplement


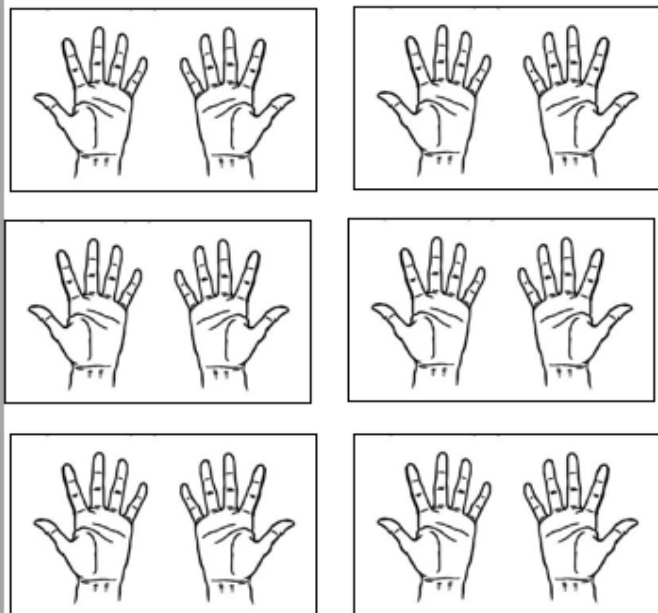


Equal Groups
9's



Name _____

Free Supplement

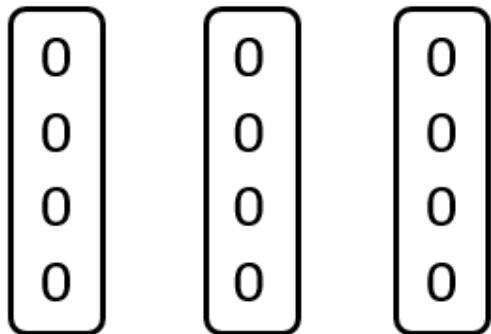
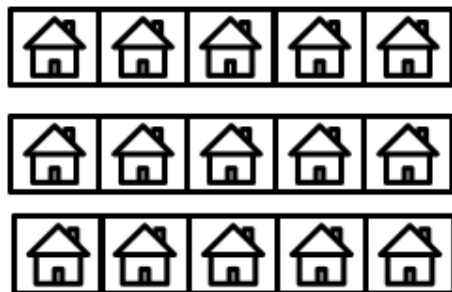
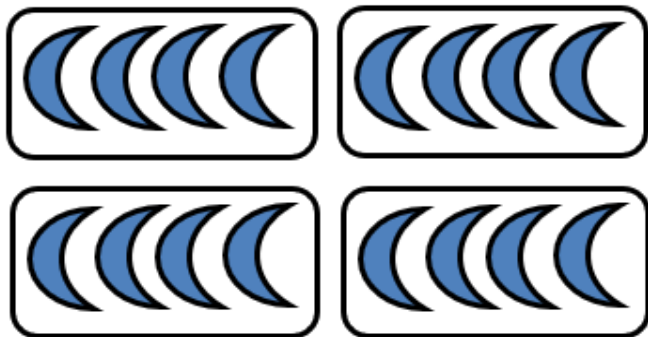

Equal Groups
10's



Name _____

Free Supplement


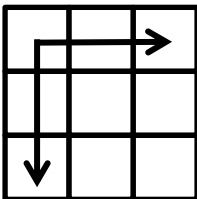




Equal Groups
Mixed (2-10)



Name _____

Free Supplement







Equal Groups
Mixed (2-10)



Name _____

Free Supplement

Equal Groups
Mixed (2-10)



To purchase the remainder of this resource

Please Visit

<https://numeracyconsultants.net/store>