

# NUMERACY CONSULTANTS

LLC

WORD PROBLEM INTERVENTION PROGRAM

## Assessment

Addition & Subtraction

INCLUDES FOUR ASSESSMENT LEVELS

LEVEL 1

To 10

LEVEL 1

To 20

LEVEL 2

To 100


LEVEL 2

To 1,000

Intervention-Ready | Progress Monitoring

Read each problem aloud to students before they solve independently.

2024



# Addition & Subtraction: Numbers to 10

Name: \_\_\_\_\_ Teacher: \_\_\_\_\_ Date: \_\_\_\_\_

A candy store has 5 red mints and 3 green mints. How many mints does the store have altogether?

WORK SPACE

1

A beach vendor has 6 seashells. They sold 4 of the shells to a customer. How many shells does the vendor have left?

WORK SPACE

2

A school has 8 folders. 3 of the folders are red, and the rest are blue. How many blue folders does the school have?

WORK SPACE

3

Lilly had 9 candies. Timmy ate some of the candies. Lilly now has 5 candies left. How many candies did Timmy eat?

WORK SPACE

4

Ruby had some balloons. Trey gave her 5 more. She now has 8. How many balloons did she start with?


WORK SPACE

5

Liddy had some rocks. She gave 3 rocks to Tommy. Liddy now has 5 rocks. How many rocks did she start with?

WORK SPACE

6



# Addition & Subtraction: Numbers to 10

Name: \_\_\_\_\_ Teacher: \_\_\_\_\_ Date: \_\_\_\_\_

The Pirates scored 9 points in a season. The Rams scored 5 points in the same season. How many more points did the Pirates score than the Rams?

WORK SPACE

7

Luca has 7 pencils. Jada has 4 pencils. How many fewer pencils does Jada have than Luca?

WORK SPACE

8

Jackson has 6 pretzels. Geo has 4 more pretzels than Jackson. How many pretzels does Geo have?

WORK SPACE

9

Will has 5 fewer acorns than Jay. Will has 5 acorns. How many acorns does Jay have?

WORK SPACE

10

Emily has 6 bracelets. She has 4 more bracelets than Violet. How many bracelets does Violet have?


WORK SPACE

11

Rio has 3 fewer books than Kirt. Kirt has 8 books. How many books does Rio have?

WORK SPACE

12



# Addition & Subtraction: Numbers to 20

Name: \_\_\_\_\_ Teacher: \_\_\_\_\_ Date: \_\_\_\_\_

A candy store has 9 red mints and 7 green mints. How many mints does the store have altogether?

WORK SPACE

1

A beach vendor has 15 seashells. They sold 7 of the shells to a customer. How many shells does the vendor have left?

WORK SPACE

2

A school has 16 folders. 7 of the folders are red, and the rest are blue. How many blue folders does the school have?

WORK SPACE

3

Lilly had 13 candies. Timmy ate some of the candies. Lilly now has 8 candies left. How many candies did Timmy eat?

WORK SPACE

4

Ruby had some balloons. Trey gave her 5 more. She now has 14. How many balloons did she start with?


WORK SPACE

5

Liddy had some rocks. She gave 6 rocks to Tommy. Liddy now has 8 rocks. How many rocks did she start with?

WORK SPACE

6



# Addition & Subtraction: Numbers to 20

Name: \_\_\_\_\_ Teacher: \_\_\_\_\_ Date: \_\_\_\_\_

The Pirates scored 17 points in a season. The Rams scored 9 points in the same season. How many more points did the Pirates score than the Rams?

WORK SPACE

7

Luca has 13 pencils. Jada has 5 pencils. How many fewer pencils does Jada have than Luca?

WORK SPACE

8

Jackson has 14 pretzels. Geo has 4 more pretzels than Jackson. How many pretzels does Geo have?

WORK SPACE

9

Will has 5 fewer acorns than Jay. Will has 15 acorns. How many acorns does Jay have?

WORK SPACE

10

Emily has 16 bracelets. She has 4 more bracelets than Violet. How many bracelets does Violet have?


WORK SPACE

11

Rio has 4 fewer books than Kirt. Kirt has 13 books. How many books does Rio have?

WORK SPACE

12



# Addition & Subtraction: Numbers to 100

Name: \_\_\_\_\_ Teacher: \_\_\_\_\_ Date: \_\_\_\_\_

A candy store has 29 red mints and 17 green mints. How many mints does the store have altogether?

WORK SPACE

1

A beach vendor has 35 seashells. They sold 18 of the shells to a customer. How many shells does the vendor have left?

WORK SPACE

2

A school has 65 folders. 39 of the folders are red, and the rest are blue. How many blue folders does the school have?

WORK SPACE

3

Lilly had 83 candies. Timmy ate some of the candies. Lilly now has 38 candies left. How many candies did Timmy eat?

WORK SPACE

4

Ruby had some balloons. Trey gave her 17 more. She now has 34. How many balloons did she start with?


WORK SPACE

5

Liddy had some rocks. She gave 26 rocks to Tommy. Liddy now has 58 rocks. How many rocks did she start with?

WORK SPACE

6



# Addition & Subtraction: Numbers to 100

Name: \_\_\_\_\_ Teacher: \_\_\_\_\_ Date: \_\_\_\_\_

The Pirates scored 67 points in a season. The Rams scored 35 points in the same season. How many more points did the Pirates score than the Rams?

WORK SPACE

---

---

---

---

---

7

Luca has 43 pencils. Jada has 25 pencils. How many fewer pencils does Jada have than Luca?

WORK SPACE

---

---

---

---

---

8

Jackson has 24 pretzels. Geo has 41 more pretzels than Jackson. How many pretzels does Geo have?

WORK SPACE

---

---

---

---

---

9

Will has 25 fewer acorns than Jay. Will has 25 acorns. How many acorns does Jay have?

WORK SPACE

---

---

---

---

---

10

Emily has 41 bracelets. She has 23 more bracelets than Violet. How many bracelets does Violet have?

WORK SPACE

---

---

---

---

---

11

Rio has 37 fewer books than Kirt. Kirt has 91 books. How many books does Rio have?

WORK SPACE

---


---

---

---

---

12



# Addition & Subtraction: Numbers to 1,000

Name: \_\_\_\_\_ Teacher: \_\_\_\_\_ Date: \_\_\_\_\_

A candy store has 229 red mints and 314 green mints. How many mints does the store have altogether?

WORK SPACE

1

A beach vendor has 335 seashells. They sold 218 of the shells to a customer. How many shells does the vendor have left?

WORK SPACE

2

A school has 745 folders. 393 of the folders are red, and the rest are blue. How many blue folders does the school have?

WORK SPACE

3

Lilly had 413 candies. Timmy ate some of the candies. Lilly now has 328 candies left. How many candies did Timmy eat?

WORK SPACE

4

Ruby had some balloons. Trey gave her 317 more. She now has 634. How many balloons did she start with?


WORK SPACE

5

Liddy had some rocks. She gave 226 rocks to Tommy. Liddy now has 558 rocks. How many rocks did she start with?

WORK SPACE

6



# Addition & Subtraction: Numbers to 1,000

Name: \_\_\_\_\_ Teacher: \_\_\_\_\_ Date: \_\_\_\_\_

The Pirates scored 567 points in a season. The Rams scored 357 points in the same season. How many more points did the Pirates score than the Rams?

WORK SPACE

7

Luca has 343 pencils. Jada has 225 pencils. How many fewer pencils does Jada have than Luca?

WORK SPACE

8

Jackson has 324 pretzels. Geo has 541 more pretzels than Jackson. How many pretzels does Geo have?

WORK SPACE

9

Will has 125 fewer acorns than Jay. Will has 525 acorns. How many acorns does Jay have?

WORK SPACE

10

Emily has 341 bracelets. She has 223 more bracelets than Violet. How many bracelets does Violet have?


WORK SPACE

11

Rio has 137 fewer books than Kirt. Kirt has 439 books. How many books does Rio have?

WORK SPACE

12



# Score Recording Sheet — All Levels

Student Name: \_\_\_\_\_

Date: \_\_\_\_\_

Problems	Operation	Problem Type	Score	Notes
#1, #2	Addition / Subtraction	Result Unknown / Whole Unknown	__ / 2	_____ _____
#3, #4	Addition / Subtraction	Change Unknown / Part Unknown	__ / 2	_____ _____
#5, #6	Addition / Subtraction	Start Unknown	__ / 2	_____ _____
#7, #8	Addition / Subtraction	Difference Unknown	__ / 2	_____ _____
#9, #10	Addition / Subtraction	Larger Quantity Unknown	__ / 2	_____ _____
#11, #12	Addition / Subtraction	Smaller Quantity Unknown	__ / 2	_____ _____
<b>TOTAL SCORE:</b>			<b>___ / 12</b>	