

## Grade 2 Math CSA Q2 Review

Name \_\_\_\_\_

Date: \_\_\_\_\_

### 1 Look at the models.

Model 1 

Model 2 

**What is the difference between the two numbers shown?**

- A** 3
- B** 7
- C** 13
- D** 17

### 2 Two numbers are modeled in the boxes.

Model 1 

Model 2 

**What is the sum of these two numbers?**

- A** 36
- B** 44
- C** 54
- D** 60

**Grade 2 Math CSA Q2 Review**

**3 KJ took his money to the mall.**

**He bought sun glasses for 9 dollars.**

**Then he had 16 dollars.**

**How much money did KJ have when he got to the mall?**

- A 3**
- B 5**
- C 13**
- D 25**

**4 Dara planted 18 seeds.**

- There were 7 tomato seeds.**
- There were 6 cucumber seeds.**

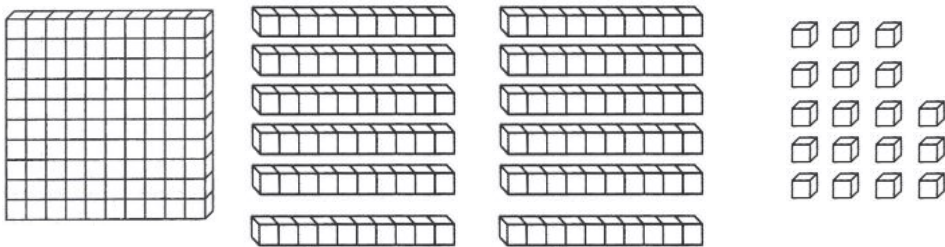
**How many other seeds did she plant?**

- A 1**
- B 5**
- C 11**
- D 12**

**5 Which number when rounded to the nearest ten is 30?**

- A 22**
- B 28**
- C 35**
- D 39**

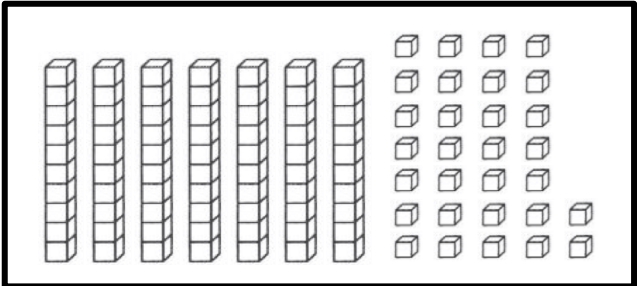
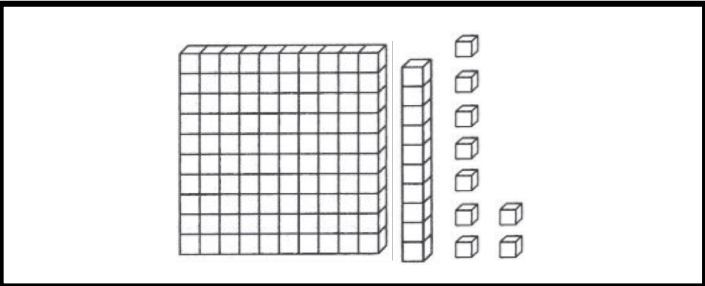
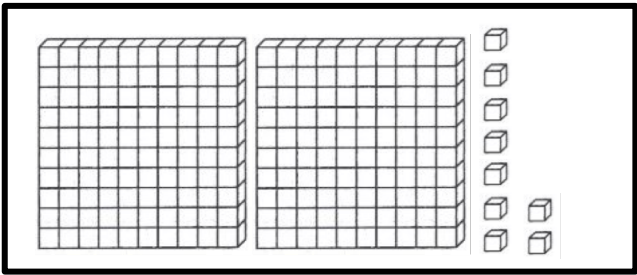
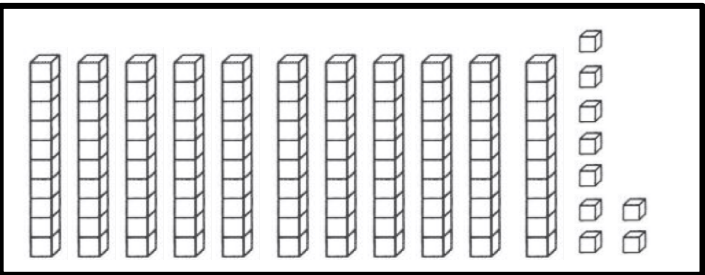
6 Which number does this model show?



- A 166
- B 238
- C 318
- D 338

Directions: Select all correct answers.

7 Which 2 models show the number 119?



## Grade 2 Math CSA Q2 Review

**8 Which list of numbers is in order from greatest to least?**

- A** 18, 37, 42
- B** 18, 42, 37
- C** 42, 18, 37
- D** 42, 37, 18

**9 Look at the number pattern.**

<b>89, 84, 79, 74, 69, 64, 59 . . .</b>
---

**Which of these shows the same kind of pattern?**

- A** 15, 25, 35, 45, 55, 65, 75
- B** 22, 20, 18, 16, 14, 12, 10
- C** 43, 38, 33, 28, 23, 18, 13
- D** 64, 55, 46, 37, 28, 19, 10

**10 What is the rule for the pattern below?**

<b>2</b>	<b>8</b>	<b>14</b>	<b>20</b>	<b>26</b>	<b>32</b>
----------	----------	-----------	-----------	-----------	-----------

- A** add 2
- B** add 4
- C** add 6
- D** add 8