

## Grade 2 CSA Q4 Review

Name: \_\_\_\_\_ Date: \_\_\_\_\_


2.8bSb (C)

**1 Which of the following objects weighs about 1 pound?**

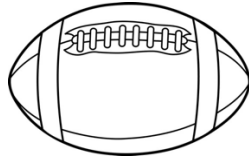
**A** a puppy



**C** a pencil



**B** a football

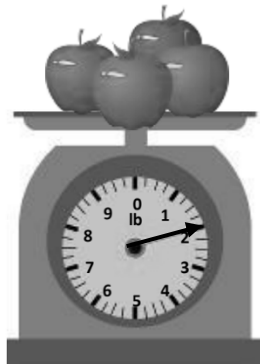


**D** a butterfly



2.8bSb (C)

**2 Look at the scale.**



**How much do the apples weigh?**

**A** 2 pounds

**C** 4 pounds

**B** 3 pounds

**D** 5 pounds

2.10bSb (C)

**3 Use this calendar to answer the question.**

March						
Sun	Mon	Tue	Wed	Thu	Fri	Sat
			1	2	3	4
5	6	7	8	9	10	11
12	13	14	15	16	17	18
19	20	21	22	23	24	25
26	27	28	29	30	31	

**Tom has a soccer game on March 23. What day of the week is his game?**

**A** Monday

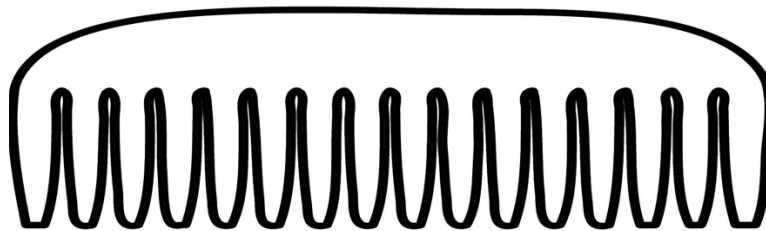
**C** Wednesday

**B** Tuesday

**D** Thursday

2.8aSb (U)

**4 Use your inch ruler to help you answer this question.**



**Which is closest to the length of the picture of this comb?**

**A** 3 inches

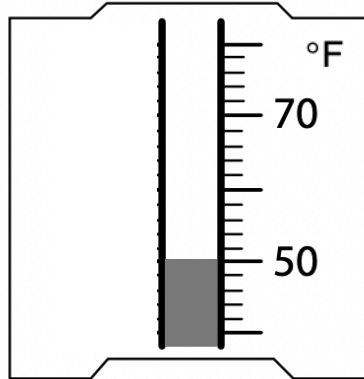
**C** 5 inches

**B** 4 inches

**D** 6 inches

2.11Sa (C)

**5 Read the temperature on the thermometer.**



**The temperature is closest to –**

**A** 50° Fahrenheit

**C** 70° Fahrenheit

**B** 60° Fahrenheit

**D** 80° Fahrenheit

2.7abSa (U)

**6 Holly has the money shown below.**



**What is the value of this set of money?**

**A** \$1.67

**C** \$1.42

**B** \$1.52

**D** \$1.37

2.7aSa (AN)

Directions: Select the correct answer.

**7 Compare the sets of money shown.**

Set A



Set B




The value of Set A is

greater than
less than
equal to

the value of Set B.

2.9Sa (U)

**8 Which is closest to the time shown on the clock?**



**A** 2:45

**B** 3:45

**C** 9:05

**D** 9:15

2.12aSa (AN)

**9 Look at the shape below.**



**How many lines of symmetry does it have?**

**A** 0

**B** 1

**C** 2

**D** 4

2.17aSe (AP)

Directions: Write the symbol in the box.

**10 Which symbol makes the number sentence correct?**

$$10 - 3 \quad \square \quad 7 + 3$$

