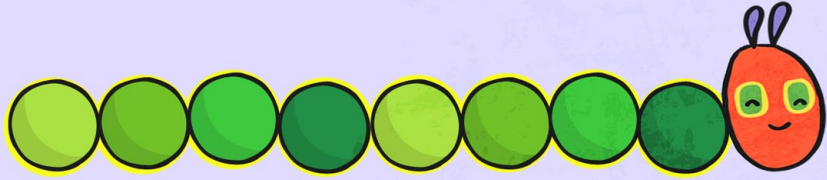



The Very Hungry Caterpillar Counting Sheet


Can you count how many pieces the caterpillar has on its body?



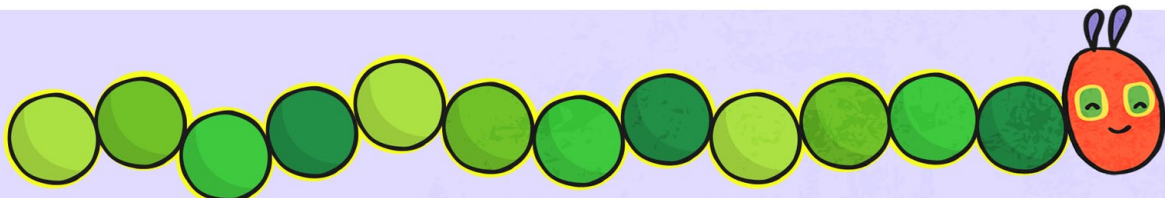
A caterpillar with a red head and two antennae, followed by eight green body segments of varying shades. To the right is a large empty circle for counting.




A caterpillar with a red head and two antennae, followed by twelve green body segments of varying shades. To the right is a large empty circle for counting.



A caterpillar with a red head and two antennae, followed by six green body segments of varying shades. To the right is a large empty circle for counting.



A caterpillar with a red head and two antennae, followed by thirteen green body segments of varying shades. To the right is a large empty circle for counting.



A caterpillar with a red head and two antennae, followed by eight green body segments of varying shades. To the right is a large empty circle for counting.