

14

Waves

Multiple Choice Questions (MCQs)

Q. 1 Water waves produced by a motorboat sailing in water are

- (a) neither longitudinal nor transverse
- (b) both longitudinal and transverse
- (c) only longitudinal
- (d) only transverse

Ans. (b) Water waves produced by a motorboat sailing in water are both longitudinal and transverse, because the waves, produce transverse as well as lateral vibrations in the particles of the medium.

Q. 2 Sound waves of wavelength λ travelling in a medium with a speed of v m/s enter into another medium where its speed is $2v$ m/s. Wavelength of sound waves in the second medium is

- (a) λ
- (b) $\frac{\lambda}{2}$
- (c) 2λ
- (d) 4λ

Ans. (c) Let the frequency in the first medium is ν and in the second medium is ν'
Frequency remains same in both the medium

So,
$$\nu = \nu' \Rightarrow \frac{\nu}{\lambda} = \frac{\nu'}{\lambda'}$$

$$\Rightarrow \lambda' = \left(\frac{\nu'}{\nu} \right) \lambda$$

λ and λ' , ν and ν' are wavelengths and speeds in first and second medium respectively.

So,
$$\lambda' = \left(\frac{2\nu}{\nu} \right) \lambda = 2\lambda$$

Q. 3 Speed of sound wave in air

- (a) is independent of temperature
- (b) increases with pressure
- (c) increases with increase in humidity
- (d) decreases with increase in humidity

Ans. (c) Due to presence of moisture density of air decreases.

We know that speed of sound in air is given by $v = \sqrt{\frac{\gamma p}{\rho}}$

For air γ and p are constants.

$$v \propto \frac{1}{\sqrt{\rho}}, \text{ where } \rho \text{ is density of air.}$$

$$\frac{v_2}{v_1} = \sqrt{\frac{\rho_1}{\rho_2}}$$

where ρ_1 is density of dry air and ρ_2 is density of moist air.

$$\text{As } \rho_2 < \rho_1 = \frac{v_2}{v_1} > 1 \Rightarrow v_2 > v_1$$

Hence, speed of sound wave in air increases with increase in humidity.

Q. 4 Change in temperature of the medium changes

- (a) frequency of sound waves
- (b) amplitude of sound waves
- (c) wavelength of sound waves
- (d) loudness of sound waves

Ans. (c) Speed of sound wave in a medium $v \propto \sqrt{T}$ (where T is temperature of the medium)

Clearly, when temperature changes speed also changes.

$$\text{As, } v = \nu \lambda$$

where ν is frequency and λ is wavelength.

Frequency (ν) remains fixed

$$\Rightarrow v \propto \lambda \text{ or } \lambda \propto v$$

As v does not change, so wavelength (λ) changes.

Q. 5 With propagation of longitudinal waves through a medium, the quantity transmitted is

- (a) matter
- (b) energy
- (c) energy and matter
- (d) energy, matter and momentum

Ans. (b) Propagation of longitudinal waves through a medium leads to transmission of energy through the medium without matter being transmitted.

There is no movement of matter (mass) and hence momentum.

Q. 6 Which of the following statements are true for wave motion?

- (a) Mechanical transverse waves can propagate through all mediums
- (b) Longitudinal waves can propagate through solids only
- (c) Mechanical transverse waves can propagate through solids only
- (d) Longitudinal waves can propagate through vacuum

Ans. (c) When mechanical transverse wave propagates through a medium, the constituent of the medium oscillate perpendicular to wave motion causing change in shape. That is each, element of the medium is subjected to shearing stress. Solids and strings have shear modulus, that is why, sustain shearing stress.

Fluids have no shape of, their own, they yield to shearing stress. This is why transverse waves are possible in solids and strings but not in fluids.

Q. 7 A sound wave is passing through air column in the form of compression and rarefaction. In consecutive compressions and rarefactions,

- (a) density remains constant
- (b) Boyle's law is obeyed
- (c) bulk modulus of air oscillates
- (d) there is no transfer of heat

Ans. (d) (a) Due to compression and rarefactions density of the medium (air) changes. At compressed regions density is maximum and at rarefactions density is minimum
 (b) As density is changing, so Boyle's law is not obeyed
 (c) Bulk modulus remains same
 (d) The time of compression and rarefaction is too small *i.e.*, we can assume adiabatic process and hence no transfer of heat

Q. 8 Equation of a plane progressive wave is given by $y = 0.6 \sin 2\pi \left(t - \frac{x}{2} \right)$. On

reflection from a denser medium its amplitude becomes $\frac{2}{3}$ of the amplitude of the incident wave. The equation of the reflected wave is

- (a) $y = 0.6 \sin 2\pi \left(t + \frac{x}{2} \right)$
- (b) $y = -0.4 \sin 2\pi \left(t + \frac{x}{2} \right)$
- (c) $y = 0.4 \sin 2\pi \left(t + \frac{x}{2} \right)$
- (d) $y = -0.4 \sin 2\pi \left(t - \frac{x}{2} \right)$

💡 Thinking Process

Due to reflection from a denser medium there is a phase change of 180° in the reflected wave.

Ans. (b) Amplitude of reflected wave

$$A_r = \frac{2}{3} \times A_i = \frac{2}{3} \times 0.6 = 0.4 \text{ units}$$

Given equation of incident wave

$$y_i = 0.6 \sin 2\pi \left(t - \frac{x}{2} \right)$$

Equation of reflected wave is

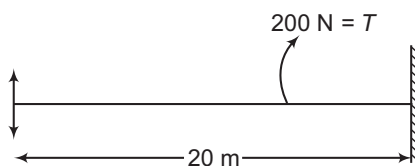
$$y_r = A_r \sin 2\pi \left(t + \frac{x}{2} + \pi \right)$$

[\because At denser medium, phase changes by π]

The positive sign is due to reversal of direction of propagation

So,
$$y_r = -0.4 \sin 2\pi \left(t + \frac{x}{2} \right) \quad [\because \sin(\pi + \theta) = -\sin \theta]$$

Q. 9 A string of mass 2.5 kg is under tension of 200 N. The length of the stretched string is 20.0 m. If the transverse jerk is struck at one end of the string, the disturbance will reach the other end in



(a) 1s

(b) 0.5s

(c) 2s

(d) data given is insufficient

Ans. (b)

Mass $m = 2.5 \text{ kg}$

μ = mass per unit length

$$= \frac{m}{l} = \frac{2.5 \text{ kg}}{20} = \frac{125}{10} = 0.125 \text{ kg/m}$$

$$\text{Speed } v = \sqrt{\frac{T}{\mu}} = \sqrt{\frac{200}{0.125}} \quad [\text{speed of transverse waves in any string}]$$

$$l = v \times t \Rightarrow 20 = \sqrt{\frac{200}{0.125}} \times t$$

\Rightarrow

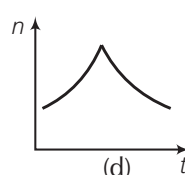
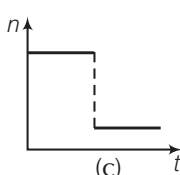
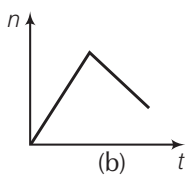
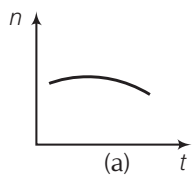
$$t = 20 \times \sqrt{\frac{125}{2 \times 10^5}} = 20 \times \sqrt{\frac{25 \times 5}{2 \times 10^5}}$$

$$= 20 \times \sqrt{25 \times \frac{1}{0.4 \times 10^5}}$$

$$= 20 \times 5 \sqrt{\frac{1}{4 \times 10^4}} = \frac{20 \times 5}{2 \times 10^2}$$

$$= \frac{1}{2} = 0.5$$

Q. 10 A train whistling at constant frequency is moving towards a station at a constant speed v . The train goes past a stationary observer on the station. The frequency n' of the sound as heard by the observer is plotted as a function of time t (figure). Identify the expected curve.



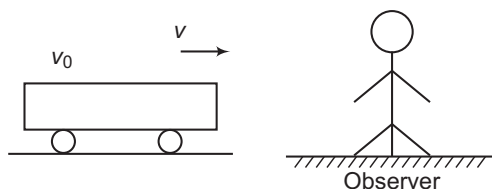
Thinking Process

The observed frequency is apparent frequency due to Doppler shift.

Ans. (c) Let the original frequency of the source is n_0 .

Let the speed of sound wave in the medium is v .

As observer is stationary



$$\begin{aligned} \text{Apparent frequency } n_a &= \left(\frac{v}{v - v_s} \right) n_o \quad [\text{when train is approaching}] \\ &= \left(\frac{v}{v - v_s} \right) n_o = n_a > n_o \end{aligned}$$

When the train is going away from the observer

$$\text{Apparent frequency } n_a = \left(\frac{v}{v + v_s} \right) n_o = n_a < n_o$$

Hence, the expected curve is (c).

Multiple Choice Questions (More Than One Options)

Q. 11 A transverse harmonic wave on a string is described by

$$y(x, t) = 3.0 \sin \left(36t + 0.018x + \frac{\pi}{4} \right)$$

where x and y are in cm and t is in sec. The positive direction of x is from left to right.

- (a) the wave is travelling from right to left
- (b) the speed of the wave is 20 m/s
- (c) frequency of the wave is 5.7 Hz
- (d) the least distance between two successive crests in the wave is 2.5 cm

Thinking Process

To find the characteristic parameters associated with a wave, compare the given equation of the wave with a standard equation.

Ans. (a, b, c)

Given equation is $y(x, t) = 3.0 \sin \left(36t + 0.018x + \frac{\pi}{4} \right)$

Compare the equation with the standard form.

$$y = a \sin(\omega t + kx + \phi)$$

- (a) As the equation involves positive sign with x , hence the wave is travelling from right to left. Hence, option (a) is correct.

- (b) Given,

$$\omega = 36 \Rightarrow 2\pi\nu = 36$$

$$\Rightarrow \nu = \text{frequency} = \frac{36}{2\pi} = \frac{18}{\pi}$$

$$k = 0.018 \Rightarrow \frac{2\pi}{\lambda} = 0.018$$

$$\begin{aligned} \Rightarrow \quad \frac{2\pi v}{v\lambda} &= 0.018 \Rightarrow \frac{\omega}{v} = 0.018 & [\because 2\pi v = \omega \text{ and } v\lambda = v] \\ \Rightarrow \quad \frac{36}{v} &= 0.018 = \frac{18}{1000} \\ \Rightarrow \quad v &= 2000 \text{ cm/s} = 20 \text{ m/s} \end{aligned}$$

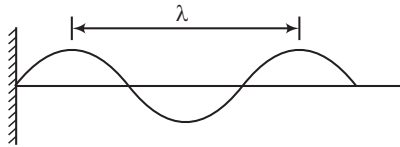
(c) $2\pi v = 36$

$$\Rightarrow \quad v = \frac{36}{2\pi} \text{ Hz} = \frac{18}{\pi} = 5.7 \text{ Hz}$$

(d) $\frac{2\pi}{\lambda} = 0.018$

$$\begin{aligned} \Rightarrow \quad \lambda &= \frac{2\pi}{0.018} \text{ cm} \\ &= \frac{2000\pi}{18} \text{ cm} = \frac{20\pi}{18} \text{ m} = 3.48 \text{ m} \end{aligned}$$

Hence, least distance between two successive crests $= \lambda = 3.48 \text{ m}$.



Q. 12 The displacement of a string is given by

$$y(x, t) = 0.06 \sin\left(\frac{2\pi x}{3}\right) \cos(120\pi t)$$

where x and y are in metre and t in second. The length of the string is 1.5 m and its mass is $3.0 \times 10^{-2} \text{ kg}$.

- (a) It represents a progressive wave of frequency 60 Hz
- (b) It represents a stationary wave of frequency 60 Hz
- (c) It is the result superposition of two waves of wavelength 3 m, frequency 60 Hz each travelling with a speed of 180 m/s in opposite direction
- (d) Amplitude of this wave is constant

Ans. (b, c)

Given equation is $y(x, t) = 0.06 \sin\left(\frac{2\pi x}{3}\right) \cos(120\pi t)$

- (a) Comparing with a standard equation of stationary wave

$$y(x, t) = a \sin(kx) \cos(\omega t)$$

Clearly, the given equation belongs to stationary wave. Hence, option (a) is not correct.

- (b) By comparing,

$$\omega = 120\pi$$

$$\Rightarrow \quad 2\pi f = 120\pi \Rightarrow f = 60 \text{ Hz}$$

(c) $k = \frac{2\pi}{3} = \frac{2\pi}{\lambda}$

$$\Rightarrow \quad \lambda = \text{wavelength} = 3 \text{ m}$$

$$\text{Frequency} = f = 60 \text{ Hz}$$

$$\text{Speed} = v = f\lambda = (60 \text{ Hz})(3 \text{ m}) = 180 \text{ m/s}$$

- (d) Since in stationary wave, all particles of the medium execute SHM with varying amplitude & nodes.

Q. 13 Speed of sound wave in a fluid depends upon

- (a) directly on density of the medium
- (b) square of Bulk modulus of the medium
- (c) inversly on the square root of density
- (d) directly on the square root of bulk modulus of the medium

Ans. (c, d)

Speed of sound waves in a fluid is given by

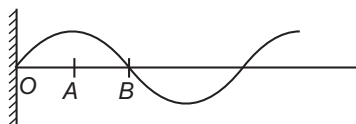
$$v = \sqrt{\frac{B}{\rho}}, \text{ where } B \text{ is Bulk modulus and } \rho \text{ is density of the medium.}$$

Clearly,	$v \propto \frac{1}{\sqrt{\rho}}$	$[\because \text{for any fluid, } B = \text{constant}]$
and	$v \propto \sqrt{B}$	$[\because \text{for medium, } \rho = \text{constant}]$

Q. 14 During propagation of a plane progressive mechanical wave,

- (a) all the particles are vibrating in the same phase
- (b) amplitude of all the particles is equal
- (c) particles of the medium executes SHM
- (d) wave velocity depends upon the nature of the medium

Ans. (b, c, d)



During propagation of a plane progressive mechanical wave, like shown in the diagram, amplitude of all the particles is equal.

- (i) Clearly, the particles O, A and B are having different phase.
- (ii) Particles of the wave shown in the figure are having up and down SHM.
- (iii) For a progressive wave propagating in a fluid .

$$\text{Speed} = v = \sqrt{\frac{B}{\rho}}$$

Hence,	$v \propto \sqrt{\frac{1}{\rho}}$	$[\because B \text{ is constant}]$
--------	-----------------------------------	------------------------------------

As ρ depends upon nature of the medium, hence v also depends upon the nature of the medium.

Q. 15 The transverse displacement of a string (clamped at its both ends) is given by $y(x, t) = 0.06 \sin\left(\frac{2\pi x}{3}\right) \cos(120\pi t)$.

All the points on the string between two consecutive nodes vibrate with

- (a) same frequency
- (b) same phase
- (c) same energy
- (d) different amplitude

Ans. (a, b, d)

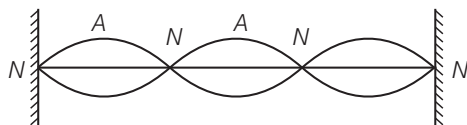
Given equation is	$y(x, t) = 0.06 \sin\left(\frac{2\pi}{3} x\right) \cos(120\pi t)$
-------------------	---

Comparing with standard equation of stationary wave

$$y(x, t) = a \sin(kx) \cos(\omega t)$$

It is represented by diagram.

where N denotes nodes and A denotes antinodes.



- (a) Clearly, frequency is common for all the points.
- (b) Consider all the particles between two nodes they are having same phase of $(120\pi t)$ at a given time.
- (c) and (d) But are having different amplitudes of $0.06 \sin\left(\frac{2\pi}{3}x\right)$ and because of different amplitudes they are having different energies.

Q. 16 A train, standing in a station yard, blows a whistle of frequency 400 Hz in still air. The wind starts blowing in the direction from the yard to the station with a speed of 10 m/s. Given that the speed of sound in still air is 340 m/s. Then

- (a) the frequency of sound as heard by an observer standing on the platform is 400 Hz
- (b) the speed of sound for the observer standing on the platform is 350 m/s
- (c) the frequency of sound as heard by the observer standing on the platform will increase
- (d) the frequency of sound as heard by the observer standing on the platform will decrease

💡 Thinking Process

When the wind is blowing in the same direction as that of sound wave then net speed of the wave is sum of speed of sound wave and speed of the wind.

Ans. (a, b)

Given,

$$v_0 = 400 \text{ Hz}, v = 340 \text{ m/s}$$

Speed of wind

$$v_w = 10 \text{ m/s}$$

- (a) As both source and observer are stationary, hence frequency observed will be same as natural frequency $v_0 = 400 \text{ Hz}$
- (b) The speed of sound $v = v + v_w$

$$= 340 + 10 = 350 \text{ m/s}$$
- (c) and (d) There will be no effect on frequency, because there is no relative motion between source and observer hence (c), (d) are incorrect.

Q. 17 Which of the following statement are true for a stationary waves?

- (a) Every particle has a fixed amplitude which is different from the amplitude of its nearest particle
- (b) All the particles cross their mean position at the same time
- (c) All the particles are oscillating with same amplitude
- (d) There is no net transfer of energy across any plane
- (e) There are some particles which are always at rest

Ans. (a, b, d, e)

Consider the equation of a stationary wave $y = a \sin(kx) \cos \omega t$

(a) clearly every particle at x will have amplitude $= a \sin kx = \text{fixed}$

(b) for mean position $y = 0$

$$\Rightarrow \cos \omega t = 0$$

$$\Rightarrow \omega t = (2n - 1) \frac{\pi}{2}$$

Hence, for a fixed value of n , all particles are having same value of

$$\text{time } t = (2n - 1) \frac{\pi}{2\omega} \quad [\because \omega = \text{constant}]$$

(c) amplitude of all the particles are $a \sin(kx)$ which is different for different particles at different values of x

(d) the energy in a stationary wave is confined between two nodes

(e) particles at different nodes are always at rest.

Very Short Answer Type Questions

Q. 18 A sonometer wire is vibrating in resonance with a tuning fork. Keeping the tension applied same, the length of the wire is doubled. Under what conditions would the tuning fork still be in resonance with the wire?

Ans. Wire of twice the length vibrates in its second harmonic. Thus, if the tuning fork resonates at L , it will resonate at $2L$. This can be explained as below

The sonometer frequency is given by

$$v = \frac{n}{2L} \sqrt{\frac{T}{m}} \quad (n = \text{number of loops})$$

Now, as it vibrates with length L , we assume $v = v_1$

$$\therefore \begin{aligned} n &= n_1 \\ v_1 &= \frac{n_1}{2L} \sqrt{\frac{T}{m}} \end{aligned} \quad \dots (i)$$

When length is doubled, then

$$v_2 = \frac{n_2}{2 \times 2L} \sqrt{\frac{T}{m}} \quad \dots (ii)$$

Dividing Eq. (i) by Eq. (ii), we get

$$\frac{v_1}{v_2} = \frac{n_1}{n_2} \times 2$$

To keep the resonance

$$\frac{v_1}{v_2} = 1 = \frac{n_1}{n_2} \times 2$$

$$\Rightarrow n_2 = 2n_1$$

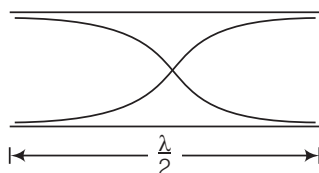
Hence, when the wire is doubled the number of loops also get doubled to produce the resonance. That is it resonates in second harmonic.

Q. 19 An organ pipe of length L open at both ends is found to vibrate in its first harmonic when sounded with a tuning fork of 480 Hz. What should be the length of a pipe closed at one end, so that it also vibrates in its first harmonic with the same tuning fork?

💡 Thinking Process

We should not confuse between pressure wave and displacement wave. By considering any type of wave outcome will be same.

Ans. Consider the situation shown in the diagram



As the organ pipe is open at both ends, hence for first harmonic

$$l = \frac{\lambda}{2}$$

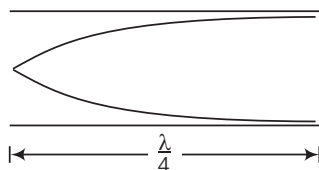
$$\Rightarrow \lambda = 2l \Rightarrow \frac{c}{v} = 2l \Rightarrow v = \frac{c}{2l}$$

where c is speed of the sound wave in air.

For pipe closed at one end

$$v' = \frac{c}{4L'}$$

c for first harmonic



Hence,

$$v = v'$$

[for resonance with same tuning fork]

\Rightarrow

$$\frac{c}{2L} = \frac{c}{4L'}$$

[\because speed remains constant]

\Rightarrow

$$\frac{L'}{L} = \frac{2}{4} = \frac{1}{2} \Rightarrow L' = \frac{L}{2}$$

Q. 20 A tuning fork A , marked 512 Hz, produces 5 beats per second, where sounded with another unmarked tuning fork B . If B is loaded with wax the number of beats is again 5 per second. What is the frequency of the tuning fork B when not loaded?

Ans. Frequency of tuning fork A ,

$$v_A = 512 \text{ Hz}$$

Probable frequency of tuning fork B ,

$$v_B = v_A \pm 5 = 512 \pm 5 = 517 \text{ or } 507 \text{ Hz}$$

when B is loaded, its frequency reduces.

If it is 517 Hz, it might reduced to 507 Hz given again a beat of 5 Hz.

If it is 507 Hz, reduction will always increase the beat frequency, hence $v_B = 517 \text{ Hz}$

Note For production of beats frequencies of the two tuning forks must be nearly equal i.e., slight difference in frequencies.

Q. 21 The displacement of an elastic wave is given by the function $y = 3\sin\omega t + 4\cos\omega t$, where y is in cm and t is in second. Calculate the resultant amplitude.

Ans. Given, displacement of an elastic wave $y = 3\sin\omega t + 4\cos\omega t$

Assume, $3 = a\cos\phi$... (i)

$4 = a\sin\phi$... (ii)

On dividing Eq. (ii) by Eq. (i)

$$\tan\phi = \frac{4}{3} \Rightarrow \phi = \tan^{-1}(4/3)$$

Also, $a^2\cos^2\phi + a^2\sin^2\phi = 3^2 + 4^2$

$\Rightarrow a^2(\cos^2\phi + \sin^2\phi) = 25$

$a^2 \cdot 1 = 25 \Rightarrow a = 5$

Hence, $Y = 5\cos\phi\sin\omega t + 5\sin\phi\cos\omega t$
 $= 5[\cos\phi\sin\omega t + \sin\phi\cos\omega t] = 5\sin(\omega t + \phi)$

where $\phi = \tan^{-1}(4/3)$

Hence, amplitude = 5 cm

Q. 22 A sitar wire is replaced by another wire of same length and material but of three times the earlier radius. If the tension in the wire remains the same, by what factor will the frequency change?

Thinking Process

In a sitar wire, the vibration is assumed to be similar as a wire fixed at both ends.

Ans. Frequency of vibrations produced by a stretched wire

$$v = \frac{n}{2l} \sqrt{\frac{T}{\mu}}$$

Mass per unit length $\mu = \frac{\text{Mass}}{\text{Length}} = \frac{\pi r^2 l \rho}{l} = \pi r^2 \rho$ [$\because M = v\rho = Al\rho = \pi r^2 l\rho$]

$\therefore v = \frac{n}{2l} \sqrt{\frac{T}{\pi r^2 \rho}} \Rightarrow v \propto \sqrt{\frac{1}{r^2}}$

$v \propto \frac{1}{r}$

Hence, when radius is tripled, v will be $\frac{1}{3}$ rd of previous value.

Q. 23 At what temperatures (in $^{\circ}\text{C}$) will the speed of sound in air be 3 times its value at 0°C ?

Ans. We know that speed of sound in air $v \propto \sqrt{T}$

$\therefore \frac{v_T}{v_0} = \sqrt{\frac{T_T}{T_0}} = \sqrt{\frac{T_T}{273}}$ [where T is in kelvin]

But $\frac{v_T}{v_0} = \frac{3}{1}$ [\because speed becomes three times]

$\therefore \frac{3}{1} = \sqrt{\frac{T_T}{273}} \Rightarrow \frac{T_T}{273} = 9$

$\therefore T_T = 273 \times 9 = 2457 \text{ K}$
 $= 2457 - 273 = 2184^{\circ}\text{C}$

Q. 24 When two waves of almost equal frequencies n_1 and n_2 reach at a point simultaneously, what is the time interval between successive maxima?

💡 Thinking Process

When two waves of almost equal frequencies interfere, they are producing beats.

Ans. Let, $n_1 > n_2$
 Beat frequency $v_b = n_1 - n_2$
 \therefore Time period of beats $= T_b = \frac{1}{v_b} = \frac{1}{n_1 - n_2}$

Short Answer Type Questions

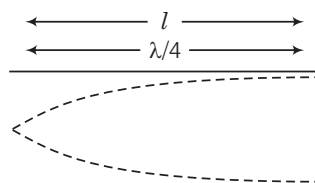
Q. 25 A steel wire has a length of 12 m and a mass of 2.10 kg. What will be the speed of a transverse wave on this wire when a tension of 2.06×10^4 N is applied?

Ans. Given, length of the wire

Mass of wire $l = 12$ m
 Tension $m = 2.10$ kg
 $T = 2.06 \times 10^4$ N
 Speed of transverse wave $v = \sqrt{\frac{T}{\mu}}$ [where μ = mass per unit length]
 $= \sqrt{\frac{2.06 \times 10^4}{\left(\frac{2.10}{12}\right)}} = \sqrt{\frac{2.06 \times 12 \times 10^4}{2.10}} = 343$ m/s

Q. 26 A pipe 20 cm long is closed at one end. Which harmonic mode of the pipe is resonantly excited by a source of 1237.5 Hz? (sound velocity in air = 330 ms^{-1})

Ans. Length of pipe



(Closed pipe)

$l = 20 \text{ cm} = 20 \times 10^{-2} \text{ m}$
 $v_{\text{funda}} = \frac{v}{4L} = \frac{330}{4 \times 20 \times 10^{-2}}$ (for closed pipe)
 $v_{\text{funda}} = \frac{330 \times 100}{80} = 412.5 \text{ Hz}$
 $\frac{v_{\text{given}}}{v_{\text{funda}}} = \frac{1237.5}{412.5} = 3$

Hence, 3rd harmonic mode of the pipe is resonantly excited by the source of given frequency.

Q. 27 A train standing at the outer signal of a railway station blows a whistle of frequency 400 Hz still air. The train begins to move with a speed of 10 ms^{-1} towards the platform. What is the frequency of the sound for an observer standing on the platform? (sound velocity in air = 330 ms^{-1})

Ans. As the source (train) is moving towards the observer (platform) hence apparent frequency observed is more than the natural frequency.

Frequency of whistle $\nu = 400 \text{ Hz}$

Speed of train $\nu_t = 10 \text{ m/s}$

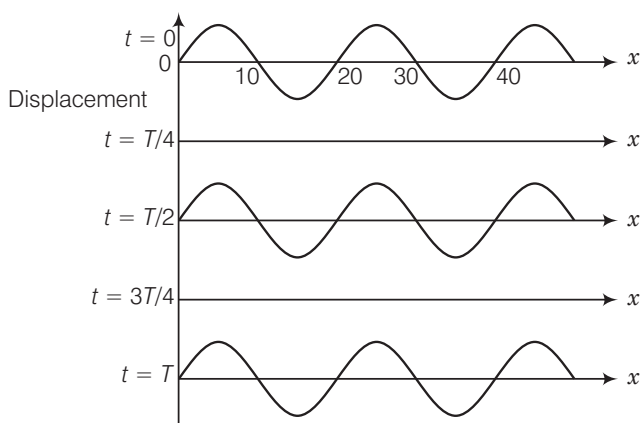
Velocity of sound in air $\nu = 330 \text{ m/s}$

$$\text{Apparent frequency when source is moving } \nu_{\text{app}} = \left(\frac{\nu}{\nu - \nu_t} \right) \nu$$

$$= \left(\frac{330}{330 - 10} \right) 400$$

$$\Rightarrow \nu_{\text{app}} = \frac{330}{320} \times 400 = 412.5 \text{ Hz}$$

Q. 28 The wave pattern on a stretched string is shown in figure. Interpret what kind of wave this is and find its wavelength.



Ans. We have to observe the displacement and position of different points, then accordingly nature of two wave is decided.

Points on positions $x = 10, 20, 30, 40$ never move, always at mean position with respect to time. These are forming nodes which characterise a stationary wave.

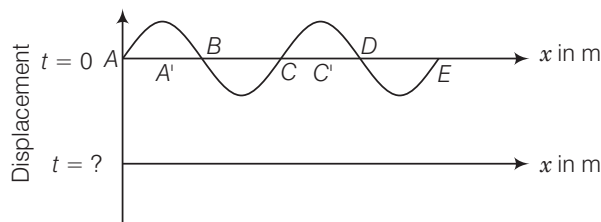
$$\therefore \text{Distance between two successive nodes} = \frac{\lambda}{2}$$

$$\Rightarrow \lambda = 2 \times (\text{node to node distance})$$

$$= 2 \times (20 - 10)$$

$$= 2 \times 10 = 20 \text{ cm}$$

- Q. 29** The pattern of standing waves formed on a stretched string at two instants of time are shown in figure. The velocity of two waves superimposing to form stationary waves is 360 ms^{-1} and their frequencies are 256 Hz.



- Calculate the time at which the second curve is plotted.
- Mark nodes and antinodes on the curve.
- Calculate the distance between A' and C' .

Ans. Given, frequency of the wave $\nu = 256 \text{ Hz}$

Time period $T = \frac{1}{\nu} = \frac{1}{256} \text{ s} = 3.9 \times 10^{-3} \text{ s}$

- (a) Time taken to pass through mean position is

$$t = \frac{T}{4} = \frac{1}{40} = \frac{3.9 \times 10^{-3}}{4} \text{ s} = 9.8 \times 10^{-4} \text{ s}$$

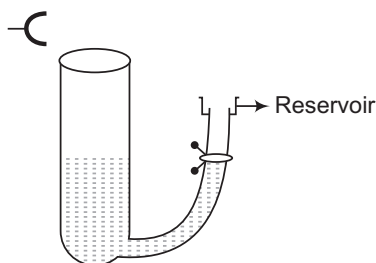
- (b) Nodes are A, B, C, D, E (i.e., zero displacement)

Antinodes are A', C' (i.e., maximum displacement)

- (c) It is clear from the diagram A' and C' are consecutive antinodes, hence separation = wavelength (λ)

$$= \frac{v}{\nu} = \frac{360}{256} = 1.41 \text{ m} \quad [\because v = \nu\lambda]$$

- Q. 30** A tuning fork vibrating with a frequency of 512 Hz is kept close to the open end of a tube filled with water (figure). The water level in the tube is gradually lowered. When the water level is 17 cm below the open end, maximum intensity of sound is heard. If the room temperature is 20°C , calculate

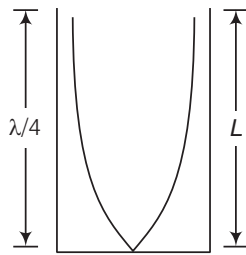


- speed of sound in air at room temperature.
- speed of sound in air at 0°C .
- if the water in the tube is replaced with mercury, will there be any difference in your observations?

Thinking Process

The pipe partially filled with water, acts as closed organ pipe. According to this, we will find associated frequencies.

Ans. Consider the diagram frequency of tuning fork $\nu = 512$ Hz.



For observation of first maxima of intensity

(a) $L = \frac{\lambda}{4} \Rightarrow \lambda = 4L$

[for closed pipe]

$$\begin{aligned} v &= \nu \lambda = 512 \times 4 \times 17 \times 10^{-2} \\ &= 348.16 \text{ m/s} \end{aligned}$$

(b) We know that $v \propto \sqrt{T}$
where temperature (T) is in kelvin.

$$\frac{v_{20}}{v_0} = \sqrt{\frac{273 + 20}{273 + 0}} = \sqrt{\frac{293}{273}}$$

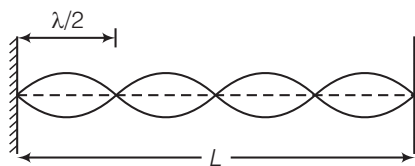
$$\frac{v_{20}}{v_0} = \sqrt{1.073} = 1.03$$

$$v_0 = \frac{v_{20}}{1.03} = \frac{348.16}{1.03} = 338 \text{ m/s}$$

(c) Resonance will be observed at 17 cm length of air column, only intensity of sound heard may be greater due to more complete reflection of the sound waves at the mercury surface because mercury is more denser than water.

Q. 31 Show that when a string fixed at its two ends vibrates in 1 loop, 2 loops, 3 loops and 4 loops, the frequencies are in the ratio 1 : 2 : 3 : 4.

Ans. Let, there are n number of loops in the string.



Length corresponding each loop is $\frac{\lambda}{2}$.

Now, we can write

$$L = \frac{n\lambda}{2} \Rightarrow \lambda = \frac{2L}{n}$$

[for n loops]

\Rightarrow

$$\frac{v}{\nu} = \frac{2L}{n} \Rightarrow [\because v = \nu \lambda]$$

\Rightarrow

$$\nu = \frac{n}{2L} v = \frac{n}{2L} \sqrt{\frac{T}{\mu}} \quad [\because \text{velocity of transverse waves} = \sqrt{T/\mu}]$$

$\Rightarrow \nu \propto n$

[\because length and speed are constants]

So,

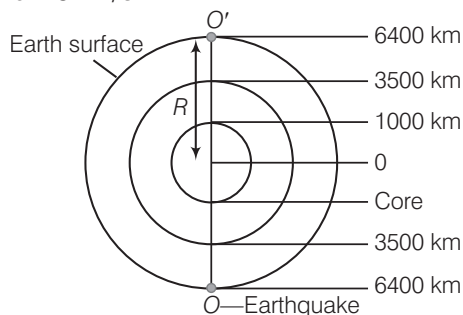
$$\begin{aligned} \nu_1 : \nu_2 : \nu_3 : \nu_4 &= n_1 : n_2 : n_3 : n_4 \\ &= 1 : 2 : 3 : 4 \end{aligned}$$

Long Answer Type Questions

- Q. 32** The earth has a radius of 6400 km. The inner core of 1000 km radius is solid. Outside it, there is a region from 1000 km to a radius of 3500 km which is in molten state. Then again from 3500 km to 6400 km the earth is solid. Only longitudinal (P) waves can travel inside a liquid.

Assume that the P wave has a speed of 8 km s^{-1} in solid parts and of 5 km s^{-1} in liquid parts of the earth. An earthquake occurs at some place close to the surface of the earth. Calculate the time after which it will be recorded in a seismometer at a diametrically opposite point on the earth, if wave travels along diameter?

Ans. Speed of wave in solid = 8 km/s



Speed of wave in liquid = 5 km/s

$$\begin{aligned} \text{Required time} &= \left[\frac{1000 - 0}{8} + \frac{3500 - 1000}{5} + \frac{6400 - 3500}{8} \right] \times 2 \quad [\because \text{diameter} = \text{radius} \times 2] \\ &= \left[\frac{1000}{8} + \frac{2500}{5} + \frac{2900}{8} \right] \times 2 \quad \left[\text{time} = \frac{\text{distance}}{\text{speed}} \right] \\ &= [125 + 500 + 362.5] \times 2 = 1975 \end{aligned}$$

As we are considering at diametrically opposite point, hence there is a multiplication of 2.

- Q. 33** If c is rms speed of molecules in a gas and v is the speed of sound waves in the gas, show that c/v is constant and independent of temperature for all diatomic gases.

Ans. We know that rms speed of molecules of a gas

$$c = \sqrt{\frac{3p}{\rho}} = \sqrt{\frac{3RT}{M}} \quad \dots(i)$$

where M = molar mass of the gas.

$$\text{Speed of sound wave in gas } v = \sqrt{\frac{\gamma p}{\rho}} = \sqrt{\frac{\gamma RT}{M}} \quad \dots(ii)$$

On dividing Eq. (i) by Eq. (ii), we get

$$\frac{c}{v} = \sqrt{\frac{3RT}{M} \times \frac{M}{\gamma RT}} \Rightarrow \frac{c}{v} = \sqrt{\frac{3}{\gamma}}$$

where γ = adiabatic constant for diatomic gas

$$\gamma = \frac{7}{5} \quad \left[\text{since } \gamma = \frac{C_p}{C_v} \right]$$

Hence, $\frac{c}{v} = \text{constant}$

Q. 34 Given below are some functions of x and t to represent the displacement of an elastic wave.

- (i) $y = 5 \cos(4x) \sin(20t)$
- (ii) $y = 4 \sin(5x - t/2) + 3 \cos(5x - t/2)$
- (iii) $y = 10 \cos[(252 - 250)\pi t] \cos[(252 + 250)\pi t]$
- (iv) $y = 100 \cos(100\pi t + 0.5x)$

State which of these represent

- (a) a travelling wave along $-x$ -direction
- (b) a stationary wave
- (c) beats
- (d) a travelling wave along $+x$ -direction

Given reasons for your answers.

💡 Thinking Process

To predict the nature of wave we have to compare with standard equations.

- Ans. (a)** The equation $y = 100 \cos(100\pi t + 0.5x)$ is representing a travelling wave along x -direction.
- (b)** The equation $y = 5 \cos(4x) \sin(20t)$ represents a stationary wave, because it contains \sin , \cos terms i.e., combination of two progressive waves
- (c)** As the equation $y = 10 \cos[(252 - 250)\pi t] \cdot \cos[(252 + 250)\pi t]$ involving sum and difference of two near by frequencies 252 and 250 have this equation represents beats formation.
- (d)** As the equation $y = 4 \sin(5x - t/2) + 3 \cos(5x - t/2)$ involves negative sign with x , have if represents a travelling wave along $-x$ -direction.

Note We must not confuse with sign connected with x and direction of propagation of wave. It is just reversed, positive sign with x shown propagation of the wave in negative x -direction and vice-versa.

Q. 35 In the given progressive wave $y = 5 \sin(100\pi t - 0.4\pi x)$ where y and x are in metre, t is in second. What is the

- (a) amplitude?
- (b) wavelength?
- (c) frequency?
- (d) wave velocity?
- (e) particle velocity amplitude?

Ans. Standard equation of a progressive wave is given by

$$y = a \sin(\omega t - kx + \phi)$$

This is travelling along positive x -direction.

Given equation is $y = 5 \sin(100\pi t - 0.4\pi x)$

Comparing with the standard equation

(a) Amplitude = 5m

(b) $k = \frac{2\pi}{\lambda} = 0.4\pi$

$$\therefore \text{Wavelength } \lambda = \frac{2\pi}{k} = \frac{2\pi}{0.4\pi} = \frac{20}{4} = 5\text{m}$$

(c) $\omega = 100\pi$

$$\omega = 2\pi\nu = 100\pi$$

$$\therefore \text{Frequency } \nu = \frac{100\pi}{2\pi} = 50\text{ Hz}$$

(d) Wave velocity $v = \frac{\omega}{k}$, where k is wave number and $k = \frac{2\pi}{\lambda}$.

$$= \frac{100\pi}{0.4\pi} = \frac{1000}{4}$$

$$= 250 \text{ m/s}$$

(e) $y = 5\sin(100\pi t - 0.4\pi x)$... (i)

$$\frac{dy}{dt} = \text{particle velocity}$$

From Eq. (i),

$$\frac{dy}{dt} = 5(100\pi)\cos[100\pi t - 0.4\pi x]$$

For particle velocity amplitude $\left(\frac{dy}{dt}\right)_{\max}$

Which will be for $\{\cos[100\pi t - 0.4\pi x]\}_{\max} = 1$

\therefore Particle velocity amplitude

$$= \left(\frac{dy}{dt}\right)_{\max} = 5(100\pi) \times 1$$

$$= 500\pi \text{ m/s}$$

- Q. 36** For the harmonic travelling wave $y = 2\cos 2\pi(10t - 0.0080x + 3.5)$ where x and y are in cm and t is in second. What is the phase difference between the oscillatory motion at two points separated by a distance of
- (a) 4 m (b) 0.5 m
- (c) $\frac{\lambda}{2}$ (d) $\frac{3\lambda}{4}$ (at a given instant of time)
- (e) What is the phase difference between the oscillation of a particle located at $x = 100 \text{ cm}$, at $t = T \text{ sec}$ and $t = 5$?

Ans. Given, wave functions are

$$y = 2\cos 2\pi(10t - 0.0080x + 3.5)$$

$$= 2\cos(20\pi t - 0.016\pi x + 7\pi)$$

Now, standard equation of a travelling wave can be written as

$$y = a\cos(\omega t - kx + \phi)$$

On comparing with above equation, we get

$$a = 2 \text{ cm}$$

$$\omega = 20\pi \text{ rad/s}$$

$$k = 0.016\pi$$

$$\text{Path difference} = 4 \text{ cm}$$

(a) Phase difference $\Delta\phi = \frac{2\pi}{\lambda} \times \text{Path difference}$

$$\therefore \Delta\phi = 0.016\pi \times 4 \times 100$$

$$= 6.4\pi \text{ rad}$$

$$\left(\because \frac{2\pi}{\lambda} = k \right)$$

$$(b) \Delta\phi = \frac{2\pi}{\lambda} \times (0.5 \times 100)$$

[∵ Path difference = 0.5 m]

$$= 0.016\pi \times 0.5 \times 100$$

$$= 0.8\pi \text{ rad}$$

$$(c) \Delta\phi = \frac{2\pi}{\lambda} \times \left(\frac{\lambda}{2}\right) = \pi \text{ rad}$$

[∵ Path difference = $\lambda/2$]

$$(d) \Delta\phi = \frac{2\pi}{\lambda} \times \frac{3\lambda}{4} = \frac{3\pi}{2} \text{ rad}$$

$$(e) T = \frac{2\pi}{\omega} = \frac{2\pi}{20\pi} = \frac{1}{10} \text{ s}$$

∴

At $x = 100 \text{ cm}$,

$$t = T$$

$$\phi_1 = 20\pi T - 0.016\pi(100) + 7\pi$$

$$= 20\pi\left(\frac{1}{10}\right) - 1.6\pi + 7\pi = 2\pi - 1.6\pi + 7\pi \quad \dots(i)$$

Again, at $x = 100 \text{ cm}$, $t = 5\text{s}$

$$\phi_2 = 20\pi(5) - 0.016\pi(100) + 7\pi$$

$$= 100\pi - (0.016 \times 100)\pi + 7\pi$$

$$= 100\pi - 1.6\pi + 7\pi \quad \dots(ii)$$

∴ From Eqs. (i) and (ii), we get

$$\Delta\phi = \text{phase difference} = \phi_2 - \phi_1$$

$$= (100\pi - 1.6\pi + 7\pi) - (2\pi - 1.6\pi + 7\pi)$$

$$= 100\pi - 2\pi = 98\pi \text{ rad}$$