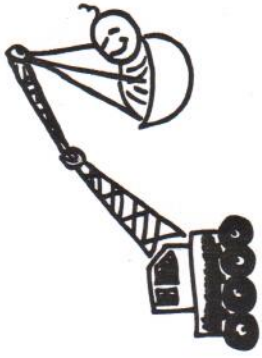
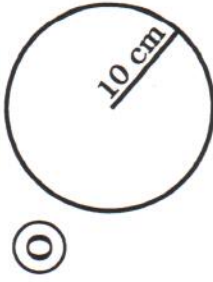
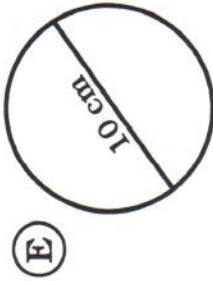
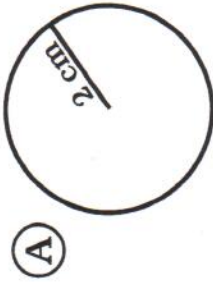
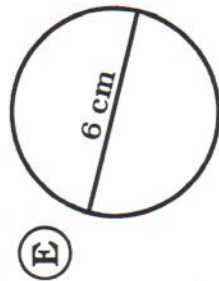


Why Can't the Stork Deliver Heavy Babies?



Solve the questions about area, and find the answer at the bottom.

I. Find the area. Leave in terms of π .



II. Find the area. Use $\pi \approx 3.14$.



III. Find the radius. Use $\pi \approx 3.14$.



12.56 cm^2	$100\pi \text{ cm}^2$	7.065 cm^2	$36\pi \text{ cm}^2$	113.04 cm^2	$9\pi \text{ cm}^2$	3.14 cm^2	8 cm	50.24 cm^2	$4\pi \text{ cm}^2$	6 cm	28.26 cm^2	11 cm	254.34 cm^2	78.5 cm^2	$25\pi \text{ cm}^2$