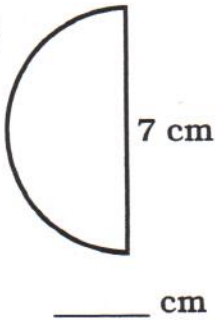




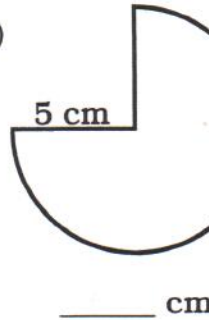
Why is the Liberty Bell So Funny?

I. Find the perimeter. Use $\pi \approx 3.14$.

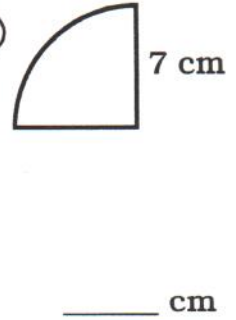
UP



KS

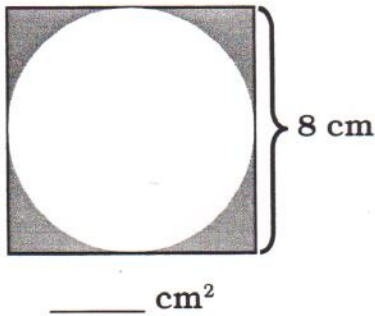


IT

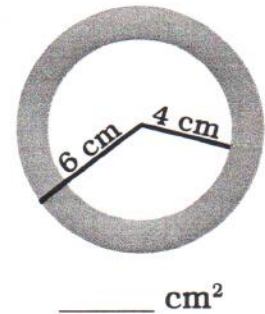


II. Find the area of the shaded part. Use $\pi \approx 3.14$.

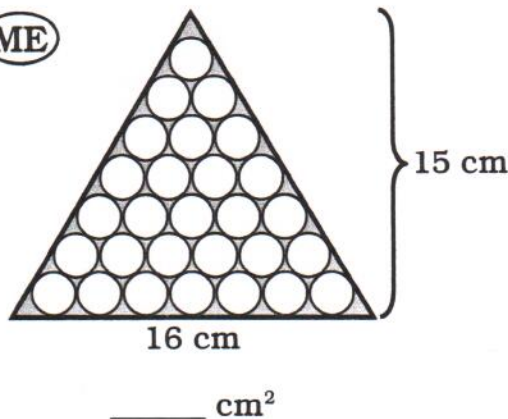
AC



CR



ME



Each circle has a diameter of 2 cm.

24.99	31.4	62.8	13.76	33.55	21.98	32.08	120	17.99