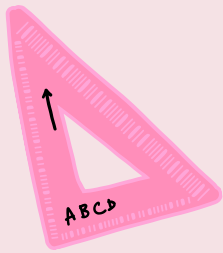


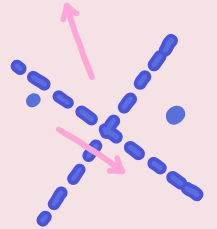
Find the missing number

Solve the equations below then match the answer to number word on the right



$7 - 4 = \square$

- Un




$5 - 0 = \square$

- Deux

$8 - 4 = \square$

- Trois



$5 - 3 = \square$

- Quatre

$7 - 6 = \square$

- Cinq

