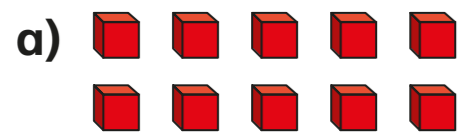


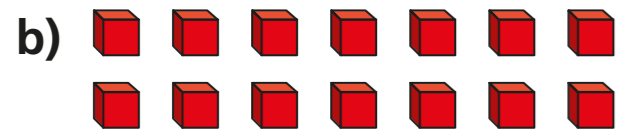
Add 2-digit numbers (2)



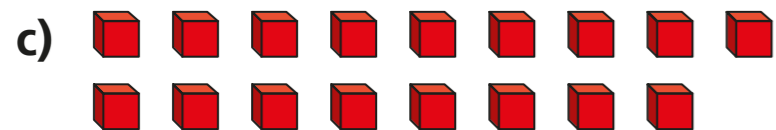
1 Count the ones and complete the sentences.



ones = ten

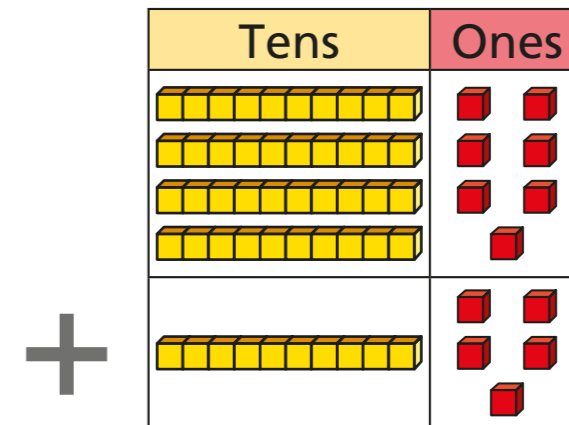


ones = ten and ones



ones = ten and ones

2 Complete the additions.



ones + ones = ones

ones = ten + ones

tens + tens = tens

+ =



3 Use base 10 to complete the additions.

- | | |
|-------------------------------------|-------------------------------------|
| a) $7 + 4 =$ <input type="text"/> | f) $37 + 14 =$ <input type="text"/> |
| b) $10 + 30 =$ <input type="text"/> | g) $22 + 19 =$ <input type="text"/> |
| c) $17 + 34 =$ <input type="text"/> | h) $48 + 19 =$ <input type="text"/> |
| d) $19 + 21 =$ <input type="text"/> | i) $33 + 29 =$ <input type="text"/> |
| e) $18 + 64 =$ <input type="text"/> | j) $39 + 47 =$ <input type="text"/> |

4 Write the addition.

		T	O	
		4	6	
	+	1	5	
		6	1	
		1		

$$\square + \square = \square$$

What does the little 1 represent?
Talk to a partner.



5 Complete the additions.

a)

		T	O	
		5	7	
	+	1	5	

c)

		T	O	
		1	7	
	+	7	3	

b)

		T	O	
		1	8	
	+	1	9	

d)

		T	O	
		6	3	
	+	1	9	

6 Fill in the missing digits to complete the number sentence.

$$_9 + _3 = 62$$

Compare answers with a partner.

How many different answers can you find?

