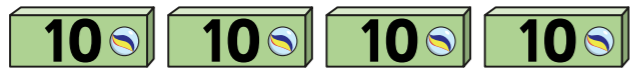


Add and subtract 10s

1 a) Eva has some marbles.



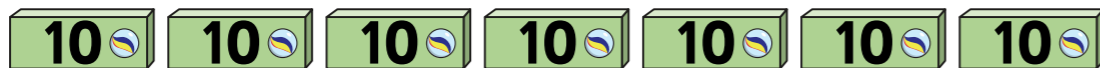
How many marbles does Eva have?

Eva has marbles.

She buys 3 more boxes of marbles.

How many marbles does she have now?

b) Teddy has some marbles.



How many marbles does Teddy have?

Teddy has marbles.

He gives 5 boxes of marbles to his friend.

How many marbles does he have now?

2 What calculations are represented?
Complete the number sentences.

a)

+ =

b)

+ =

3 Use base 10 to complete the calculations.

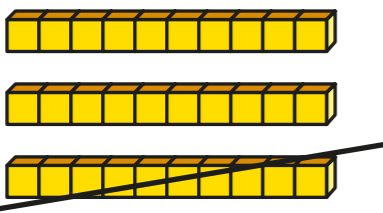
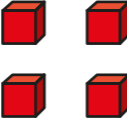
a) $24 + 20 =$

b) $17 + 50 =$

c) $40 + 16 =$



- 4 What calculation is represented?
Complete the number sentence.

Tens	Ones
	

$$\square - \square = \square$$

- 5 Use base 10 to complete the calculations.

a) $34 - 20 = \square$

b) $57 - 20 = \square$

c) $46 - 40 = \square$




- 6 Huan has 6 stickers.



He gets 10 new stickers every day for 8 days.

How many stickers will Huan have after 8 days?



Use the number track to help you.





Huan will have stickers.

- 7  = 30  = 10  = 40

Complete the calculations.

a)  +  =

b)  -  =

c)  -  =

