

# Year 1 Booklet

a


d



b

c

*Focus: To write a storyboard of the Gingerbread Man.*



---

---

---

---




---

---

---

---




---

---

---

---




---

---

---

---




---

---

---

---



---

---

---

---

*Focus: To use adjectives to describe the Gingerbread Man.*



Word bank

head    eyes    mouth    arms  
buttons    legs



*Focus: I can identify and describe a variety of different animals.*

*Mammals*


*Reptiles*


*Amphibians*


*Birds*


Focus: To create a Minibeast fact sheet.



Type: \_\_\_\_\_

Amount of legs: \_\_\_\_\_

Other information: \_\_\_\_\_

\_\_\_\_\_  
\_\_\_\_\_

Type: \_\_\_\_\_

Amount of legs: \_\_\_\_\_

Other information: \_\_\_\_\_

\_\_\_\_\_  
\_\_\_\_\_



Type: \_\_\_\_\_

Amount of legs: \_\_\_\_\_

Other information: \_\_\_\_\_

\_\_\_\_\_  
\_\_\_\_\_



Type: \_\_\_\_\_

Amount of legs: \_\_\_\_\_

Other information: \_\_\_\_\_

\_\_\_\_\_



Focus: The seasons in our country - draw a picture for each season.

Spring

Summer

Autumn

Winter

## Hundred Square

Count in 2s and shade the squares in yellow

Count in 5s and shade the squares in red

Count in 10s and circle the numbers

1	2	3	4	5	6	7	8	9	10
11	12	13	14	15	16	17	18	19	20
21	22	23	24	25	26	27	28	29	30
31	32	33	34	35	36	37	38	39	40
41	42	43	44	45	46	47	48	49	50
51	52	53	54	55	56	57	58	59	60
61	62	63	64	65	66	67	68	69	70
71	72	73	74	75	76	77	78	79	80
81	82	83	84	85	86	87	88	89	90
91	92	93	94	95	96	97	98	99	100

Use the hundred square to answer questions such as:

What is one more than 63?

One less than 76?


Two more than 25?

Two less than 29?

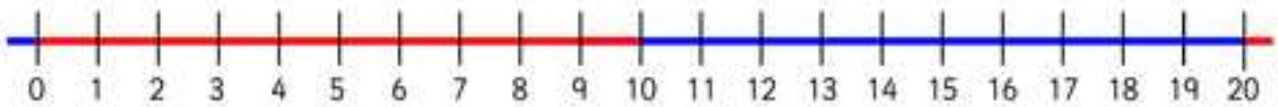


Use the number lines to complete these calculations:

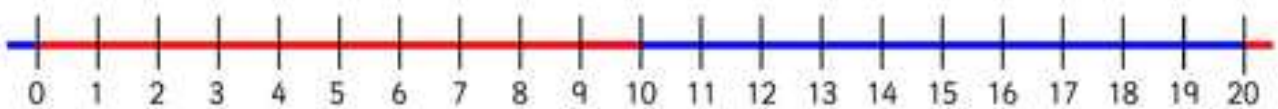
$$6 + 5 =$$



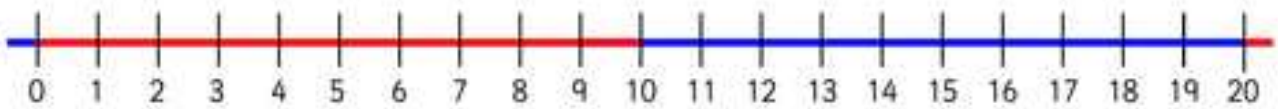
$$12 + 7 =$$



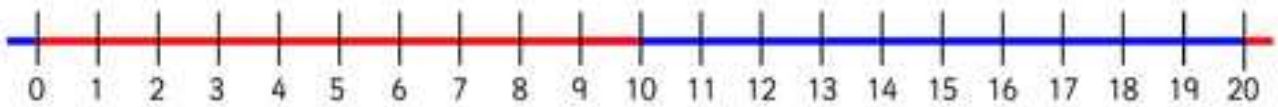
$$15 - 6 =$$



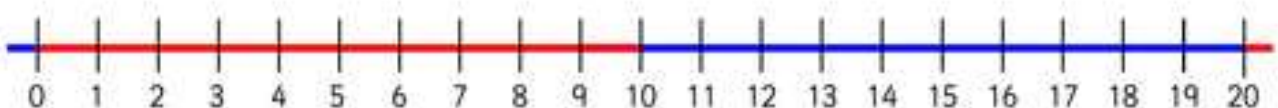
$$18 - 4 =$$



$$20 - 7 =$$



$$20 - 12 =$$



Which items can you buy for 10p? How many different answers can you find?



Carrots 3p



Potatoes 7p



Onions 5p



Apple 4p



Corn 6p



Beans 2p

How much change would you be left with when buying items for the Scarecrows' wedding with 10p?



1p



2p



8p



3p



6p



5p



7p



5p