

2004 SACS/Area B Ancient Geography Test

contest #16

Part I. Where would you go to see each of the following?

1. Carthage
 - a) Sicilia
 - b) Greece
 - c) Macedonia
 - d) North Africa
2. the Mausoleum of Hadrian
 - a) Palatine Hill
 - b) on the Tiber
 - c) Campus Martius
 - d) on the Via Appia
3. the Stadium of Domitian
 - a) Campus Martius
 - b) Acropolis
 - c) the Forum
 - d) Forum Holitorium
4. the Areopagus
 - a) on the Via Appia
 - b) on the Capitoline
 - b) near the Acropolis
 - d) across the Tiber
5. Carthago Nova
 - a) Dacia
 - b) Mauretania
 - c) Britannia
 - d) Hispania
6. Salonae
 - a) Dalmatia
 - b) Syria
 - c) Cyrene
 - d) Bithynia
7. Bithynia
 - a) on the Adriatic
 - b) on the Black Sea
 - c) on the Rhine
 - d) in Asia
8. Emperor Justinian's "Hagia Sophia"
 - a) Athens
 - b) Constantinople
 - c) Alexandria
 - d) Roma
9. Baths of Caracalla
 - a) in the Forum
 - b) on the Via Appia
 - c) on the Palatine
 - d) on the Via Flaminia
10. Syracusae
 - a) Gallia
 - b) Italia
 - c) Sicilia
 - d) Libya
11. Antioch
 - a) Syria
 - b) Galatia
 - c) Thrace
 - d) Asia
12. Corinth
 - a) Moesia
 - b) Lusitania
 - c) Raetia
 - d) Peloponnese
13. Philippi
 - a) Achaea
 - b) Numidia
 - c) Caledonia
 - d) Thrace
14. Thessalonica
 - a) Galatia
 - b) Illyricum
 - c) Thracia
 - d) Dacia
15. Rome's harbor for much of its history
 - a) Ostia
 - b) Veii
 - c) Praeneste
 - d) Paestum
16. the Temple of Juno Moneta
 - a) Campus Martius
 - b) Forum Romanum
 - c) Capitoline
 - d) on the Via Appia
17. Cyrene
 - a) Cyrenaica
 - b) Phoenicia
 - c) Galatia
 - d) Armenia
18. the Tamesa River
 - a) Britannia
 - b) Macedonia
 - c) Parthia
 - d) Mauritania
19. Mons Graupius
 - a) Asia
 - b) Creta
 - c) Germania
 - d) Cyrenaica
20. Ilerda, Corduba, and Salmantica
 - a) Hibernia
 - b) Cyprus
 - c) Hispania
 - d) Phrygia
21. the Temple of Vesta
 - a) Palatine Hill
 - b) Forum Romanum
 - c) Campus Martius
 - d) in the Subura
22. Site where the first ever French army was defeated
 - a) Neapolis
 - b) Alexandria
 - c) Alesia
 - d) Armenia
23. Galatia
 - a) Hispania
 - b) Egypt
 - c) Asia Minor
 - d) Germania

Part 2: Match the illustration with its name (See illustrations at back).

24. a) Trajan's Market b) Diocletian's Bath c) Basilica of Constantine d) Temple of Concord
25. a) Temple of Saturn b) Forum of Nerva c) Shrine of Cloacina d) Trajan's Market
26. a) Temple of Caesar b) Temple of Jupiter c) Temple of Saturn d) Temple of Janus
27. a) Basilica Aemilia b) Temple of Antoninus c) Library of Peace d) Temple of Castor
28. a) Temple of Castor b) Temple of Caesar c) Temple of Vesta d) Temple of Vespasian
29. a) Temple of Hercules b) Ara Pacis c) Shrine of Cloacina d) Hadrian's Tomb
30. a) Basilica Nova b) Pantheon c) Baths of Trajan d) Temple of Mars Ultor
31. a) Sanctuary of Fortuna Primigenia b) Hadrian's Villa c) Temple of Jupiter Optimus Maximus
d) Aelia Capitolina
32. a) Theater of Pompey b) Theater of Marcellus c) Stadium of Domitian d) Circus Maximus
33. a) Zeus' Shrine at Pergamon b) Apollo's Shrine at Delphi c) Hadrian's Villa
d) Diocletian's Palace
34. The Rostra
35. The Propylea a) 1 b) 3 c) 4 d) 5 e) 6
36. The Erechtheon a) 1 b) 2 c) 5 d) 6 e) 7
37. Baths of Caracalla
38. Arch of Septimius Severus
39. Temple of Juno: a) #1 b) #2 c) #3 d) #5

Part 3: Please choose the best answer for each question:

40. How far is Pompeii from Mt. Vesuvius?
a) 1.5 miles b) 7 miles c) 17 miles d) about 30 miles
41. What is the name of the sea just to the east of the Italian peninsula?
a) Ionian Sea b) Adriatic Sea c) Aegean Sea d) Oceanus Atlanticus
42. Which is farthest from Rome?
a) Veii b) Ostia c) Beneventum d) Lavinium
43. Which is not an island in the Mediterranean?
a) Balaeric Islands b) Corsica c) Cyprus d) Hellespontus
44. Between Dacia and Pannonia is:
a) Pyrenees b) Danube c) Carpathian Mtns d) Euphrates
45. Between Carrhae and Antioch is:
a) the Nile b) Alpes c) Euphrates d) Rhodopian Mtns
46. Which of these was not in what is now Turkey?
a) Bithynia b) Galatia c) Cappadocia d) Macedonia
47. The Caucasus Mountains are on what sea?
a) Black b) Aegean c) Tyrhenian d) Marmara
48. Which is not in the Peloponnese?
a) Argos b) Mycenae c) Ephesus d) Sparta
49. The island near Athens is:
a) Salamis b) Rhodes c) Boeotia d) Naxos
50. Which is not a river in Hispania?
a) Iberus b) Bagradas c) Tagus d) Baetis

Part 4: Please choose the correct modern name for the ancient name:

51. Britannia
a) Scotland b) Holland c) England d) Monaco
52. Padus
a) Euphrates b) Po c) Sienne d) Thames
53. Ister
a) Danube b) Rhine c) Rhone d) Tiber

54. Lugdunum
 a) Aquitania b) Poland c) Lyon d) Vienna
55. Constantinople
 a) Ravenna b) Istanbul c) Alexandria d) Jerusalem
56. Oceanus Germanicus
 a) English Channel b) Mare Internum c) North Sea d) Baltic Sea

Part 5: Please choose the correct name for each location on the map.

Map A - Imperial Rome

56. Aegyptia is which number? a) 33 b) 35 c) 45 d) 17 e) 54
57. Which is Macedonia? a) 25 b) 9 c) 4 d) 15 e) 30
58. Which Roman province had been part of the Parthian Empire?
 a) 22 b) 36 c) 50 d) 10 e) 2
59. Athens is closest to which number? a) 24 b) 32 c) 41 d) 31 e) 49
60. Jerusalem is located in which province? a) 33 b) 52 c) 35 d) 40 e) 6

Map B - Forum Romanum

61. Originally the king's palace, later the official residence of the pontifex maximus - Regia
 a) 12 b) 21 c) 15 d) 3 e) 19
62. Arch of Titus - a) 5 b) 8 c) 18 d) 26 e) 9
63. What is #6? a) Arch of Constantine b) the Curia c) the rostra d) Atrium Vestae e) Cloacina


Map C - Italia

64. #22 is: a) Corsica b) Sicilia c) Sardinia d) Agates Islands e) Capri
65. Brundisium is which number? a) 32 b) 30 c) 16 d) 36 e) 5
66. The Rubicon is nearest: a) 12 b) 8 c) 25 d) 24 e) 9
67. Which number is in Picenum, Pompey's homeland? a) 4 b) 15 c) 34 d) 20 e) 1
68. Which is in Samnium? a) 28 b) 32 c) 30 d) 14 e) 11
69. Lake Trasimene is nearest? a) 25 b) 20 c) 21 d) 2 e) 19
70. Cumae, home of the Sibyl? [inset map] a) 51 b) 41 c) 47 d) 45 e) 43

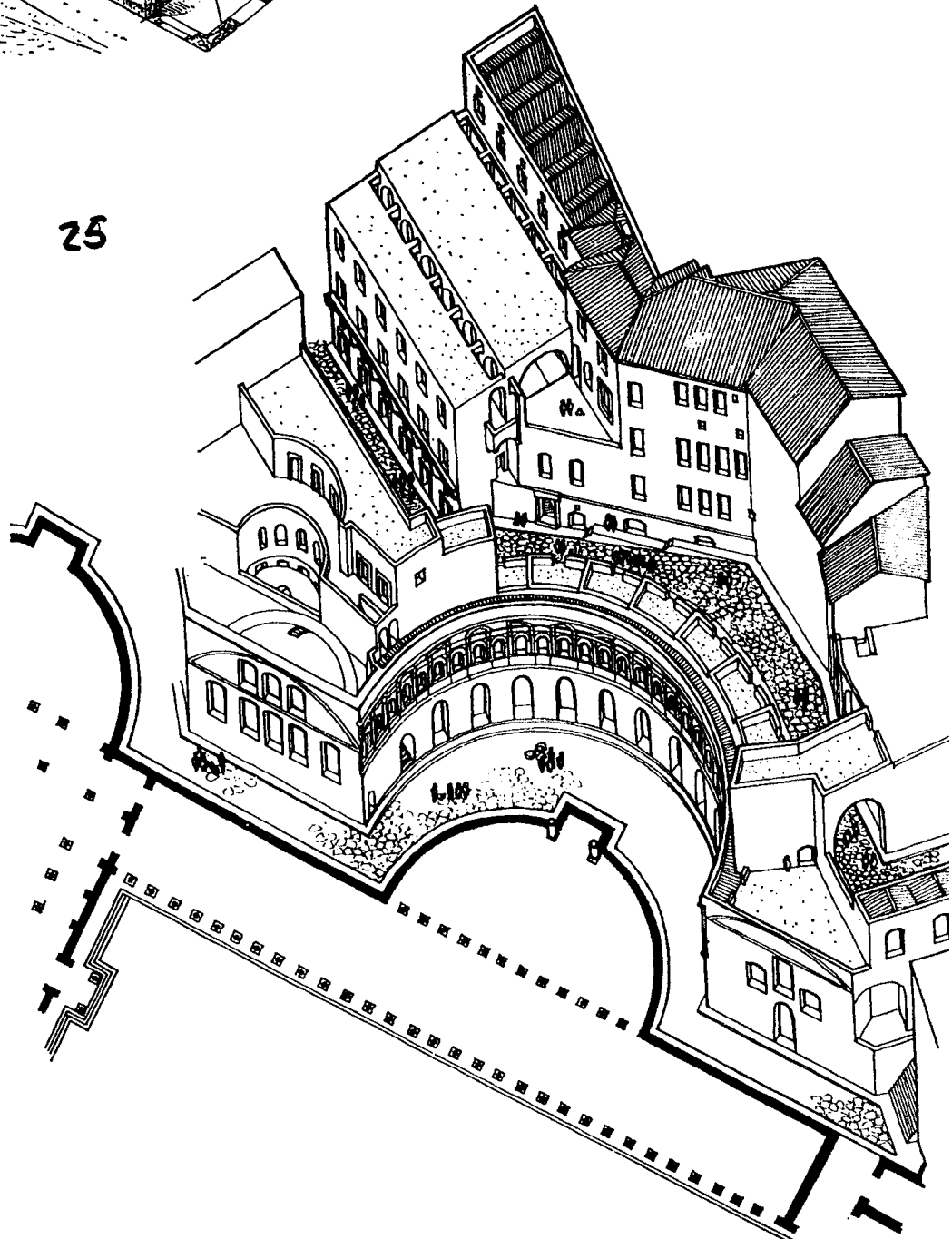
Tie-Breakers

96. The Cyclades are located in: a) the Aegean b) Gallia c) North Africa d) Asia e) Macedonia
97. Modern Tuscany is ancient: a) Transpadana b) Etruria c) Riviera d) Calabria e) Latium
98. Vesuvius is located in what region? a) Umbria b) Campania c) Apulia d) Liguria e) Venetia
99. Bithynia often overlapped: a) Caledonia b) Pontus c) Cappadocia d) Armenia e) Moesia
100. In the illustration for question 39, what is #3? a) the Chalcidum b) Temple of Apollo
 c) Temple of Janus d) Tabularium e) Curia


24




25




26



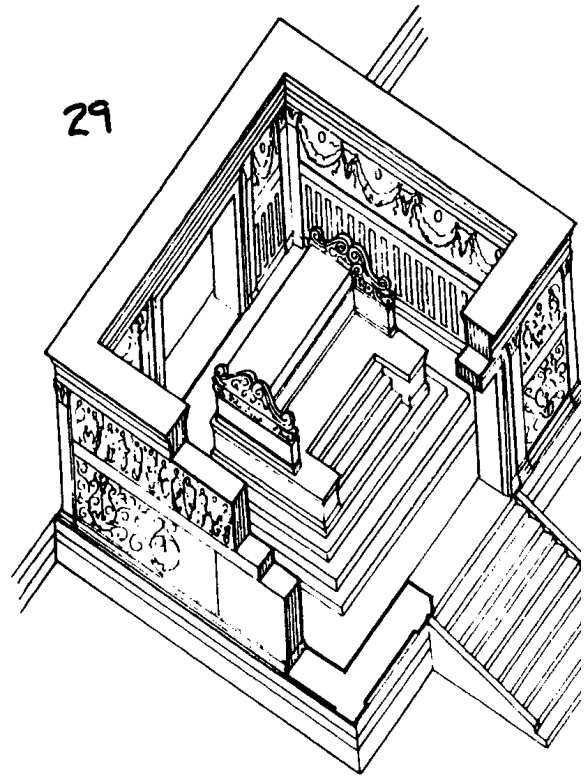
27



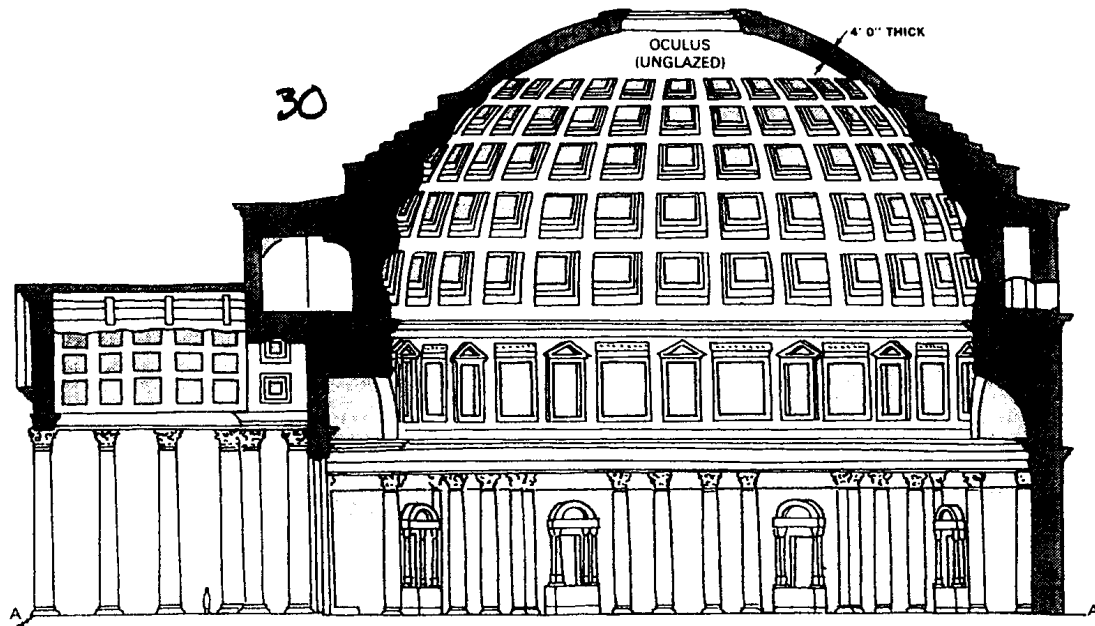
28

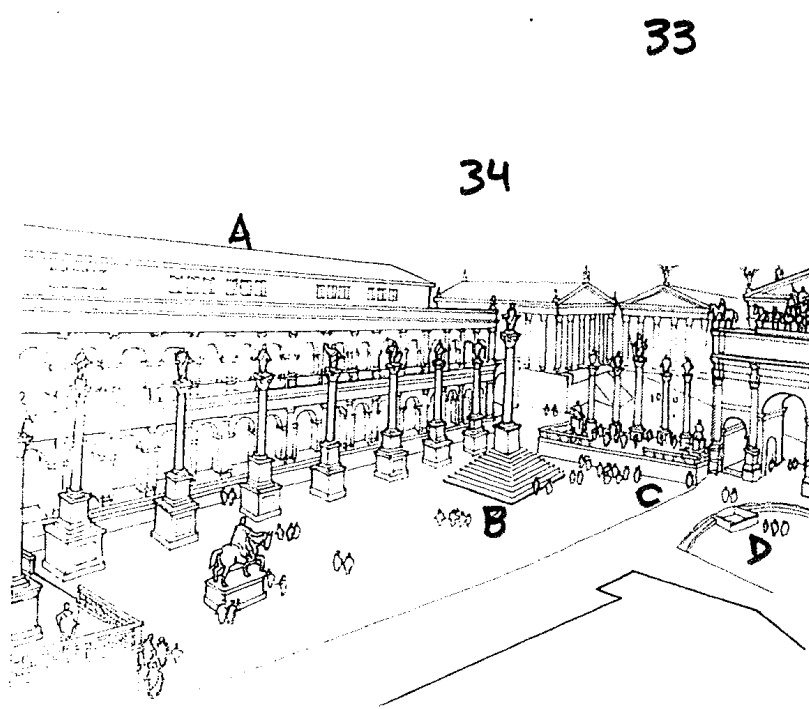






29



30

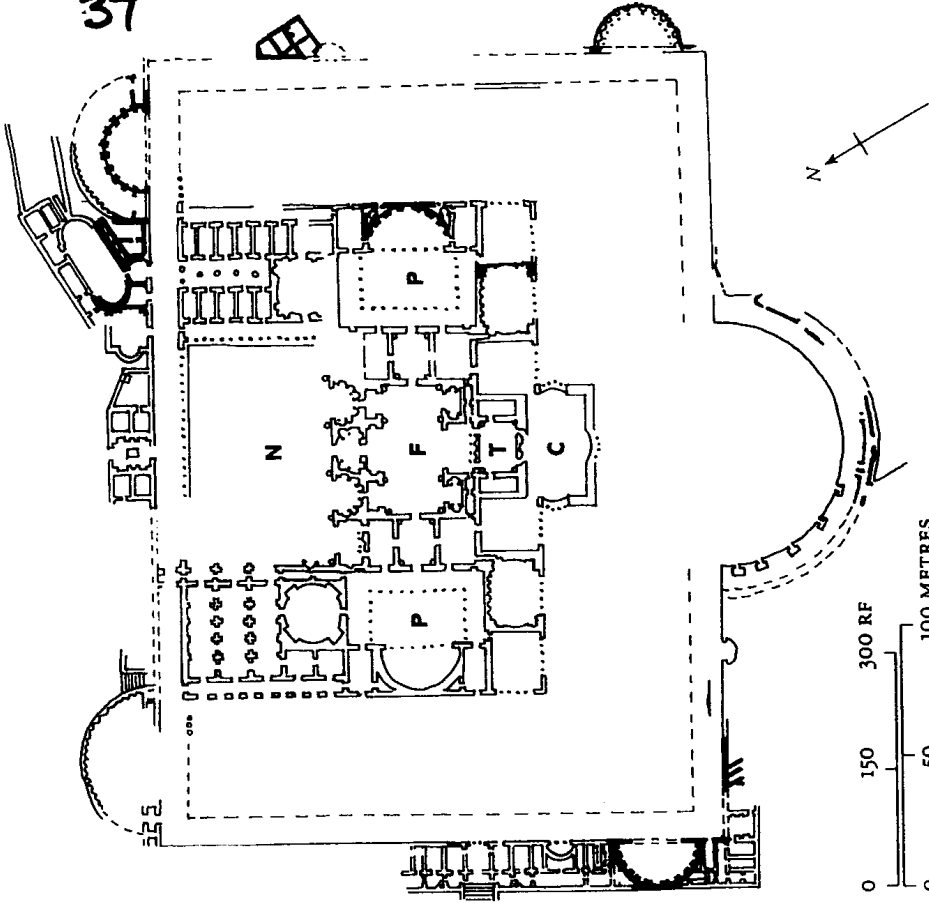




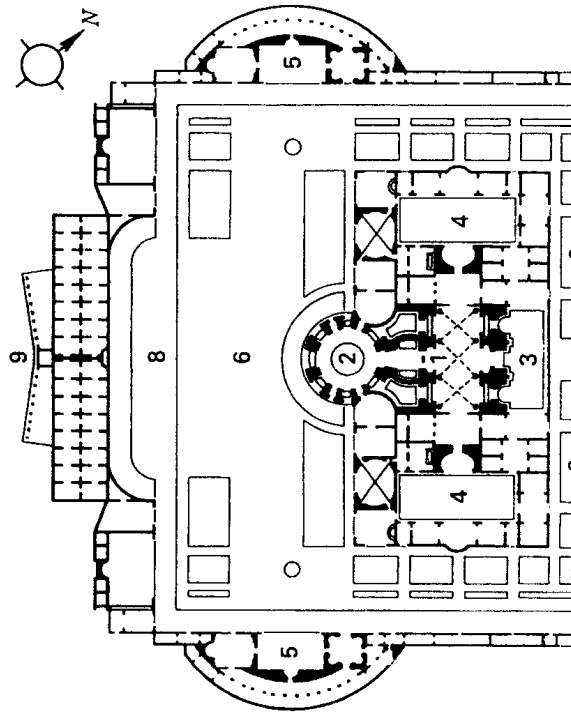


37

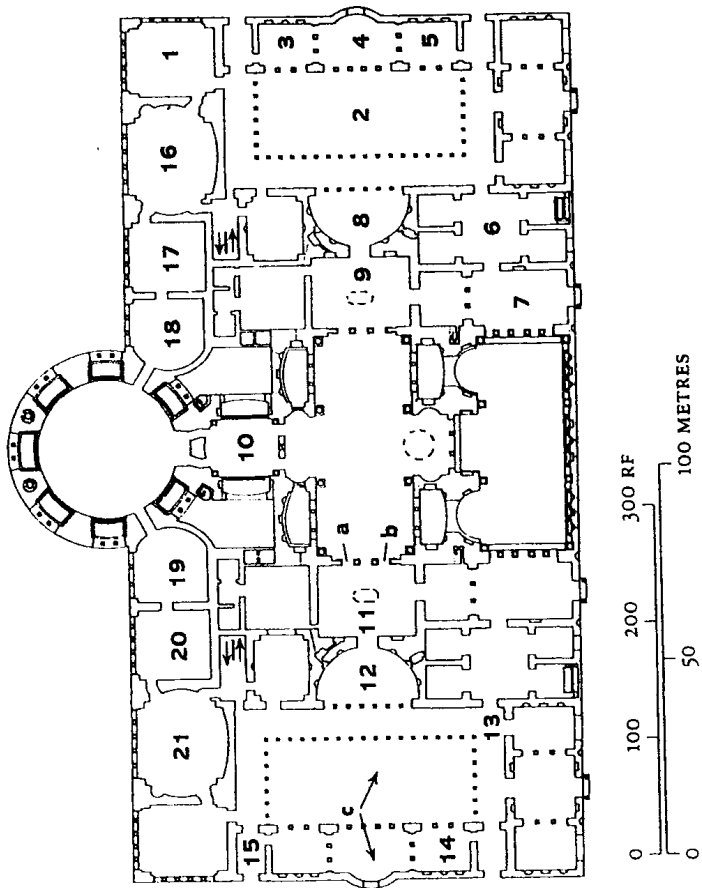
A



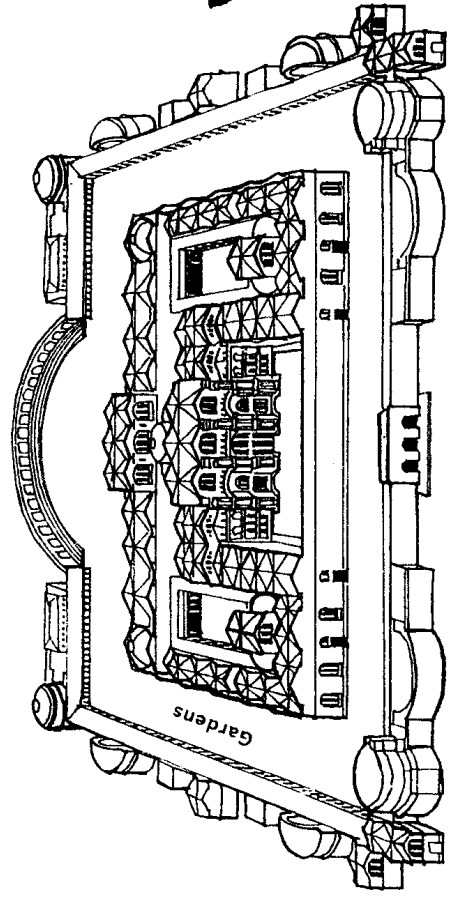
B




C




D




A



B




C



D



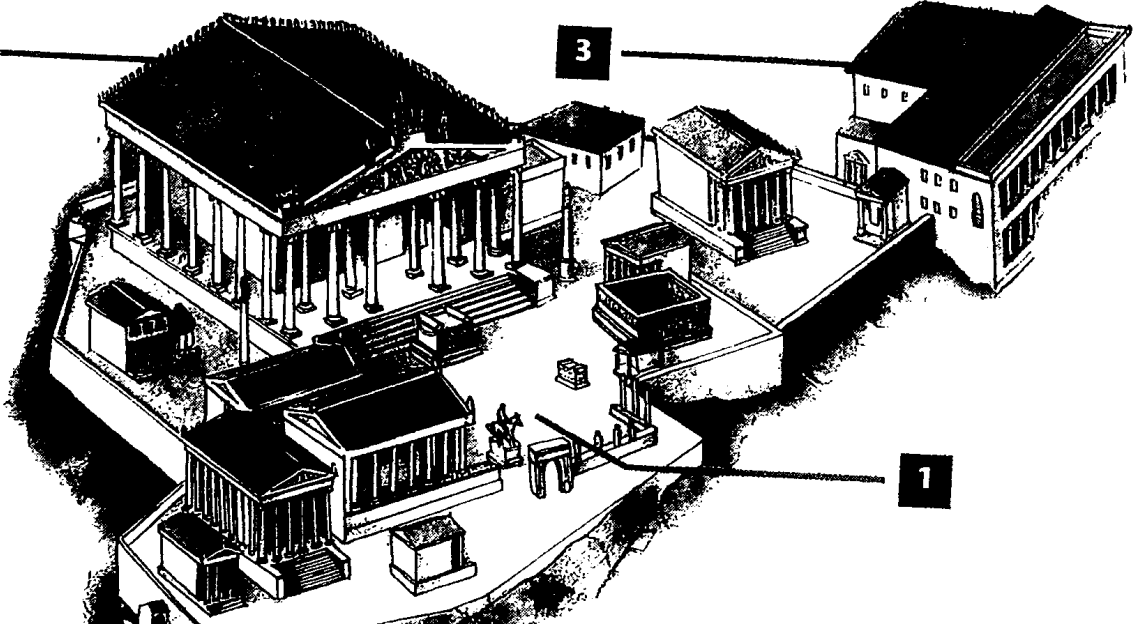
5

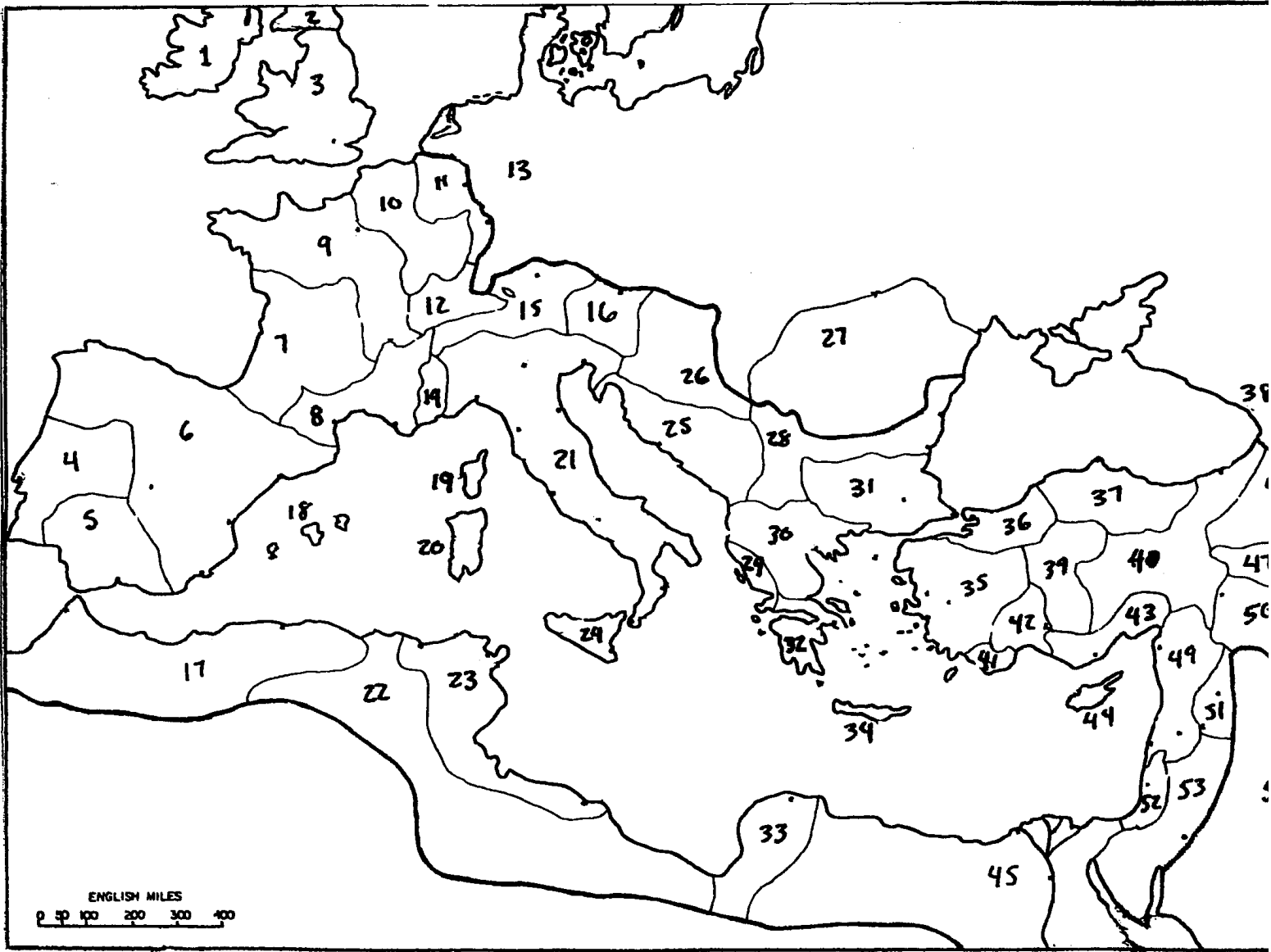


2

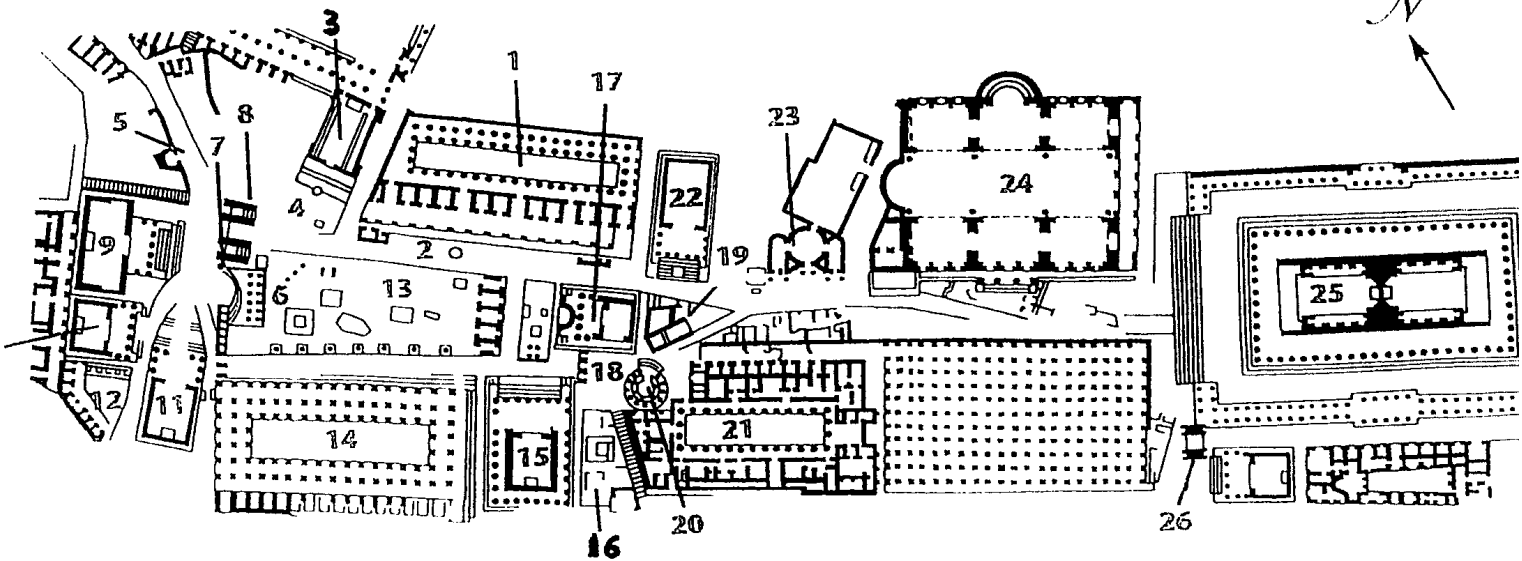
3

1





Map B



Map C

